

【そろばんの珠読み】

7桁から9桁 8問

名前 _____

No.010

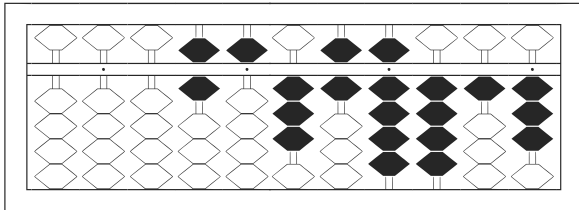
★たま よ すうじ かそろばんの珠を^{たま}読んで^よ数字で^{すうじ}書^かきましょう。

分 秒

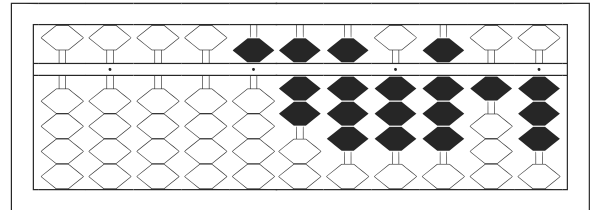
みぎはし けた いち くらい
(※右端の桁を一の位とします)

正解数

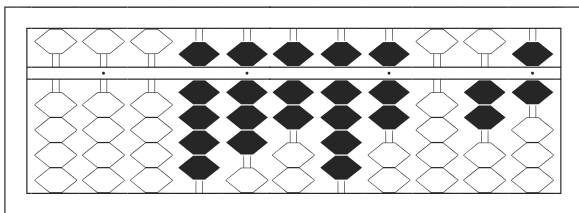
/ 8



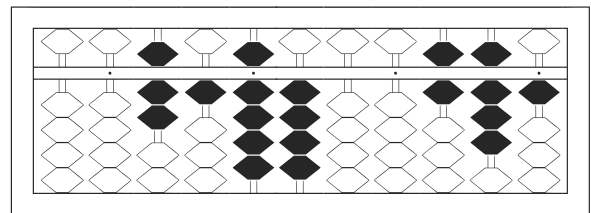
/



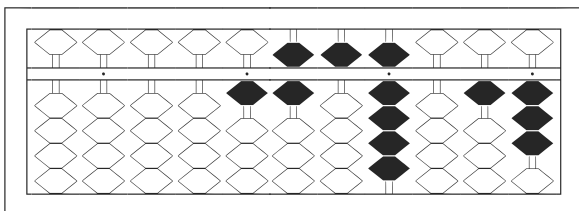
2



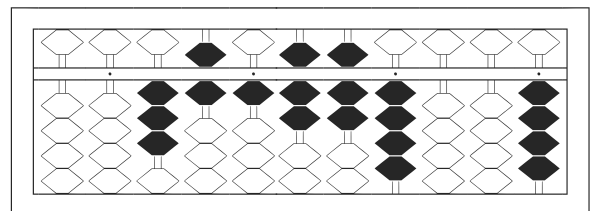
3



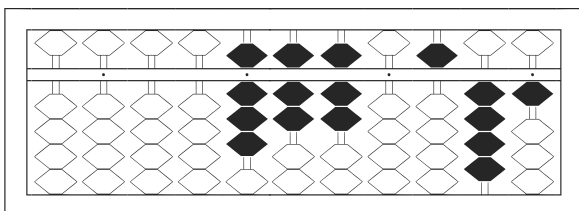
4



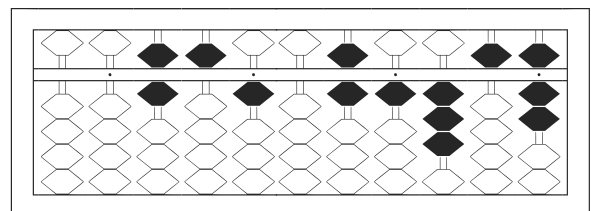
5



6



7



8

【そろばんの珠読み】

7桁から9桁 8問

No.010

名前 _____

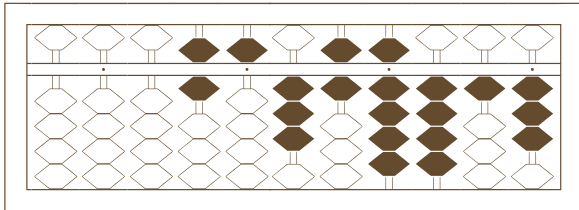
★たま よ すうじ かそろばんの珠を^{たま}読んで^よ数字で^{すうじ}書^かきましょう。

分 秒

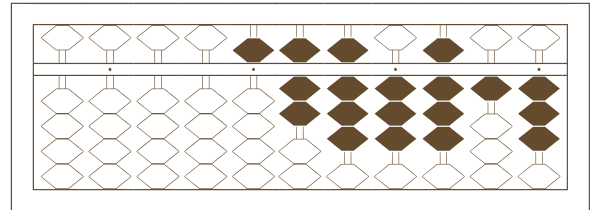
みぎはし けた いち くらい
(※右端の桁を一の位とします)

正解数

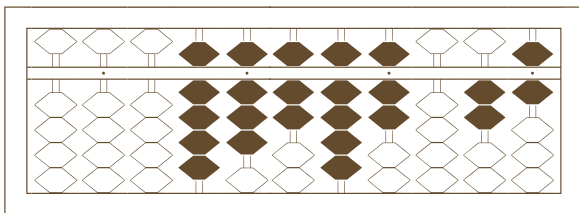
/ 8



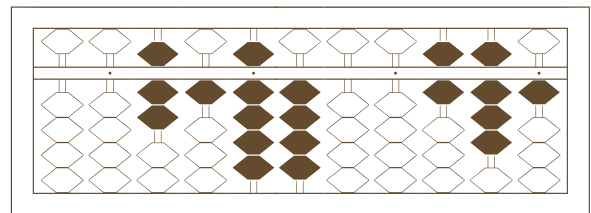
/



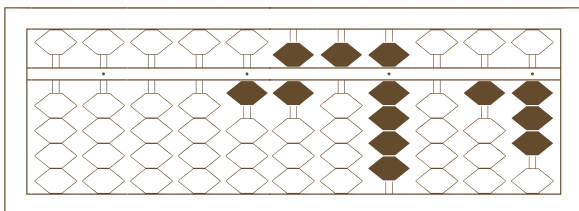
2



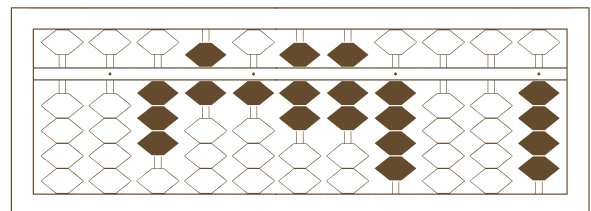
3



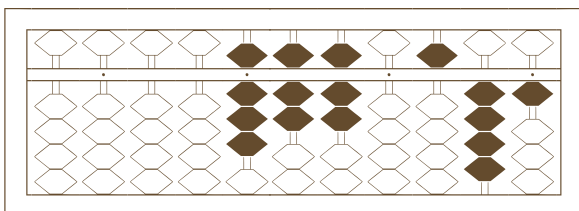
4



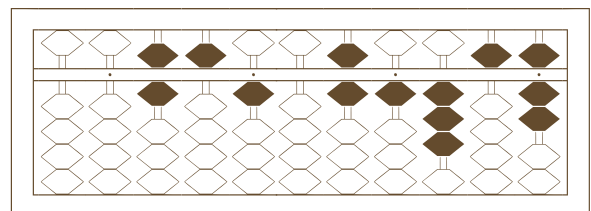
5



6



7



8

【そろばんの珠読み】

7桁から9桁 8問

名前 _____

No.010

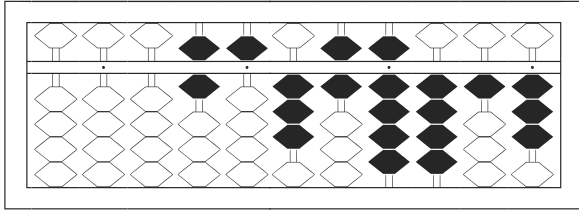
★たま よ すうじ かそろばんの珠を読んで数字で書きましょう。

分 秒

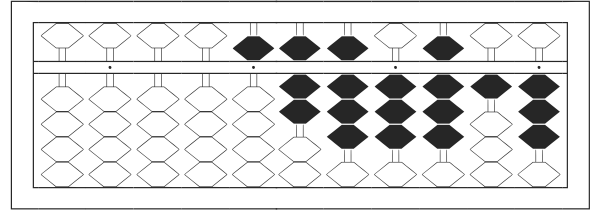
みぎはし けた いち くらい
(※右端の桁を一の位とします)

正解数

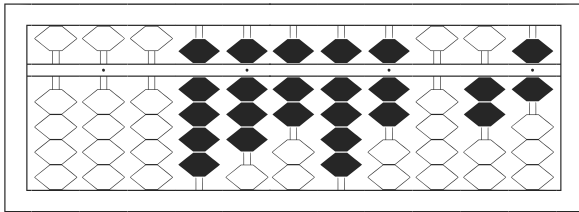
/ 8



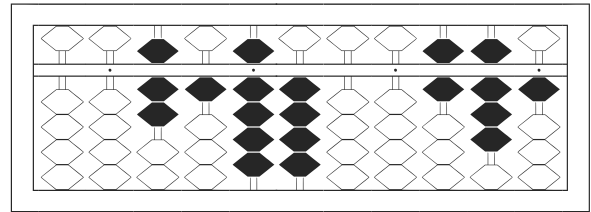
1 / 65,369,413



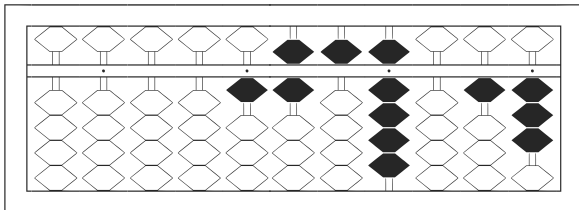
2 / 5,783,813



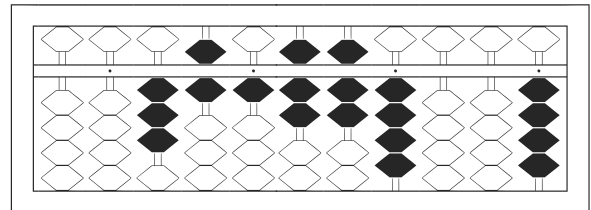
3 / 98,797,026



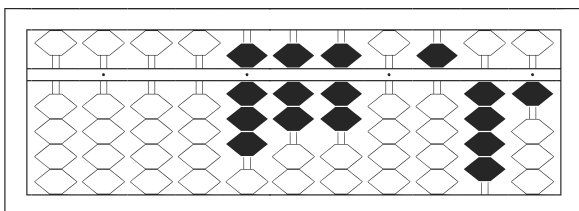
4 / 719,400,681



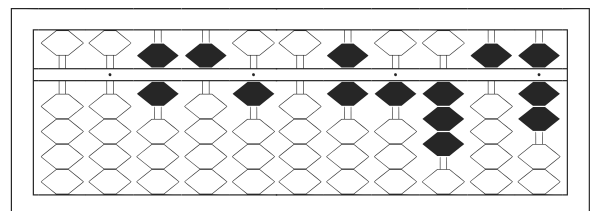
5 / 1,659,013



6 / 361,774,004



7 / 8,770,541



8 / 651,061,357