

【そろばんの珠読み】

4桁から6桁 12問

No.009

名前 _____

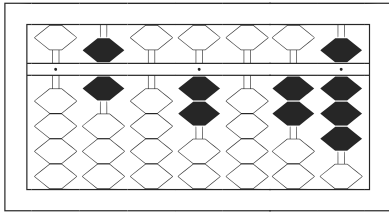
★たま よ すうじ かそろばんの珠を読んで数字で書きましょう。

分 秒

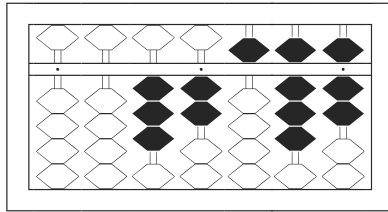
みぎはし けた いち くらい
(※右端の桁を一の位とします)

正解数

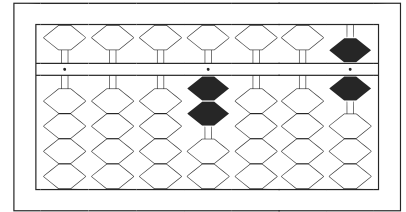
/ 12



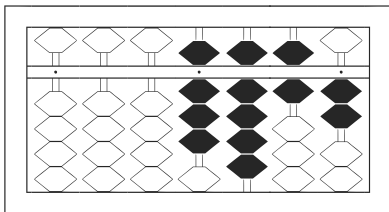
/



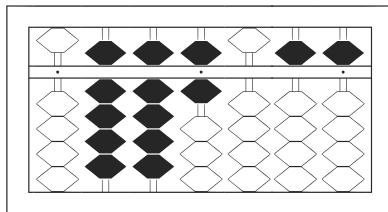
2



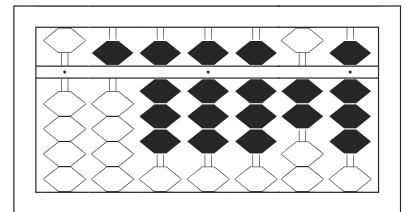
3



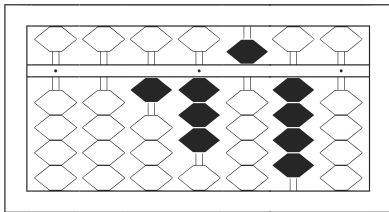
4



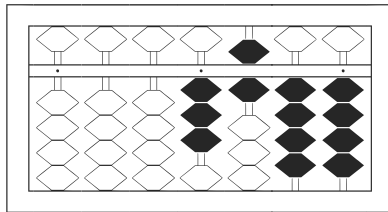
5



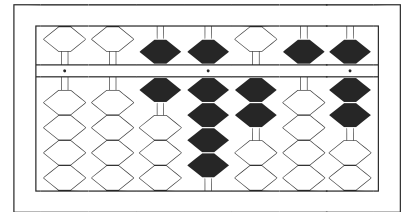
6



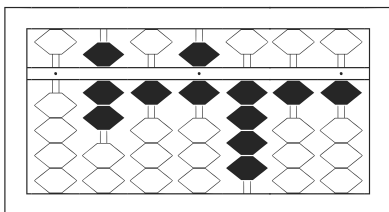
7



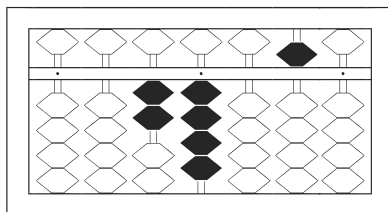
8



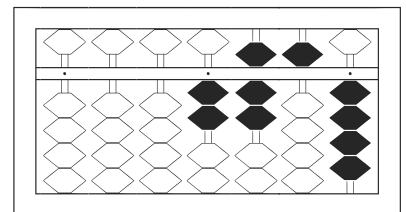
9



10



11



12

【そろばんの珠読み】

4桁から6桁 12問

No.009

名前 _____

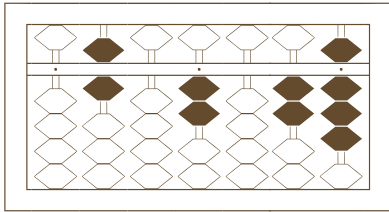
★たま よ すうじ かそろばんの珠を読んで数字で書きましょう。

分 秒

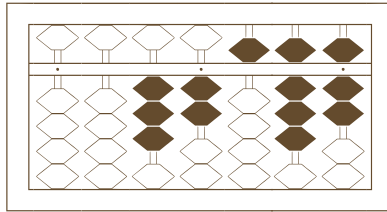
みぎはし けた いち くらい
(※右端の桁を一の位とします)

正解数

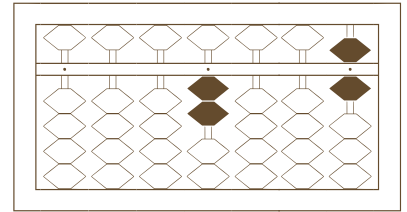
/ 12



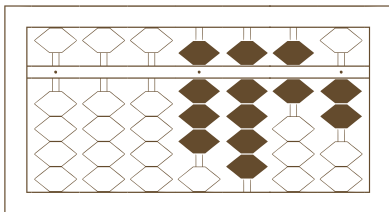
/



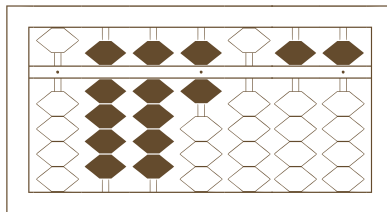
2



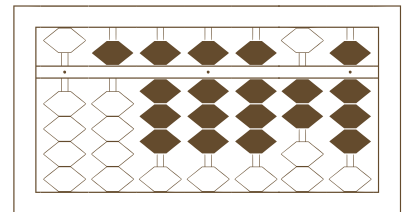
3



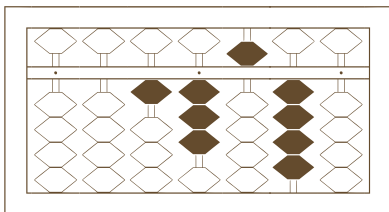
4



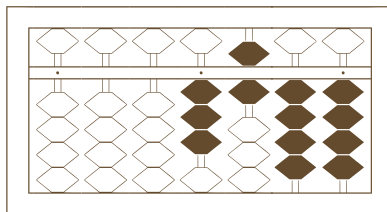
5



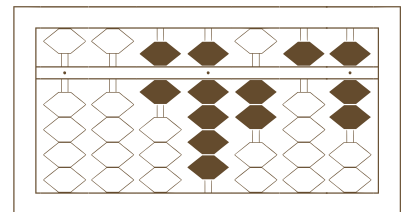
6



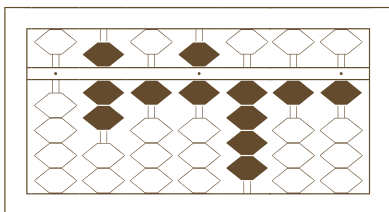
7



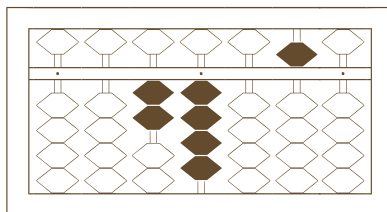
8



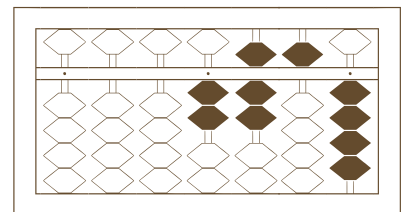
9



10



11



12

【そろばんの珠読み】

4桁から6桁 12問

名前 _____

No.009

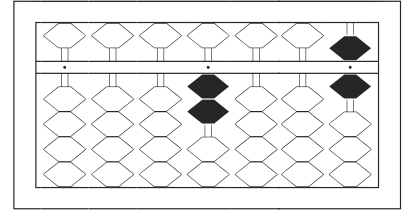
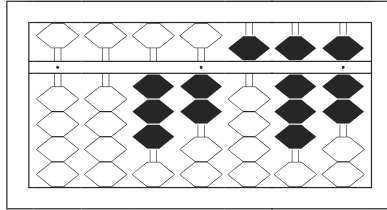
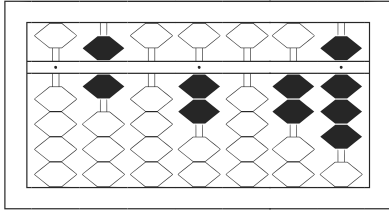
★たま よ すうじ かそろばんの珠を読んで数字で書きましょう。

分 秒

みぎはし けた いち くらい
(※右端の桁を一の位とします)

正解数

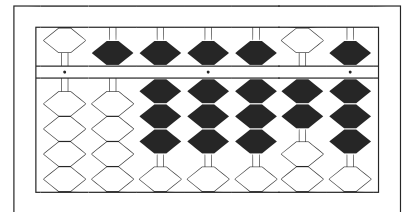
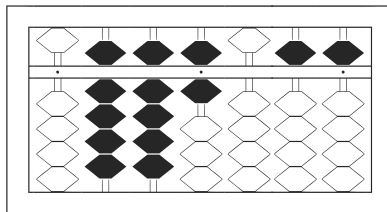
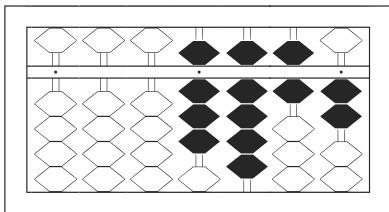
/ 12



1 602,028

2 32,587

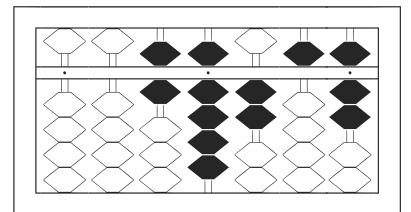
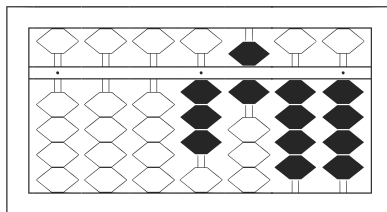
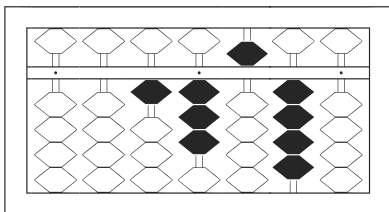
3 2,006



4 8,962

5 996,055

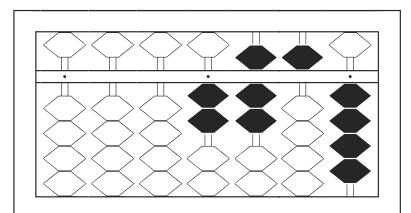
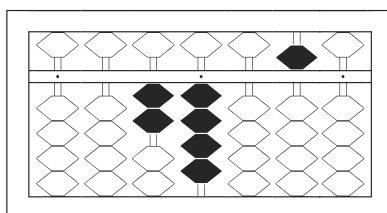
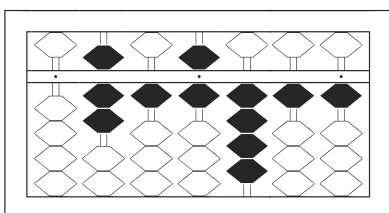
6 588,828



7 13,540

8 3,644

9 69,257



10 716,411

11 24,050

12 2,754