

【そろばんの珠読み】

4桁から6桁 12問

No.008

名前 _____

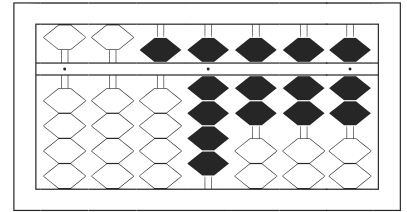
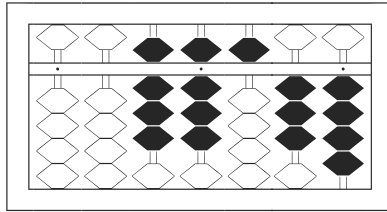
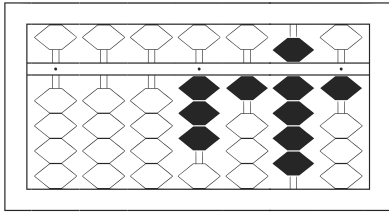
★たま よ すうじ かそろばんの珠を読んで数字で書きましょう。

分 秒

みぎはし けた いち くらい
(※右端の桁を一の位とします)

正解数

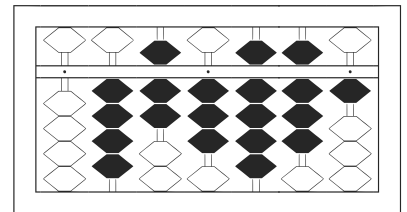
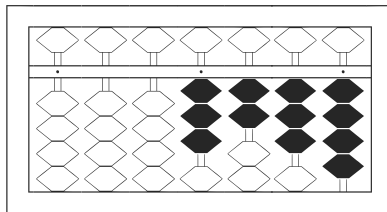
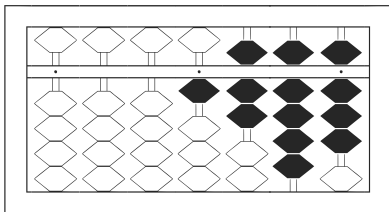
/ 12



/

2

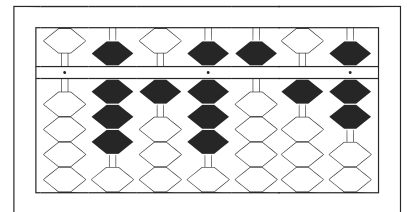
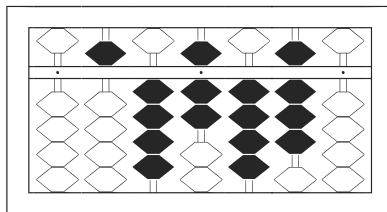
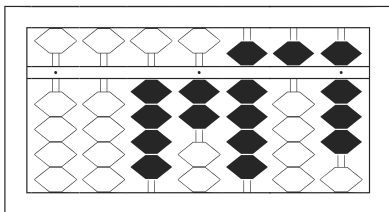
3



4

5

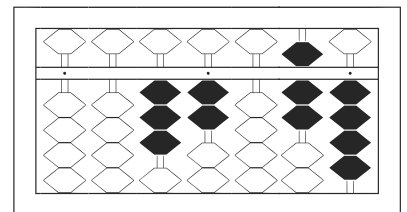
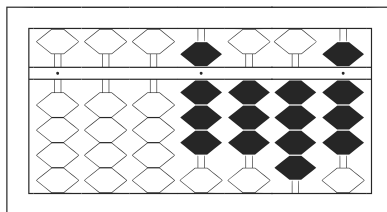
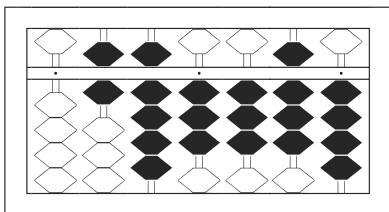
6



7

8

9



10

11

12

【そろばんの珠読み】

4桁から6桁 12問

No.008

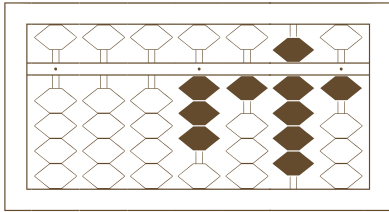
名前 _____

★たま よ すうじ かそろばんの珠を読んで数字で書きましょう。

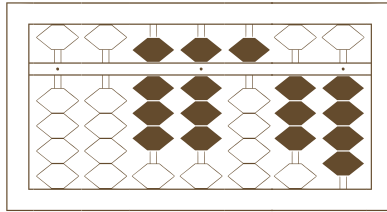
分 秒

みぎはし けた いち くらい
(※右端の桁を一の位とします)

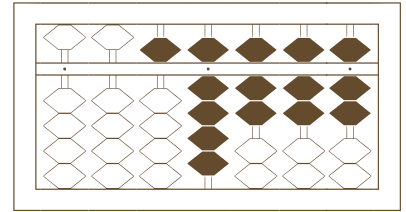
正解数 / 12



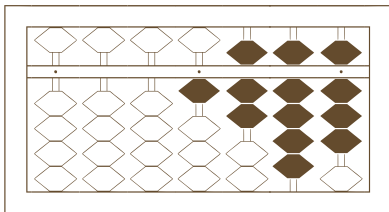
/



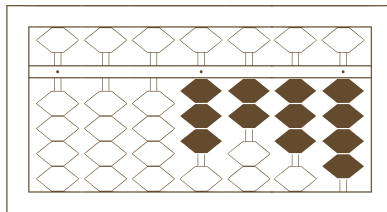
2



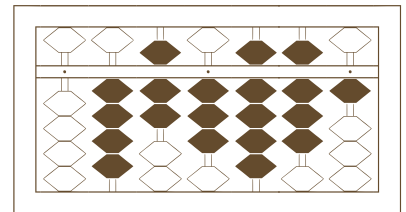
3



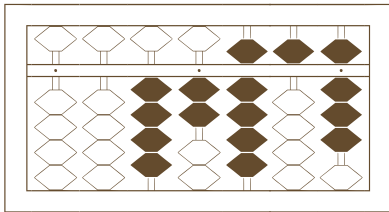
4



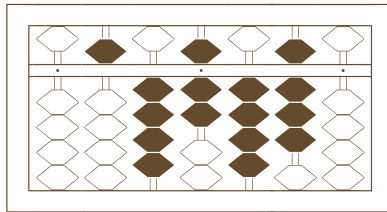
5



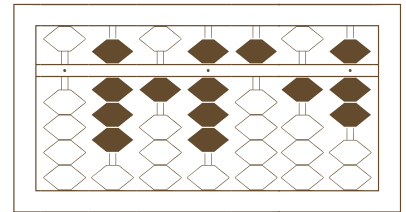
6



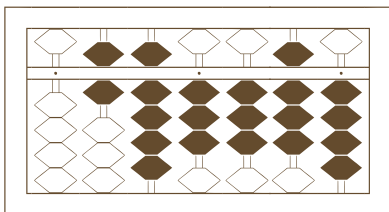
7



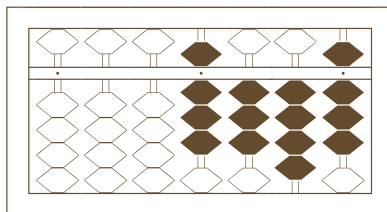
8



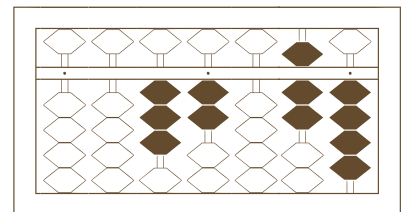
9



10



11



12

【そろばんの珠読み】

4桁から6桁 12問

名前 _____

No.008

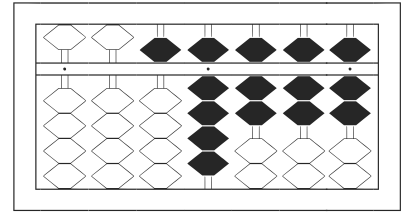
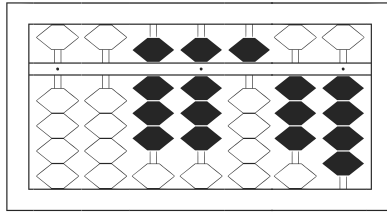
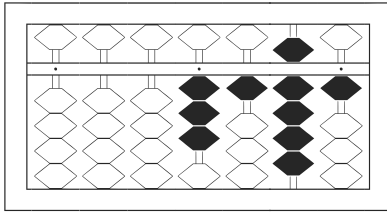
★たま よ すうじ かそろばんの珠を読んで数字で書きましょう。

分 秒

みぎはし けた いち くらい
(※右端の桁を一の位とします)

正解数

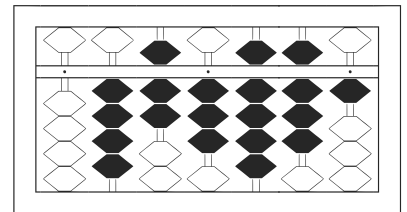
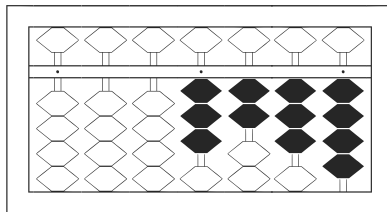
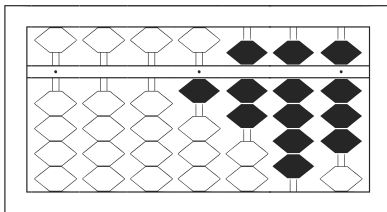
/ 12



1 3,191

2 88,534

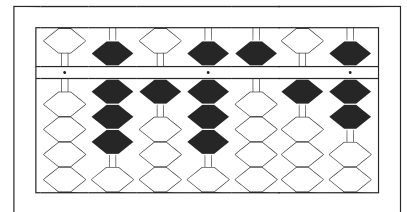
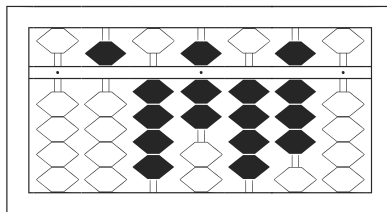
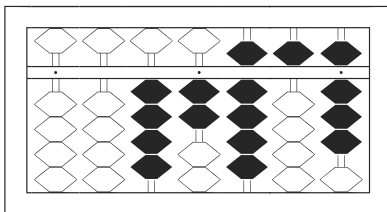
3 59,777



4 1,798

5 3,234

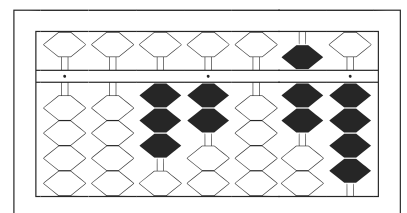
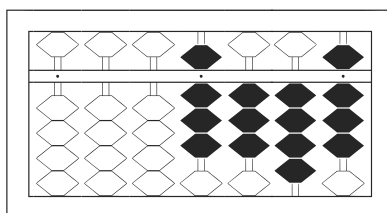
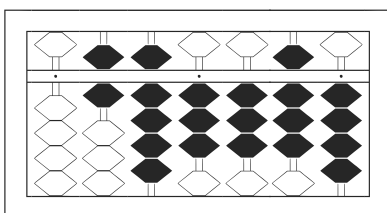
6 473,981



7 42,958

8 547,480

9 818,517



10 693,384

11 8,348

12 32,074