

【そろばんの珠読み】

4桁から6桁 12問

No.007

名前 _____

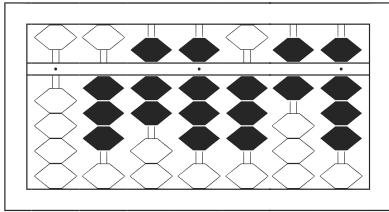
★たま よ すうじ かそろばんの珠を読んで数字で書きましょう。

分 秒

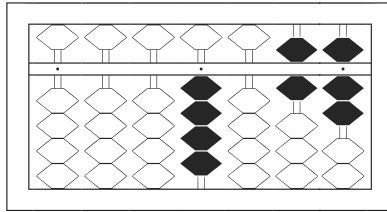
みぎはし けた いち くらい
(※右端の桁を一の位とします)

正解数

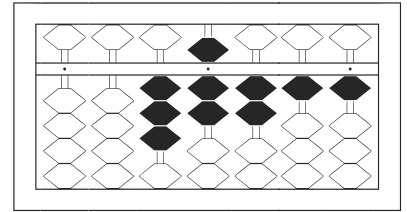
/ 12



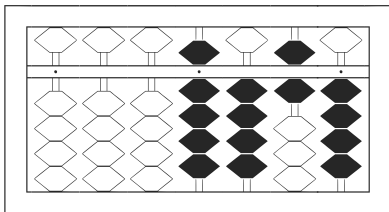
/



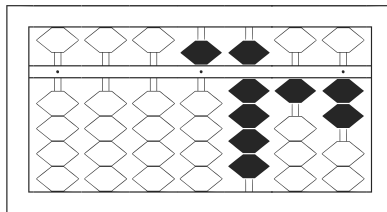
2



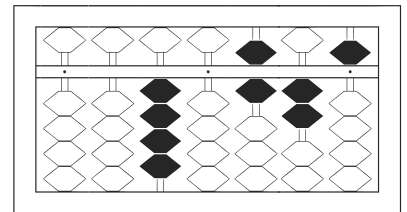
3



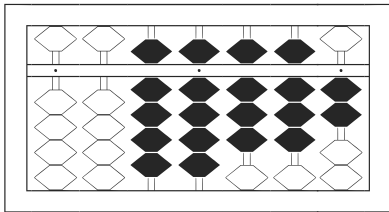
4



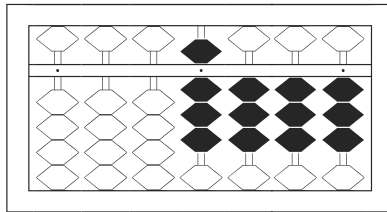
5



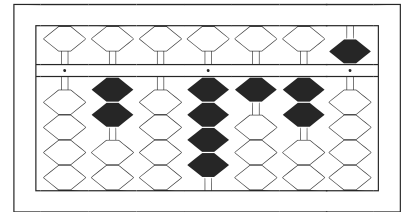
6



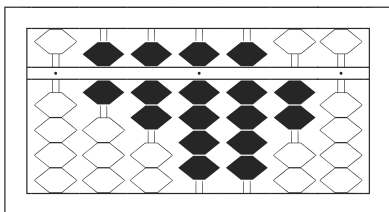
7



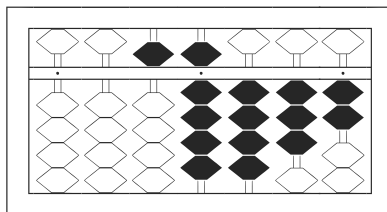
8



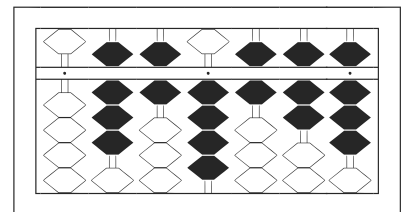
9



10



11



12

【そろばんの珠読み】

4桁から6桁 12問

No.007

名前 _____

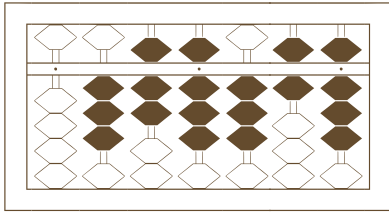
★たま よ すうじ かそろばんの珠を読んで数字で書きましょう。

分 秒

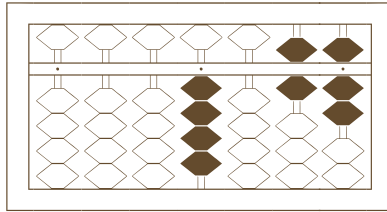
みぎはし けた いち くらい
(※右端の桁を一の位とします)

正解数

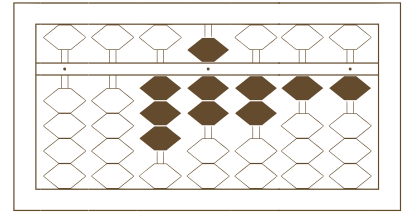
/ 12



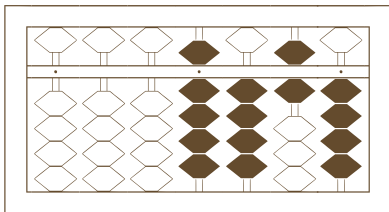
/



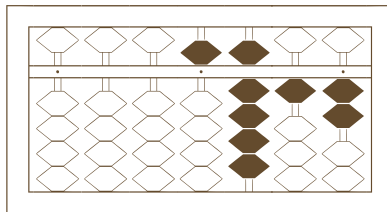
2



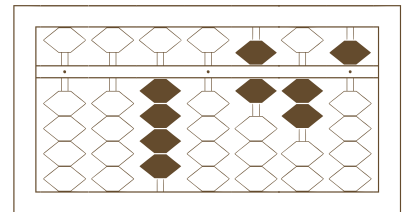
3



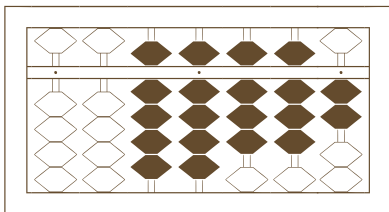
4



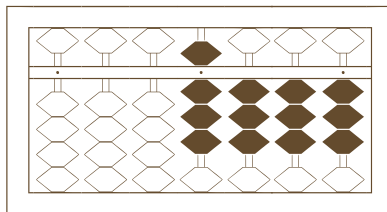
5



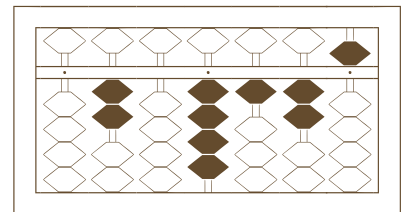
6



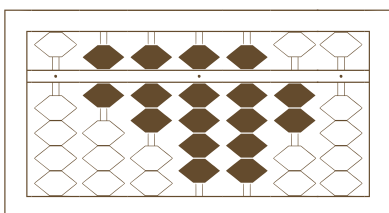
7



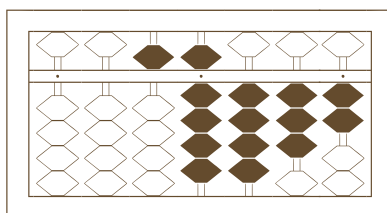
8



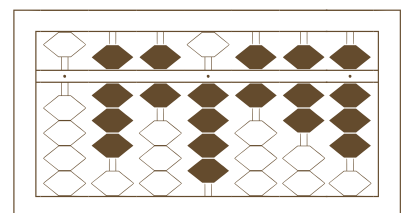
9



10



11



12

【そろばんの珠読み】

4桁から6桁 12問

名前 _____

No.007

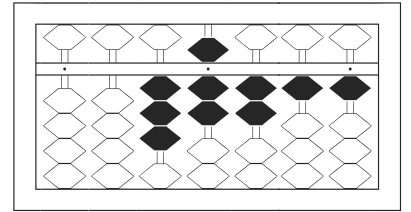
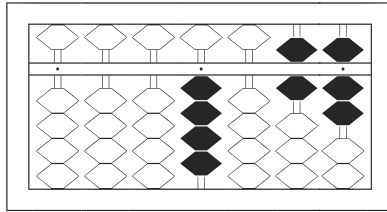
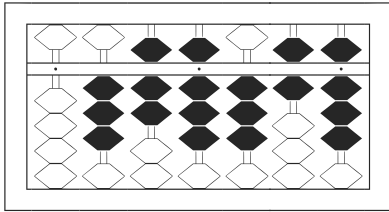
★たま よ すうじ かそろばんの珠を読んで数字で書きましょう。

分 秒

みぎはし けた いち くらい
(※右端の桁を一の位とします)

正解数

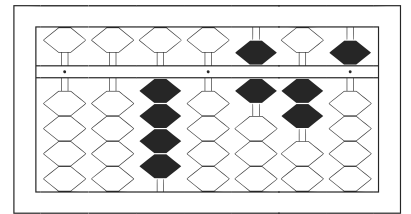
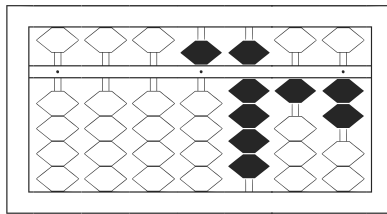
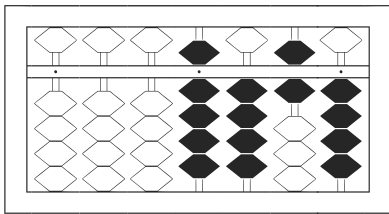
/ 12



1 / 378,368

2 / 4,067

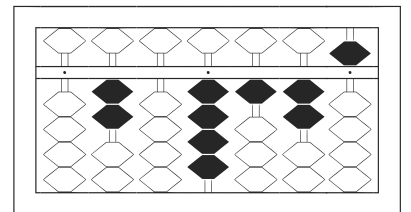
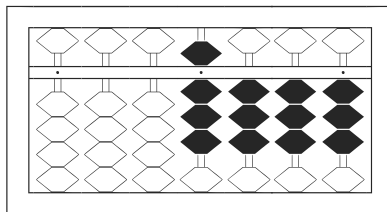
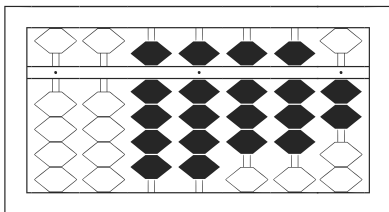
3 / 37,211



4 / 9,464

5 / 5,912

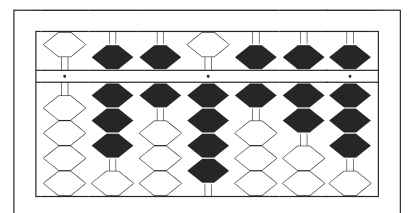
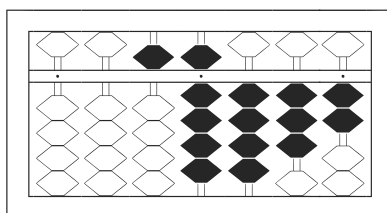
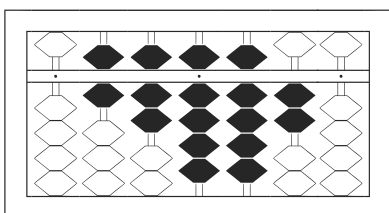
6 / 40,625



7 / 99,882

8 / 8,333

9 / 204,125



10 / 679,920

11 / 59,432

12 / 864,678