

【そろばんの珠読み】

4桁から6桁 12問

No.006

名前 _____

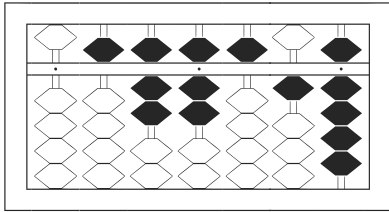
★たま よ すうじ かそろばんの珠を読んで数字で書きましょう。

分 秒

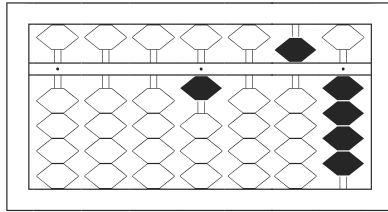
みぎはし けた いち くらい
(※右端の桁を一の位とします)

正解数

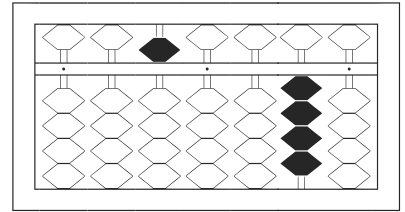
/ 12



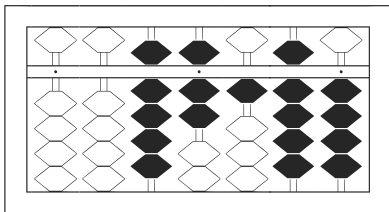
/



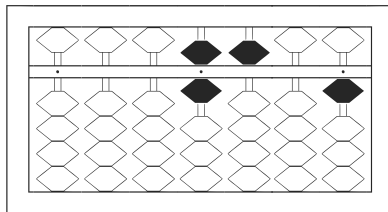
2



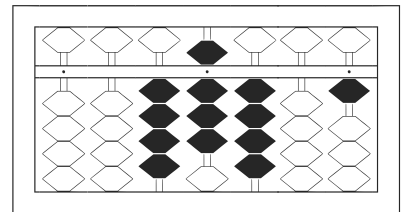
3



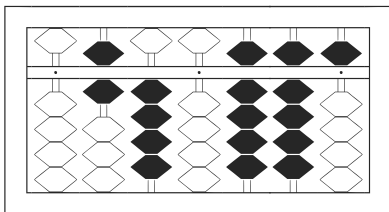
4



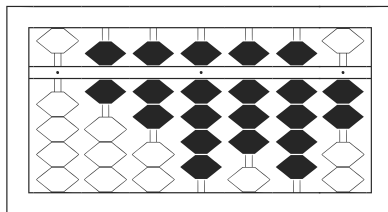
5



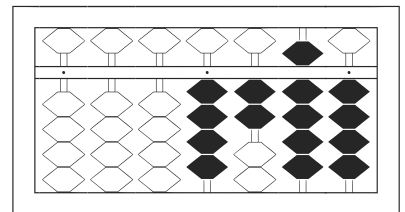
6



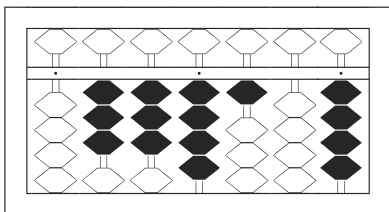
7



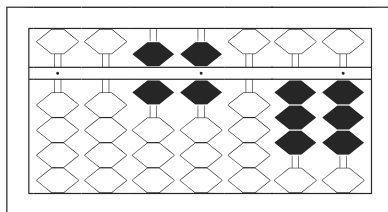
8



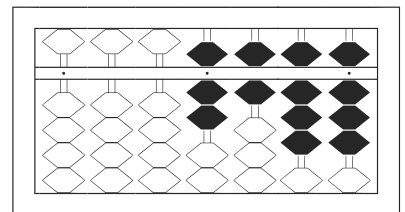
9



10



11



12

【そろばんの珠読み】

4桁から6桁 12問

名前 _____

No.006

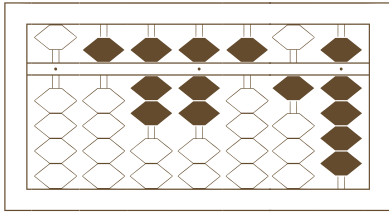
★たま よ すうじ かそろばんの珠を読んで数字で書きましょう。

分 秒

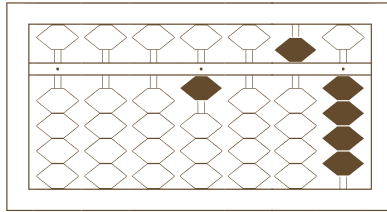
みぎはし けた いち くらい
(※右端の桁を一の位とします)

正解数

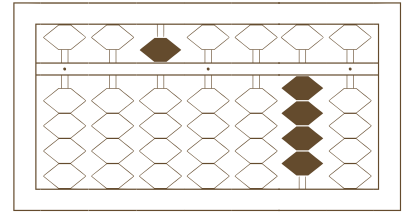
/ 12



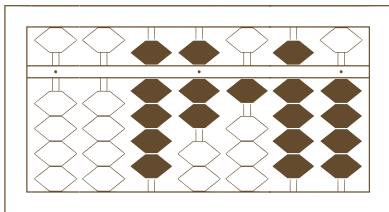
10



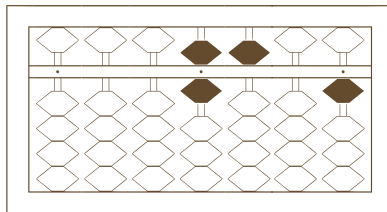
20



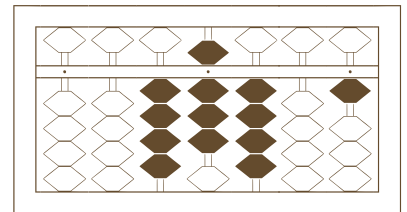
30



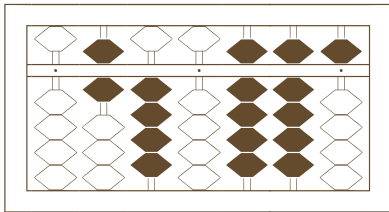
40



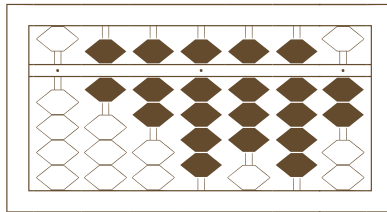
50



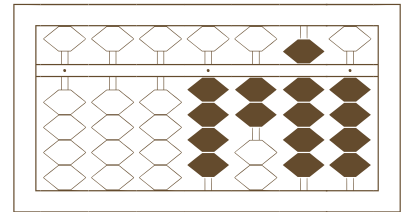
60



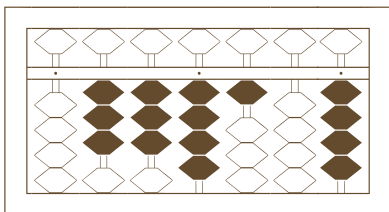
70



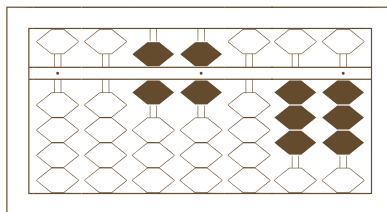
80



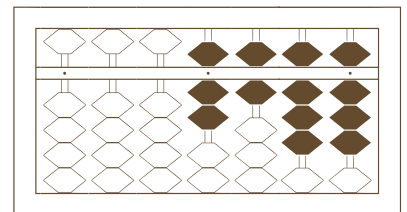
90



100



110



120

【そろばんの珠読み】

4桁から6桁 12問

名前 _____

No.006

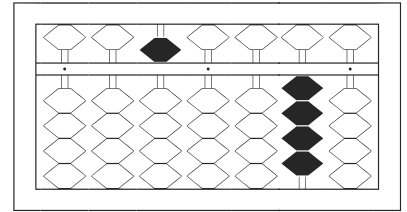
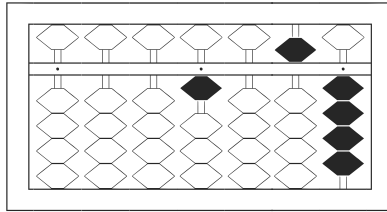
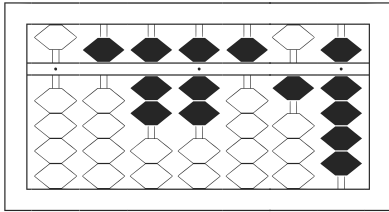
★たま よ すうじ かそろばんの珠を読んで数字で書きましょう。

分 秒

みぎはし けた いち くらい
(※右端の桁を一の位とします)

正解数

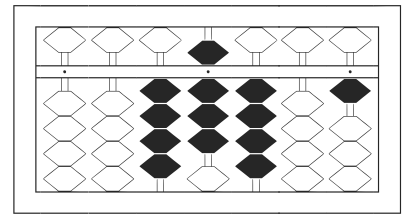
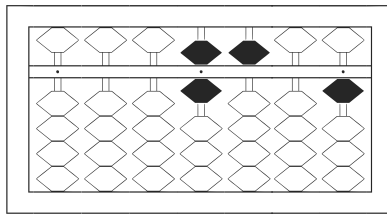
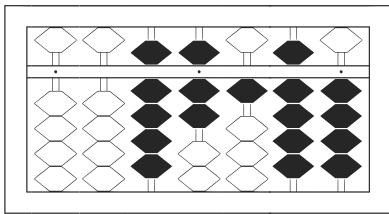
/ 12



1 577,519

2 1,054

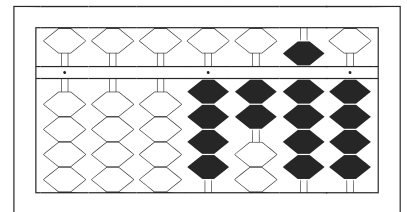
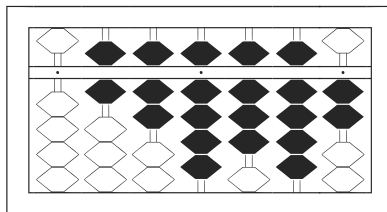
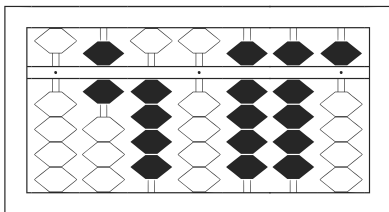
3 50,040



4 97,194

5 6,501

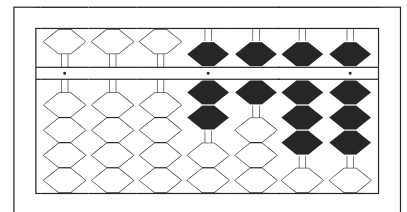
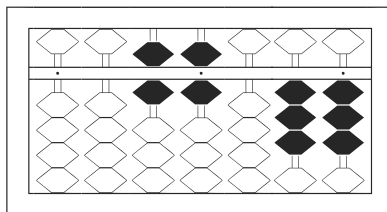
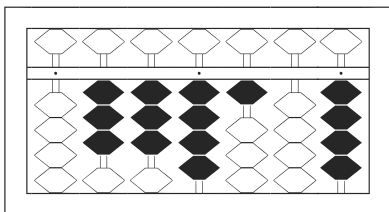
6 48,401



7 640,995

8 679,892

9 4,294



10 334,104

11 66,033

12 7,688