

# 【そろばんの珠読み】

4桁から6桁 12問

No.005

名前 \_\_\_\_\_

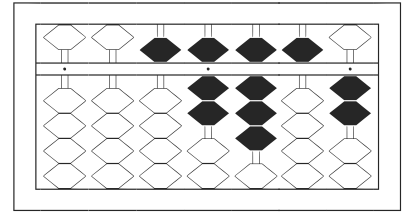
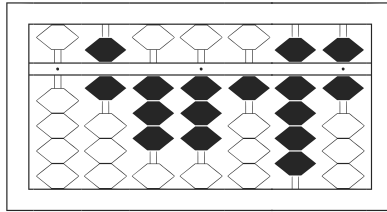
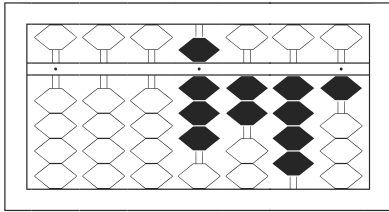
★たま よ すうじ かそろばんの珠を読んで数字で書きましょう。

分 秒

みぎはし けた いち くらい  
(※右端の桁を一の位とします)

正解数

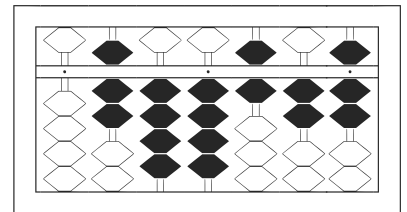
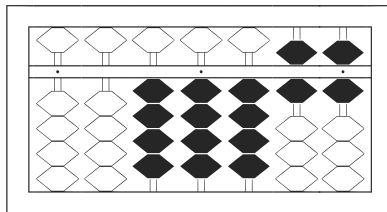
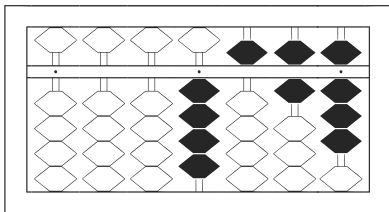
/ 12



/

2

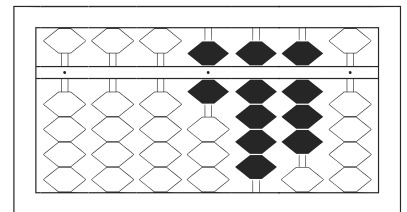
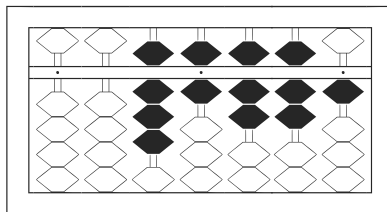
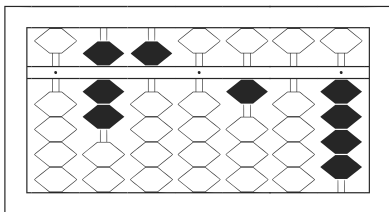
3



4

5

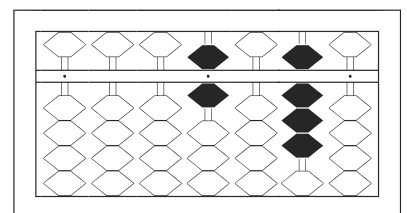
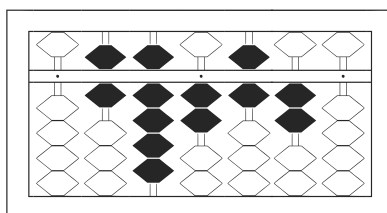
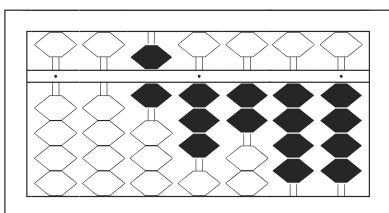
6



7

8

9



10

11

12

# 【そろばんの珠読み】

4桁から6桁 12問

No.005

名前 \_\_\_\_\_

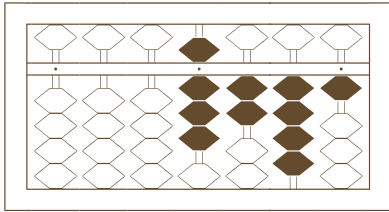
★たま よ すうじ かそろばんの珠を読んで数字で書きましょう。

分 秒

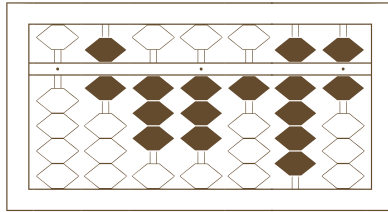
みぎはし けた いち くらい  
(※右端の桁を一の位とします)

正解数

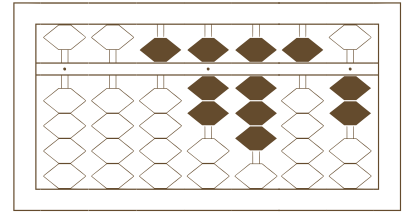
/ 12



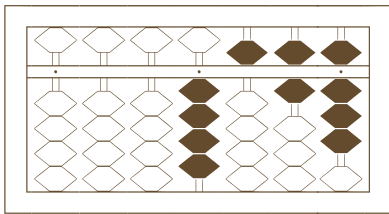
/



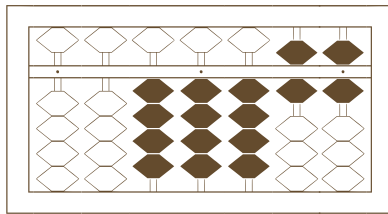
2



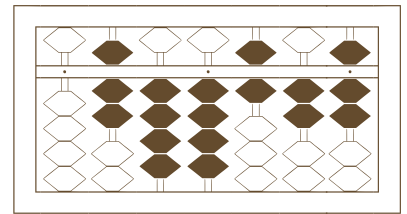
3



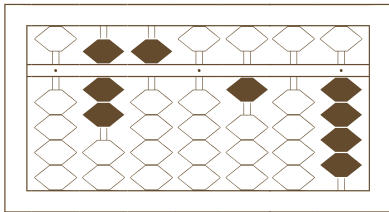
4



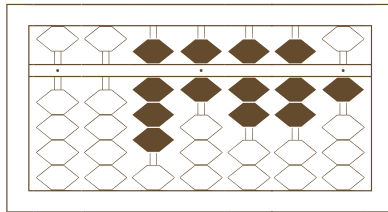
5



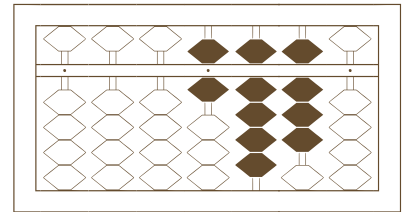
6



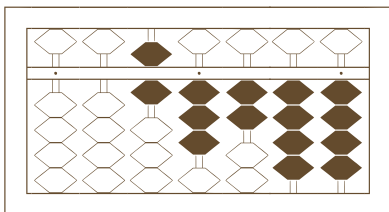
7



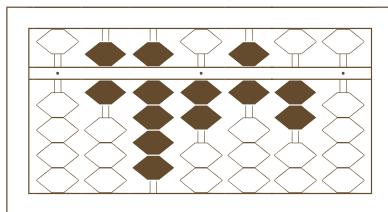
8



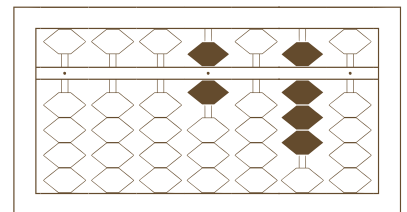
9



10



11



12

# 【そろばんの珠読み】

4桁から6桁 12問

名前 \_\_\_\_\_

No.005

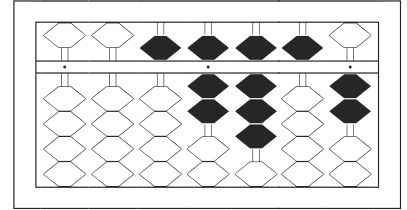
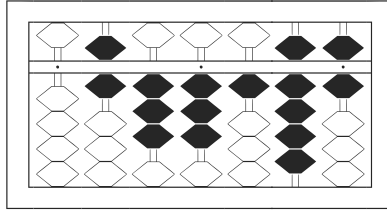
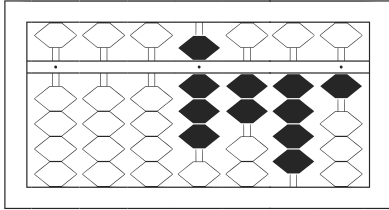
★たま よ すうじ かそろばんの珠を読んで数字で書きましょう。

分 秒

みぎはし けた いち くらい  
(※右端の桁を一の位とします)

正解数

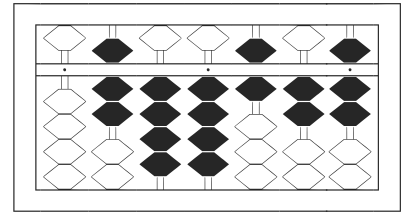
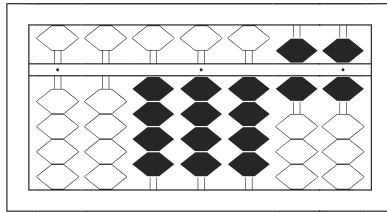
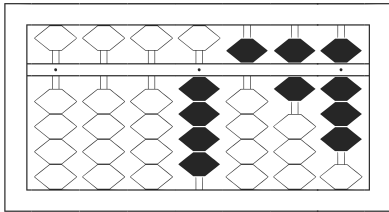
/ 12



1 8,241

2 633,196

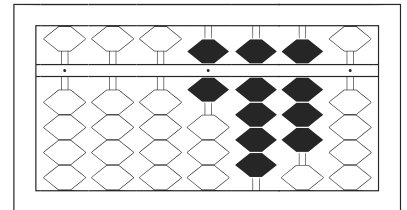
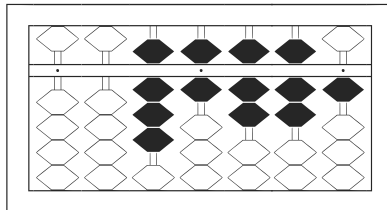
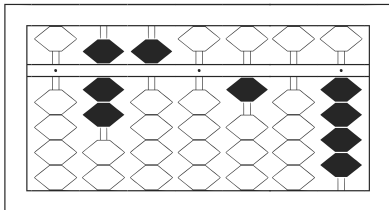
3 57,852



4 4,568

5 44,466

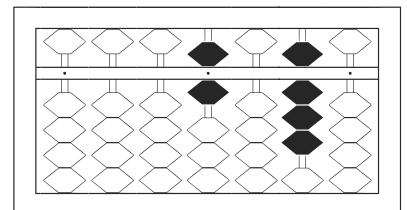
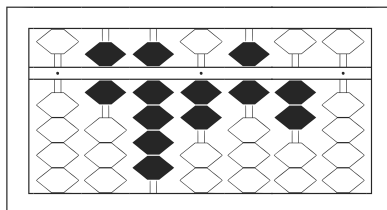
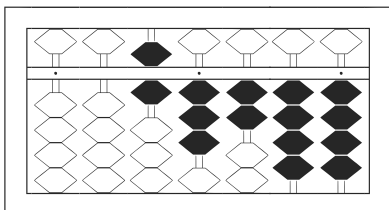
6 744,627



7 750,104

8 86,771

9 6,980



10 63,244

11 692,620

12 6,080