

# 【そろばんの珠読み】

4桁から6桁 12問

No.004

名前 \_\_\_\_\_

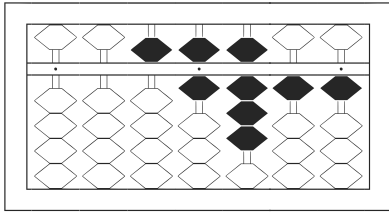
★たま よ すうじ かそろばんの珠を読んで数字で書きましょう。

分 秒

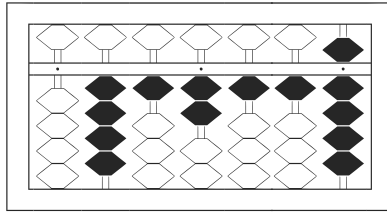
みぎはし けた いち くらい  
(※右端の桁を一の位とします)

正解数

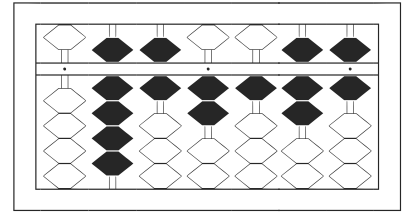
/ 12



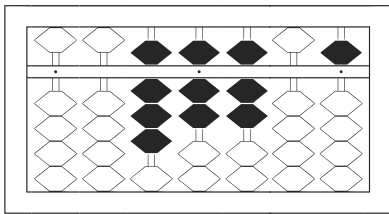
1



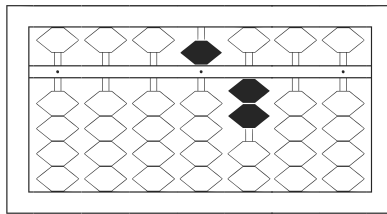
2



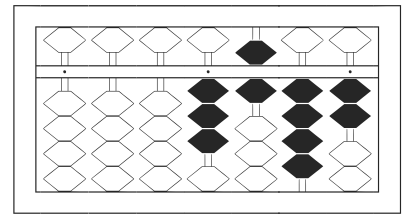
3



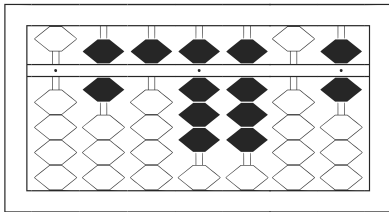
4



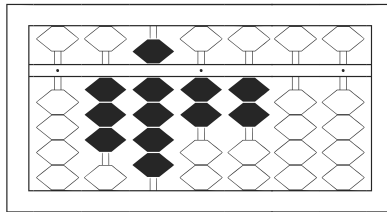
5



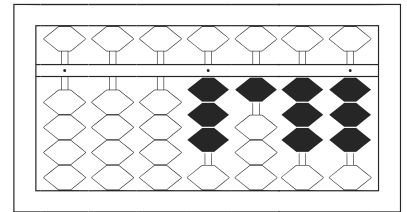
6



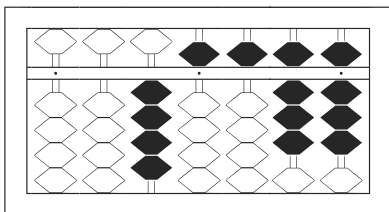
7



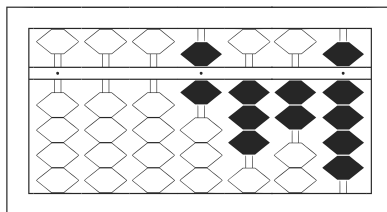
8



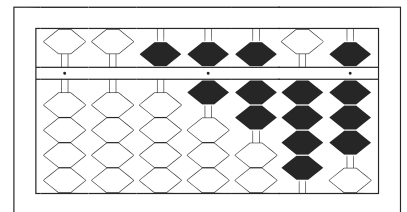
9



10



11



12

# 【そろばんの珠読み】

4桁から6桁 12問

No.004

名前 \_\_\_\_\_

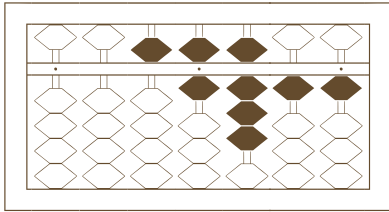
★たま よ すうじ かそろばんの珠を読んで数字で書きましょう。

分 秒

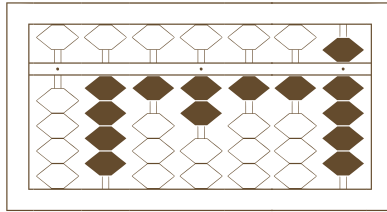
みぎはし けた いち くらい  
(※右端の桁を一の位とします)

正解数

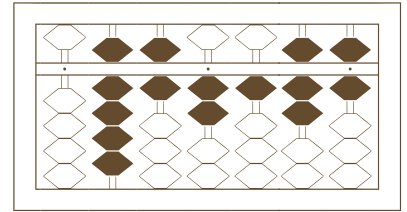
/ 12



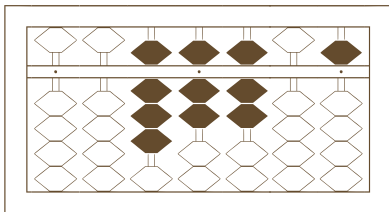
/



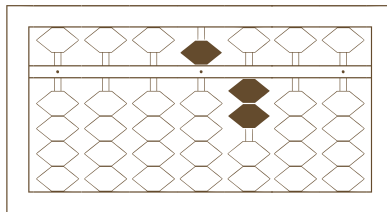
2



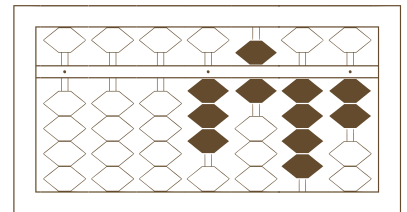
3



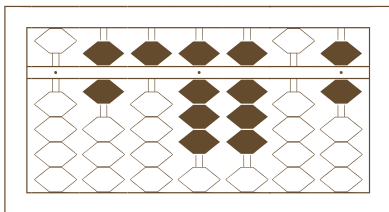
4



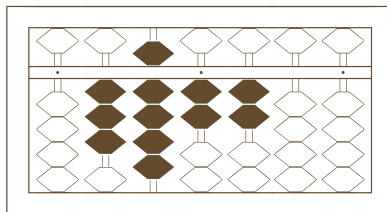
5



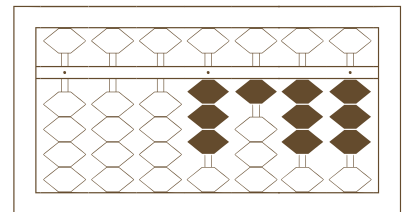
6



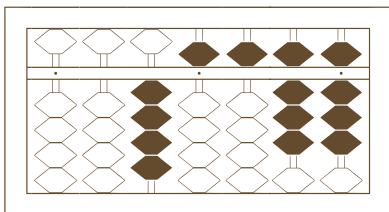
7



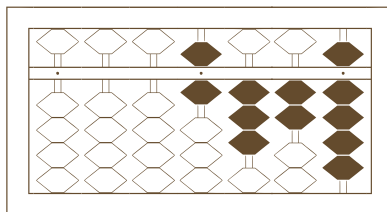
8



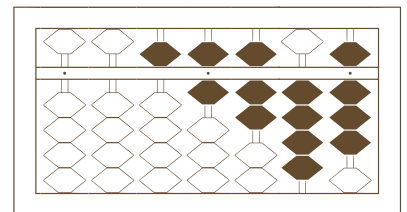
9



10



11



12

# 【そろばんの珠読み】

4桁から6桁 12問

名前 \_\_\_\_\_

No.004

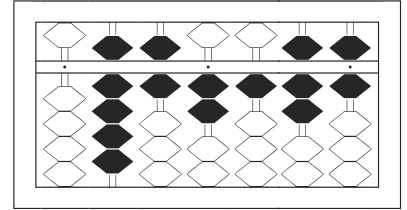
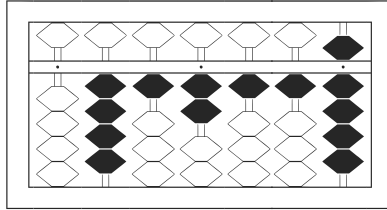
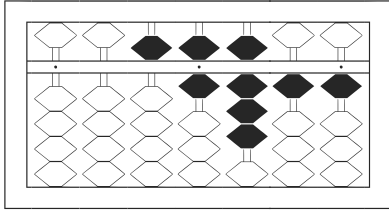
★たま よ すうじ かそろばんの珠を読んで数字で書きましょう。

分 秒

みぎはし けた いち くらい  
(※右端の桁を一の位とします)

正解数

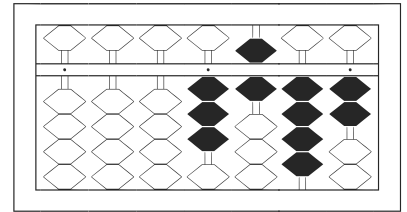
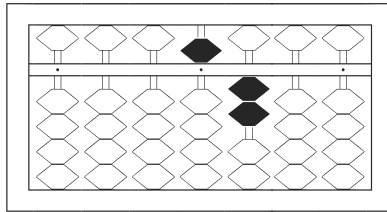
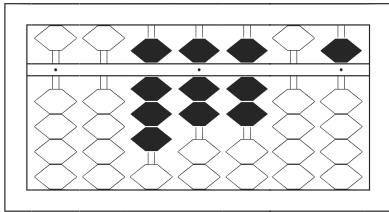
/ 12



1 56,811

2 412,119

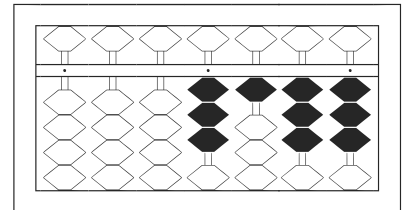
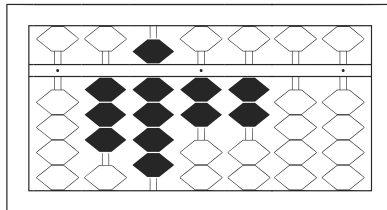
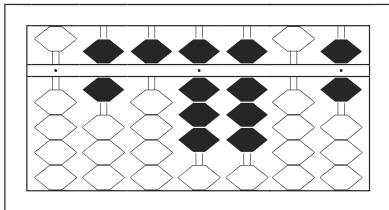
3 962,176



4 87,705

5 5,200

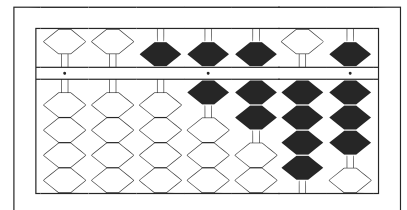
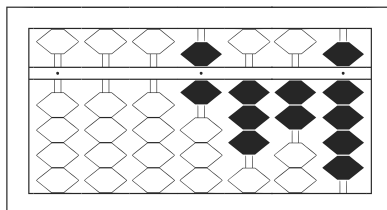
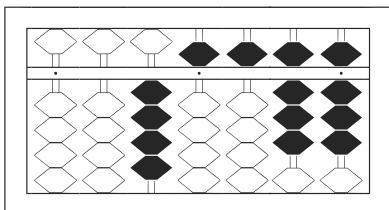
6 3,642



7 658,806

8 392,200

9 3,133



10 45,588

11 6,329

12 56,748