

【そろばんの珠読み】

4桁から6桁 12問

名前 _____

No.003

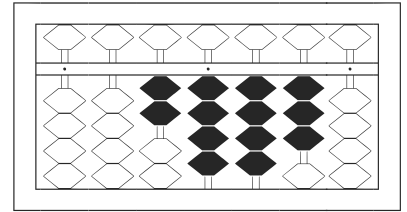
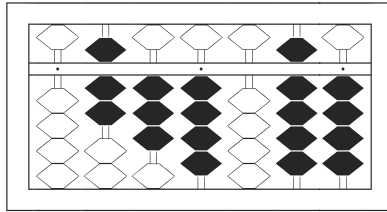
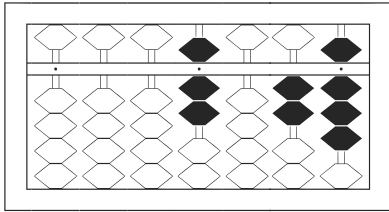
★たま よ すうじ かそろばんの珠を読んで数字で書きましょう。

分 秒

みぎはし けた いち くらい
(※右端の桁を一の位とします)

正解数

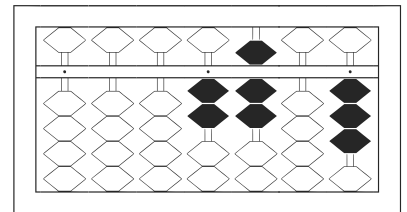
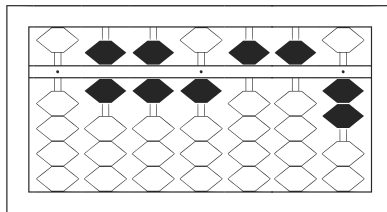
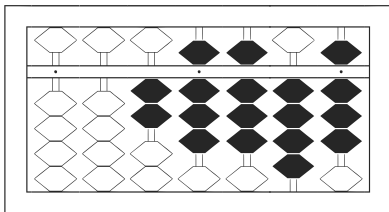
/ 12



/

2

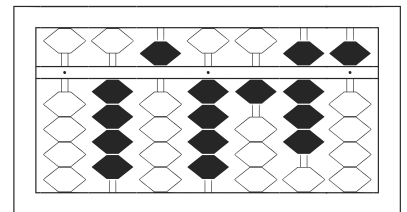
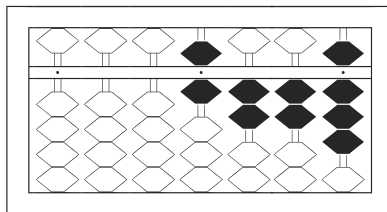
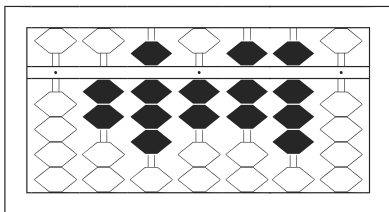
3



4

5

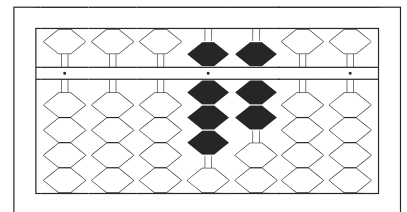
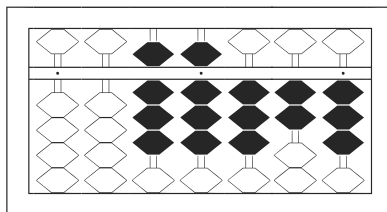
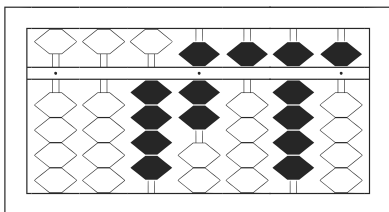
6



7

8

9



10

11

12

【そろばんの珠読み】

4桁から6桁 12問

No.003

名前 _____

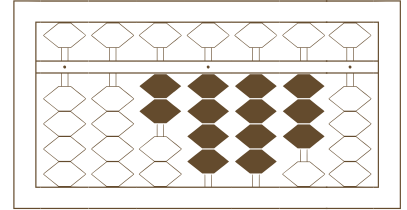
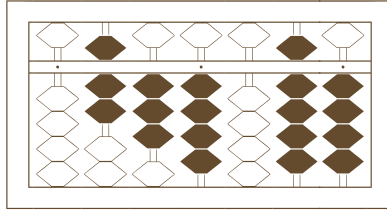
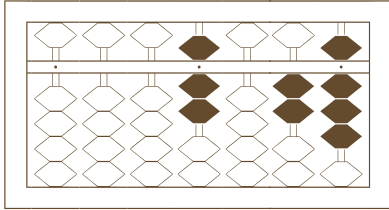
★たま よ すうじ かそろばんの珠を読んで数字で書きましょう。

分 秒

みぎはし けた いち くらい
(※右端の桁を一の位とします)

正解数

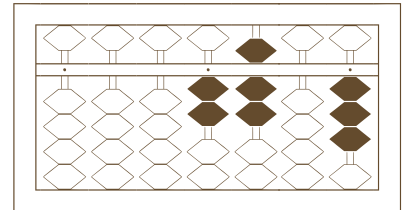
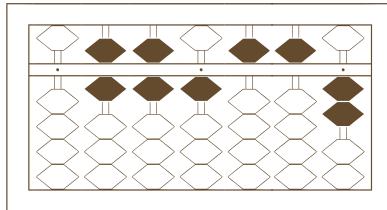
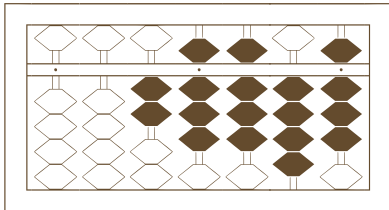
/ 12



/

2

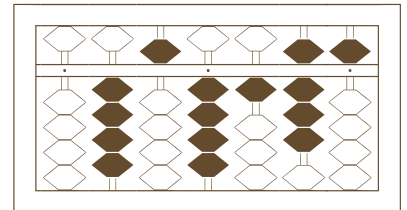
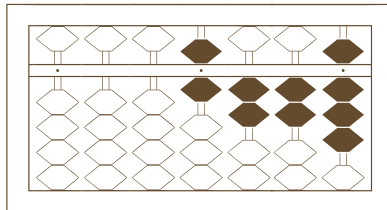
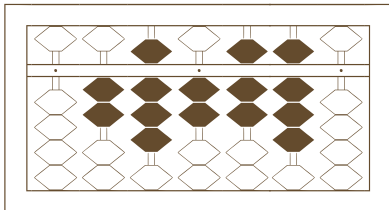
3



4

5

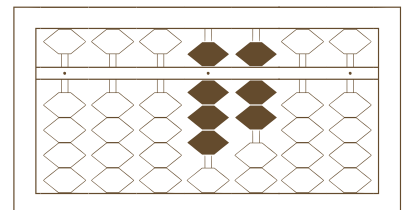
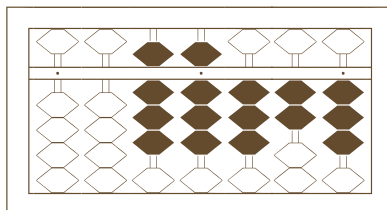
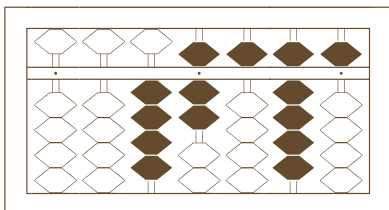
6



7

8

9



10

11

12

【そろばんの珠読み】

4桁から6桁 12問

名前 _____

No.003

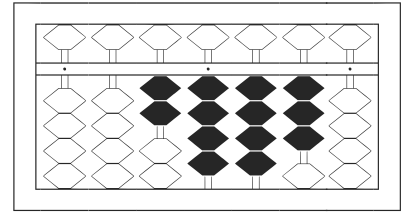
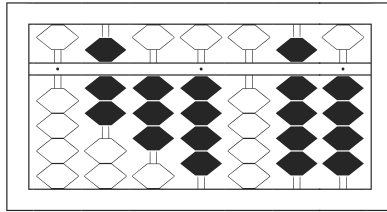
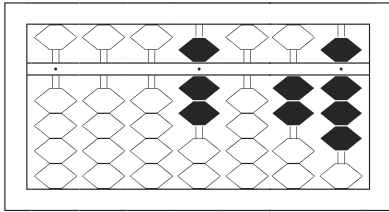
★たま よ すうじ かそろばんの珠を読んで数字で書きましょう。

分 秒

みぎはし けた いち くらい
(※右端の桁を一の位とします)

正解数

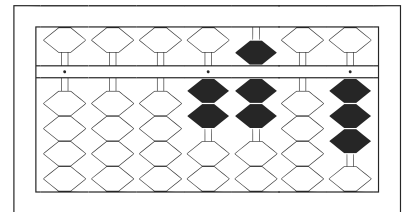
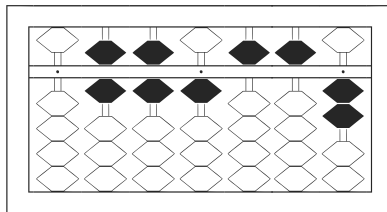
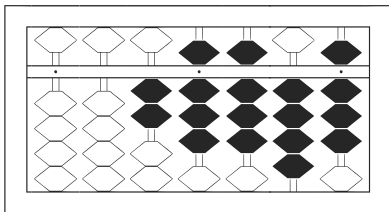
/ 12



1 7,028

2 734,094

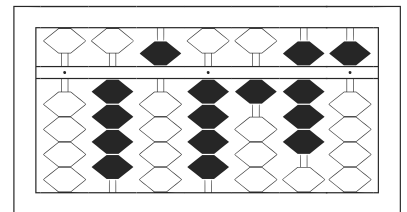
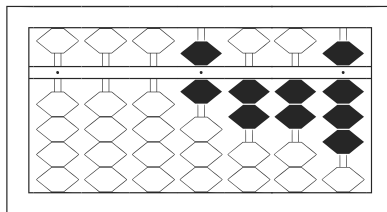
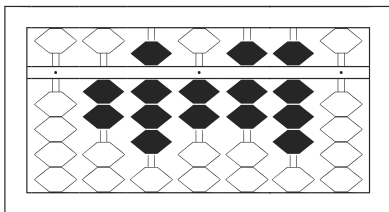
3 24,430



4 28,848

5 661,552

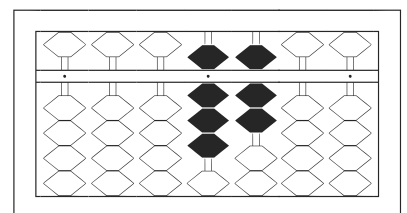
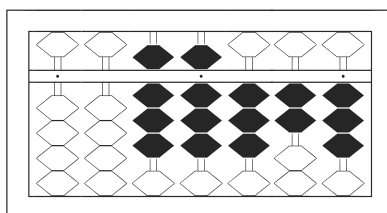
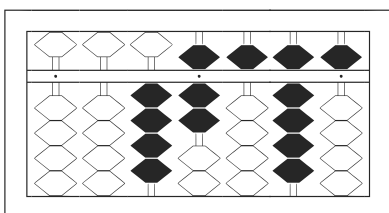
6 2,703



7 282,780

8 6,228

9 454,185



10 47,595

11 88,323

12 8,700