

【そろばんの珠読み】

4桁から6桁 12問

No.002

名前 _____

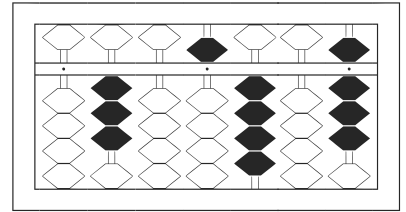
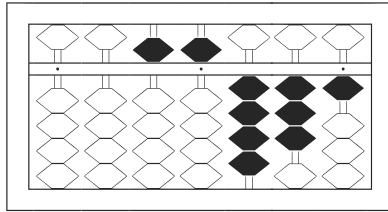
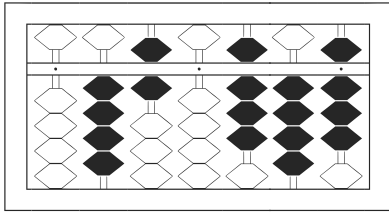
★たま よ すうじ かそろばんの珠を読んで数字で書きましょう。

分 秒

みぎはし けた いち くらい
(※右端の桁を一の位とします)

正解数

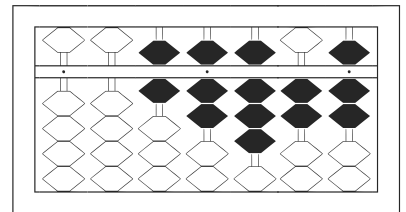
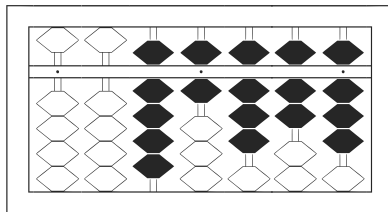
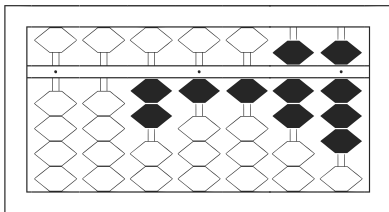
/ 12



/

2

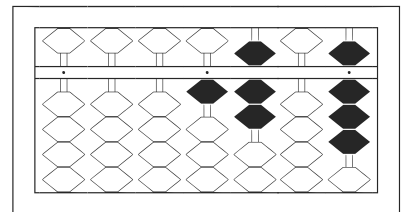
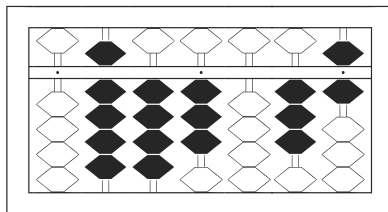
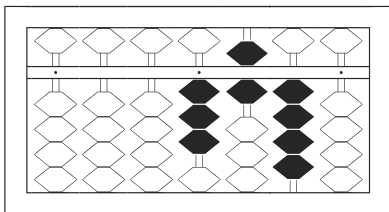
3



4

5

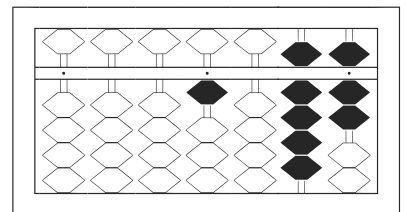
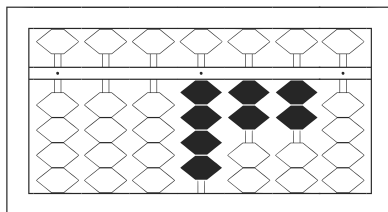
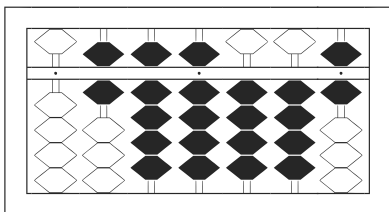
6



7

8

9



10

11

12

【そろばんの珠読み】

4桁から6桁 12問

No.002

名前 _____

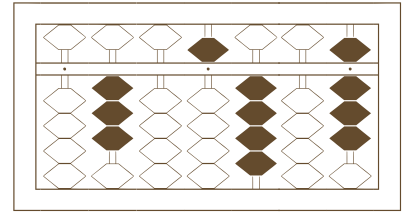
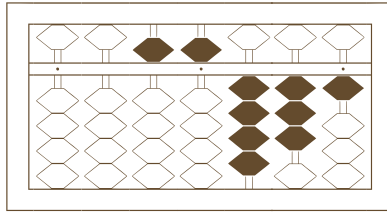
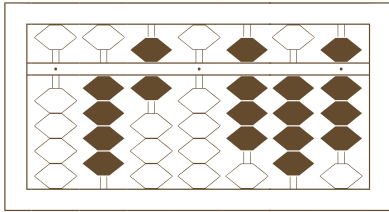
★たま よ すうじ かそろばんの珠を読んで数字で書きましょう。

分 秒

みぎはし けた いち くらい
(※右端の桁を一の位とします)

正解数

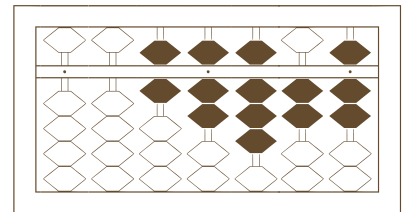
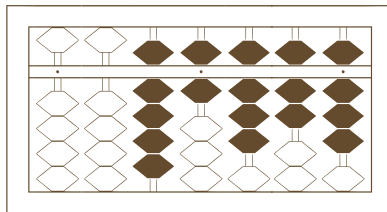
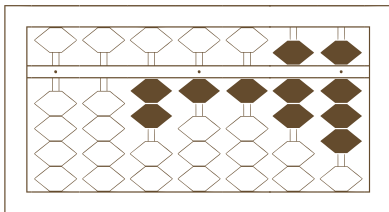
/ 12



/

2

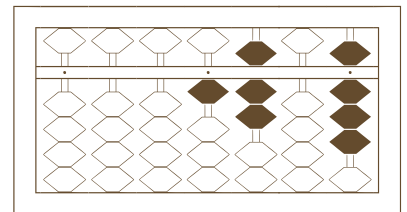
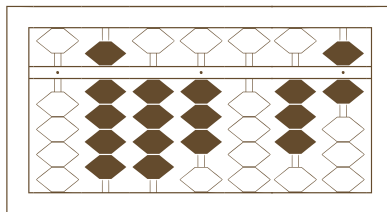
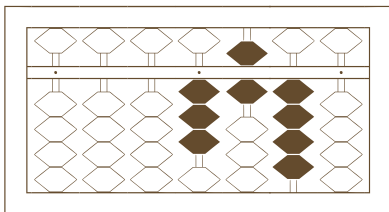
3



4

5

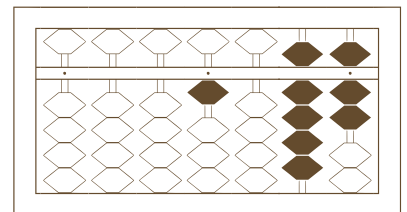
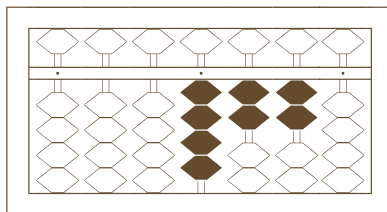
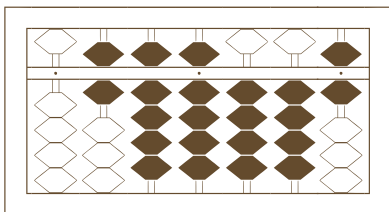
6



7

8

9



10

11

12

【そろばんの珠読み】

4桁から6桁 12問

名前 _____

No.002

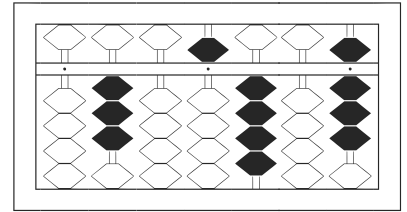
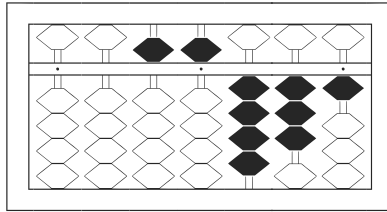
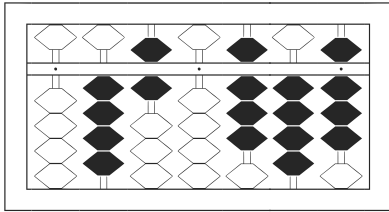
★たま よ すうじ かそろばんの珠を読んで数字で書きましょう。

分 秒

みぎはし けた いち くらい
(※右端の桁を一の位とします)

正解数

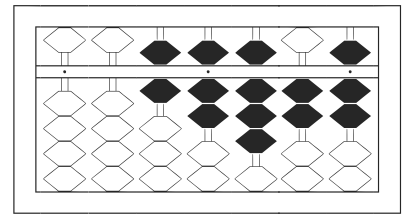
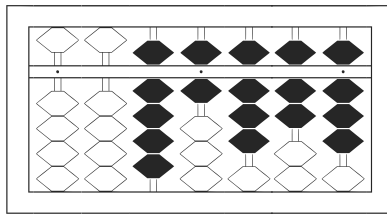
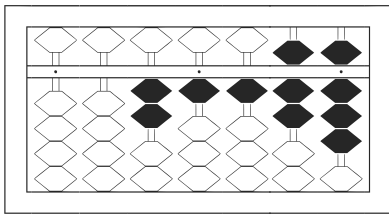
/ 12



1 460,848

2 55,431

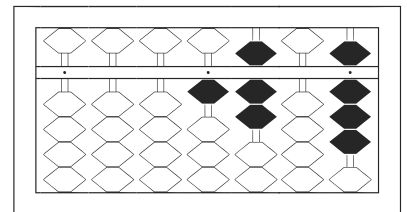
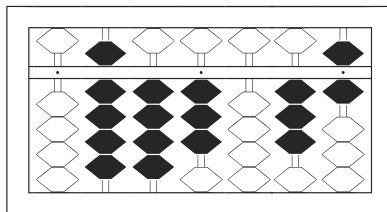
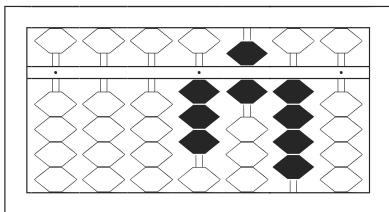
3 305,408



4 21,178

5 96,878

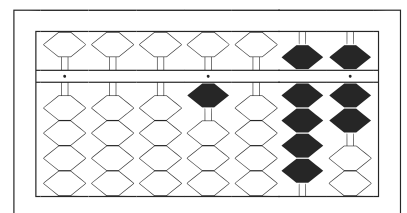
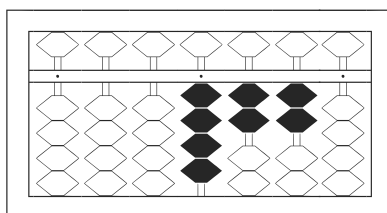
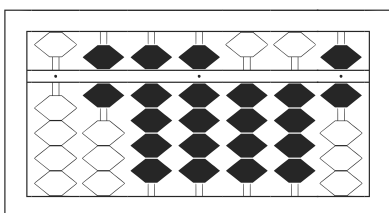
6 67,827



7 3,640

8 943,036

9 1,708



10 699,446

11 4,220

12 1,097