

【そろばんの珠読み】

4桁から6桁 12問

名前 _____

No.001

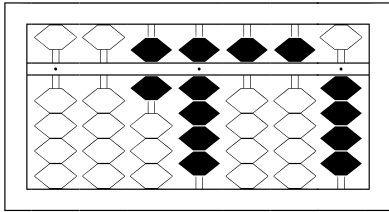
★たま よ すうじ かそろばんの珠を読んで数字で書きましょう。

分 秒

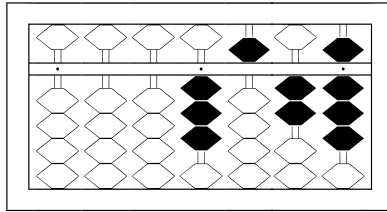
みぎはし けた いち くらい
(※右端の桁を一の位とします)

正解数


/12



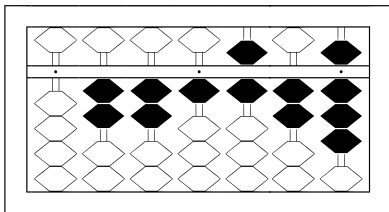
/



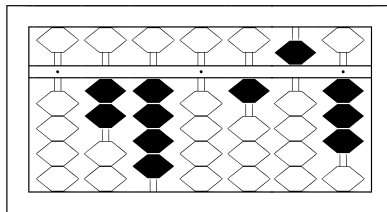
2



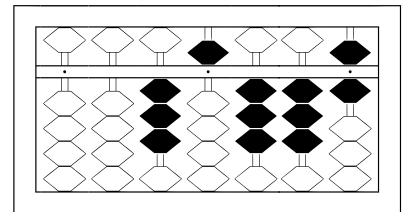
3



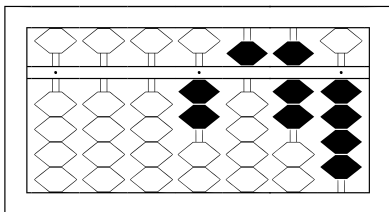
4



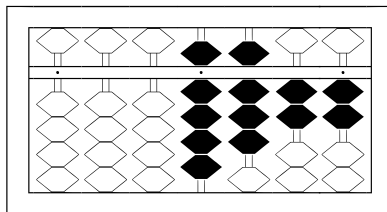
5



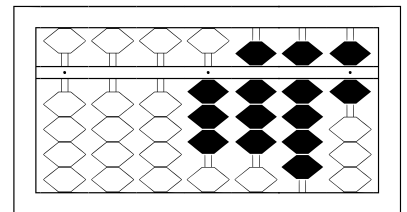
6



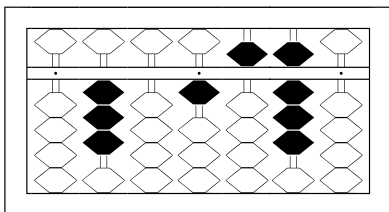
7



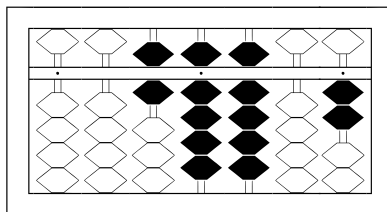
8



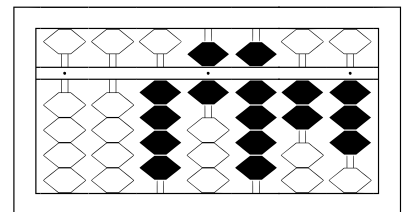
9



10



11



12

【そろばんの珠読み】

4桁から6桁 12問

名前 _____

No.001

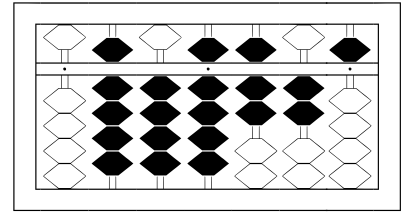
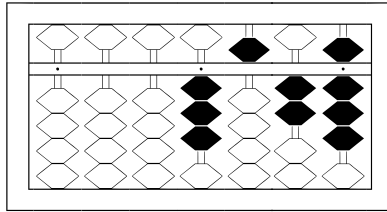
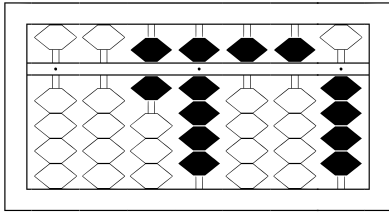
★たま よ すうじ かそろばんの珠を読んで数字で書きましょう。

分 秒

みぎはし けた いち くらい
(※右端の桁を一の位とします)

正解数

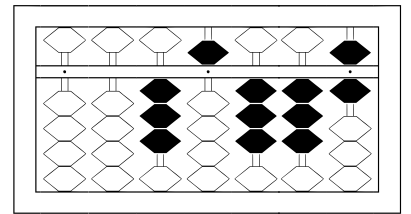
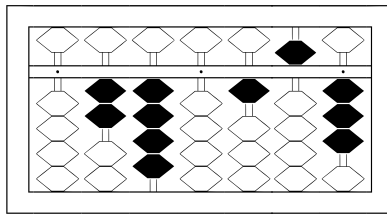
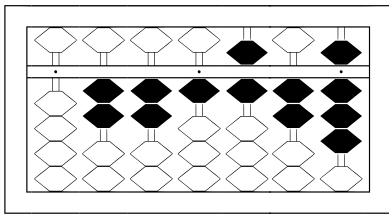
/12



1 / 69,554

2 / 3,528

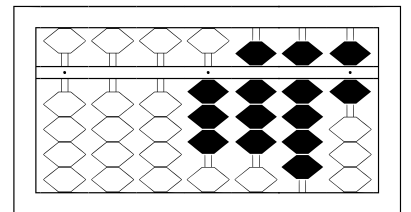
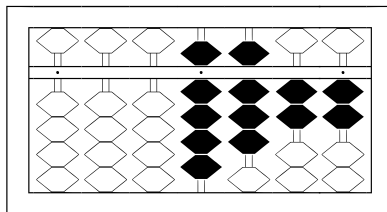
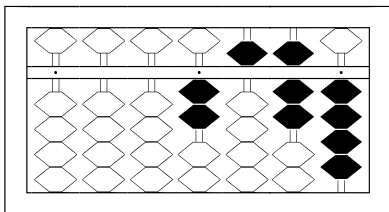
3 / 949,725



4 / 221,628

5 / 240,153

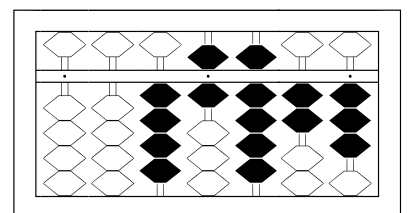
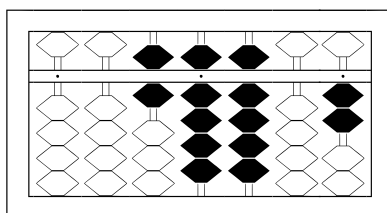
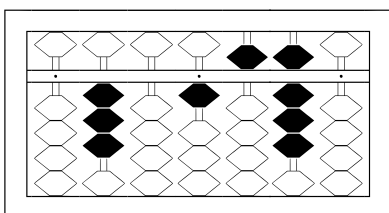
6 / 35,336



7 / 2,574

8 / 9,822

9 / 3,896



10 / 301,580

11 / 69,902

12 / 46,923