

# 【そろばんの珠読み】

4桁から6桁 12問

名前 \_\_\_\_\_

No.001

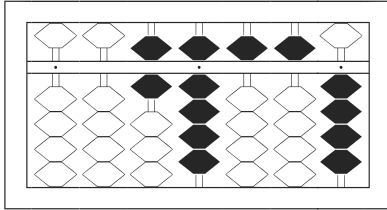
★たま よ すうじ かそろばんの珠を読んで数字で書きましょう。

分 秒

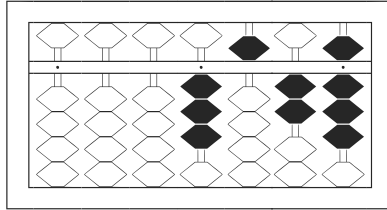
みぎはし けた いち くらい  
(※右端の桁を一の位とします)

正解数

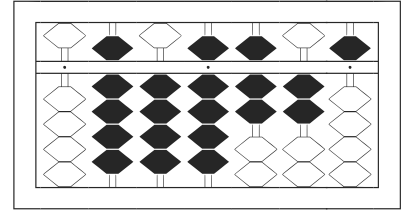
/ 12



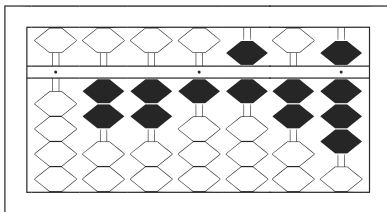
/



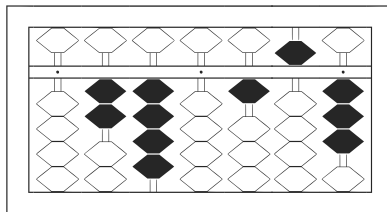
2



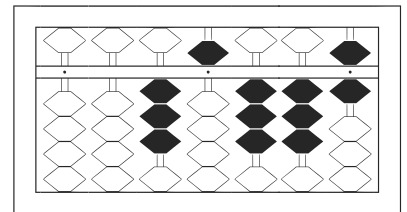
3



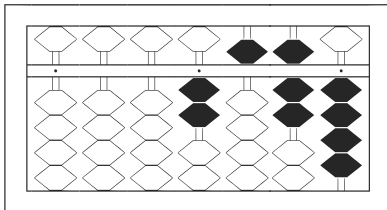
4



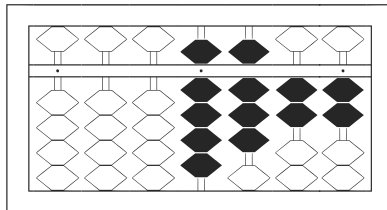
5



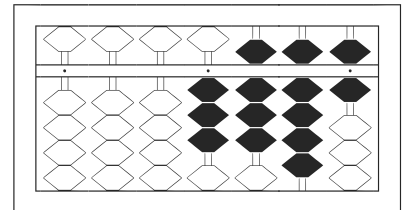
6



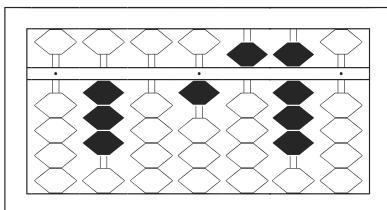
7



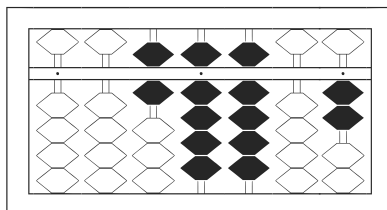
8



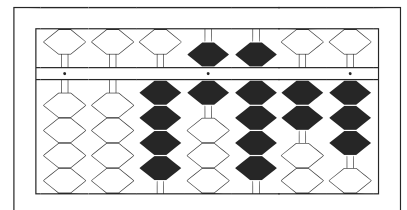
9



10



11



12

# 【そろばんの珠読み】

4桁から6桁 12問

No.001

名前 \_\_\_\_\_

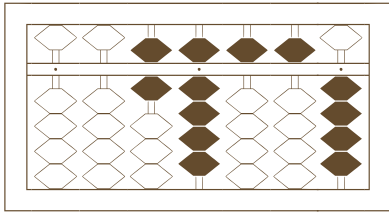
★たま よ すうじ かそろばんの珠を読んで数字で書きましょう。

分 秒

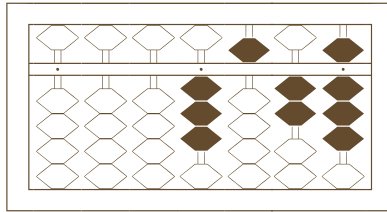
みぎはし けた いち くらい  
(※右端の桁を一の位とします)

正解数

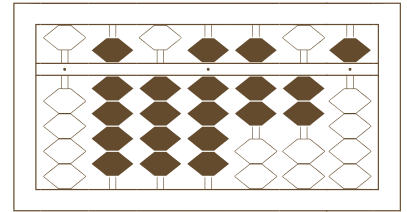
/ 12



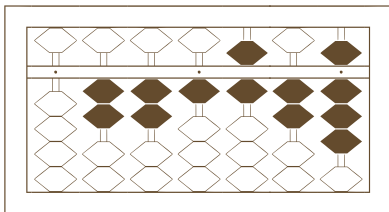
/



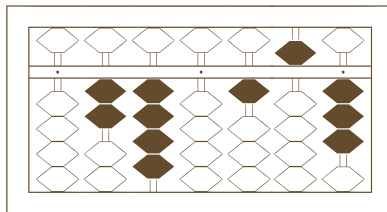
2



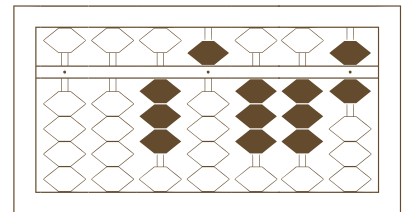
3



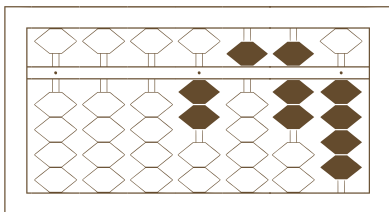
4



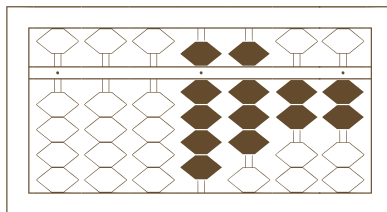
5



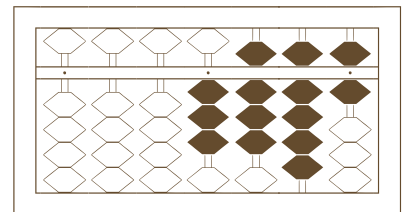
6



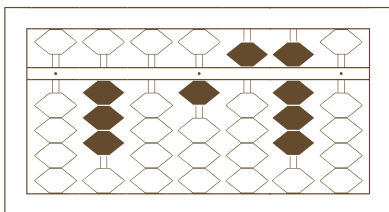
7



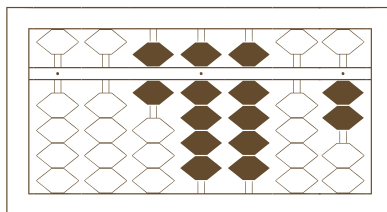
8



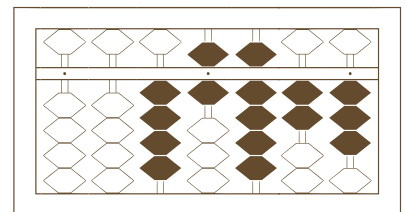
9



10



11



12

# 【そろばんの珠読み】

4桁から6桁 12問

名前 \_\_\_\_\_

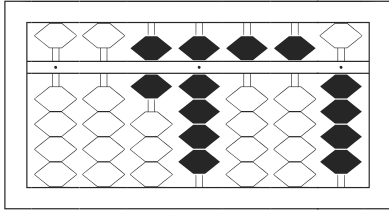
No.001

★たま よ すうじ かそろばんの珠を読んで数字で書きましょう。

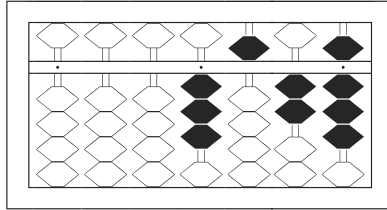
分 秒

みぎはし けた いち くらい  
(※右端の桁を一の位とします)

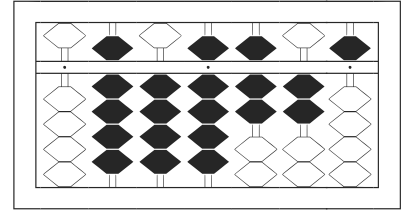
正解数 / 12



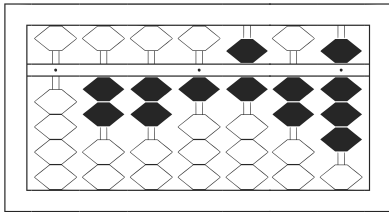
1 / 69,554



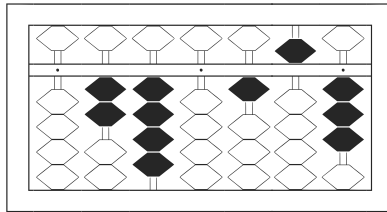
2 / 3,528



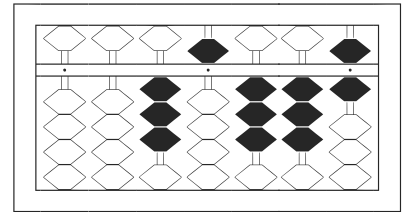
3 / 949,725



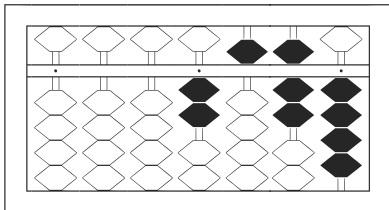
4 / 221,628



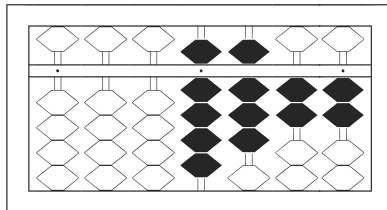
5 / 240,153



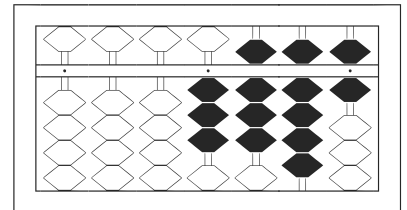
6 / 35,336



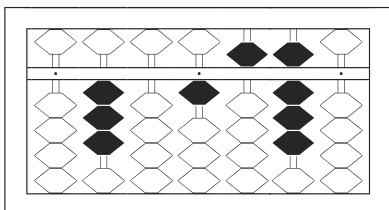
7 / 2,574



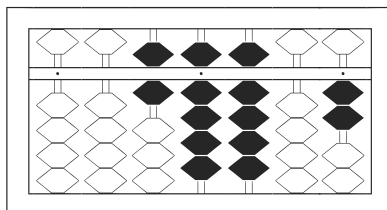
8 / 9,822



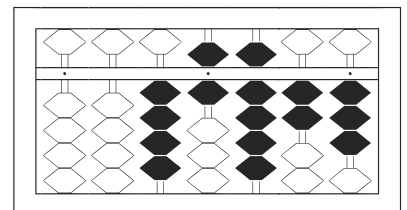
9 / 3,896



10 / 301,580



11 / 69,902



12 / 46,923