

# 【そろばんの珠読み】

4桁から6桁 12問

名前 \_\_\_\_\_

No.001

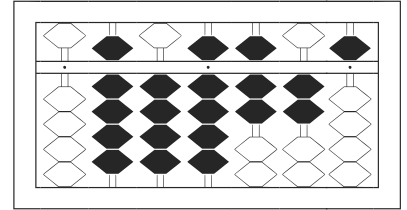
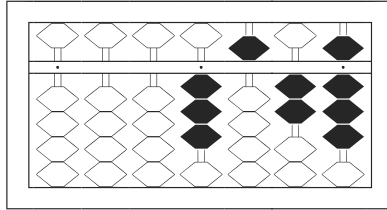
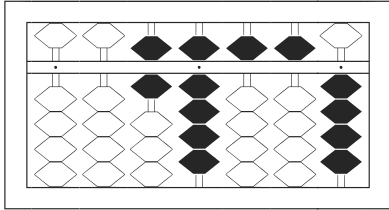
★たま よ すうじ かそろばんの珠を読んで数字で書きましょう。

分 秒

みぎはし けた いち くらい  
(※右端の桁を一の位とします)

正解数

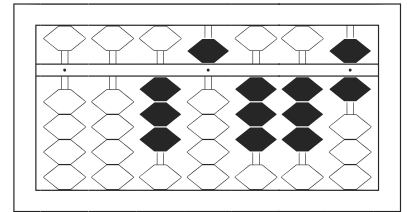
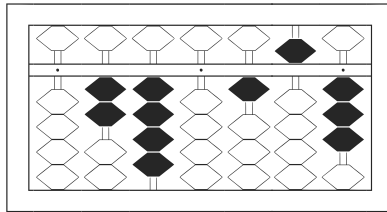
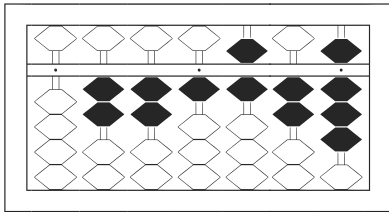
/ 12



1 / 69,554

2 / 3,528

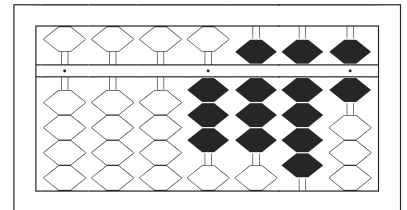
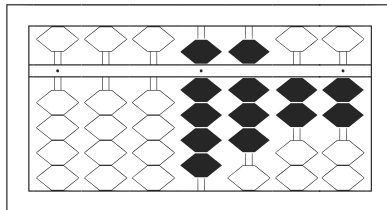
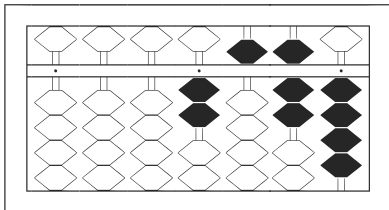
3 / 949,725



4 / 221,628

5 / 240,153

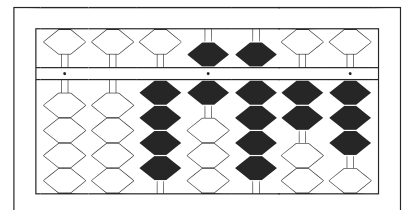
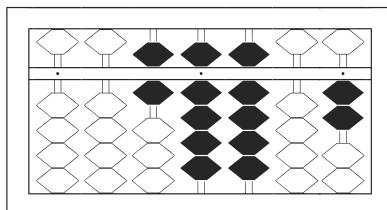
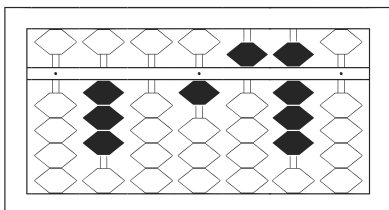
6 / 35,336



7 / 2,574

8 / 9,822

9 / 3,896



10 / 301,580

11 / 69,902

12 / 46,923

# 【そろばんの珠読み】

4桁から6桁 12問

名前 \_\_\_\_\_

No.002

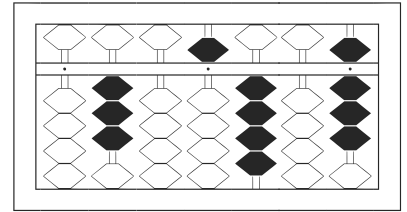
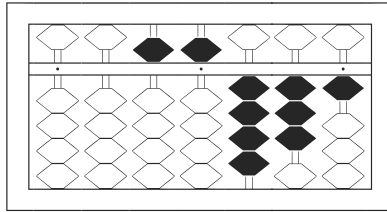
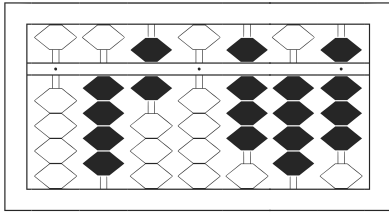
★たま よ すうじ かそろばんの珠を読んで数字で書きましょう。

分 秒

みぎはし けた いち くらい  
(※右端の桁を一の位とします)

正解数

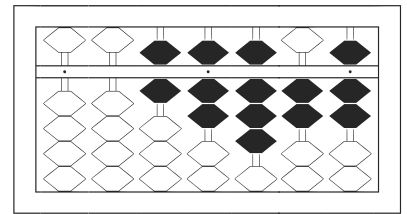
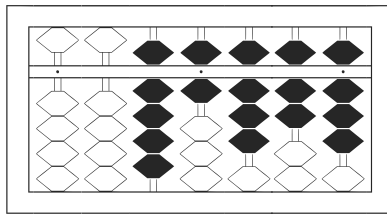
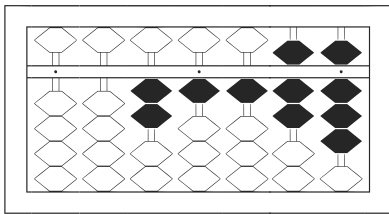
/ 12



1 460,848

2 55,431

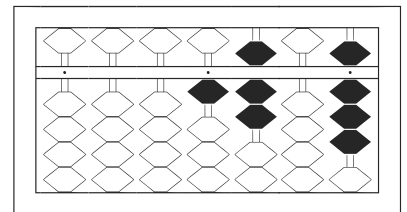
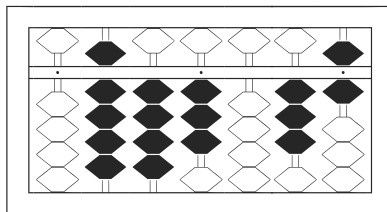
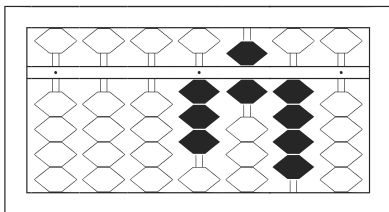
3 305,408



4 21,178

5 96,878

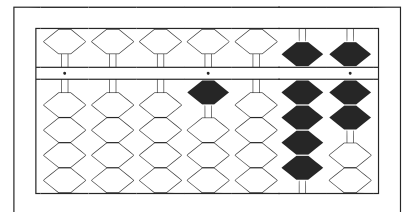
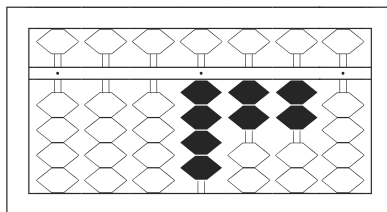
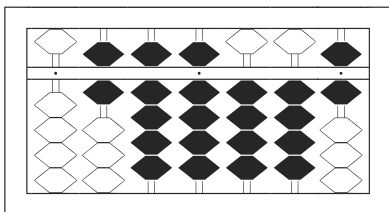
6 67,827



7 3,640

8 943,036

9 1,708



10 699,446

11 4,220

12 1,097

# 【そろばんの珠読み】

4桁から6桁 12問

名前 \_\_\_\_\_

No.003

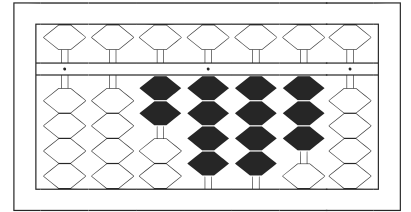
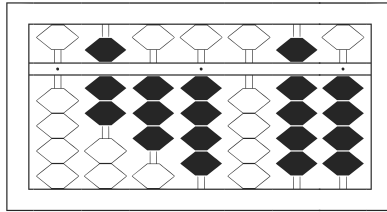
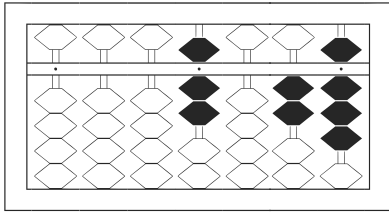
★たま よ すうじ かそろばんの珠を読んで数字で書きましょう。

分 秒

みぎはし けた いち くらい  
(※右端の桁を一の位とします)

正解数

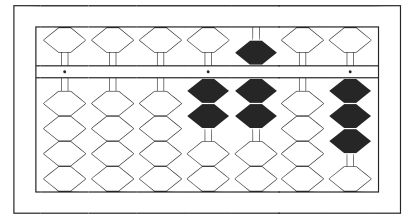
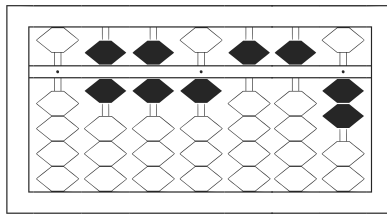
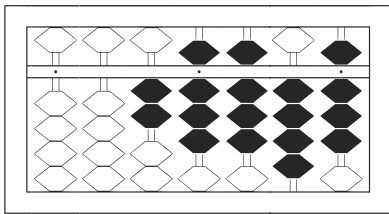
/ 12



1 7,028

2 734,094

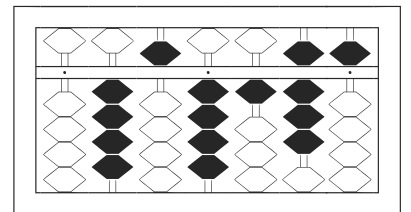
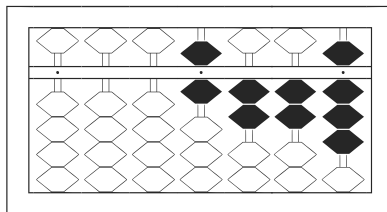
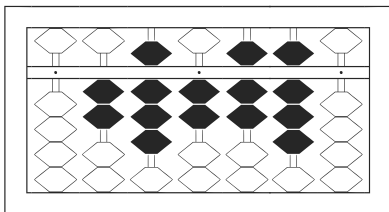
3 24,430



4 28,848

5 661,552

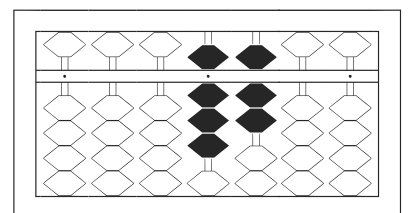
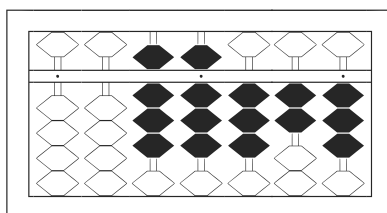
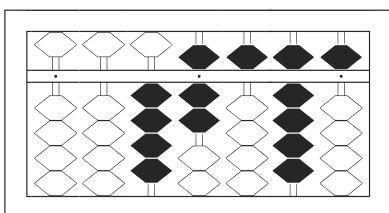
6 2,703



7 282,780

8 6,228

9 454,185



10 47,595

11 88,323

12 8,700

# 【そろばんの珠読み】

4桁から6桁 12問

名前 \_\_\_\_\_

No.004

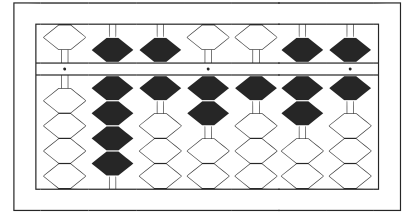
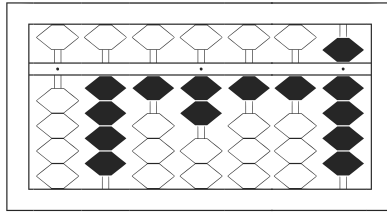
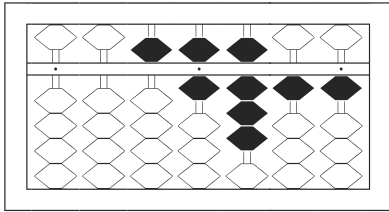
★たま よ すうじ かそろばんの珠を読んで数字で書きましょう。

分 秒

みぎはし けた いち くらい  
(※右端の桁を一の位とします)

正解数

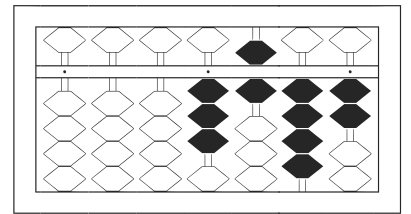
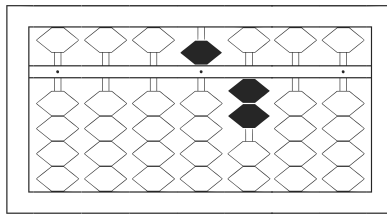
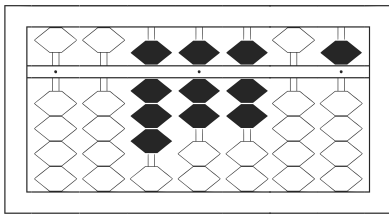
/ 12



1 56,811

2 412,119

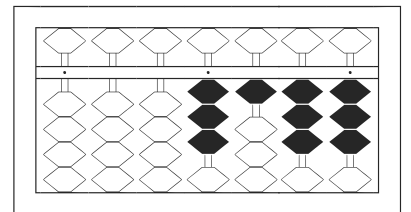
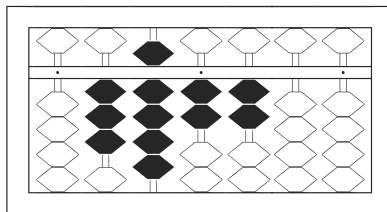
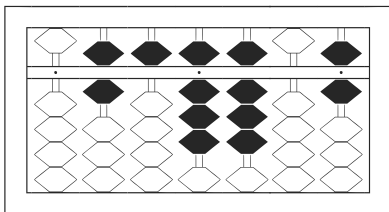
3 962,176



4 87,705

5 5,200

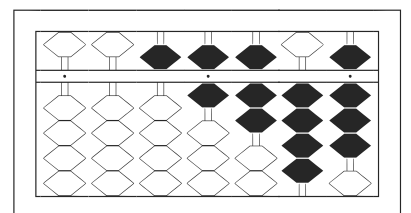
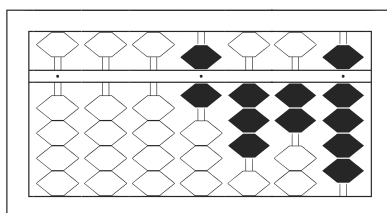
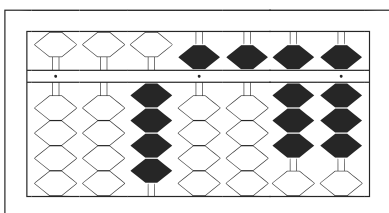
6 3,642



7 658,806

8 392,200

9 3,133



10 45,588

11 6,329

12 56,748

# 【そろばんの珠読み】

4桁から6桁 12問

名前 \_\_\_\_\_

No.005

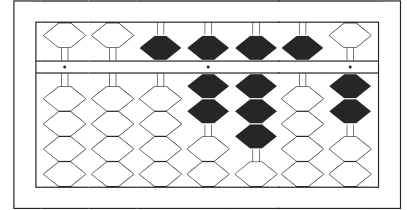
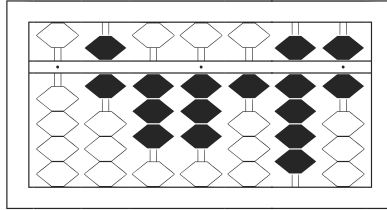
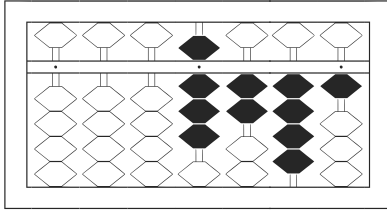
★たま よ すうじ かそろばんの珠を読んで数字で書きましょう。

分 秒

みぎはし けた いち くらい  
(※右端の桁を一の位とします)

正解数

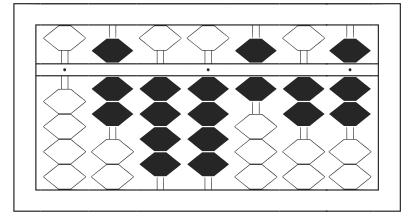
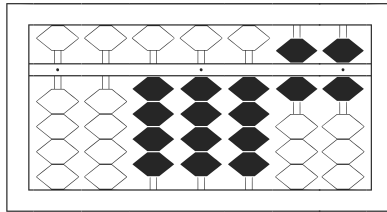
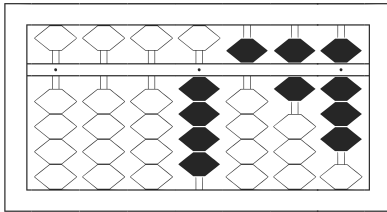
/ 12



1 8,241

2 633,196

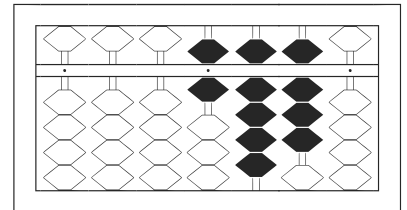
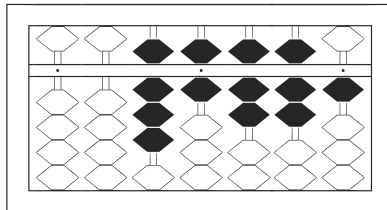
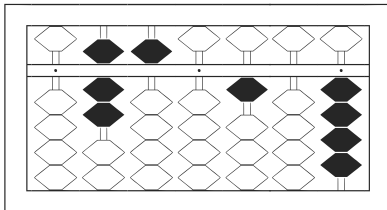
3 57,852



4 4,568

5 44,466

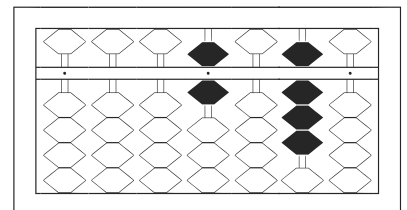
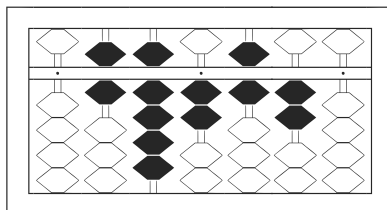
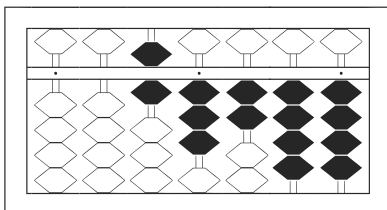
6 744,627



7 750,104

8 86,771

9 6,980



10 63,244

11 692,620

12 6,080

# 【そろばんの珠読み】

4桁から6桁 12問

名前 \_\_\_\_\_

No.006

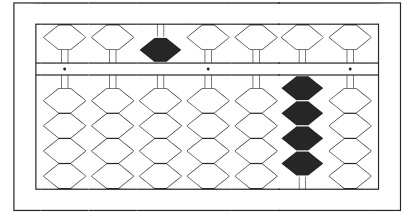
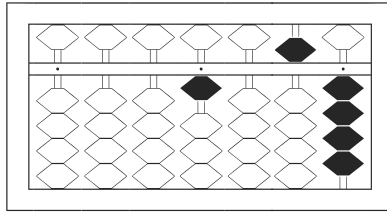
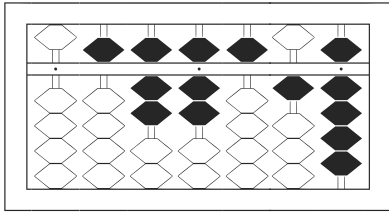
★たま よ すうじ かそろばんの珠を読んで数字で書きましょう。

分 秒

みぎはし けた いち くらい  
(※右端の桁を一の位とします)

正解数

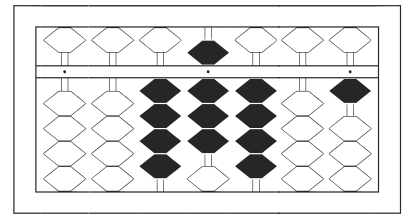
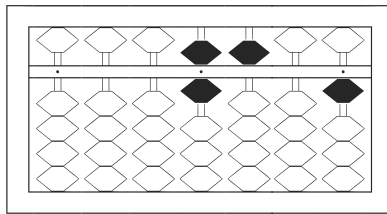
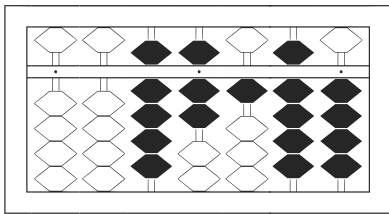
/ 12



1 577,519

2 1,054

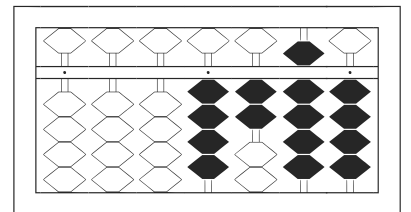
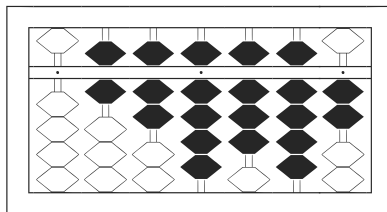
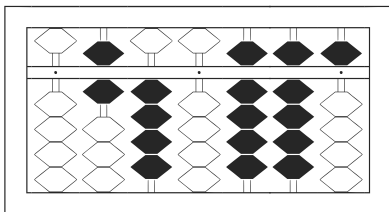
3 50,040



4 97,194

5 6,501

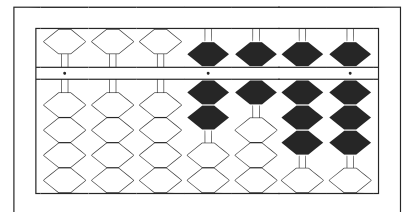
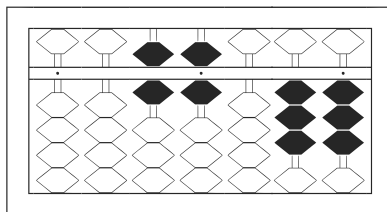
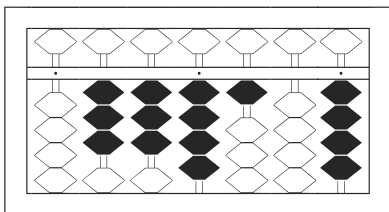
6 48,401



7 640,995

8 679,892

9 4,294



10 334,104

11 66,033

12 7,688

# 【そろばんの珠読み】

4桁から6桁 12問

名前 \_\_\_\_\_

No.007

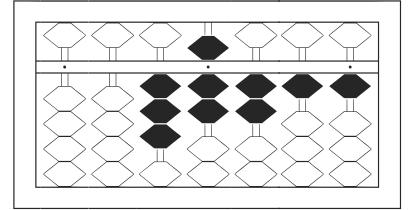
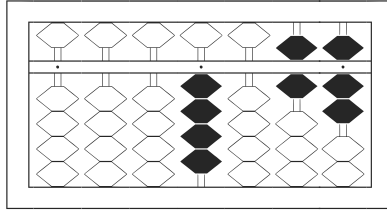
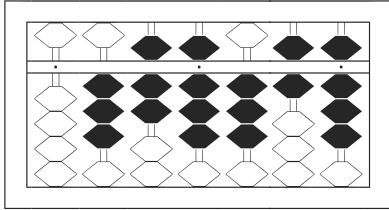
★たま よ すうじ かそろばんの珠を読んで数字で書きましょう。

分 秒

みぎはし けた いち くらい  
(※右端の桁を一の位とします)

正解数

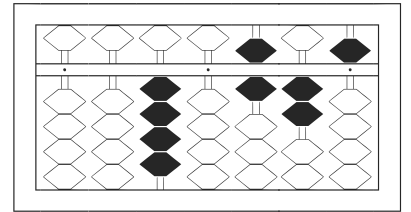
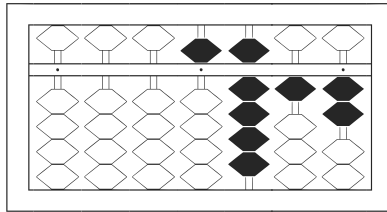
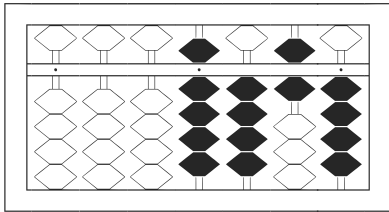
/ 12



1 / 378,368

2 / 4,067

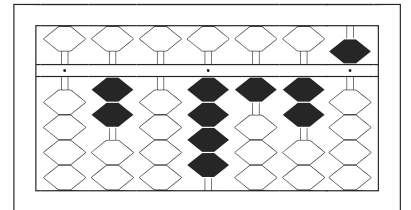
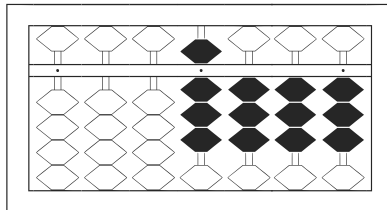
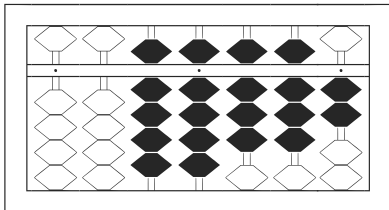
3 / 37,211



4 / 9,464

5 / 5,912

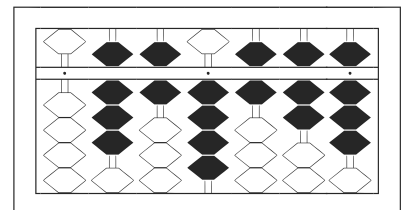
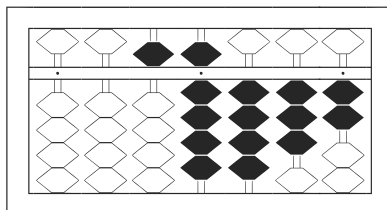
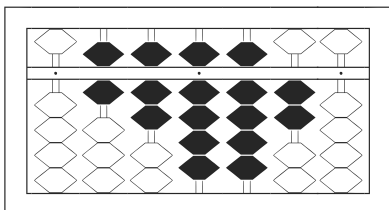
6 / 40,625



7 / 99,882

8 / 8,333

9 / 204,125



10 / 679,920

11 / 59,432

12 / 864,678

# 【そろばんの珠読み】

4桁から6桁 12問

名前 \_\_\_\_\_

No.008

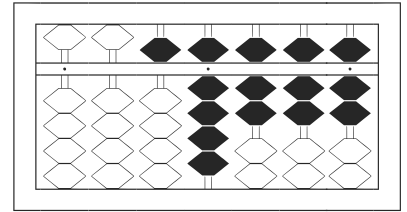
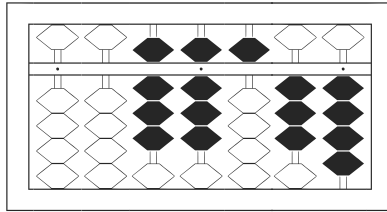
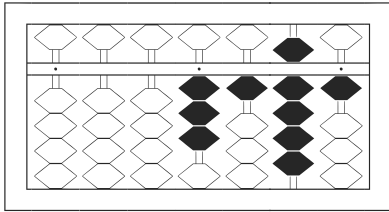
★たま よ すうじ かそろばんの珠を読んで数字で書きましょう。

分 秒

みぎはし けた いち くらい  
(※右端の桁を一の位とします)

正解数

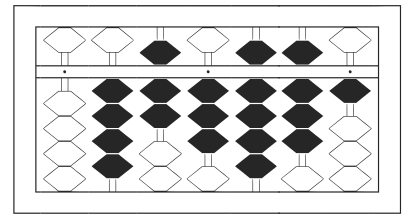
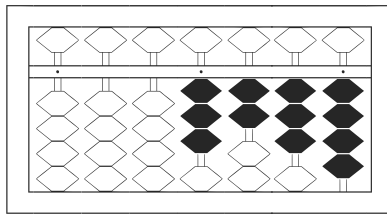
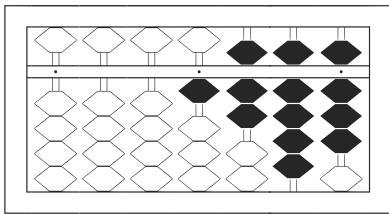
/ 12



1 3,191

2 88,534

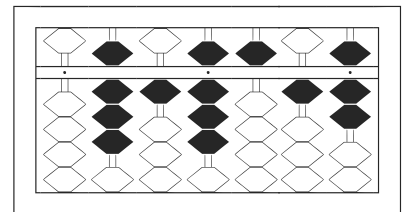
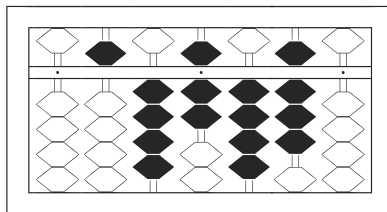
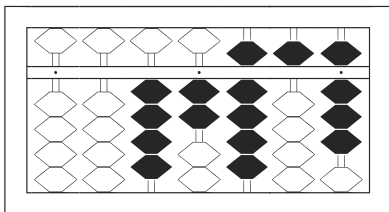
3 59,777



4 1,798

5 3,234

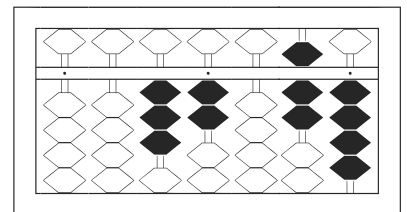
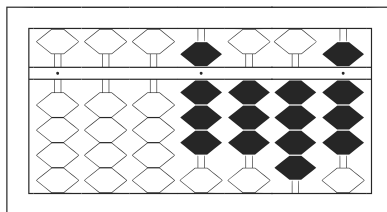
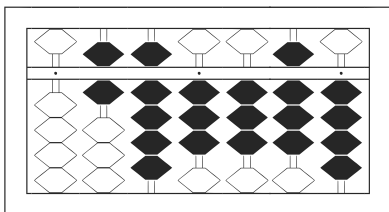
6 473,981



7 42,958

8 547,480

9 818,517



10 693,384

11 8,348

12 32,074



# 【そろばんの珠読み】

4桁から6桁 12問

名前 \_\_\_\_\_

No.009

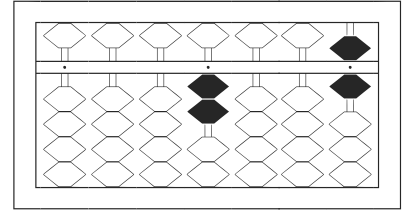
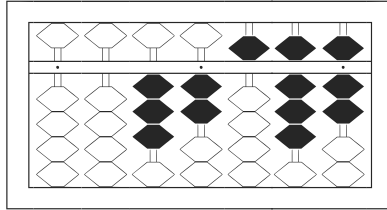
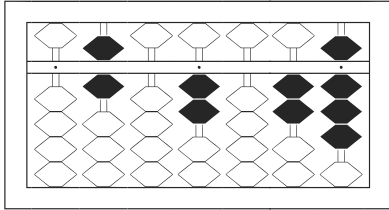
★たま よ すうじ かそろばんの珠を読んで数字で書きましょう。

分 秒

みぎはし けた いち くらい  
(※右端の桁を一の位とします)

正解数

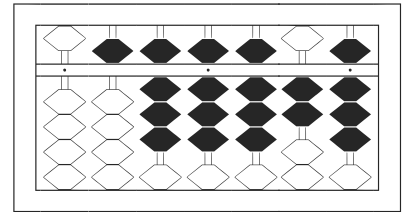
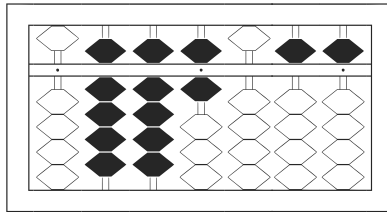
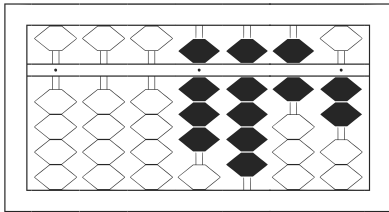
/ 12



1 602,028

2 32,587

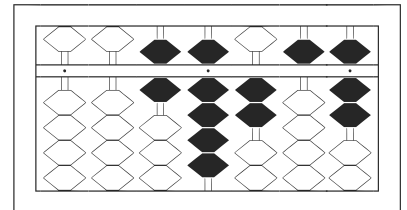
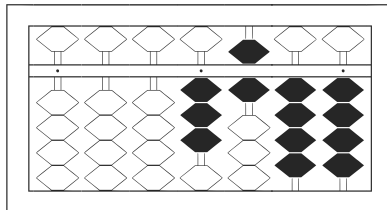
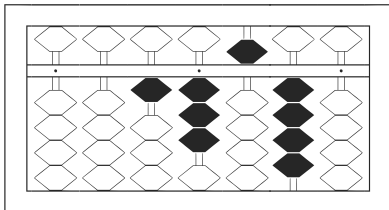
3 2,006



4 8,962

5 996,055

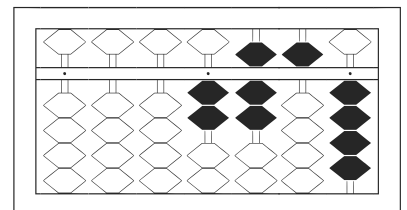
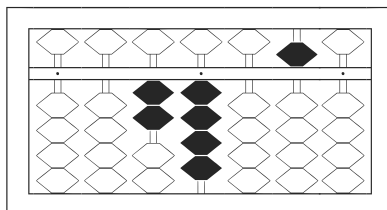
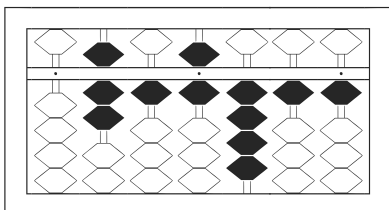
6 588,828



7 13,540

8 3,644

9 69,257



10 716,411

11 24,050

12 2,754

# 【そろばんの珠読み】

4桁から6桁 12問

名前 \_\_\_\_\_

No.010

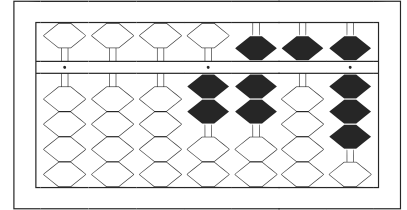
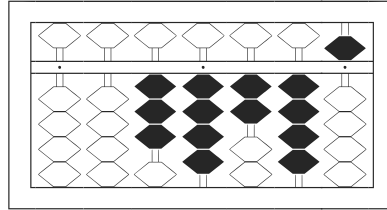
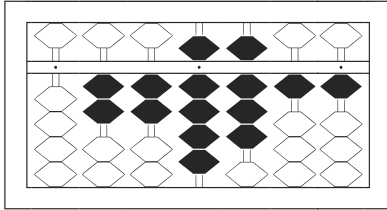
★たま よ すうじ かそろばんの珠を読んで数字で書きましょう。

分 秒

みぎはし けた いち くらい  
(※右端の桁を一の位とします)

正解数

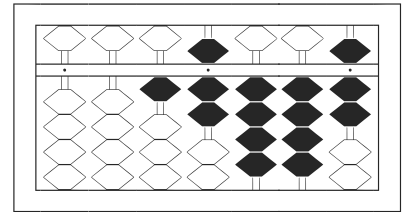
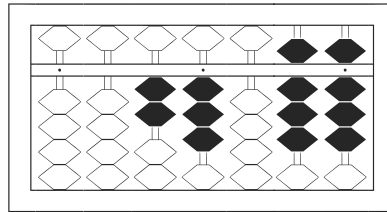
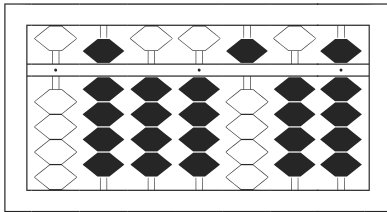
/ 12



1 229,811

2 34,245

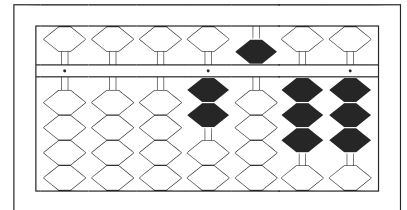
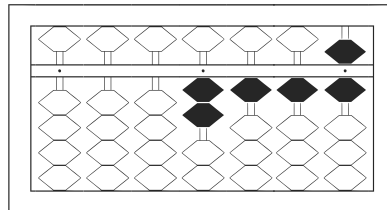
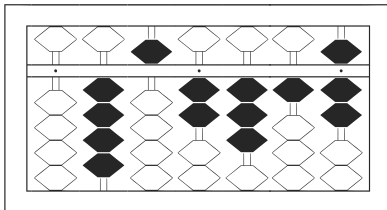
3 2,758



4 944,549

5 23,088

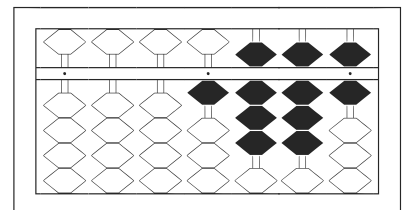
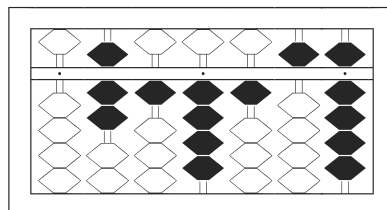
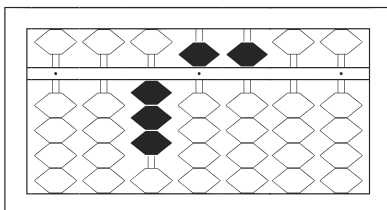
6 17,447



7 452,317

8 2,116

9 2,533



10 35,500

11 714,159

12 1,886