

【そろばんの珠読み】

2桁から3桁 16問

名前 _____

No.009

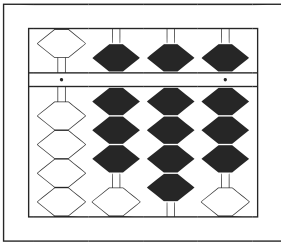
★たま よ すうじ かそろばんの珠を読んで数字で書きましょう。

分 秒

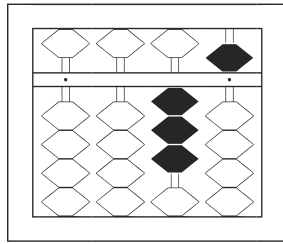
みぎはし けた いち くらい
(※右端の桁を一の位とします)

正解数

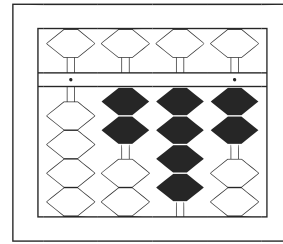
/ 16



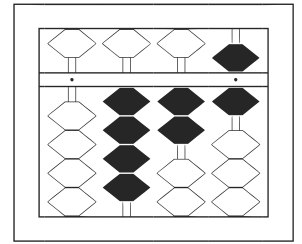
/



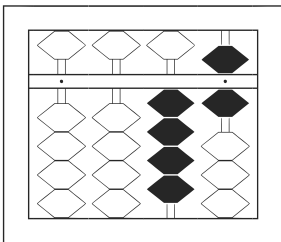
2



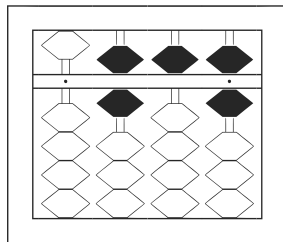
3



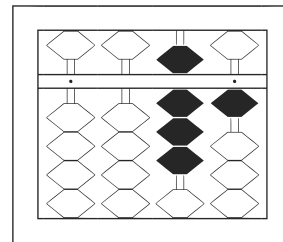
4



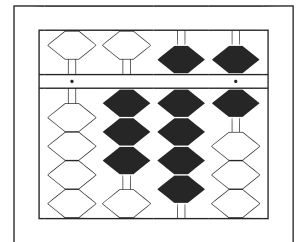
5



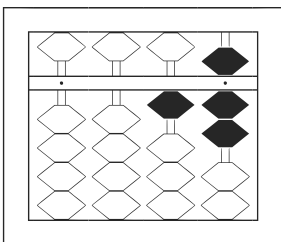
6



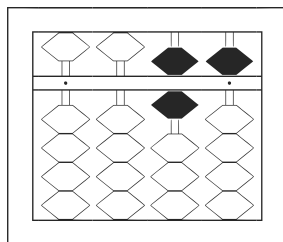
7



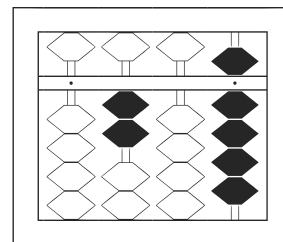
8



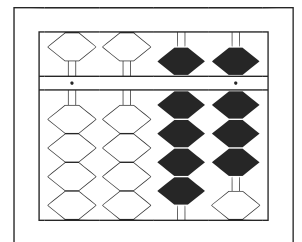
9



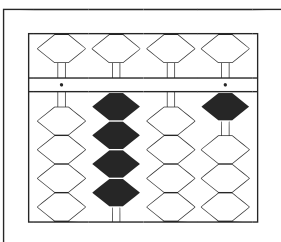
10



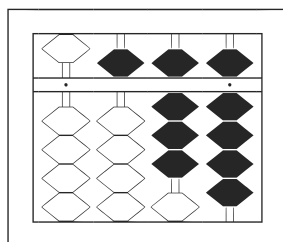
11



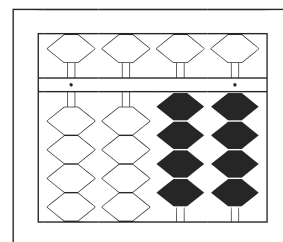
12



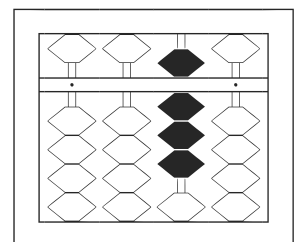
13



14



15



16

【そろばんの珠読み】

2桁から3桁 16問

名前 _____

No.009

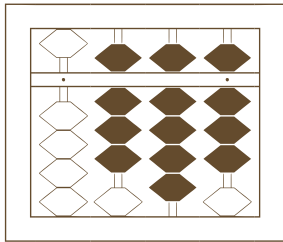
★たま よ すうじ かそろばんの珠を読んで数字で書きましょう。

分 秒

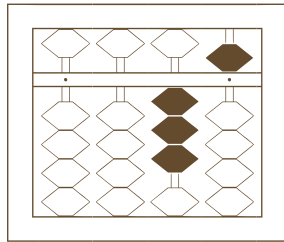
みぎはし けた いち くらい
(※右端の桁を一の位とします)

正解数


/ 16



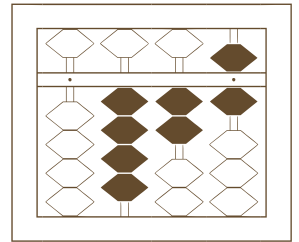
/	
---	--



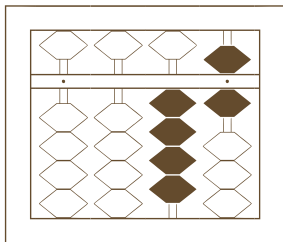
2	
---	--



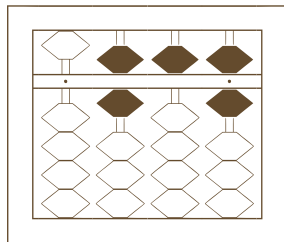
3	
---	--




4	
---	--



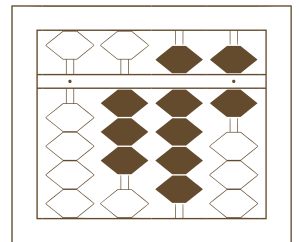
5	
---	--



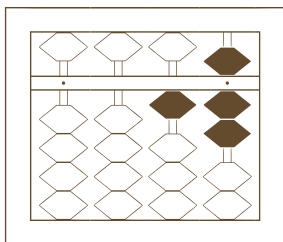
6	
---	--



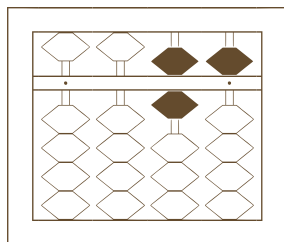
7	
---	--



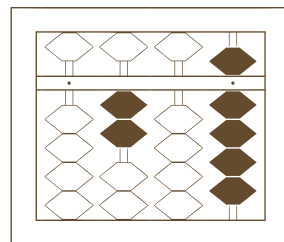
8	
---	--



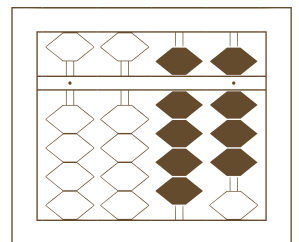
9	
---	--



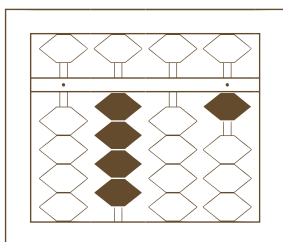
10	
----	--



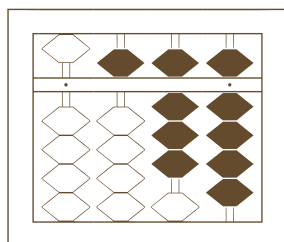
11	
----	--



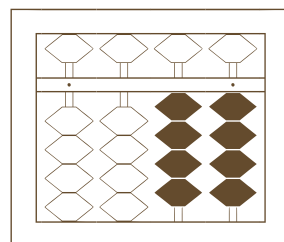
12	
----	--



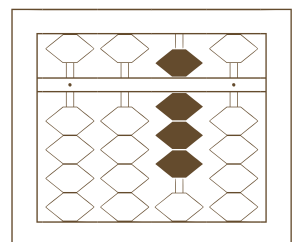
13	
----	--



14	
----	--



15	
----	--



16	
----	--

【そろばんの珠読み】

2桁から3桁 16問

名前 _____

No.009

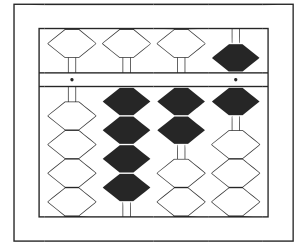
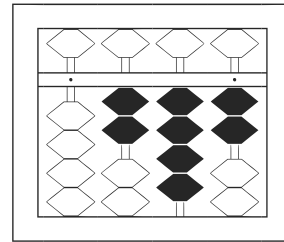
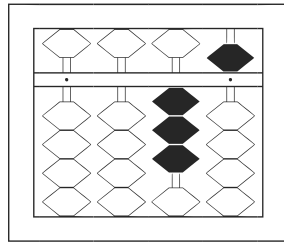
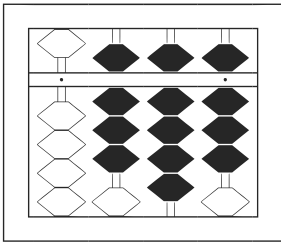
★たま よ すうじ かそろばんの珠を読んで数字で書きましょう。

分 秒

みぎはし けた いち くらい
(※右端の桁を一の位とします)

正解数

/ 16

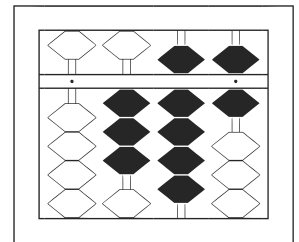
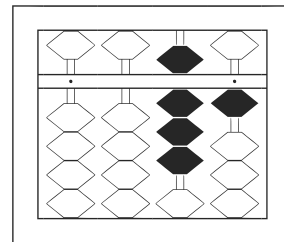
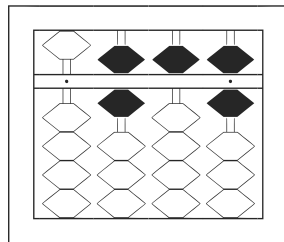
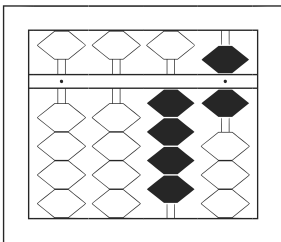


1 898

2 35

3 242

4 426

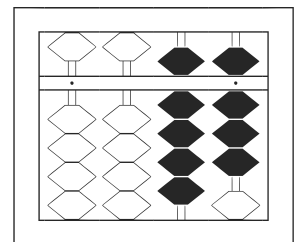
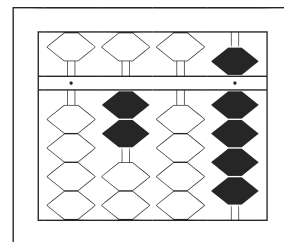
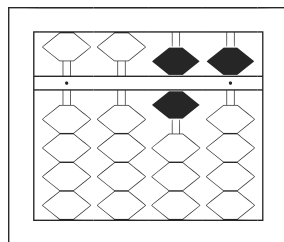
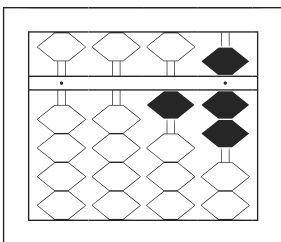


5 46

6 656

7 81

8 396

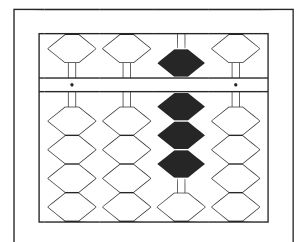
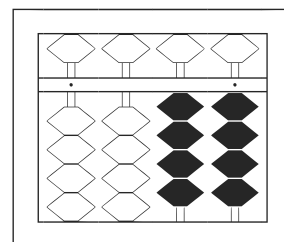
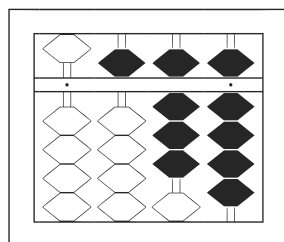
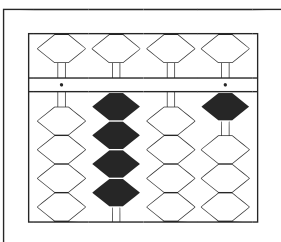


9 17

10 65

11 209

12 98



13 401

14 589

15 44

16 80