

【そろばんの珠読み】

2桁から3桁 16問

名前 _____

No.008

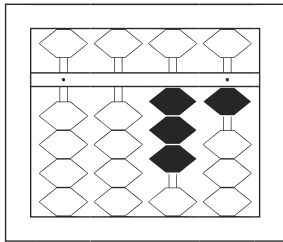
★たま よ すうじ かそろばんの珠を読んで数字で書きましょう。

分 秒

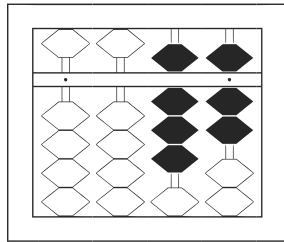
みぎはし けた いち くらい
(※右端の桁を一の位とします)

正解数

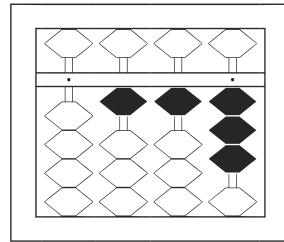
/ 16



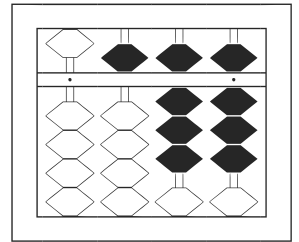
/



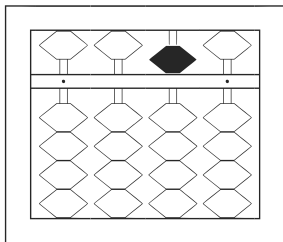
2



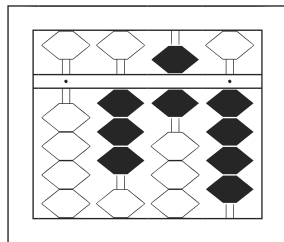
3



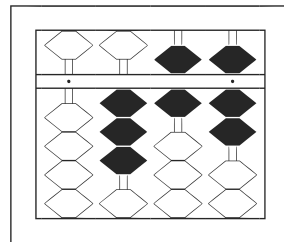
4



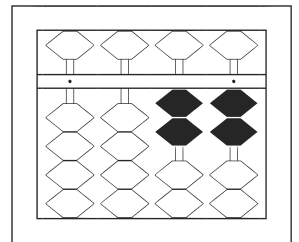
5



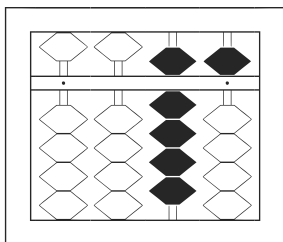
6



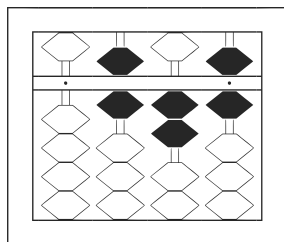
7



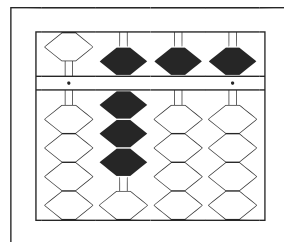
8



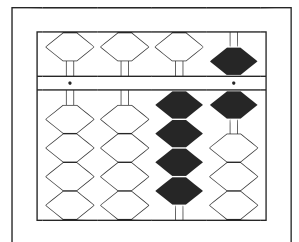
9



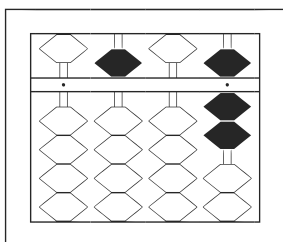
10



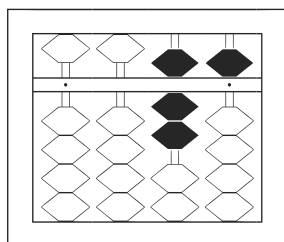
11



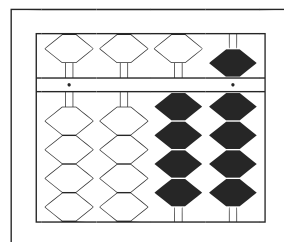
12



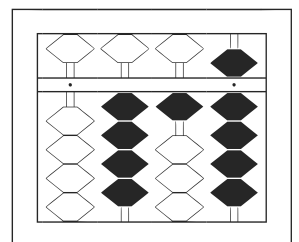
13



14



15



16

【そろばんの珠読み】

2桁から3桁 16問

名前 _____

No.008

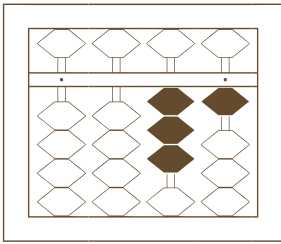
★たま よ すうじ かそろばんの珠を読んで数字で書きましょう。

分 秒

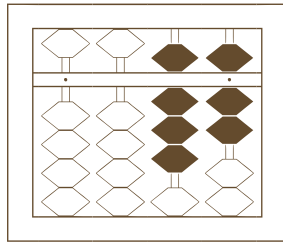
みぎはし けた いち くらい
(※右端の桁を一の位とします)

正解数

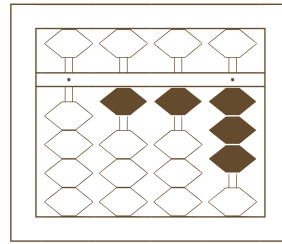
/ 16



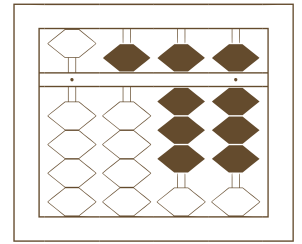
| | |
|---|--|
| / | |
|---|--|



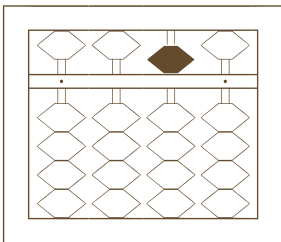
| | |
|---|--|
| 2 | |
|---|--|



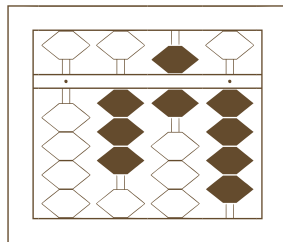
| | |
|---|--|
| 3 | |
|---|--|



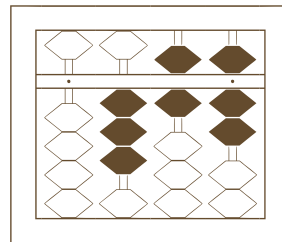
| | |
|---|--|
| 4 | |
|---|--|



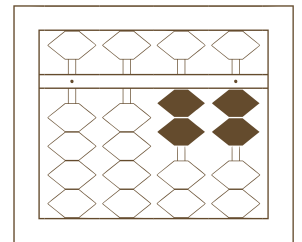
| | |
|---|--|
| 5 | |
|---|--|



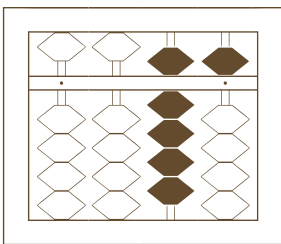
| | |
|---|--|
| 6 | |
|---|--|




| | |
|---|--|
| 7 | |
|---|--|



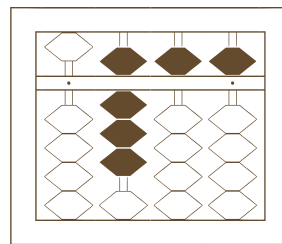
| | |
|---|--|
| 8 | |
|---|--|



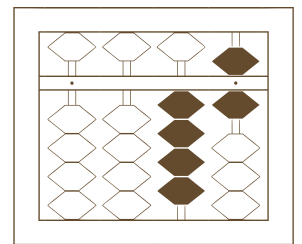
| | |
|---|--|
| 9 | |
|---|--|



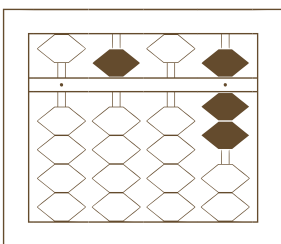
| | |
|----|--|
| 10 | |
|----|--|



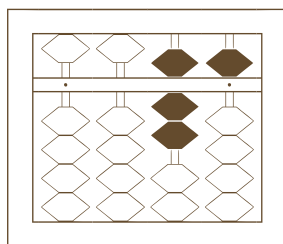
| | |
|----|--|
| 11 | |
|----|--|



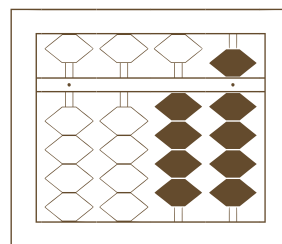
| | |
|----|--|
| 12 | |
|----|--|



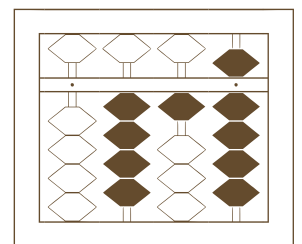
| | |
|----|--|
| 13 | |
|----|--|



| | |
|----|--|
| 14 | |
|----|--|



| | |
|----|--|
| 15 | |
|----|--|



| | |
|----|--|
| 16 | |
|----|--|

【そろばんの珠読み】

2桁から3桁 16問

名前 _____

No.008

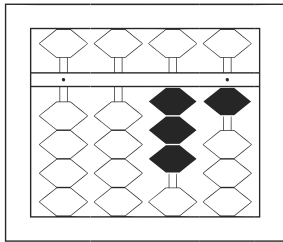
★たま よ すうじ かそろばんの珠を読んで数字で書きましょう。

分 秒

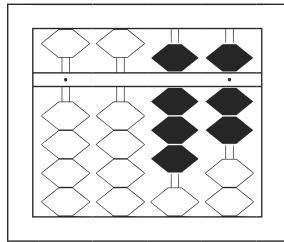
みぎはし けた いち くらい
(※右端の桁を一の位とします)

正解数

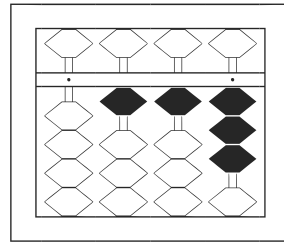
/ 16



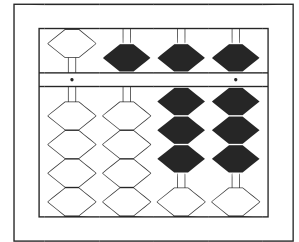
1 / 31



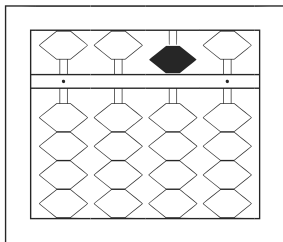
2 / 87



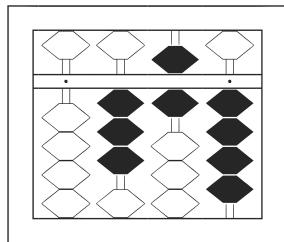
3 / 113



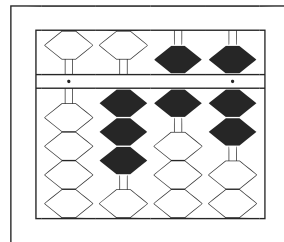
4 / 588



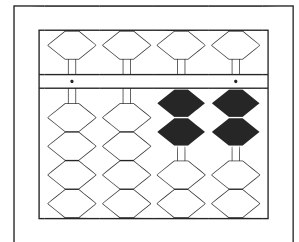
5 / 50



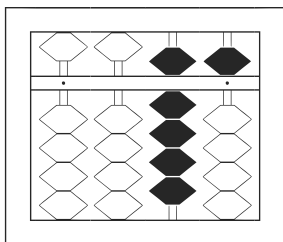
6 / 364



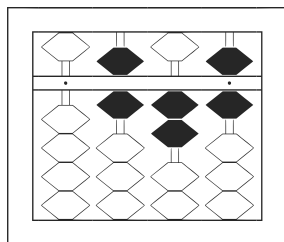
7 / 367



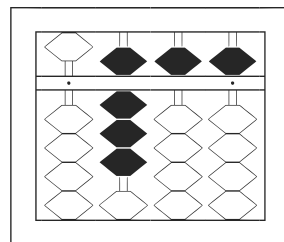
8 / 22



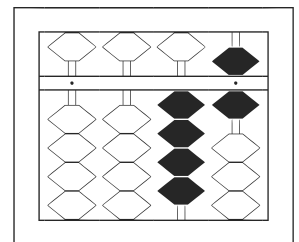
9 / 95



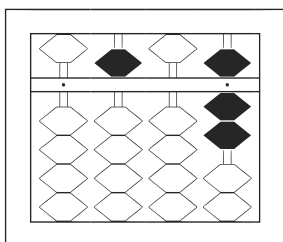
10 / 626



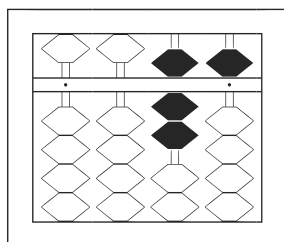
11 / 855



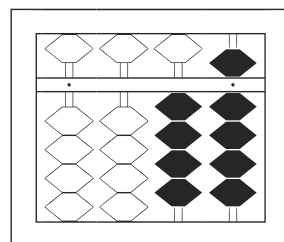
12 / 46



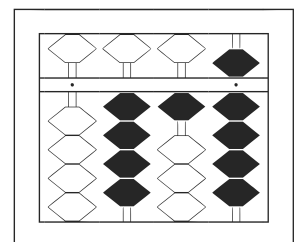
13 / 507



14 / 75



15 / 49



16 / 419