

【そろばんの珠読み】

2桁から3桁 16問

名前 _____

No.006

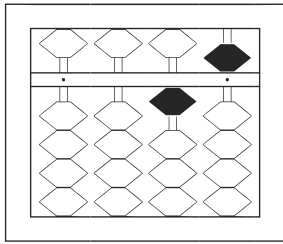
★たま よ すうじ かそろばんの珠を読んで数字で書きましょう。

分 秒

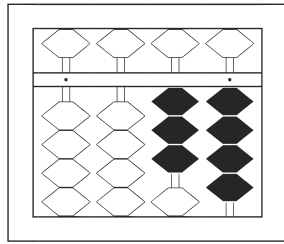
みぎはし けた いち くらい
(※右端の桁を一の位とします)

正解数

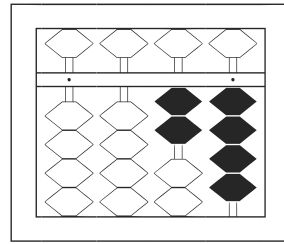
/ 16



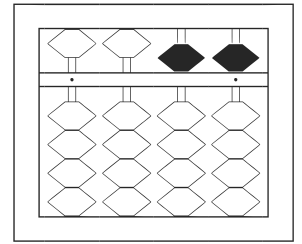
/	
---	--



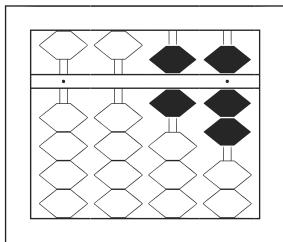
2	
---	--



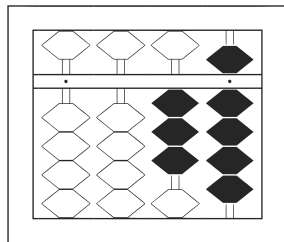
3	
---	--



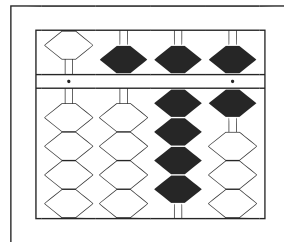
4	
---	--



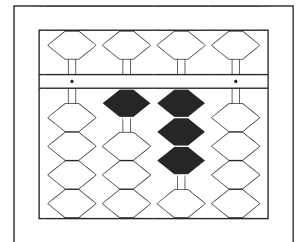
5	
---	--



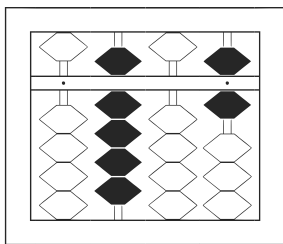
6	
---	--



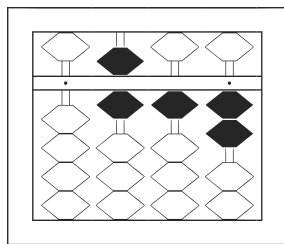
7	
---	--



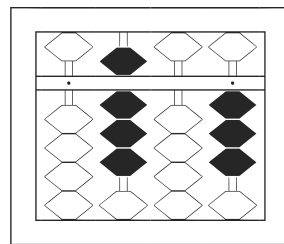
8	
---	--



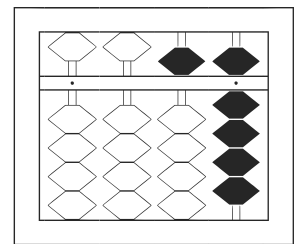
9	
---	--



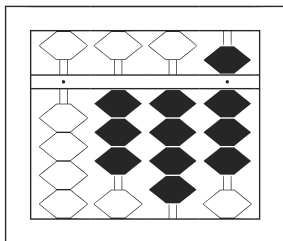
10	
----	--



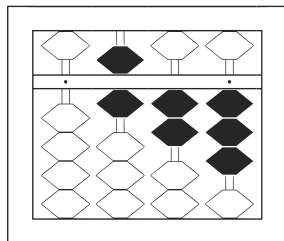
11	
----	--



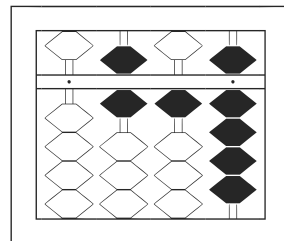
12	
----	--



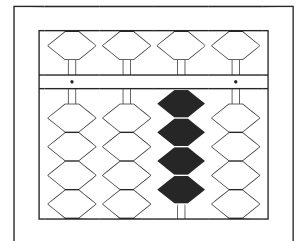
13	
----	--



14	
----	--



15	
----	--



16	
----	--

【そろばんの珠読み】

2桁から3桁 16問

名前 _____

No.006

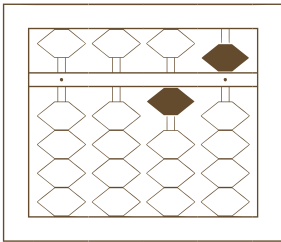
★たま よ すうじ かそろばんの珠を読んで数字で書きましょう。

分 秒

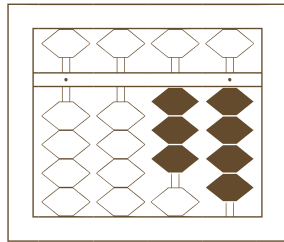
みぎはし けた いち くらい
(※右端の桁を一の位とします)

正解数

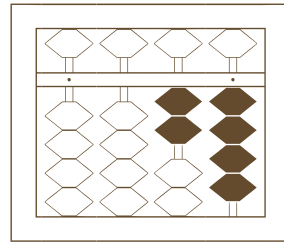
/ 16



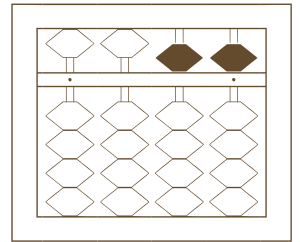
/



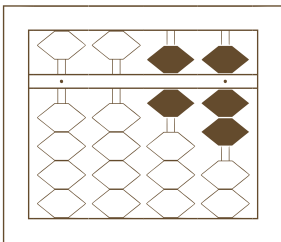
2



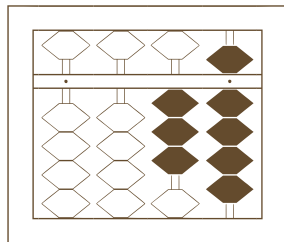
3



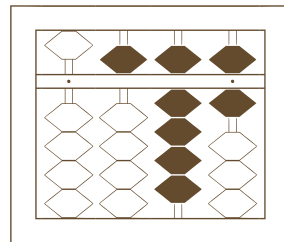
4



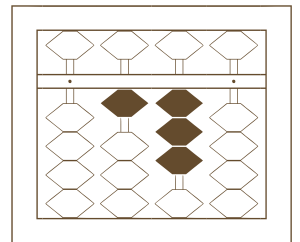
5



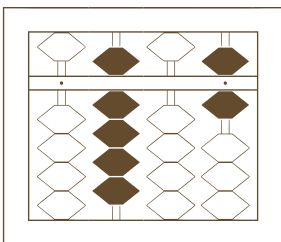
6



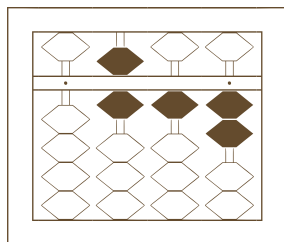
7



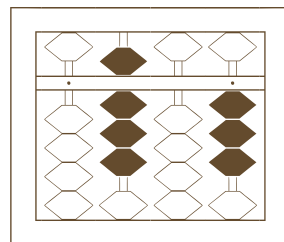
8



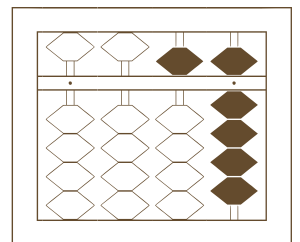
9



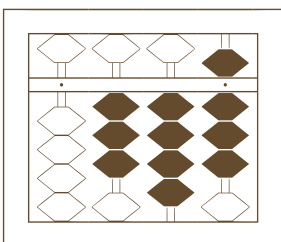
10



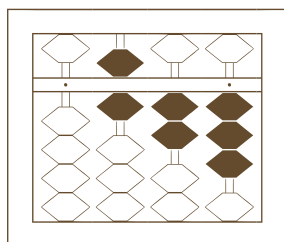
11



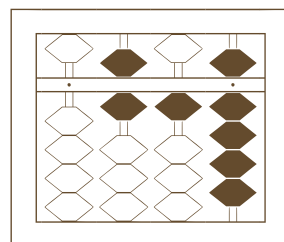
12



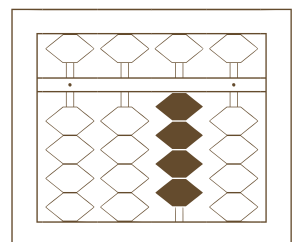
13



14



15



16

【そろばんの珠読み】

2桁から3桁 16問

名前 _____

No.006

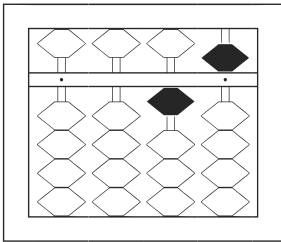
★たま よ すうじ かそろばんの珠を読んで数字で書きましょう。

分 秒

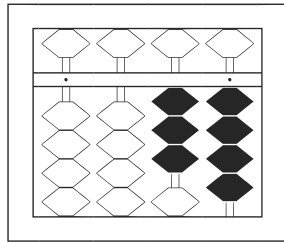
みぎはし けた いち くらい
(※右端の桁を一の位とします)

正解数

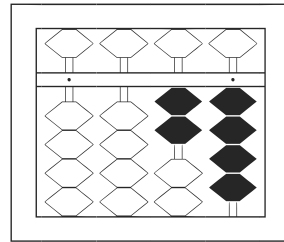
/16



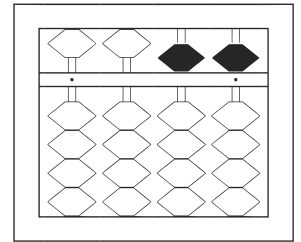
1 / 15



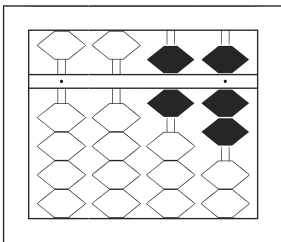
2 / 34



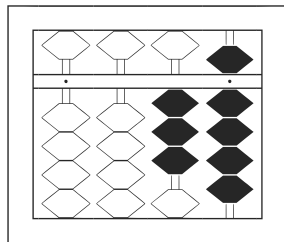
3 / 24



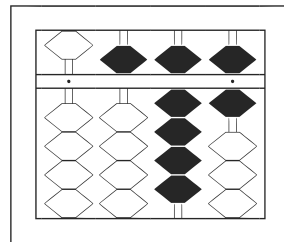
4 / 55



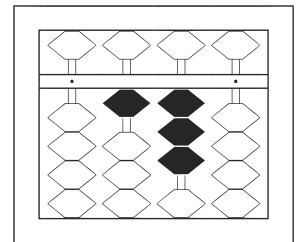
5 / 67



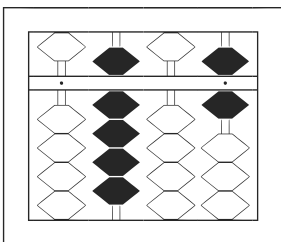
6 / 39



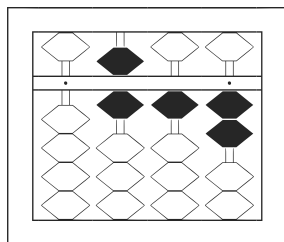
7 / 596



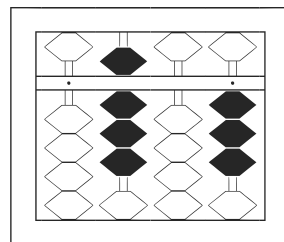
8 / 130



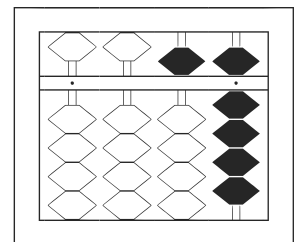
9 / 906



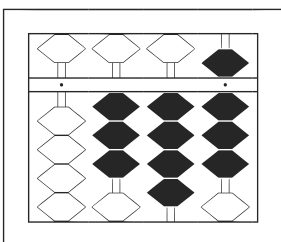
10 / 612



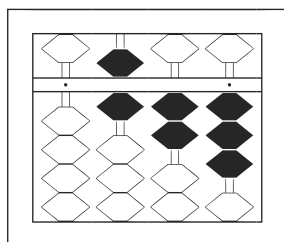
11 / 803



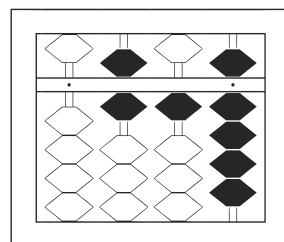
12 / 59



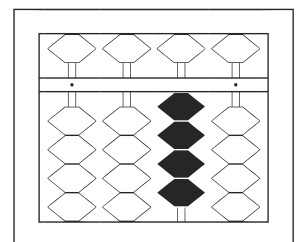
13 / 348



14 / 623



15 / 619



16 / 40