

【そろばんの珠読み】

2桁から3桁 16問

名前 _____

No.001

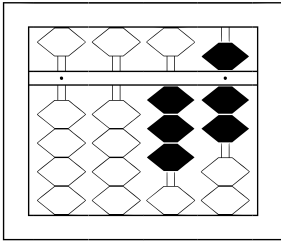
★たま よ すうじ かそろばんの珠をたま よ読んで数字で書すうじ かきましょう。

分 秒

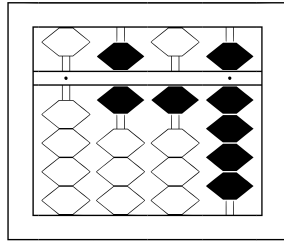
みぎはし けた いち くらい
(※右端の桁を一の位とします)

正解数

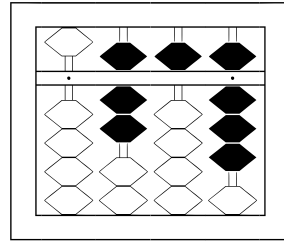
/16



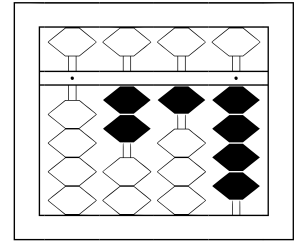
/



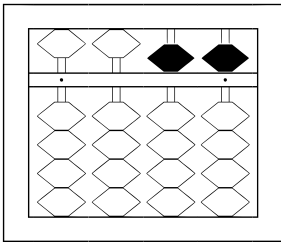
2



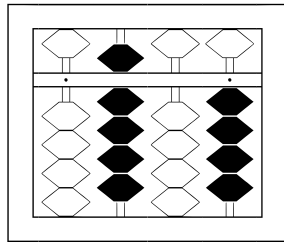
3



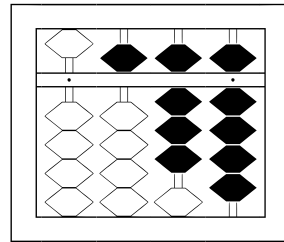
4



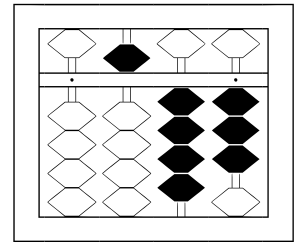
5



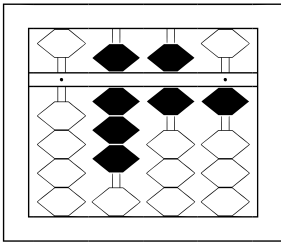
6



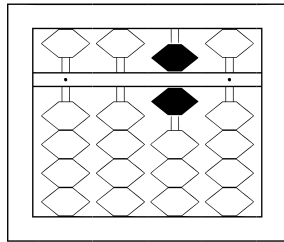
7



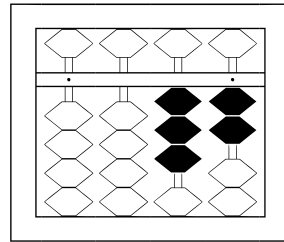
8



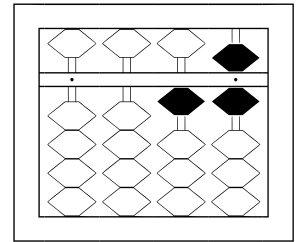
9



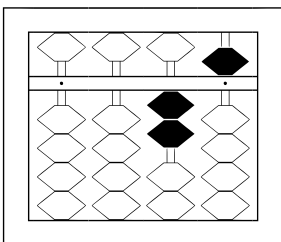
10



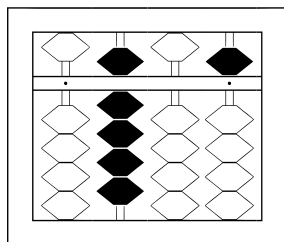
11



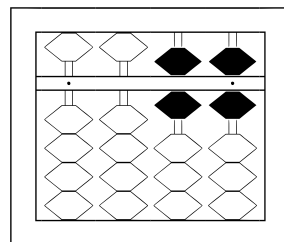
12



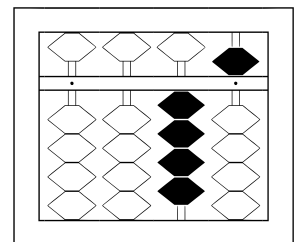
13



14



15



16

【そろばんの珠読み】

2桁から3桁 16問

名前 _____

No.001

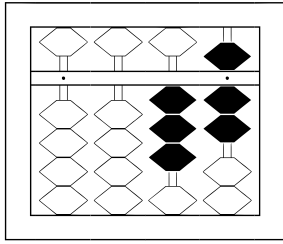
★たま よ すうじ かそろばんの珠を_{みぎはし けた いち くらい}読んで数字で書きましょう。

分 秒

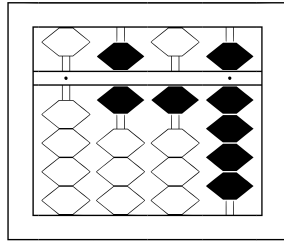
(※右端の桁を一の位とします)

正解数

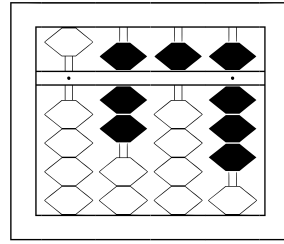
/16



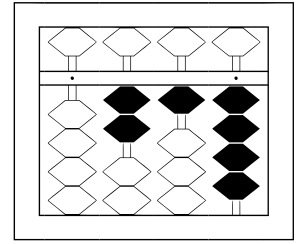
1 / 37



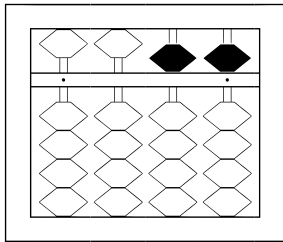
2 / 619



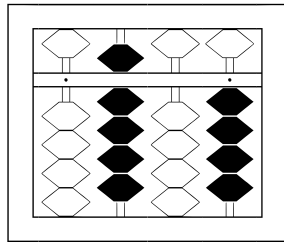
3 / 758



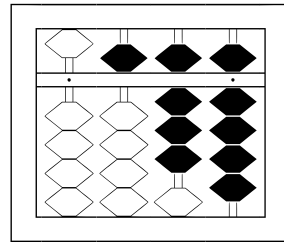
4 / 214



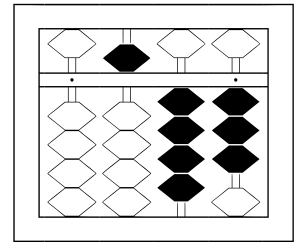
5 / 55



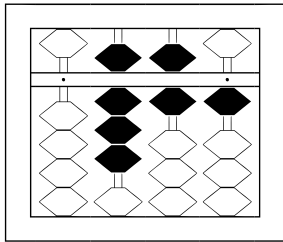
6 / 904



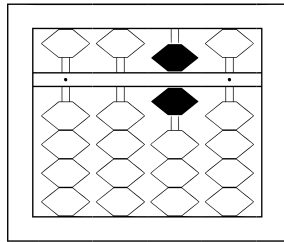
7 / 589



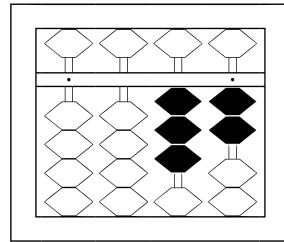
8 / 543



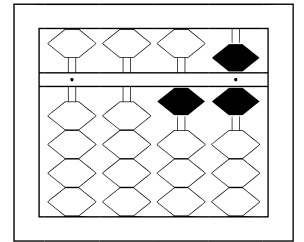
9 / 861



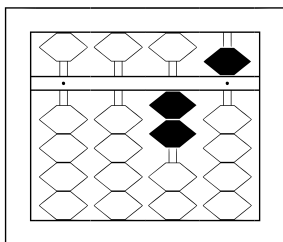
10 / 60



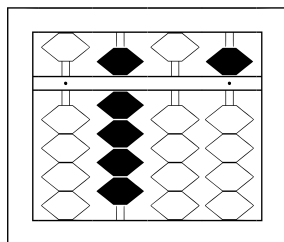
11 / 32



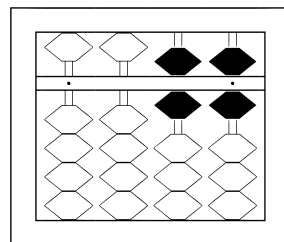
12 / 16



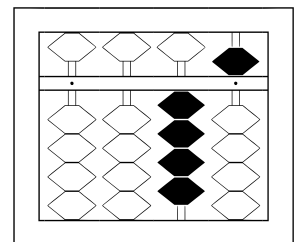
13 / 25



14 / 905



15 / 66



16 / 45