

# 【そろばんの珠読み】

2桁から3桁 16問

名前 \_\_\_\_\_

No.001

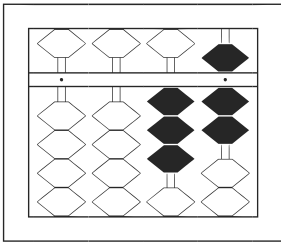
★たま よ すうじ かそろばんの珠を読んで数字で書きましょう。

分 秒

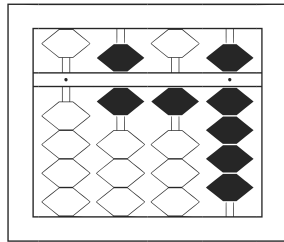
みぎはし けた いち くらい  
(※右端の桁を一の位とします)

正解数

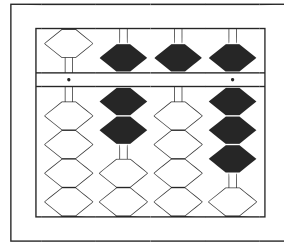
/16



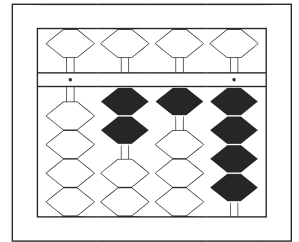
1 37



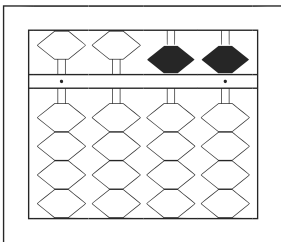
2 619



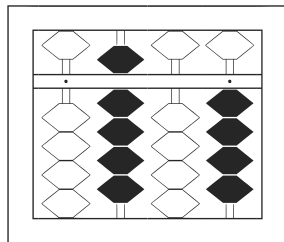
3 758



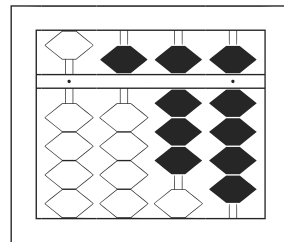
4 214



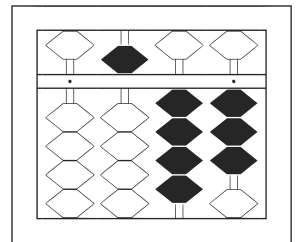
5 55



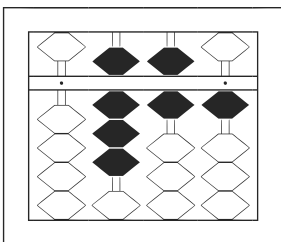
6 904



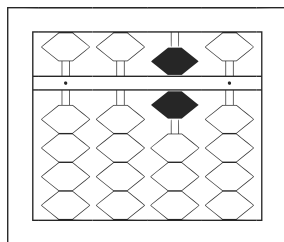
7 589



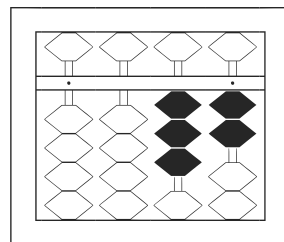
8 543



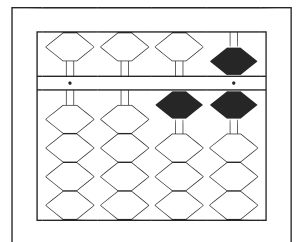
9 861



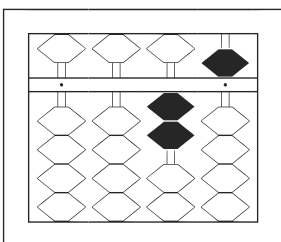
10 60



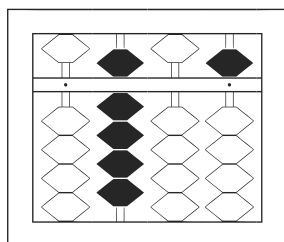
11 32



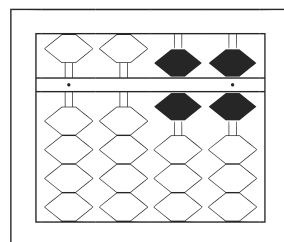
12 16



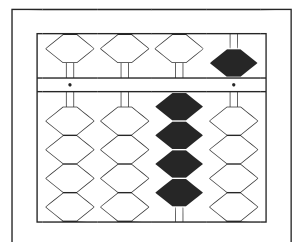
13 25



14 905



15 66



16 45

# 【そろばんの珠読み】

2桁から3桁 16問

名前 \_\_\_\_\_

No.002

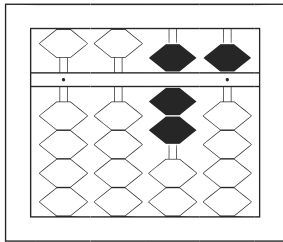
★たま よ すうじ かそろばんの珠を読んで数字で書きましょう。

分 秒

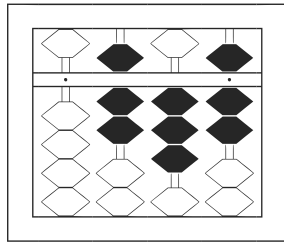
みぎはし けた いち くらい  
(※右端の桁を一の位とします)

正解数

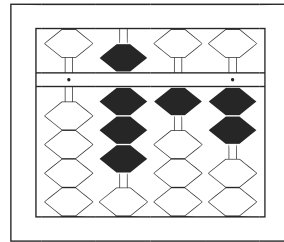
/ 16



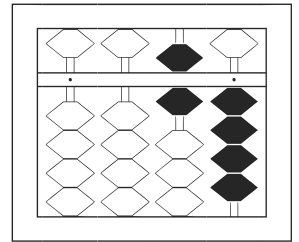
1 75



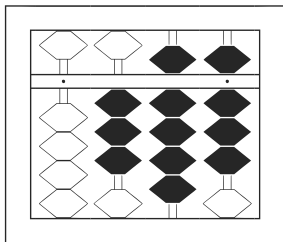
2 737



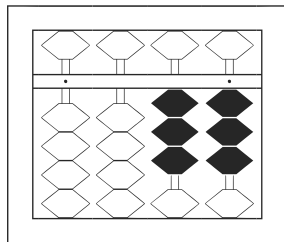
3 812



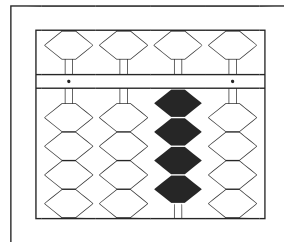
4 64



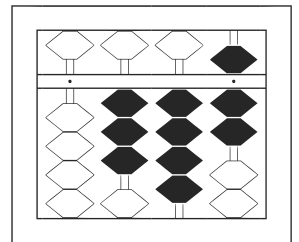
5 398



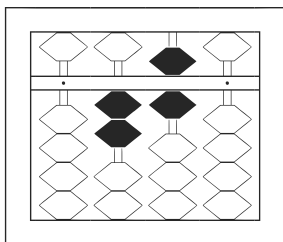
6 33



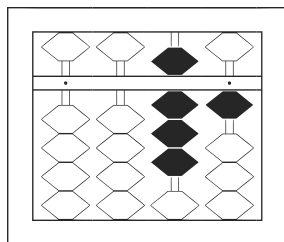
7 40



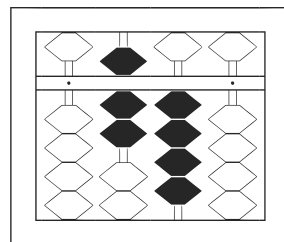
8 347



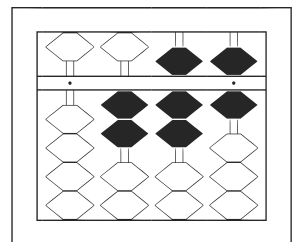
9 260



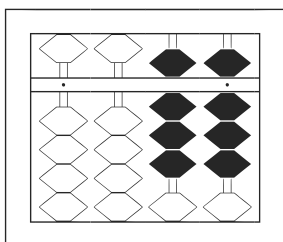
10 81



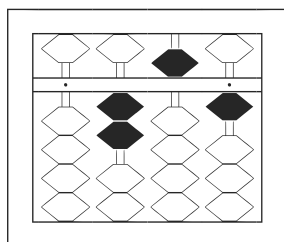
11 740



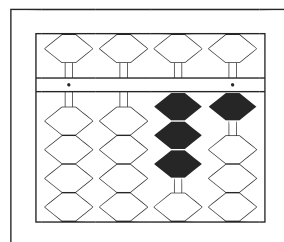
12 276



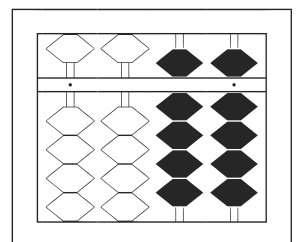
13 88



14 251



15 31



16 99

# 【そろばんの珠読み】

2桁から3桁 16問

名前 \_\_\_\_\_

No.003

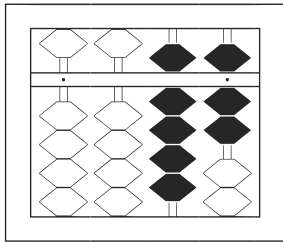
★たま よ すうじ かそろばんの珠を読んで数字で書きましょう。

分 秒

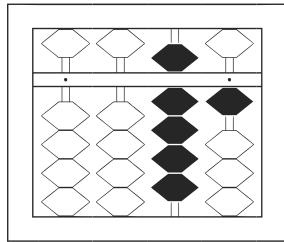
みぎはし けた いち くらい  
(※右端の桁を一の位とします)

正解数

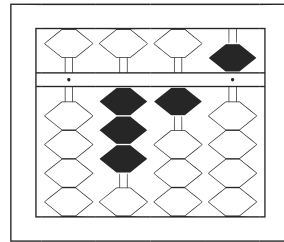
/16



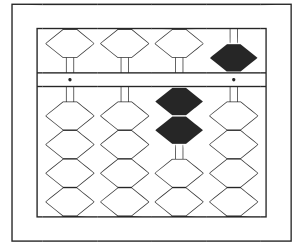
1 97



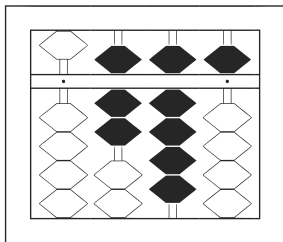
2 91



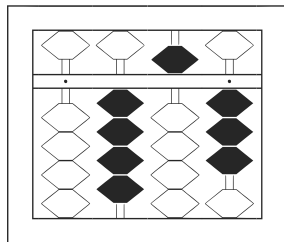
3 315



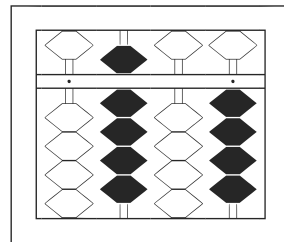
4 25



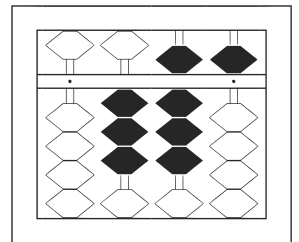
5 795



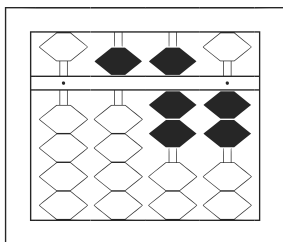
6 453



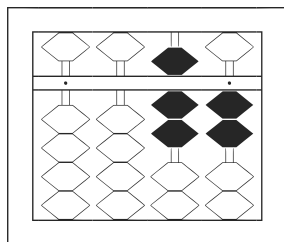
7 904



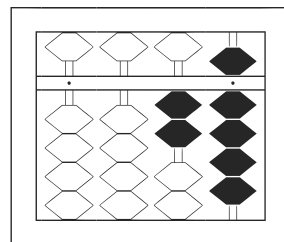
8 385



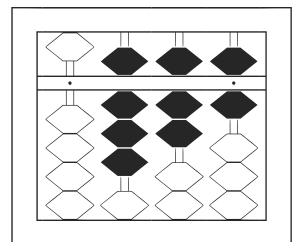
9 572



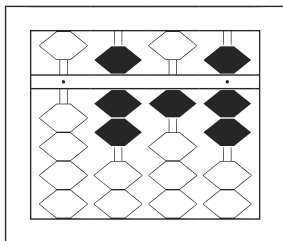
10 72



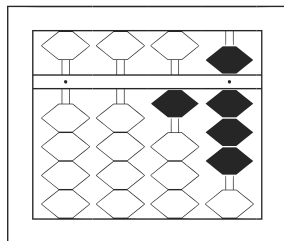
11 29



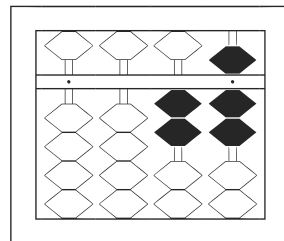
12 876



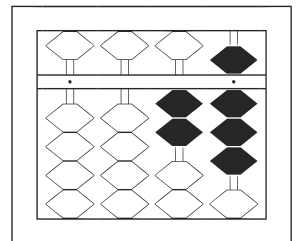
13 717



14 18



15 27



16 28

# 【そろばんの珠読み】

2桁から3桁 16問

名前 \_\_\_\_\_

No.004

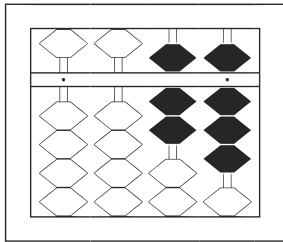
★たま よ すうじ かそろばんの珠を読んで数字で書きましょう。

分 秒

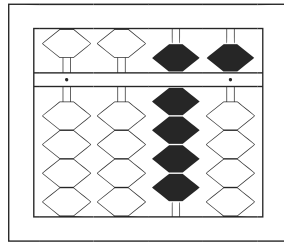
みぎはし けた いち くらい  
(※右端の桁を一の位とします)

正解数

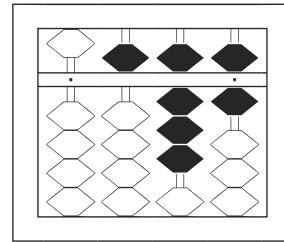
/ 16



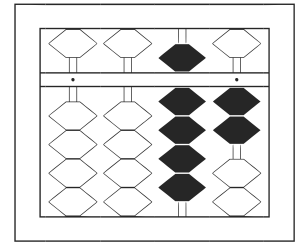
1 78



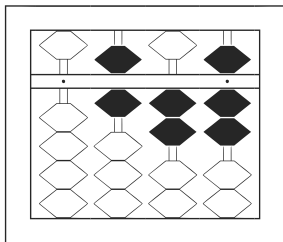
2 95



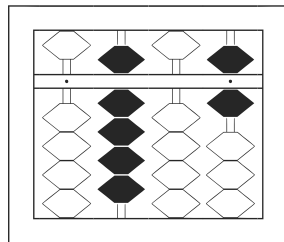
3 586



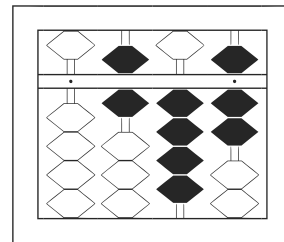
4 92



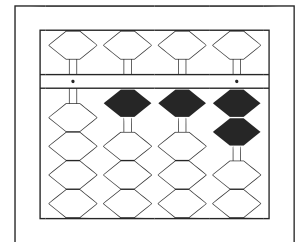
5 627



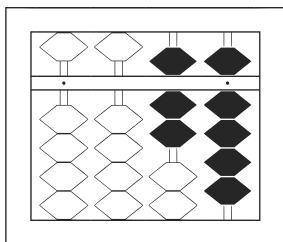
6 906



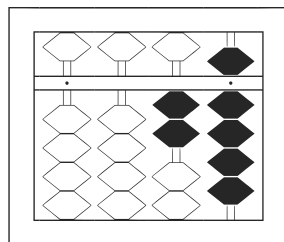
7 647



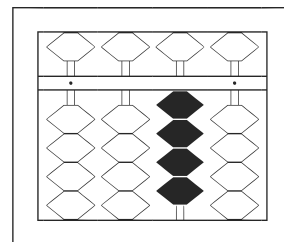
8 112



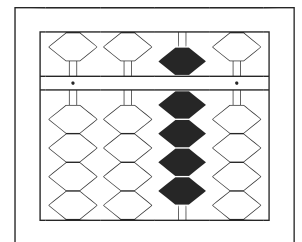
9 79



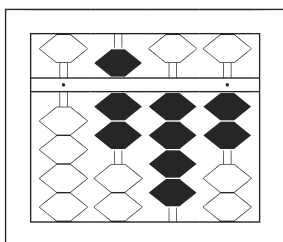
10 29



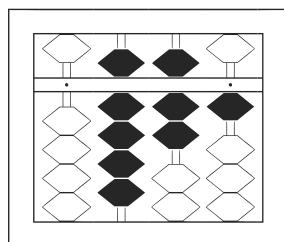
11 40



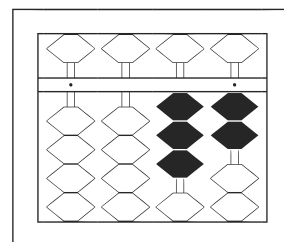
12 90



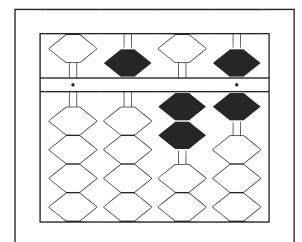
13 742



14 971



15 32



16 526

# 【そろばんの珠読み】

2桁から3桁 16問

名前 \_\_\_\_\_

No.005

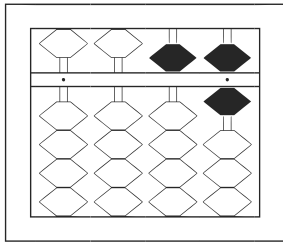
★たま よ すうじ かそろばんの珠を読んで数字で書きましょう。

分 秒

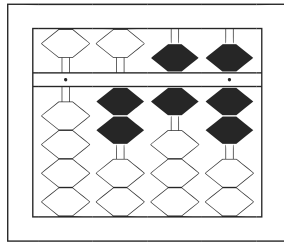
みぎはし けた いち くらい  
(※右端の桁を一の位とします)

正解数

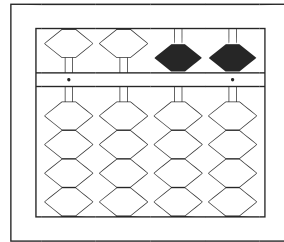
/ 16



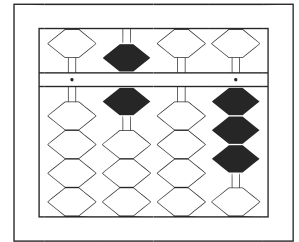
1 / 56



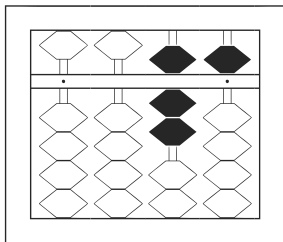
2 / 267



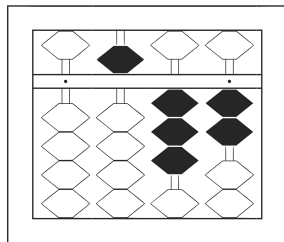
3 / 55



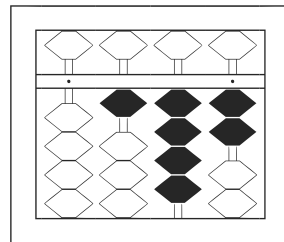
4 / 603



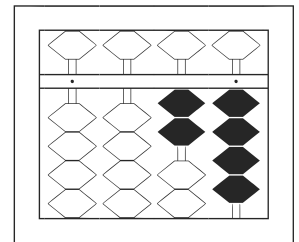
5 / 75



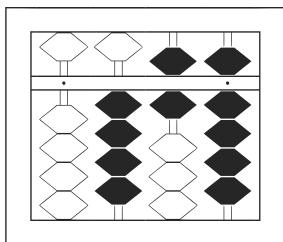
6 / 532



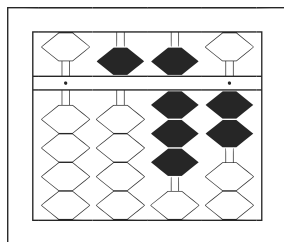
7 / 142



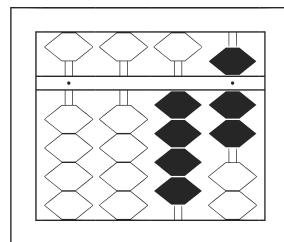
8 / 24



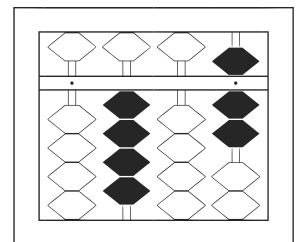
9 / 469



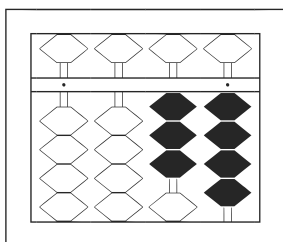
10 / 582



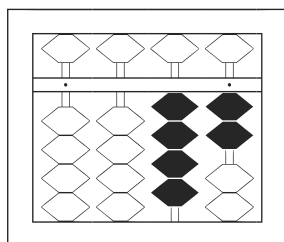
11 / 47



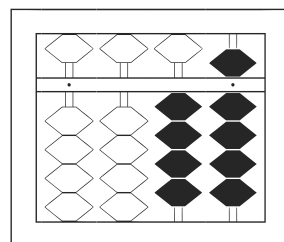
12 / 407



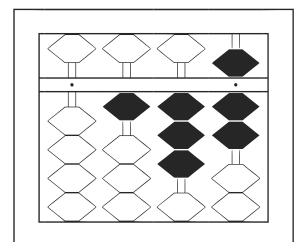
13 / 34



14 / 42



15 / 49



16 / 137

# 【そろばんの珠読み】

2桁から3桁 16問

名前 \_\_\_\_\_

No.006

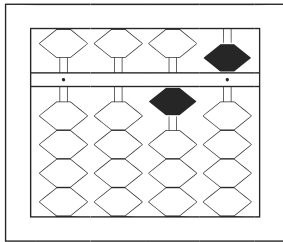
★たま よ すうじ かそろばんの珠を読んで数字で書きましょう。

分 秒

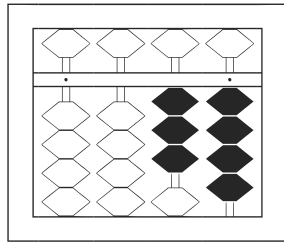
みぎはし けた いち くらい  
(※右端の桁を一の位とします)

正解数

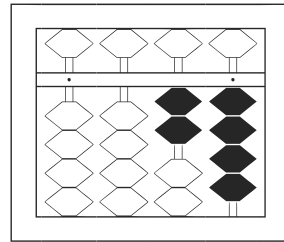
/ 16



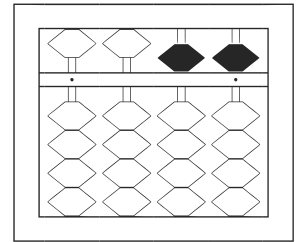
1 / 15



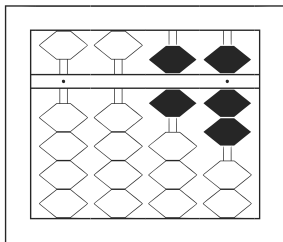
2 / 34



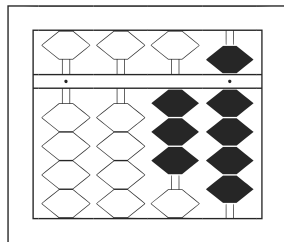
3 / 24



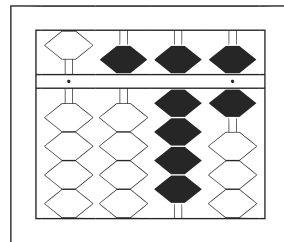
4 / 55



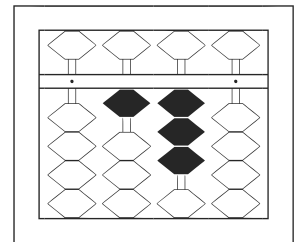
5 / 67



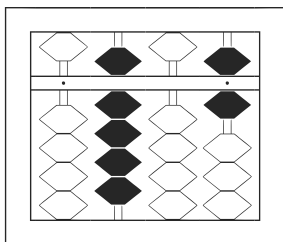
6 / 39



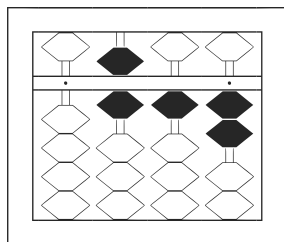
7 / 596



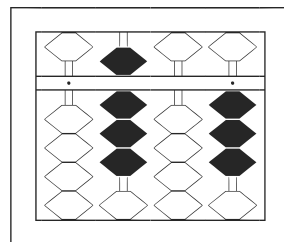
8 / 130



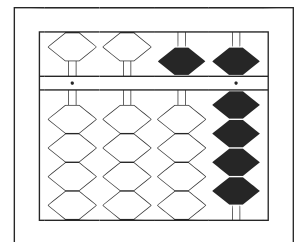
9 / 906



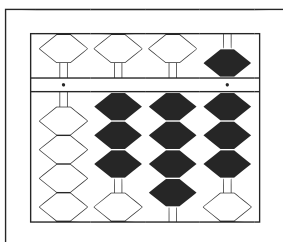
10 / 612



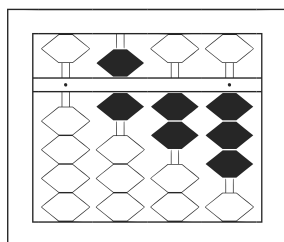
11 / 803



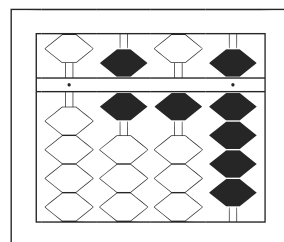
12 / 59



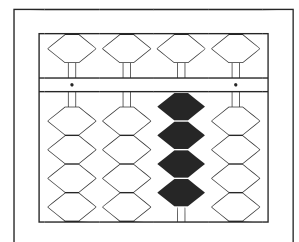
13 / 348



14 / 623



15 / 619



16 / 40

# 【そろばんの珠読み】

2桁から3桁 16問

名前 \_\_\_\_\_

No.007

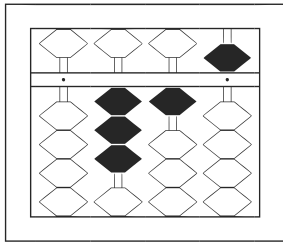
★たま よ すうじ かそろばんの珠を読んで数字で書きましょう。

分 秒

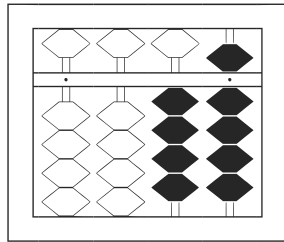
みぎはし けた いち くらい  
(※右端の桁を一の位とします)

正解数

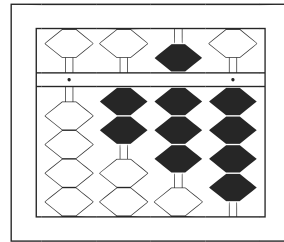
/16



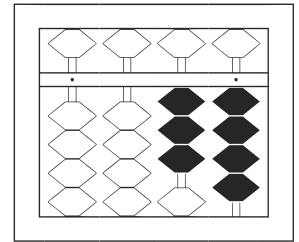
1 3 / 5



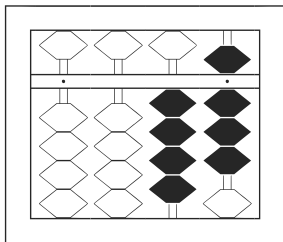
2 4 9



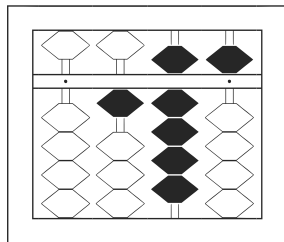
3 2 8 4



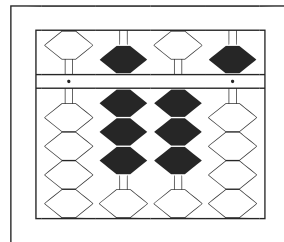
4 3 4



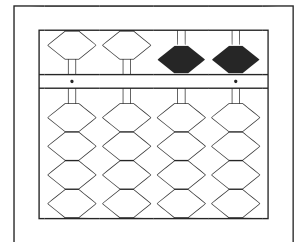
5 4 8



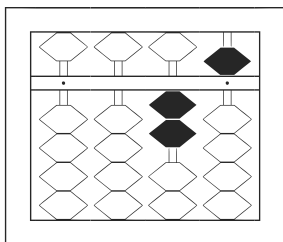
6 1 9 5



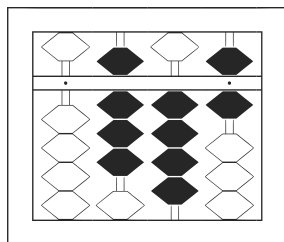
7 8 3 5



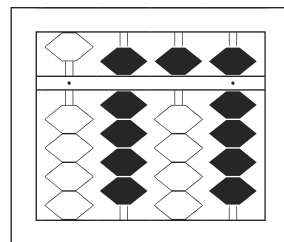
8 5 5



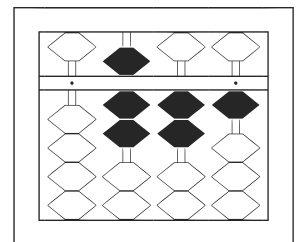
9 2 5



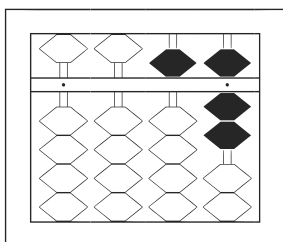
10 8 4 6



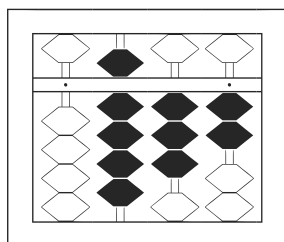
11 9 5 9



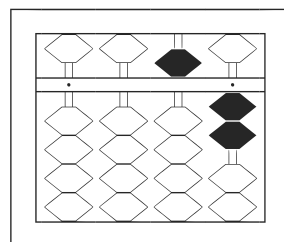
12 7 2 /



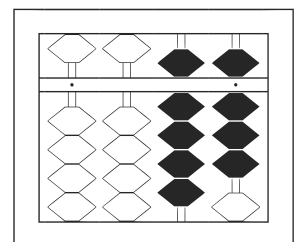
13 5 7



14 9 3 2



15 5 2



16 9 8

# 【そろばんの珠読み】

2桁から3桁 16問

名前 \_\_\_\_\_

No.008

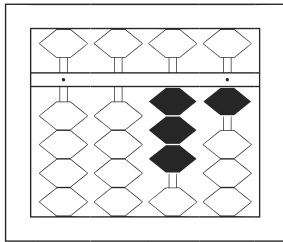
★たま よ すうじ かそろばんの珠を読んで数字で書きましょう。

分 秒

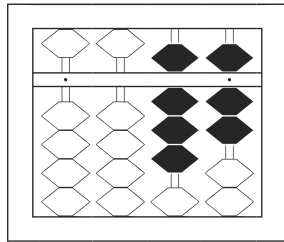
みぎはし けた いち くらい  
(※右端の桁を一の位とします)

正解数

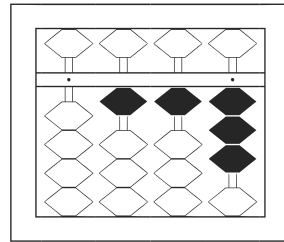
/ 16



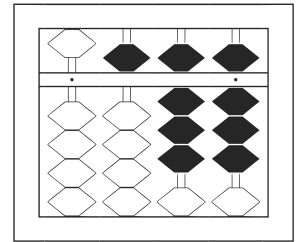
1 / 31



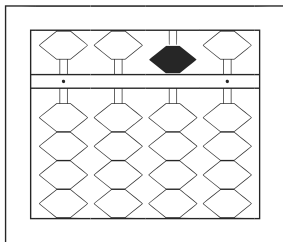
2 / 87



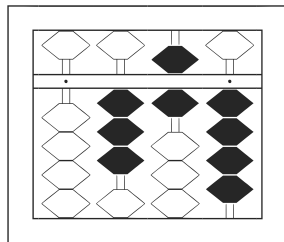
3 / 113



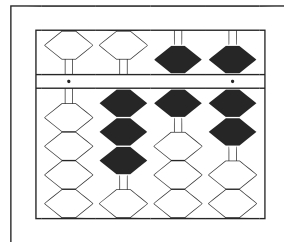
4 / 588



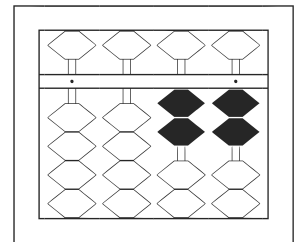
5 / 50



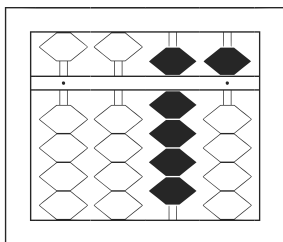
6 / 364



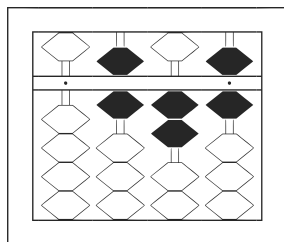
7 / 367



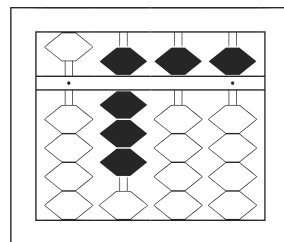
8 / 22



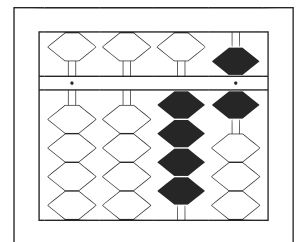
9 / 95



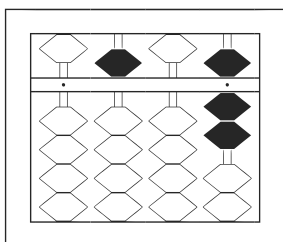
10 / 626



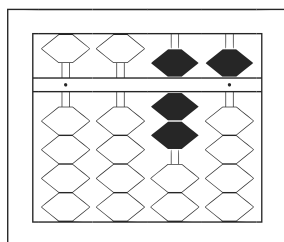
11 / 855



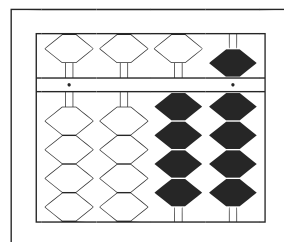
12 / 46



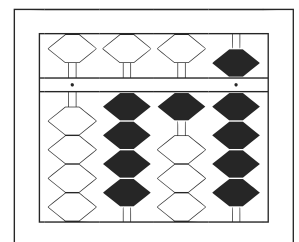
13 / 507



14 / 75



15 / 49



16 / 419



# 【そろばんの珠読み】

2桁から3桁 16問

名前 \_\_\_\_\_

No.009

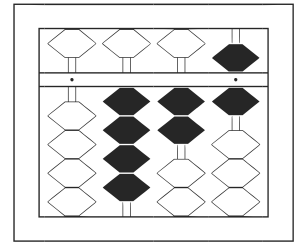
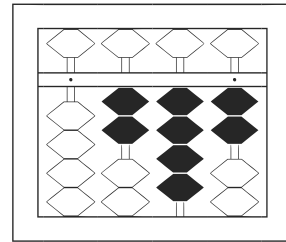
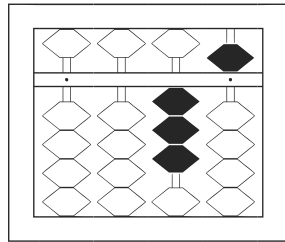
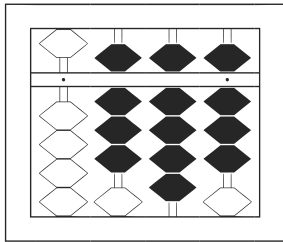
★たま よ すうじ かそろばんの珠を読んで数字で書きましょう。

分 秒

みぎはし けた いち くらい  
(※右端の桁を一の位とします)

正解数

/ 16

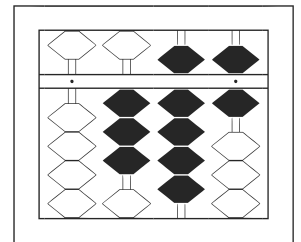
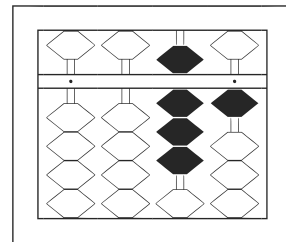
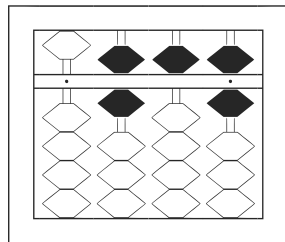
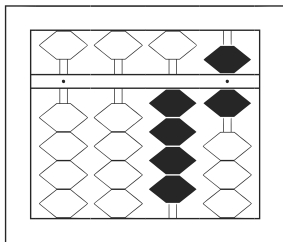


1 898

2 35

3 242

4 426

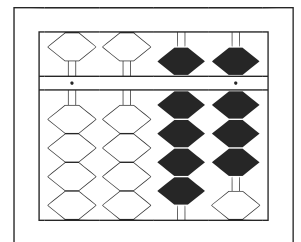
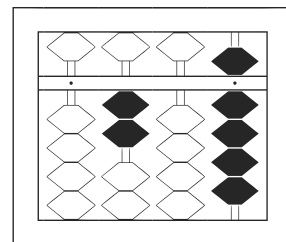
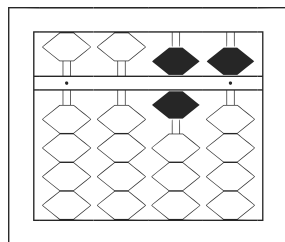
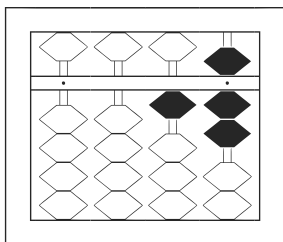


5 46

6 656

7 81

8 396

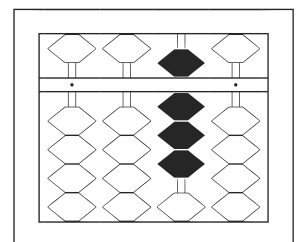
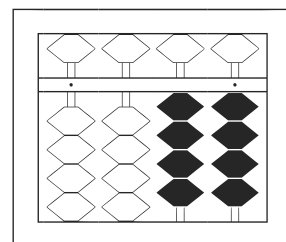
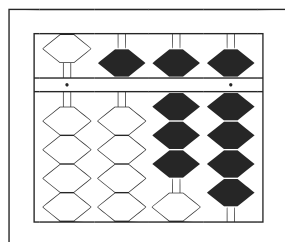
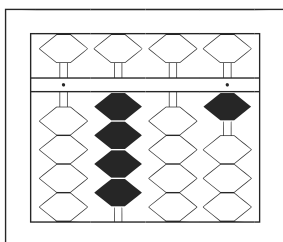


9 17

10 65

11 209

12 98



13 401

14 589

15 44

16 80

# 【そろばんの珠読み】

2桁から3桁 16問

名前 \_\_\_\_\_

No.010

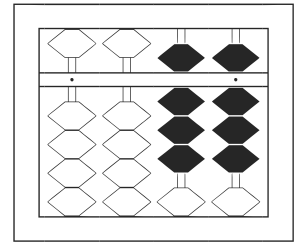
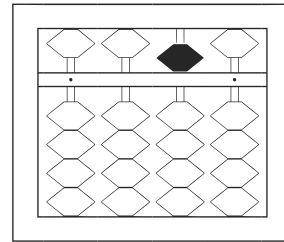
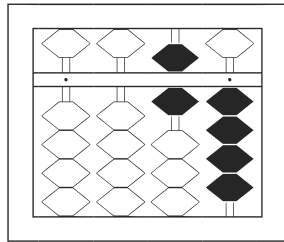
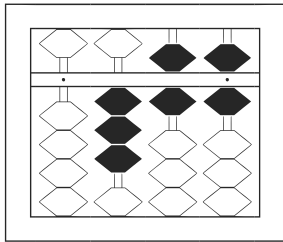
★たま よ すうじ かそろばんの珠を読んで数字で書きましょう。

分 秒

みぎはし けた いち くらい  
(※右端の桁を一の位とします)

正解数

/16

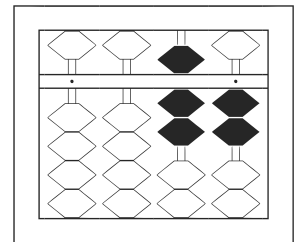
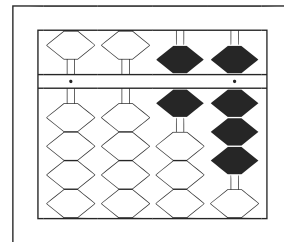
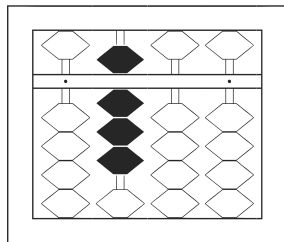
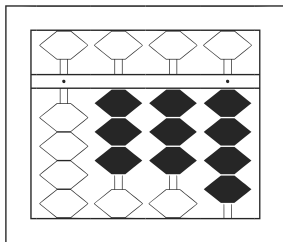


1 366

2 64

3 50

4 88

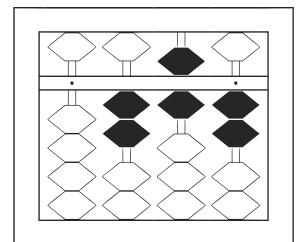
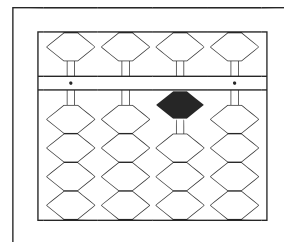
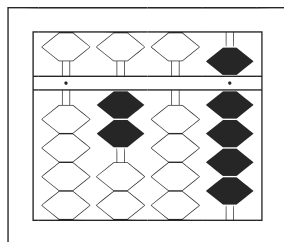
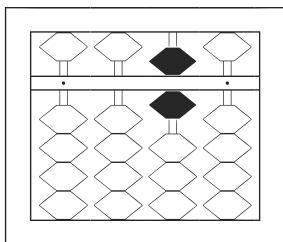


5 334

6 800

7 68

8 72

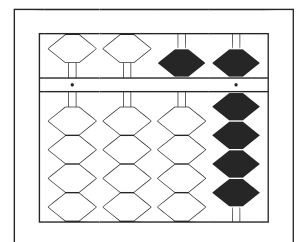
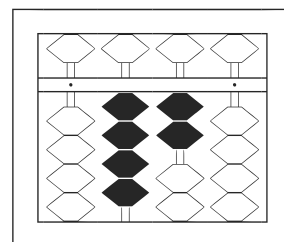
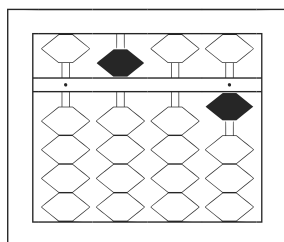
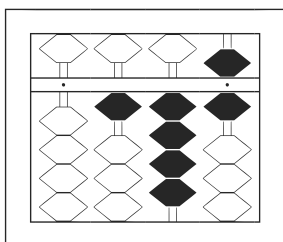


9 60

10 209

11 10

12 262



13 146

14 501

15 420

16 59