

【そろばんの珠読み】

2桁から3桁 16問

名前 _____

No.001

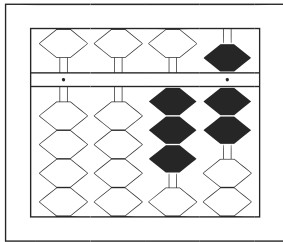
★たま よ すうじ かそろばんの珠を読んで数字で書きましょう。

分 秒

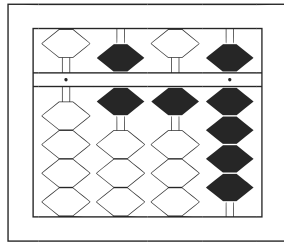
みぎはし けた いち くらい
(※右端の桁を一の位とします)

正解数

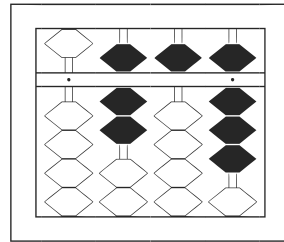
/ 16



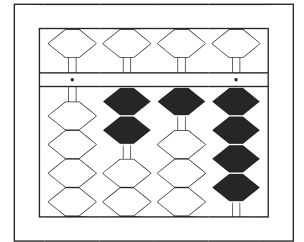
/	
---	--



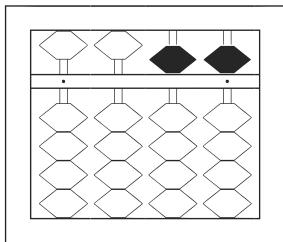
2	
---	--



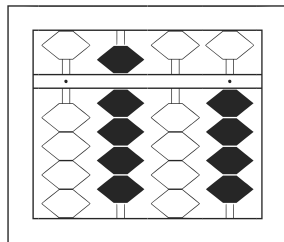
3	
---	--



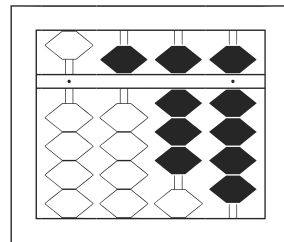
4	
---	--



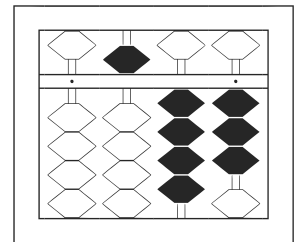
5	
---	--



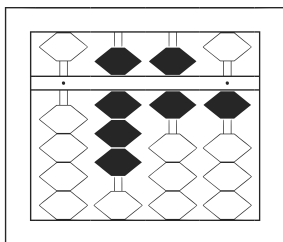
6	
---	--



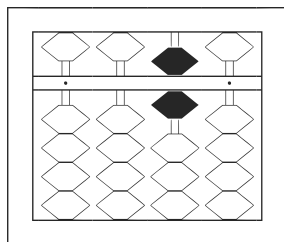
7	
---	--



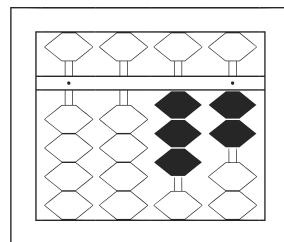
8	
---	--



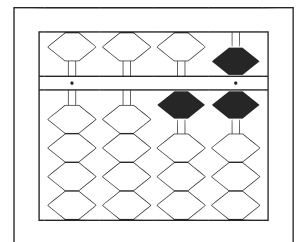
9	
---	--



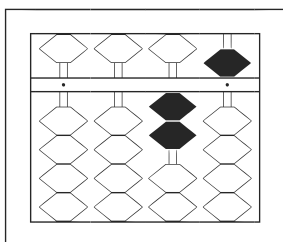
10	
----	--



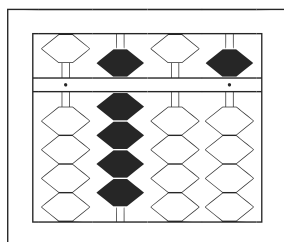
11	
----	--



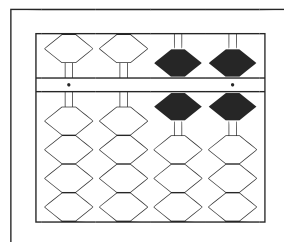
12	
----	--



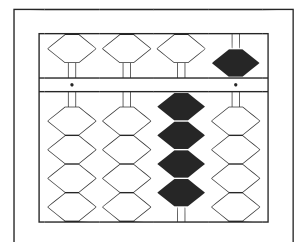
13	
----	--



14	
----	--



15	
----	--



16	
----	--

【そろばんの珠読み】

2桁から3桁 16問

名前 _____

No.002

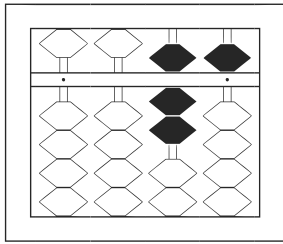
★たま よ すうじ かそろばんの珠を読んで数字で書きましょう。

分 秒

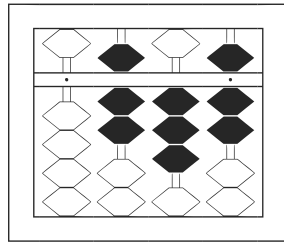
みぎはし けた いち くらい
(※右端の桁を一の位とします)

正解数

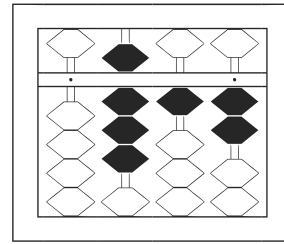
/ 16



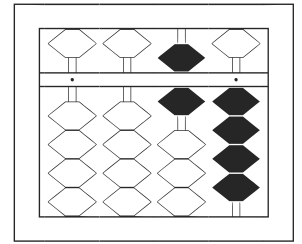
/



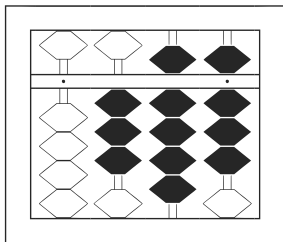
2



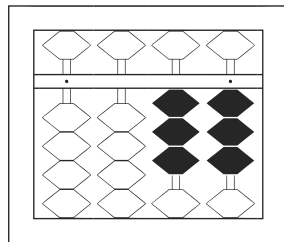
3



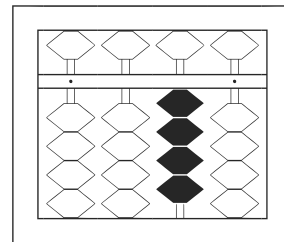
4



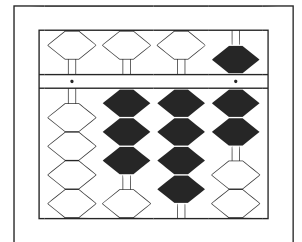
5



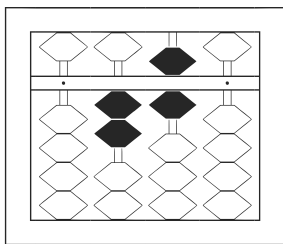
6



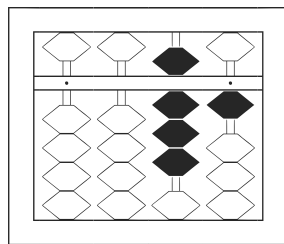
7



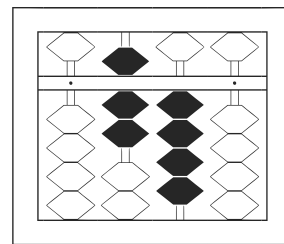
8



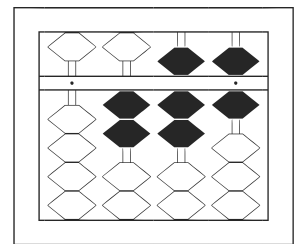
9



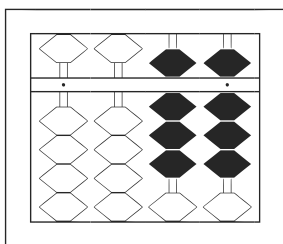
10



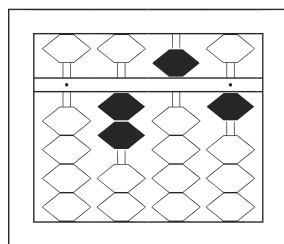
11



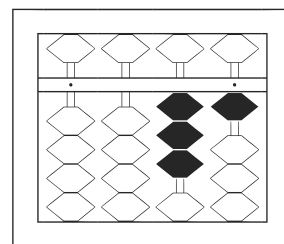
12



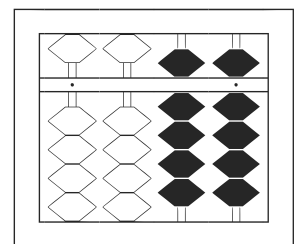
13



14



15



16

【そろばんの珠読み】

2桁から3桁 16問

名前 _____

No.003

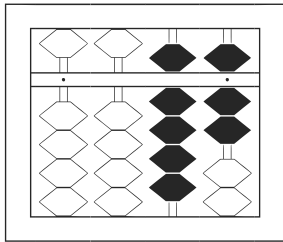
★たま よ すうじ かそろばんの珠を読んで数字で書きましょう。

分 秒

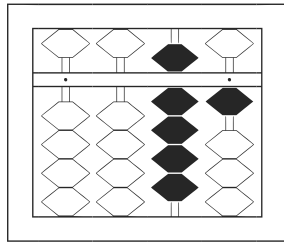
みぎはし けた いち くらい
(※右端の桁を一の位とします)

正解数

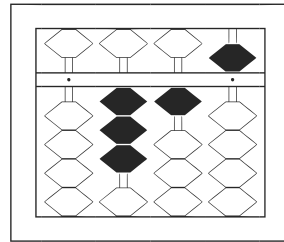
/ 16



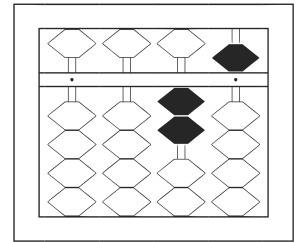
/	
---	--



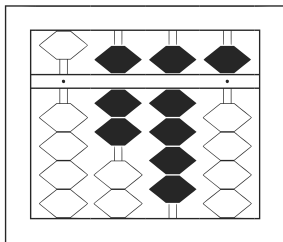
2	
---	--



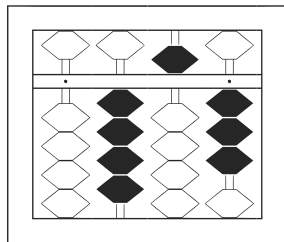
3	
---	--



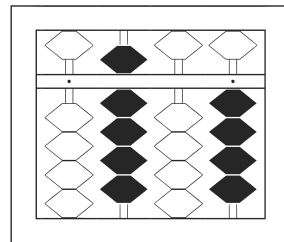
4	
---	--



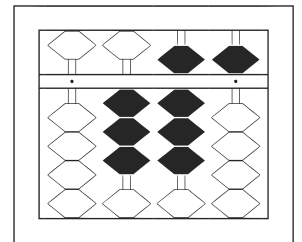
5	
---	--



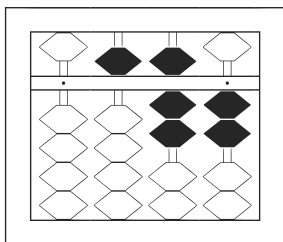
6	
---	--



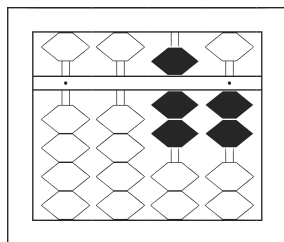
7	
---	--



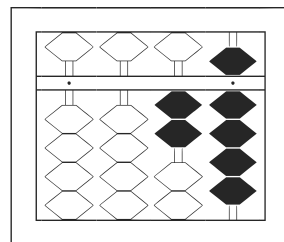
8	
---	--



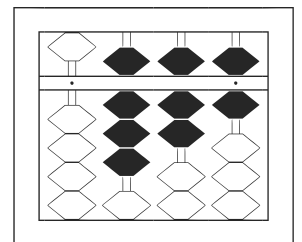
9	
---	--



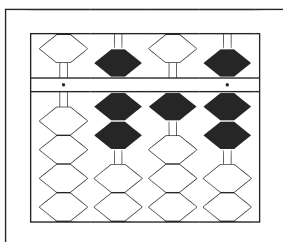
10	
----	--



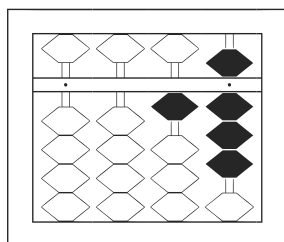
11	
----	--



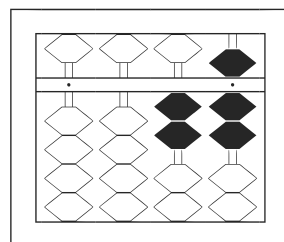
12	
----	--



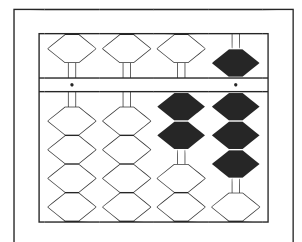
13	
----	--



14	
----	--



15	
----	--



16	
----	--

【そろばんの珠読み】

2桁から3桁 16問

名前 _____

No.004

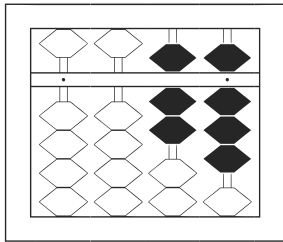
★たま よ すうじ かそろばんの珠をみざはし けた いち くらい読んで数字で書きましょう。

分 秒

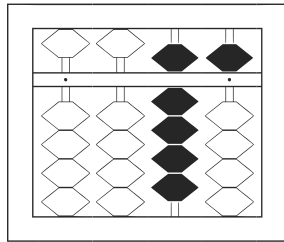
(※右端の桁を一の位とします)

正解数

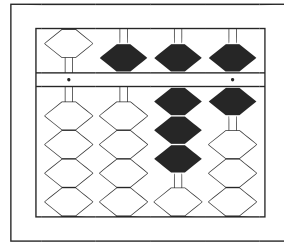
/ 16



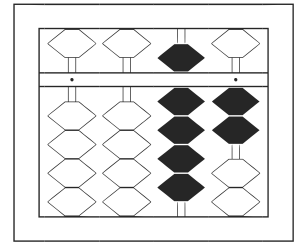
/



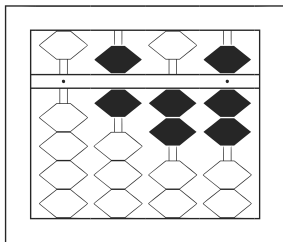
2



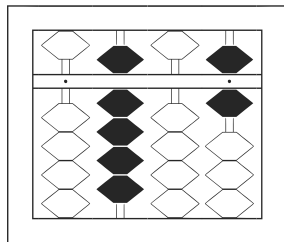
3



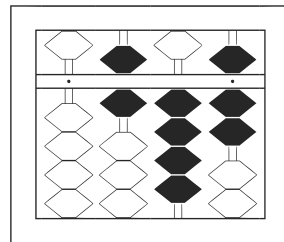
4



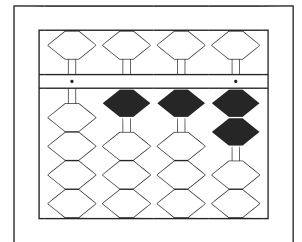
5



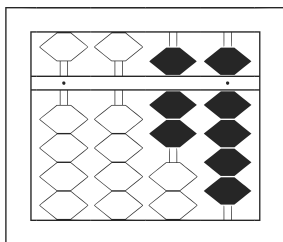
6



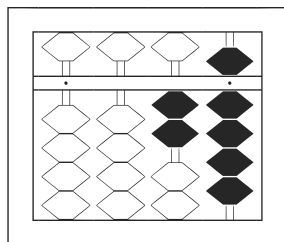
7



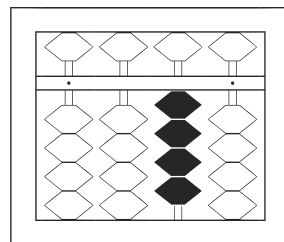
8



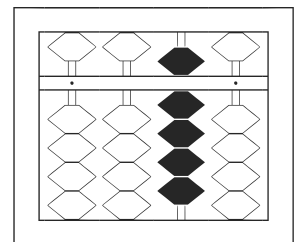
9



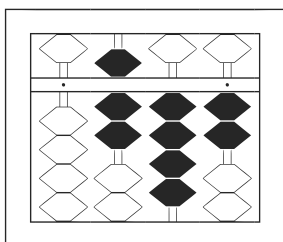
10



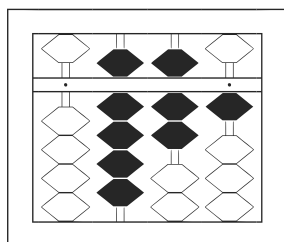
11



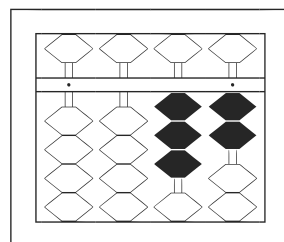
12



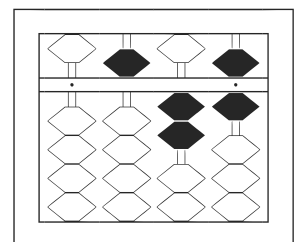
13



14



15



16

【そろばんの珠読み】

2桁から3桁 16問

名前 _____

No.005

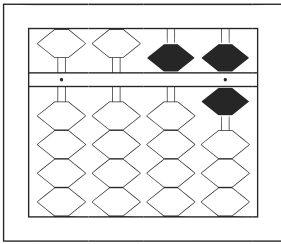
★たま よ すうじ かそろばんの珠を読んで数字で書きましょう。

分 秒

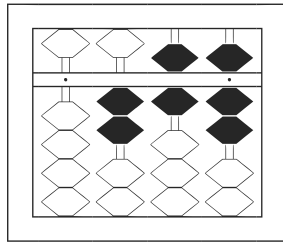
みぎはし けた いち くらい
(※右端の桁を一の位とします)

正解数

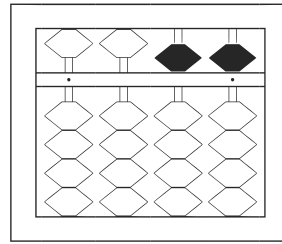
/ 16



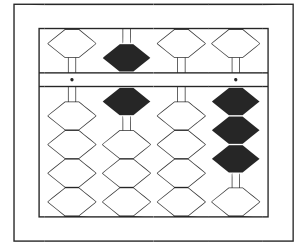
/



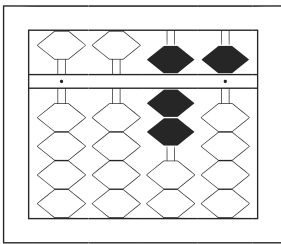
2



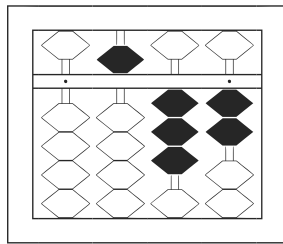
3



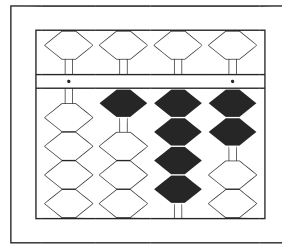
4



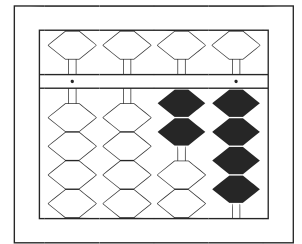
5



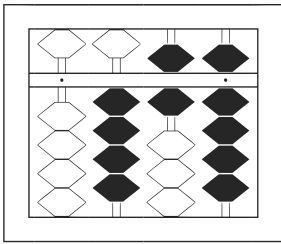
6



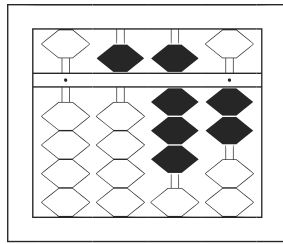
7



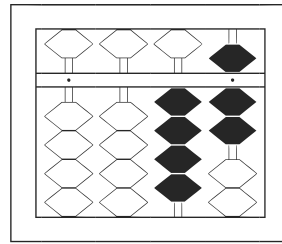
8



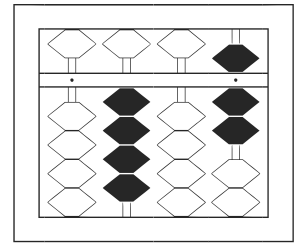
9



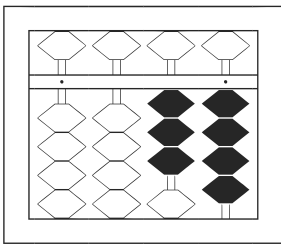
10



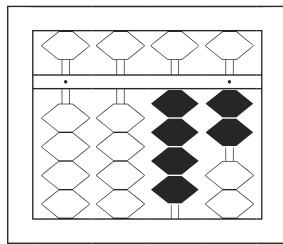
11



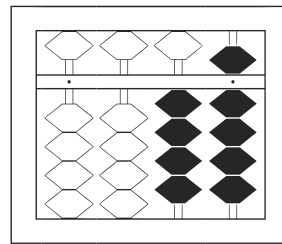
12



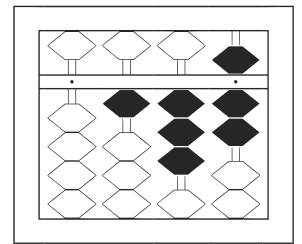
13



14



15



16

【そろばんの珠読み】

2桁から3桁 16問

名前 _____

No.006

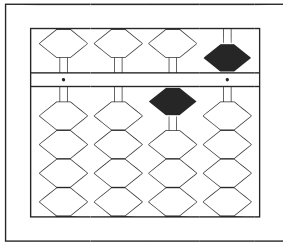
★たま よ すうじ かそろばんの珠を読んで数字で書きましょう。

分 秒

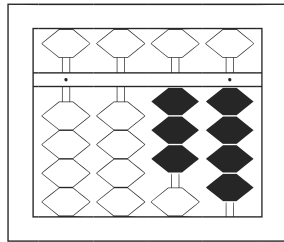
みぎはし けた いち くらい
(※右端の桁を一の位とします)

正解数

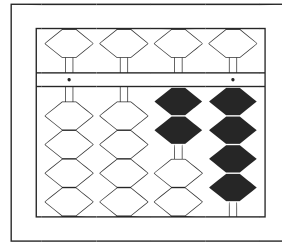
/ 16



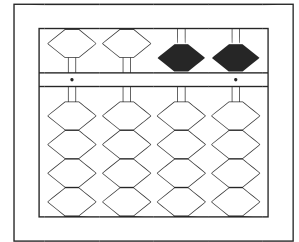
/	
---	--



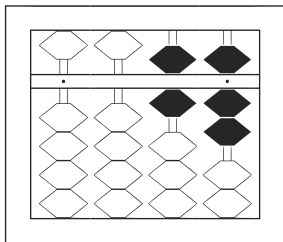
2	
---	--



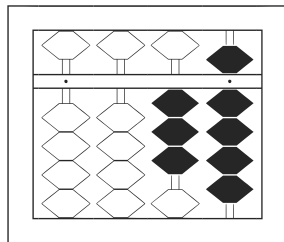
3	
---	--



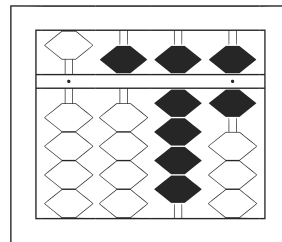
4	
---	--



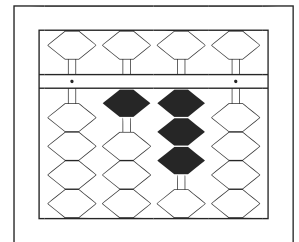
5	
---	--



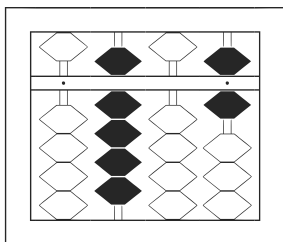
6	
---	--



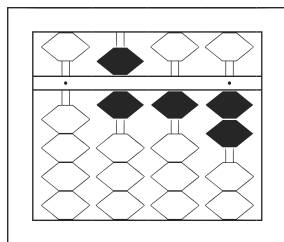
7	
---	--



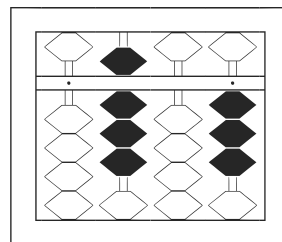
8	
---	--



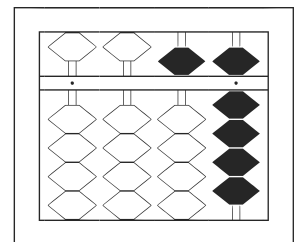
9	
---	--



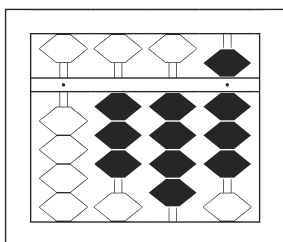
10	
----	--



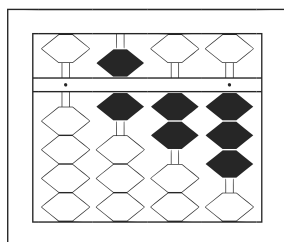
11	
----	--



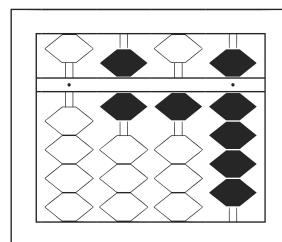
12	
----	--



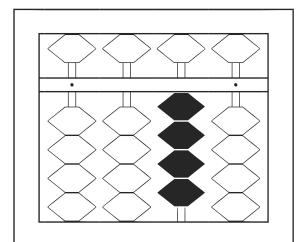
13	
----	--



14	
----	--



15	
----	--



16	
----	--

【そろばんの珠読み】

2桁から3桁 16問

名前 _____

No.007

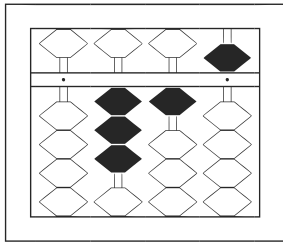
★たま よ すうじ かそろばんの珠を読んで数字で書きましょう。

分 秒

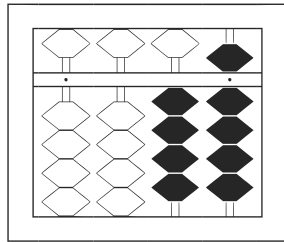
みぎはし けた いち くらい
(※右端の桁を一の位とします)

正解数

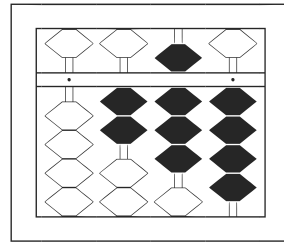
/ 16



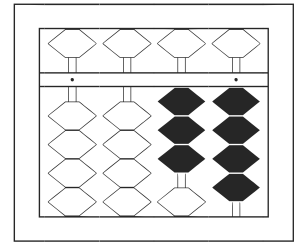
/



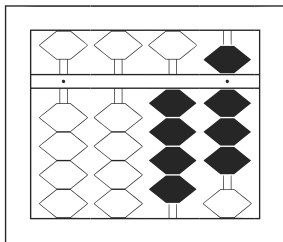
2



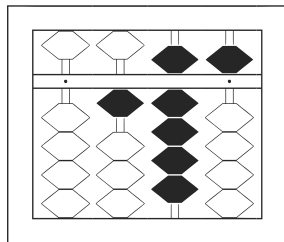
3



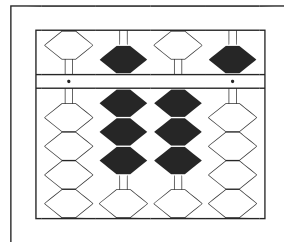
4



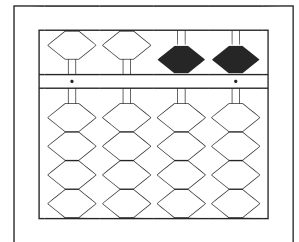
5



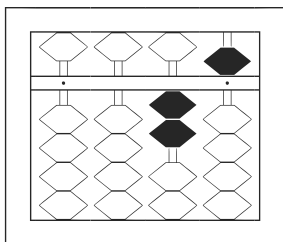
6



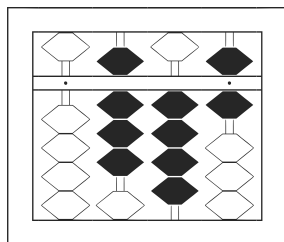
7



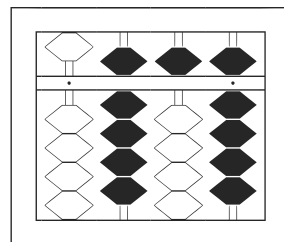
8



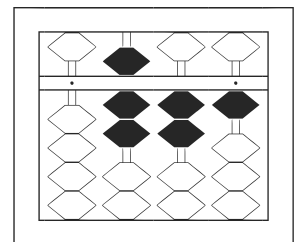
9



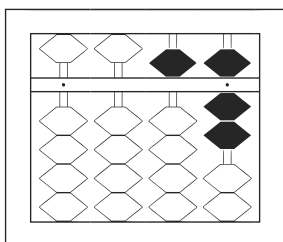
10



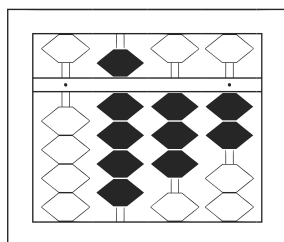
11



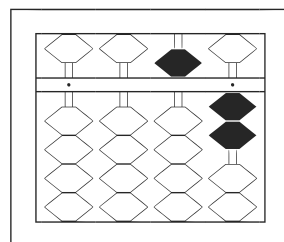
12



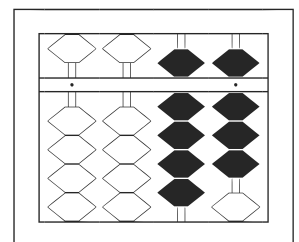
13



14



15



16

【そろばんの珠読み】

2桁から3桁 16問

名前 _____

No.008

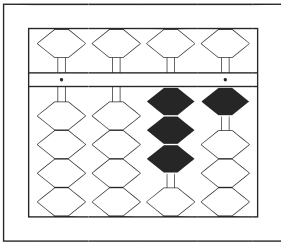
★たま よ すうじ かそろばんの珠を読んで数字で書きましょう。

分 秒

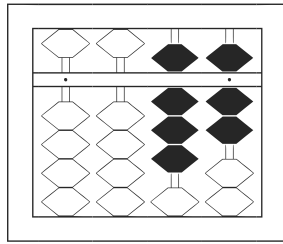
みぎはし けた いち くらい
(※右端の桁を一の位とします)

正解数

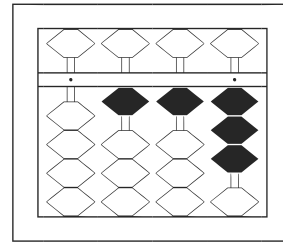
/ 16



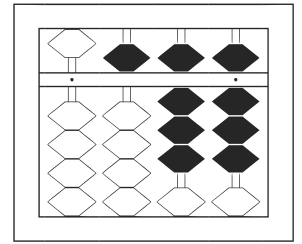
/	
---	--



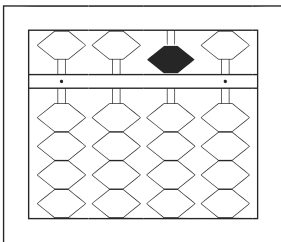
2	
---	--



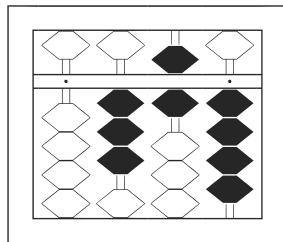
3	
---	--



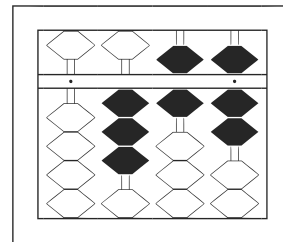
4	
---	--



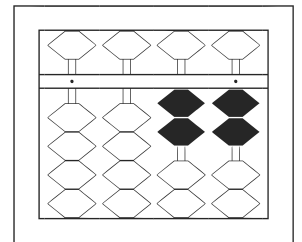
5	
---	--



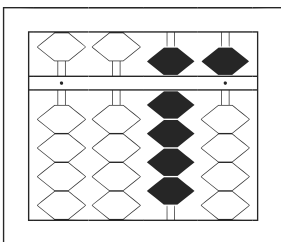
6	
---	--



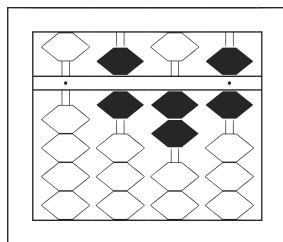
7	
---	--



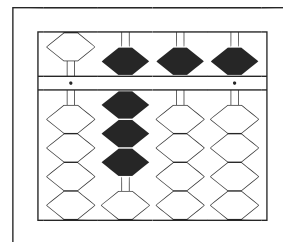
8	
---	--



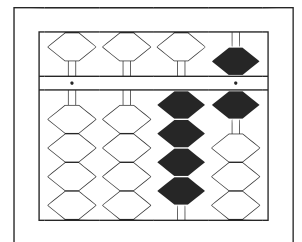
9	
---	--



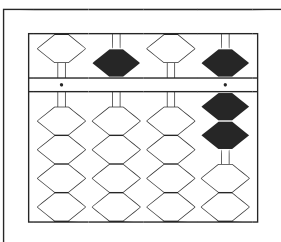
10	
----	--



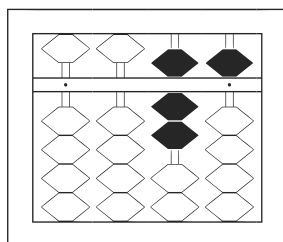
11	
----	--



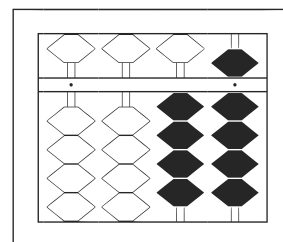
12	
----	--



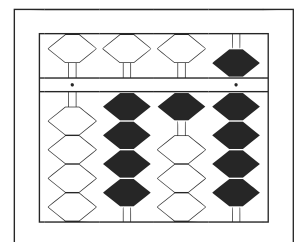
13	
----	--



14	
----	--



15	
----	--



16	
----	--

【そろばんの珠読み】

2桁から3桁 16問

名前 _____

No.009

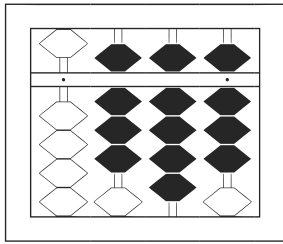
★たま よ すうじ かそろばんの珠を読んで数字で書きましょう。

分 秒

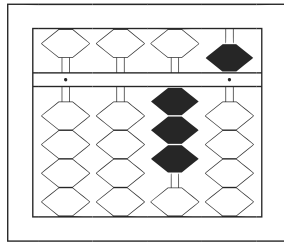
みぎはし けた いち くらい
(※右端の桁を一の位とします)

正解数

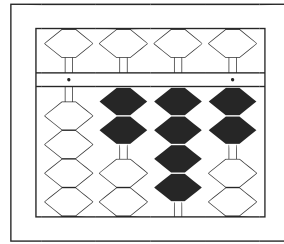
/ 16



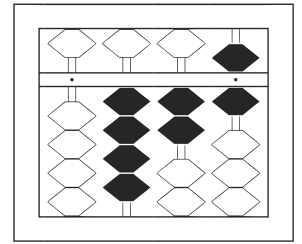
/



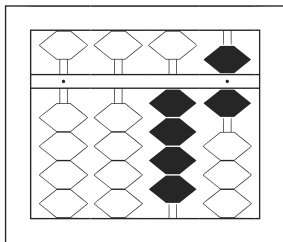
2



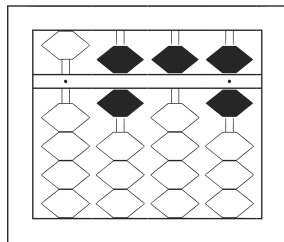
3



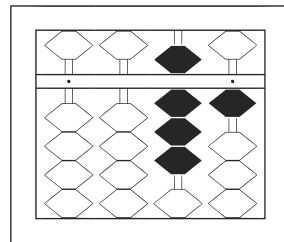
4



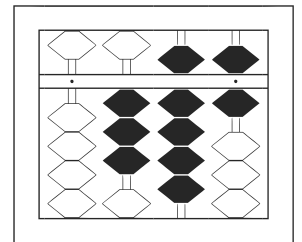
5



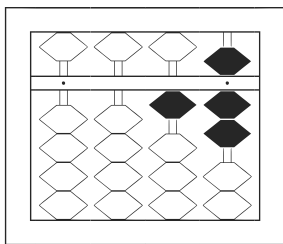
6



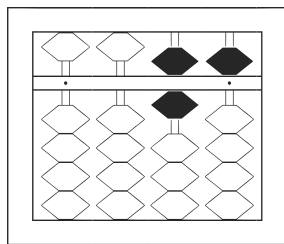
7



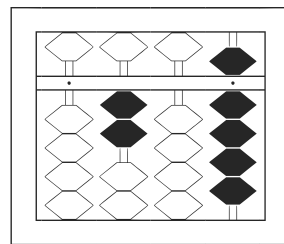
8



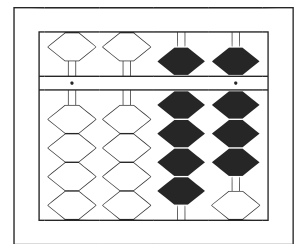
9



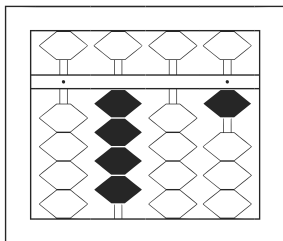
10



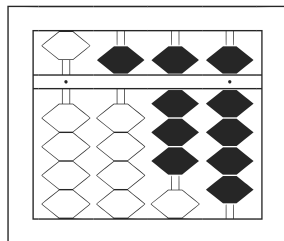
11



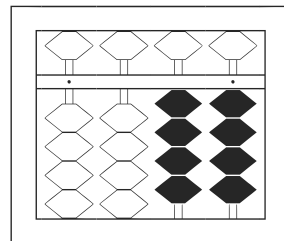
12



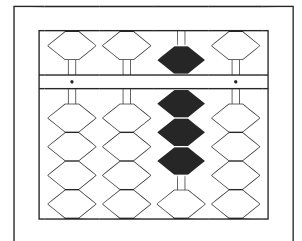
13



14



15



16

【そろばんの珠読み】

2桁から3桁 16問

名前 _____

No.010

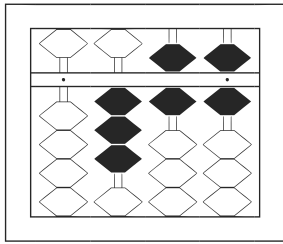
★たま よ すうじ かそろばんの珠を読んで数字で書きましょう。

分 秒

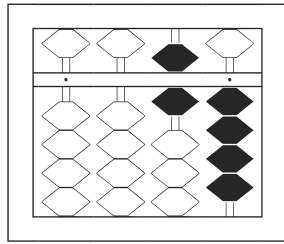
みぎはし けた いち くらい
(※右端の桁を一の位とします)

正解数

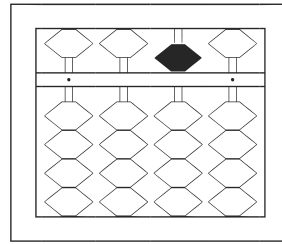
/ 16



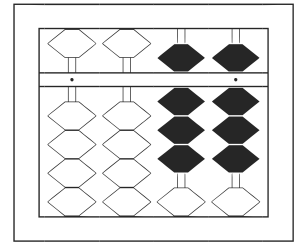
/



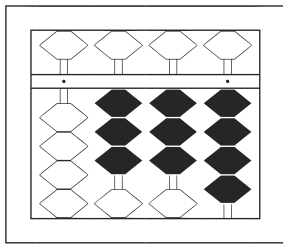
2



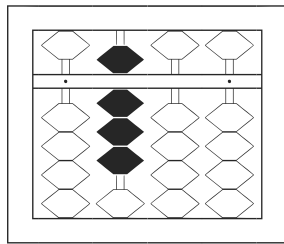
3



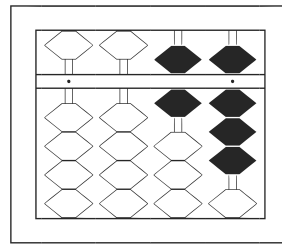
4



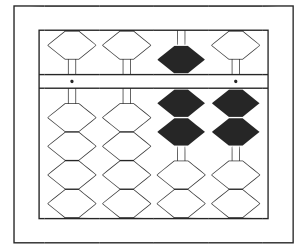
5



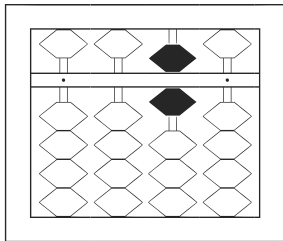
6



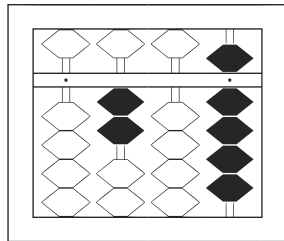
7



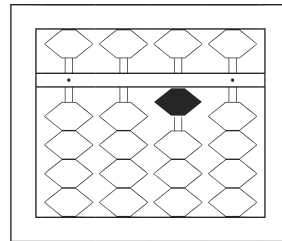
8



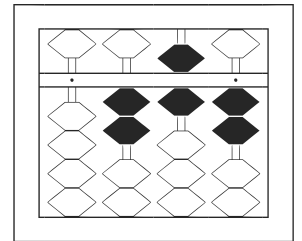
9



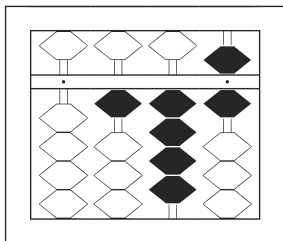
10



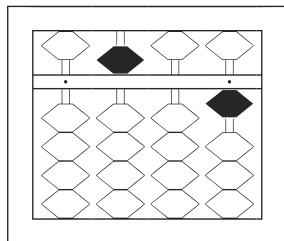
11



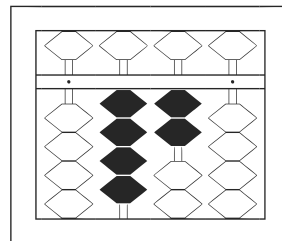
12



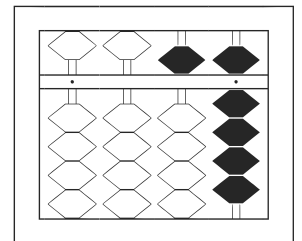
13



14



15



16