

# 【そろばんの珠読み】

10桁から12桁 8問

No.010

名前 \_\_\_\_\_

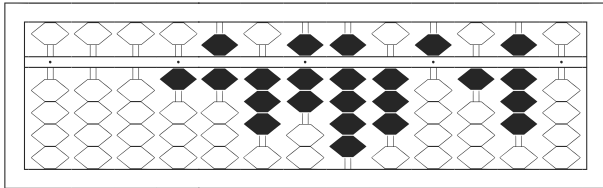
★たま よ すうじ かそろばんの珠を読んで数字で書きましょう。

分 秒

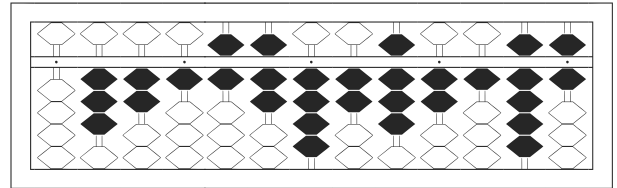
みぎはし けた いち くらい  
(※右端の桁を一の位とします)

正解数

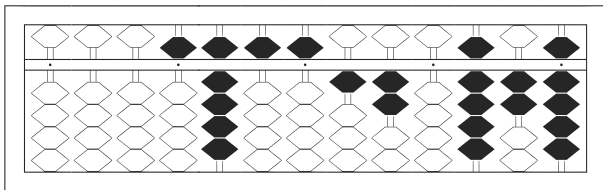
/ 8



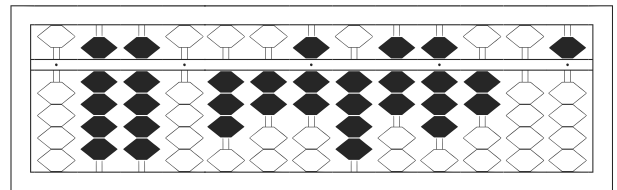
1



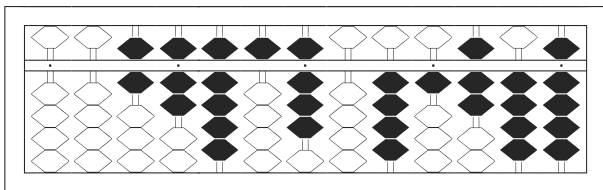
2



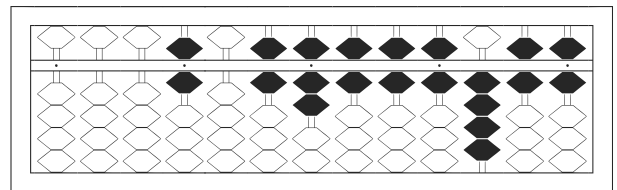
3



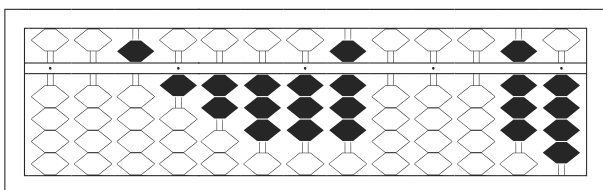
4



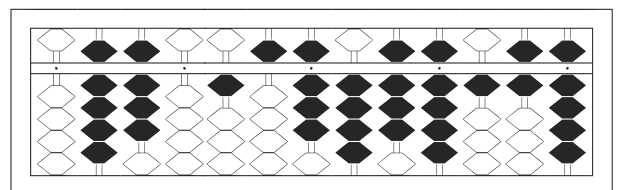
5



6



7



8

# 【そろばんの珠読み】

10桁から12桁 8問

No.010

名前 \_\_\_\_\_

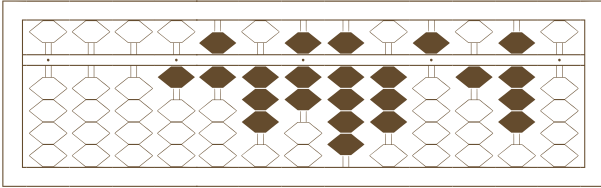
★たま よ すうじ かそろばんの珠を読んで数字で書きましょう。

分 秒

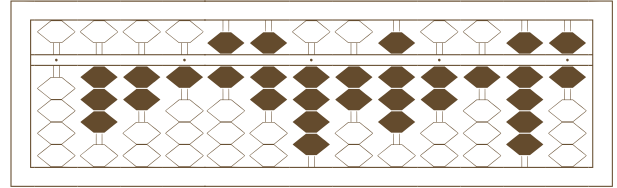
みぎはし けた いち くらい  
(※右端の桁を一の位とします)

正解数

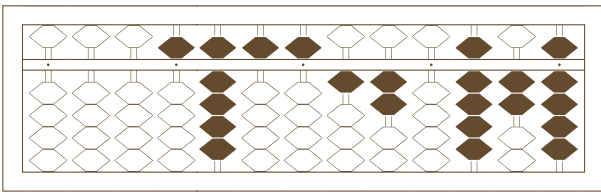
/ 8



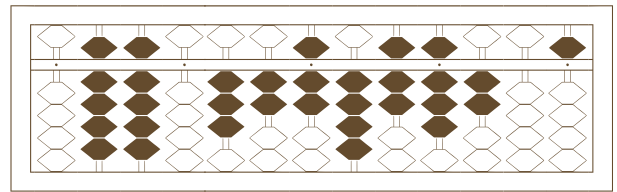
1



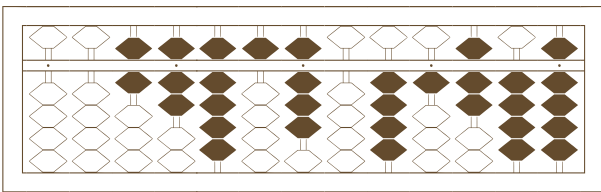
2



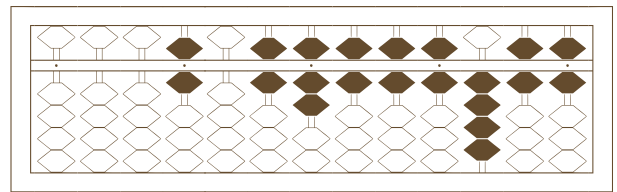
3



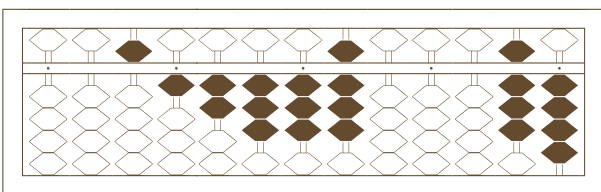
4



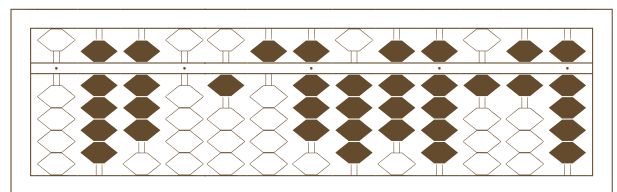
5



6



7



8

# 【そろばんの珠読み】

10桁から12桁 8問

名前 \_\_\_\_\_

No.010

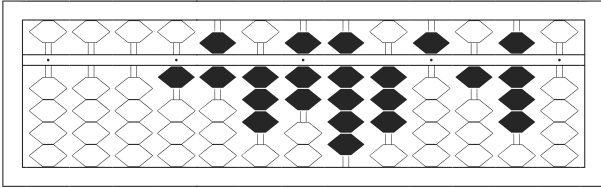
★たま よ すうじ かそろばんの珠を読んで数字で書きましょう。

分 秒

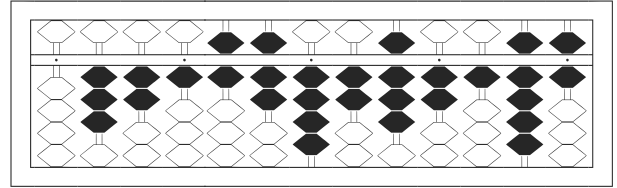
みざはし けた いち くらい  
(※右端の桁を一の位とします)

正解数

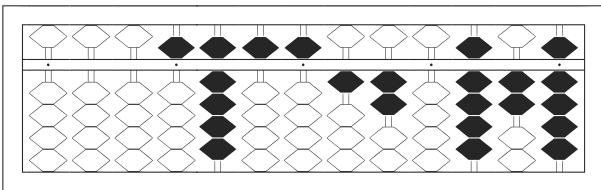
/ 8



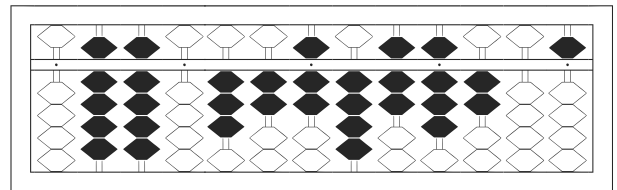
1 / 1,637,935,180



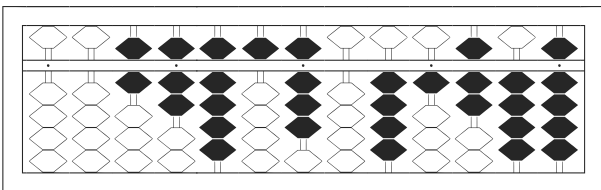
2 / 321,674,282,196



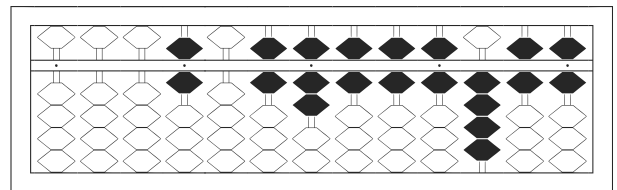
3 / 5,955,120,929



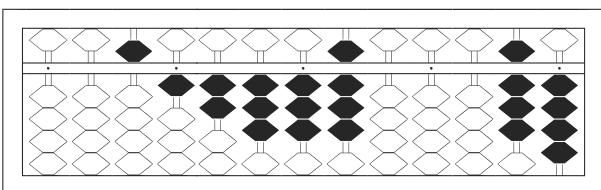
4 / 990,327,478,205



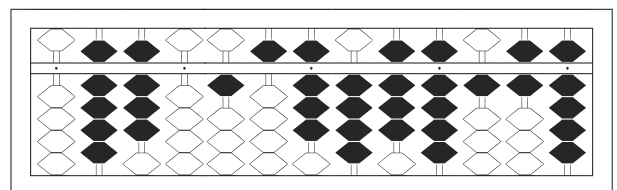
5 / 67,958,041,749



6 / 6,067,666,466



7 / 51,233,800,084



8 / 980,158,489,169