

# 【そろばんの珠読み】

10桁から12桁 8問

No.009

名前 \_\_\_\_\_

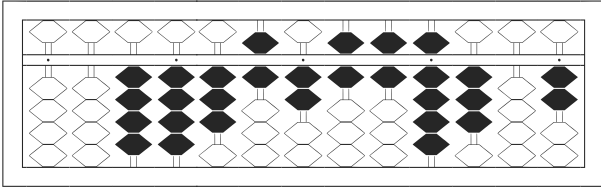
★たま よ すうじ かそろばんの珠を読んで数字で書きましょう。

分 秒

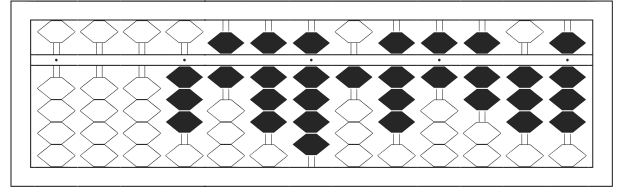
みぎはし けた いち くらい  
(※右端の桁を一の位とします)

正解数

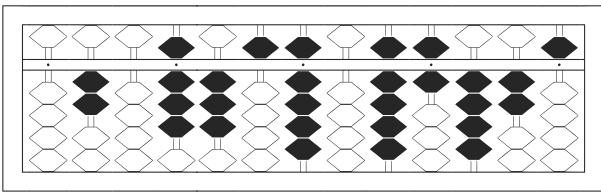
/ 8



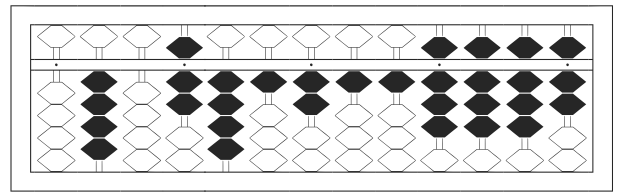
1



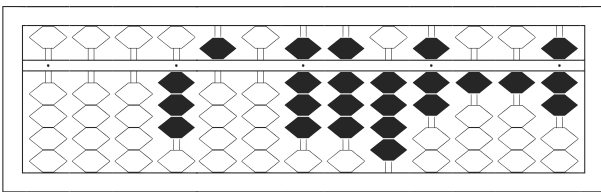
2



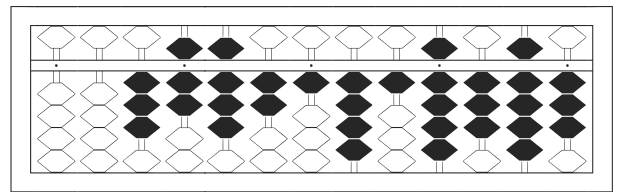
3



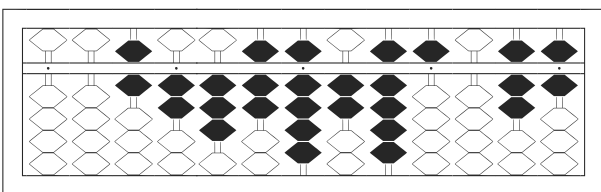
4



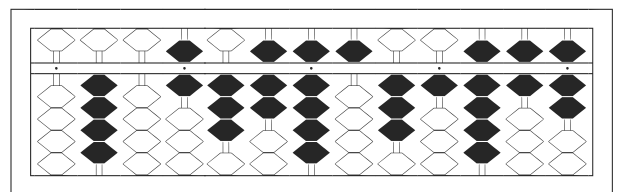
5



6



7



8

# 【そろばんの珠読み】

10桁から12桁 8問

No.009

名前 \_\_\_\_\_

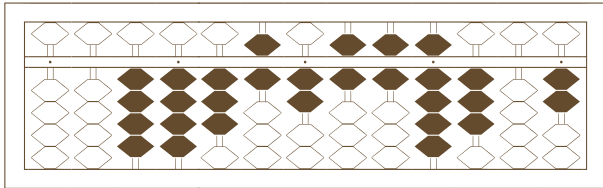
★たま よ すうじ かそろばんの珠を読んで数字で書きましょう。

分 秒

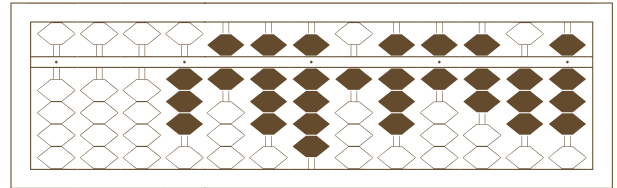
みぎはし けた いち くらい  
(※右端の桁を一の位とします)

正解数

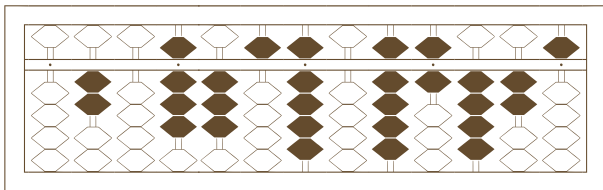
/ 8



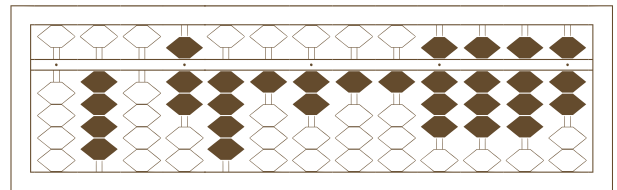
1



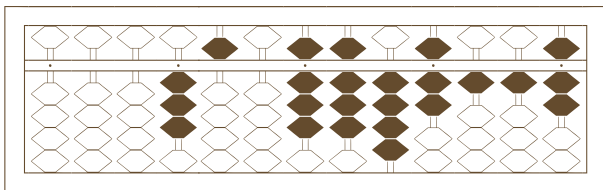
2



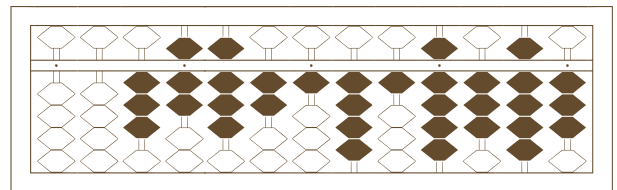
3



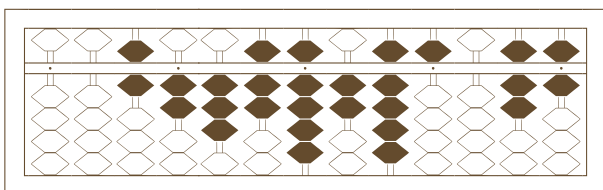
4



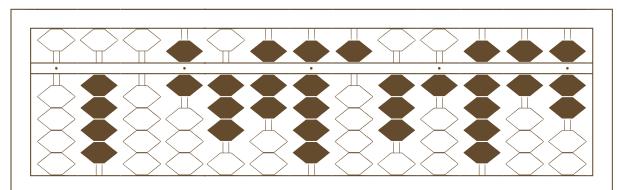
5



6



7



8

# 【そろばんの珠読み】

10桁から12桁 8問

No.009

名前 \_\_\_\_\_

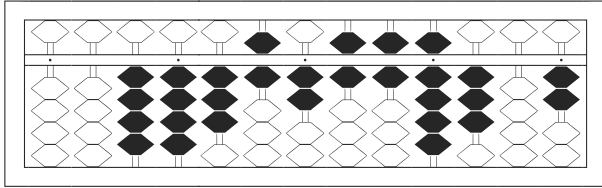
★たま よ すうじ かそろばんの珠を読んで数字で書きましょう。

分 秒

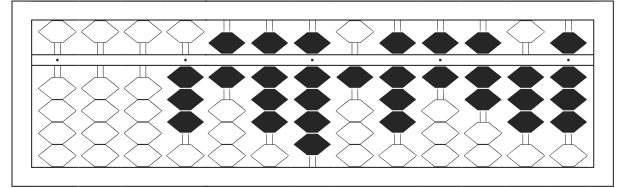
みざはし けた いち くらい  
(※右端の桁を一の位とします)

正解数

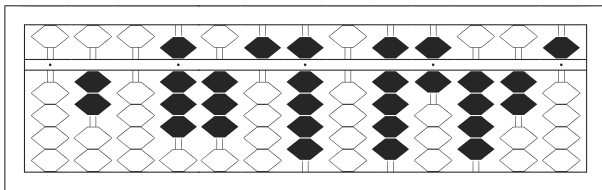
/ 8



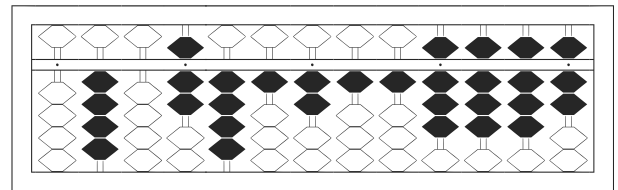
1 / 44,362,669,302



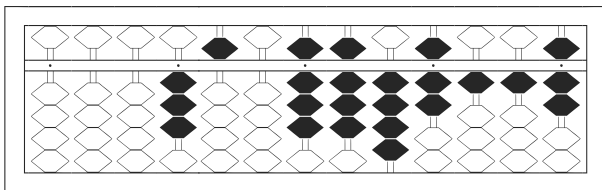
2 / 3,689,186,738



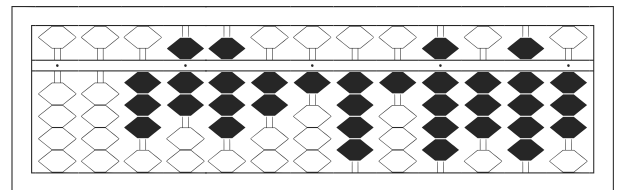
3 / 208,359,096,425



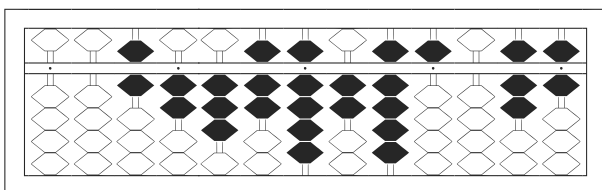
4 / 407,412,118,887



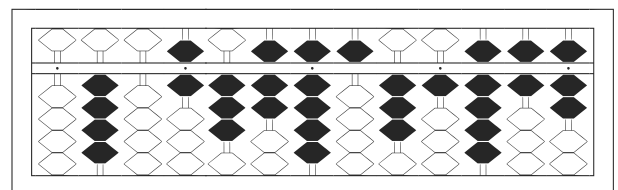
5 / 3,508,847,117



6 / 37,821,419,393



7 / 62,379,295,076



8 / 406,379,531,967