

【そろばんの珠読み】

10桁から12桁 8問

No.007

名前 _____

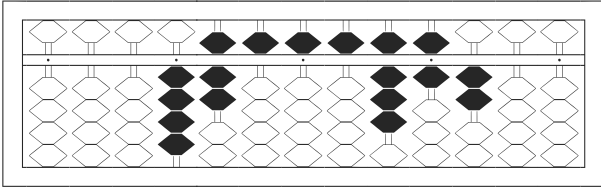
★たま よ すうじ かそろばんの珠を読んで数字で書きましょう。

分 秒

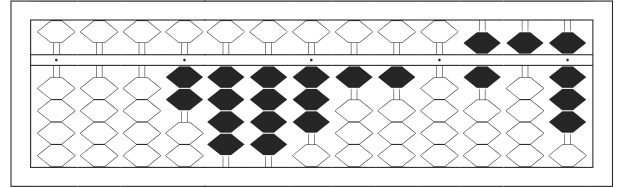
みぎはし けた いち くらい
(※右端の桁を一の位とします)

正解数

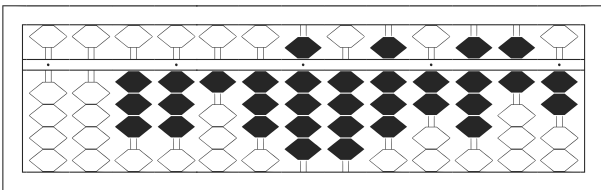
/ 8



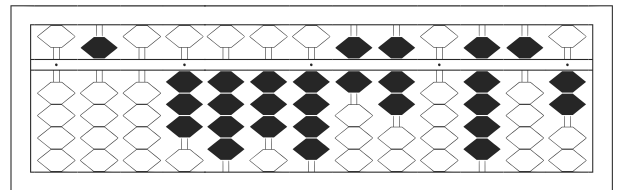
1



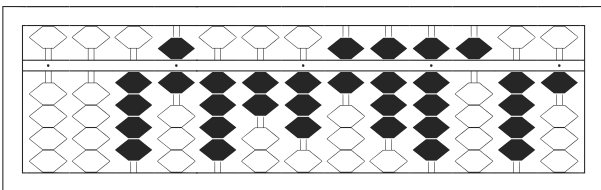
2



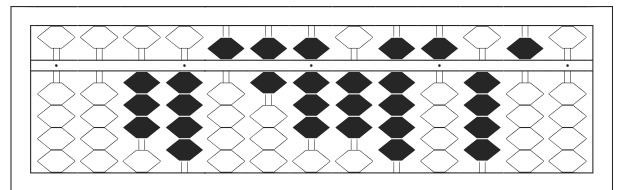
3



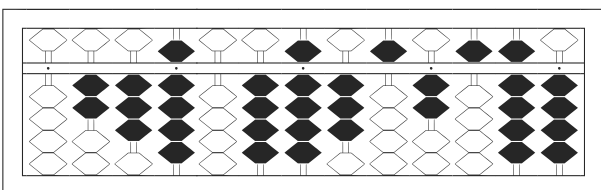
4



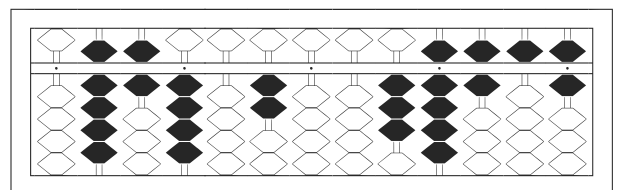
5



6



7



8

【そろばんの珠読み】

10桁から12桁 8問

No.007

名前 _____

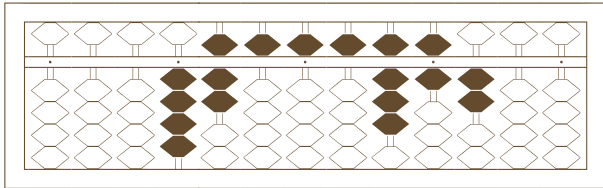
★たま よ すうじ かそろばんの珠を読んで数字で書きましょう。

分 秒

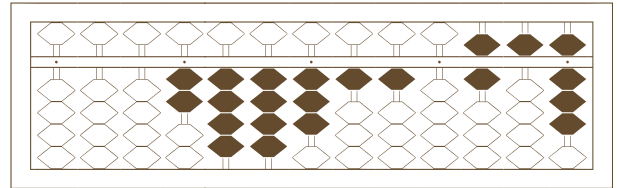
みぎはし けた いち くらい
(※右端の桁を一の位とします)

正解数

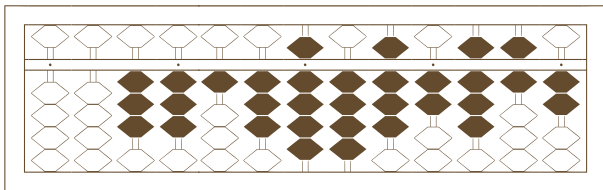
/ 8



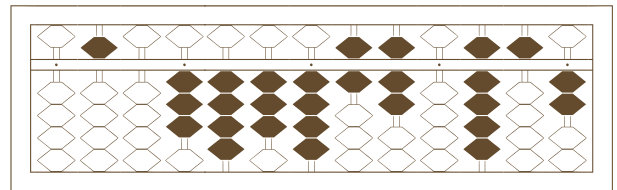
/



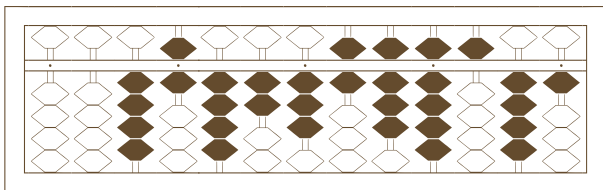
2



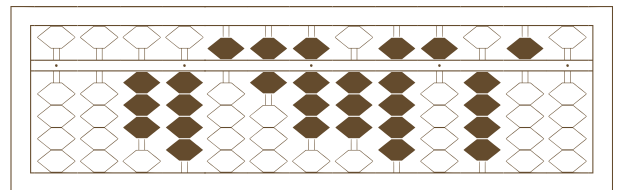
3



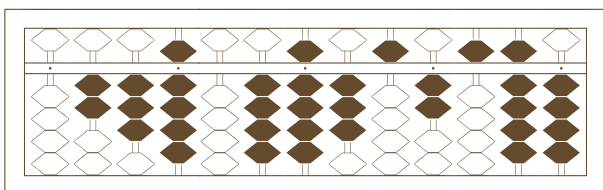
4



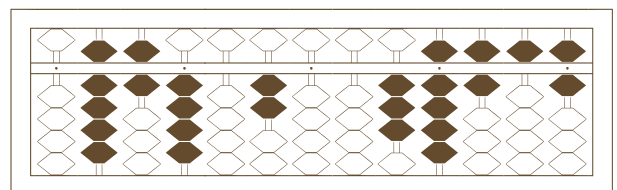
5



6



7



8

【そろばんの珠読み】

10桁から12桁 8問

No.007

名前 _____

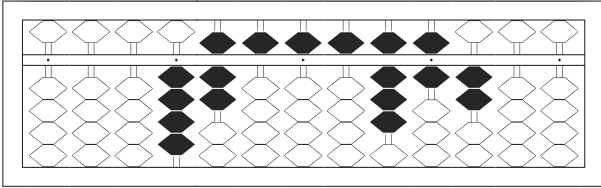
★たま よ すうじ かそろばんの珠を読んで数字で書きましょう。

分 秒

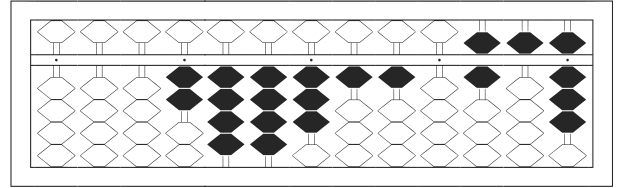
みざはし けた いち くらい
(※右端の桁を一の位とします)

正解数

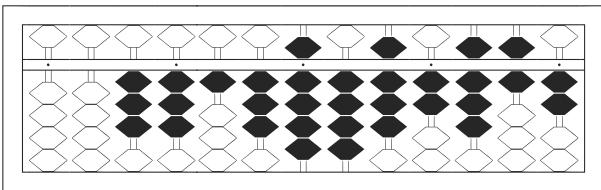
/ 8



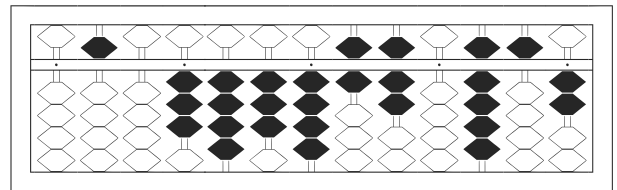
1 / 4,755,586,200



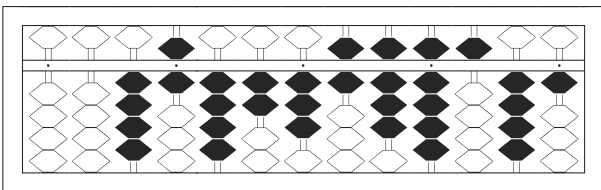
2 / 2,443,110,658



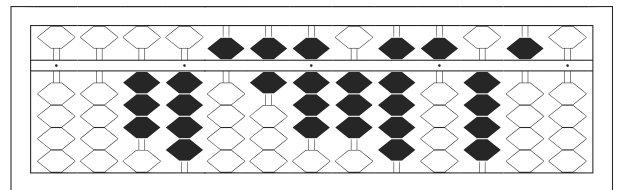
3 / 33,139,482,862



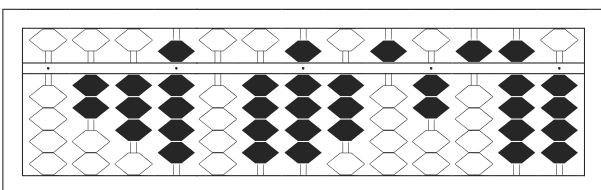
4 / 503,434,670,952



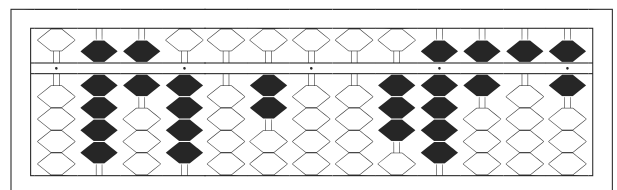
5 / 46,423,689,541



6 / 34,568,395,450



7 / 239,049,352,594



8 / 964,020,039,656