

【そろばんの珠読み】

10桁から12桁 8問

No.003

名前 _____

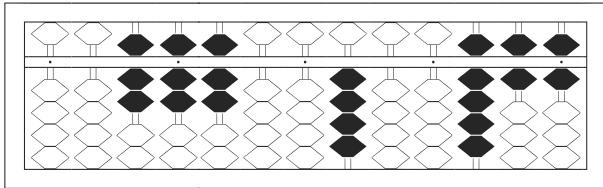
★たま よ すうじ かそろばんの珠を読んで数字で書きましょう。

分 秒

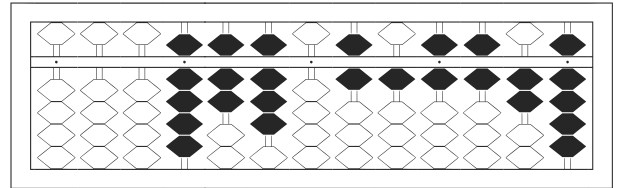
みぎはし けた いち くらい
(※右端の桁を一の位とします)

正解数

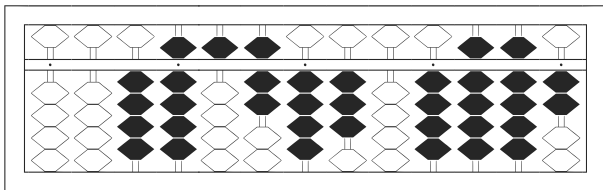
/ 8



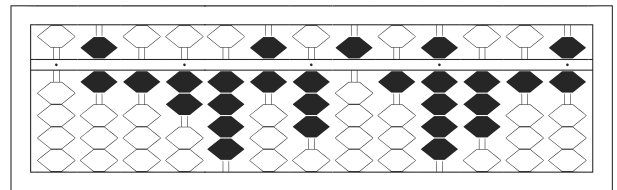
/



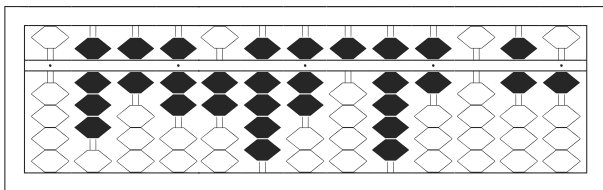
2



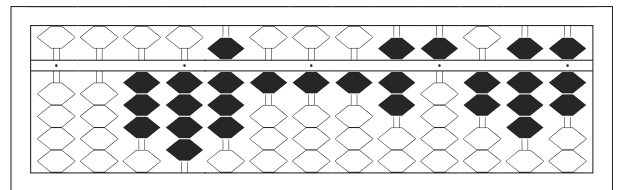
3



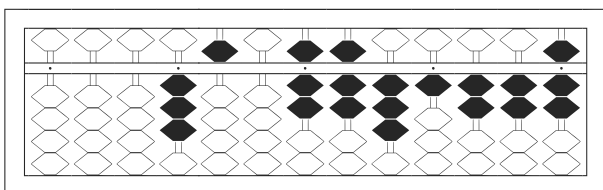
4



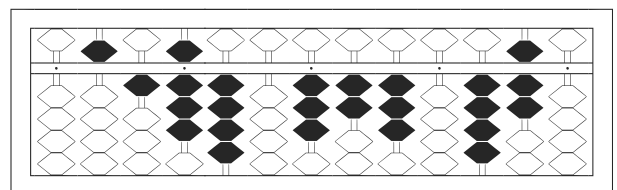
5



6



7



8

【そろばんの珠読み】

10桁から12桁 8問

No.003

名前 _____

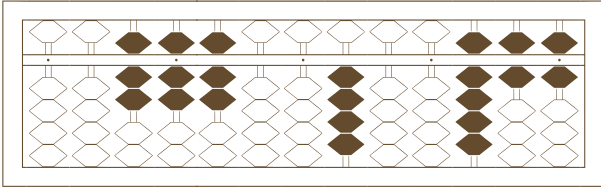
★たま よ すうじ かそろばんの珠を読んで数字で書きましょう。

分 秒

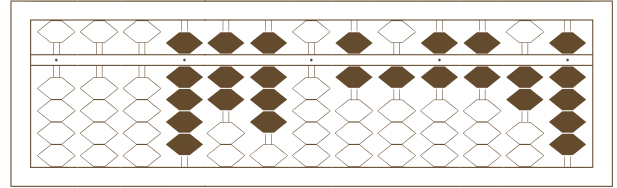
みぎはし けた いち くらい
(※右端の桁を一の位とします)

正解数

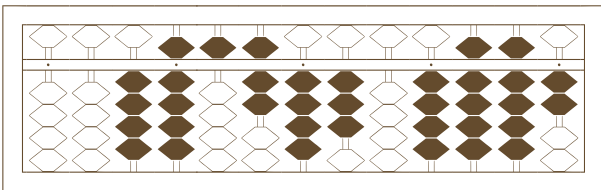
/ 8



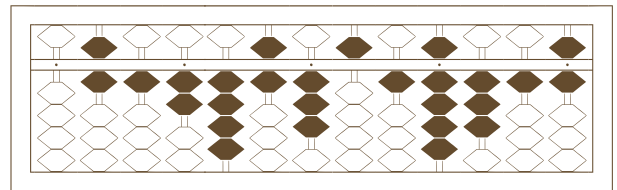
1



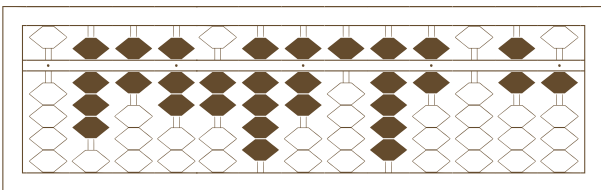
2



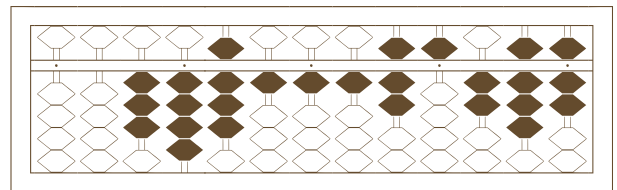
3



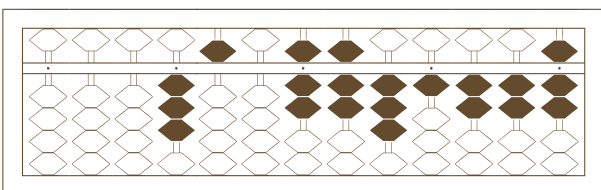
4



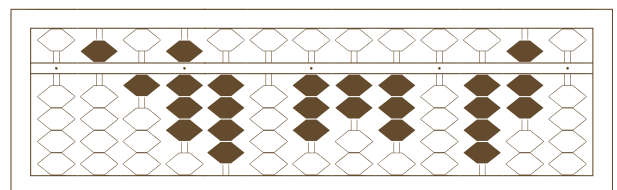
5



6



7



8

【そろばんの珠読み】

10桁から12桁 8問

No.003

名前 _____

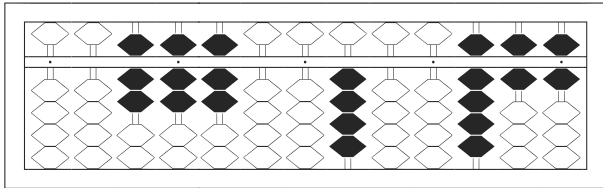
★たま よ すうじ かそろばんの珠を読んで数字で書きましょう。

分 秒

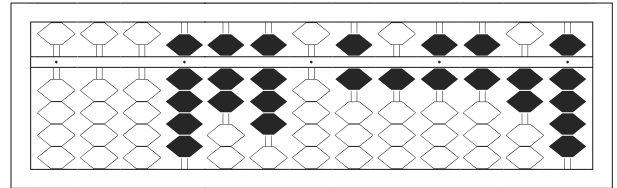
みざはし けた いち くらい
(※右端の桁を一の位とします)

正解数

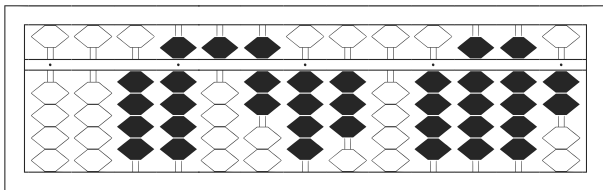
/ 8



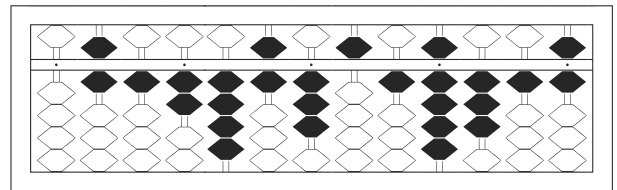
1 / 77,700,400,966



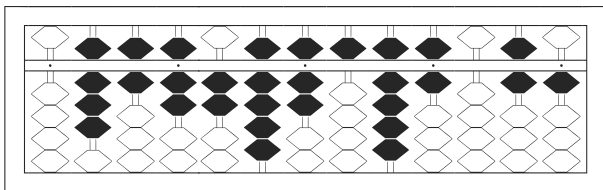
2 / 9,780,616,629



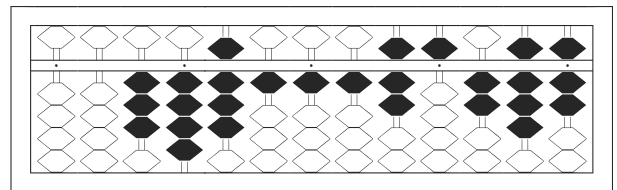
3 / 49,574,304,992



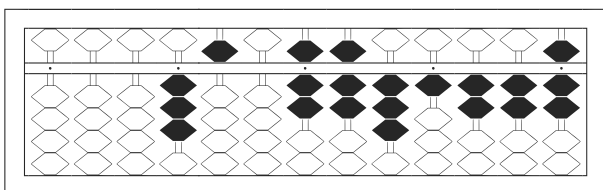
4 / 612,463,519,316



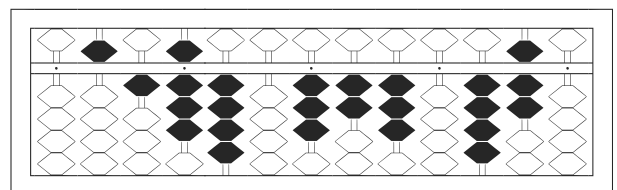
5 / 867,297,596,061



6 / 34,811,175,287



7 / 3,507,731,227



8 / 518,403,230,470