

【そろばんの珠読み】

10桁から12桁 8問

No.002

名前 _____

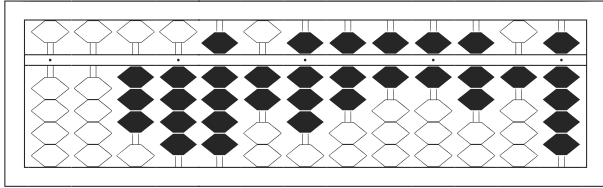
★たま よ すうじ かそろばんの珠を読んで数字で書きましょう。

分 秒

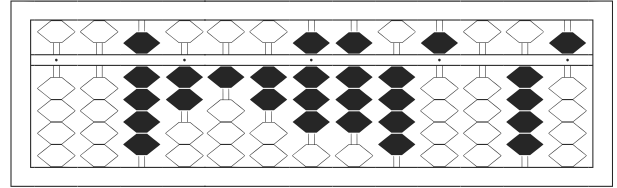
みざはし けた いち くらい
(※右端の桁を一の位とします)

正解数

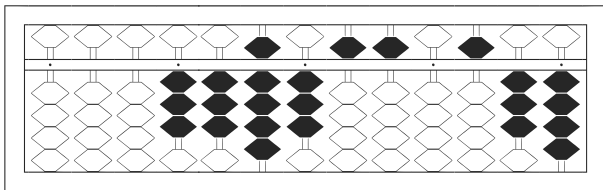
/ 8



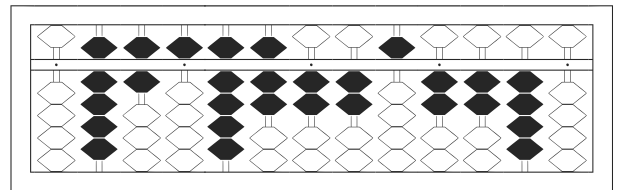
1



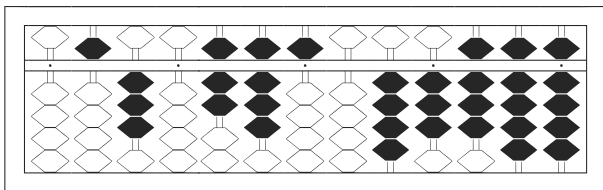
2



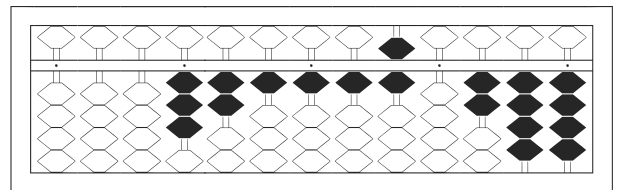
3



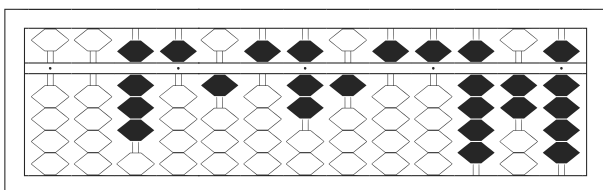
4



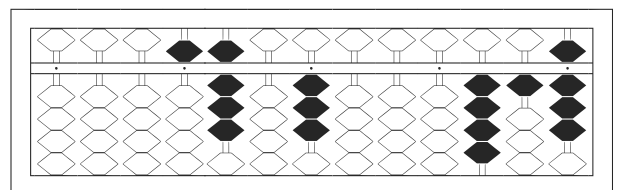
5



6



7



8

【そろばんの珠読み】

10桁から12桁 8問

No.002

名前 _____

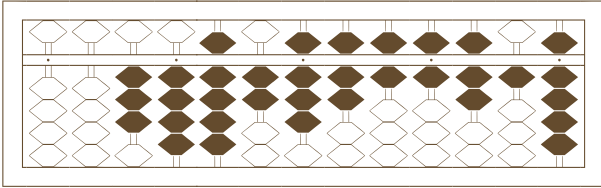
★たま よ すうじ かそろばんの珠を読んで数字で書きましょう。

分 秒

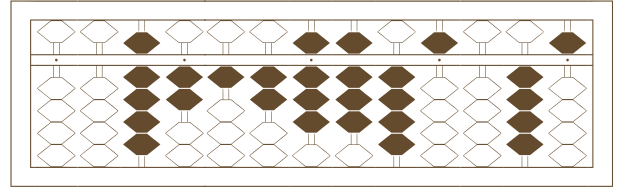
みぎはし けた いち くらい
(※右端の桁を一の位とします)

正解数

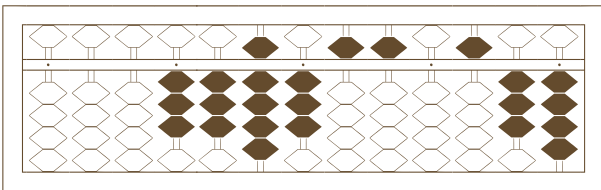
/ 8



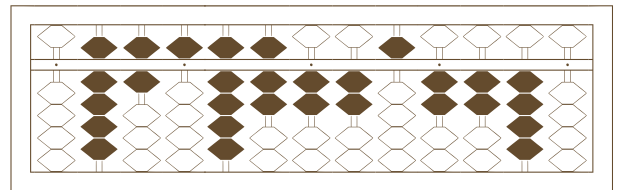
1



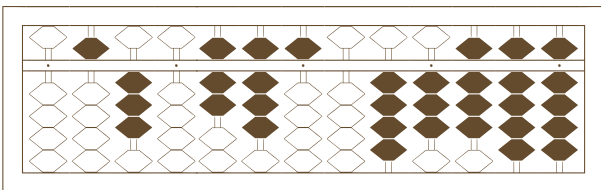
2



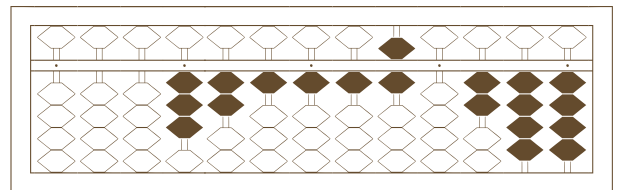
3



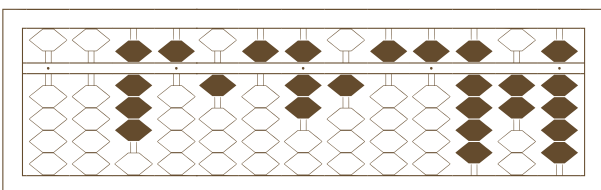
4



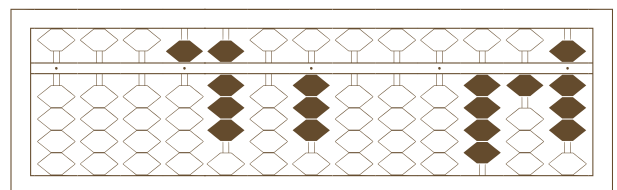
5



6



7



8

【そろばんの珠読み】

10桁から12桁 8問

名前 _____

No.002

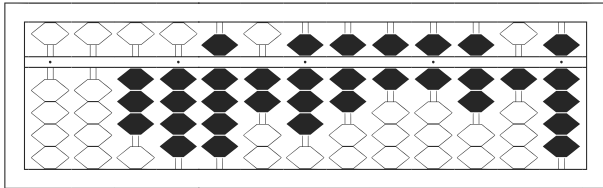
★たま よ すうじ かそろばんの珠を読んで数字で書きましょう。

分 秒

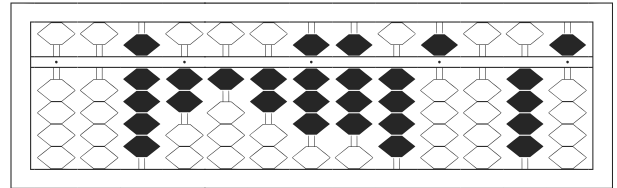
みぎはし けた いち くらい
(※右端の桁を一の位とします)

正解数

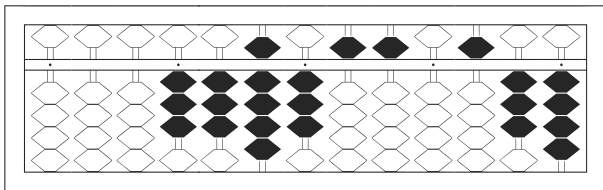
/ 8



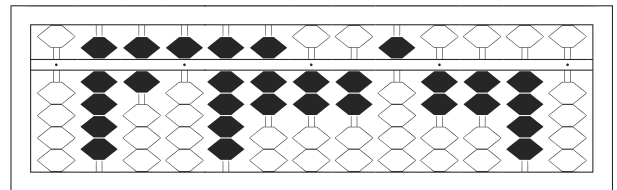
1 / 34,928,766,719



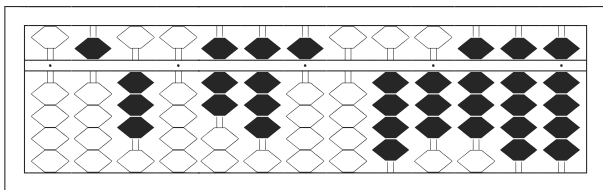
2 / 92,128,845,045



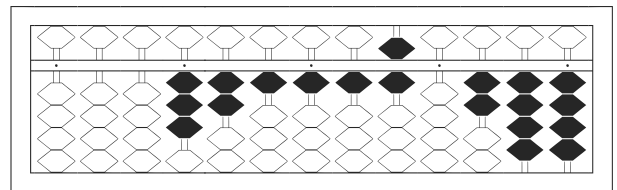
3 / 3,393,550,534



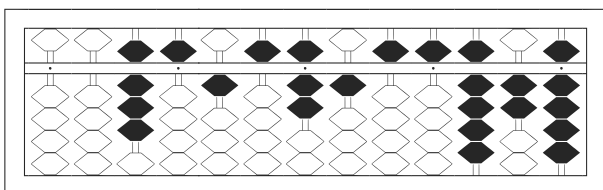
4 / 965,972,252,240



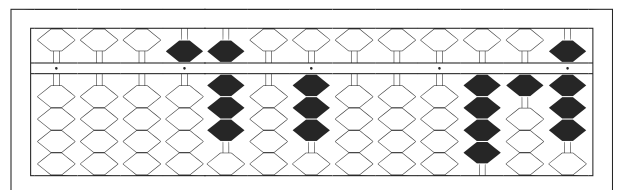
5 / 530,785,043,899



6 / 3,211,160,244



7 / 85,157,155,929



8 / 5,803,000,418