

【そろばんの珠読み】

10桁から12桁 8問

No.001

名前 _____

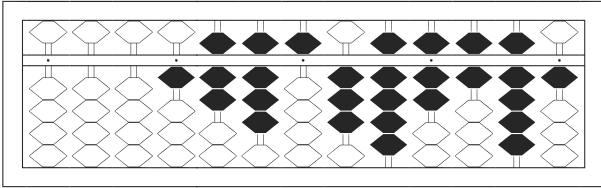
★たま よ すうじ かそろばんの珠を読んで数字で書きましょう。

分 秒

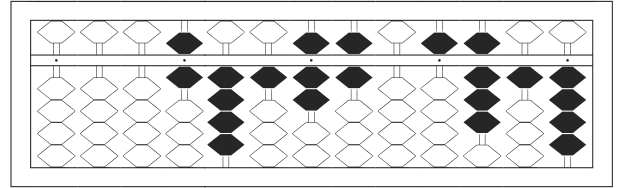
みぎはし けた いち くらい
(※右端の桁を一の位とします)

正解数

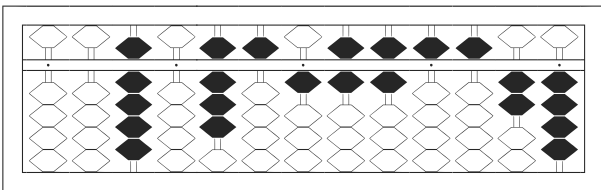
/ 8



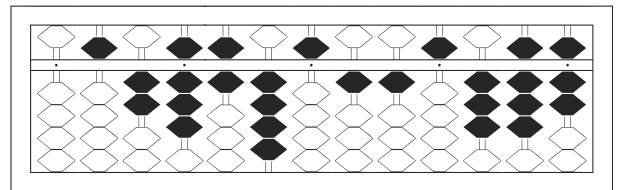
1



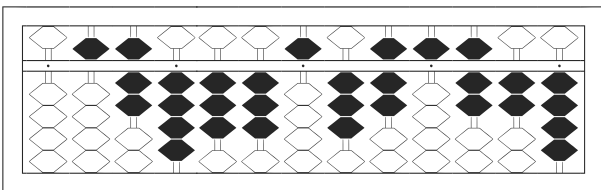
2



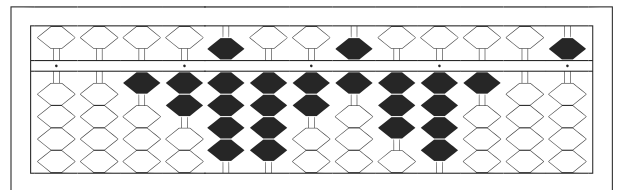
3



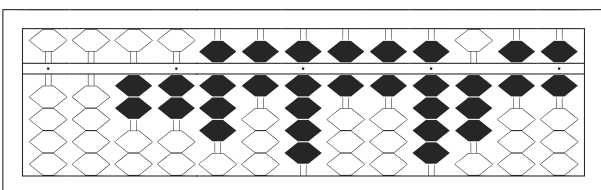
4



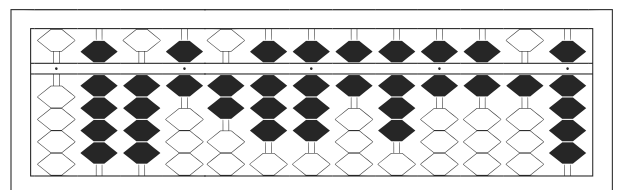
5



6



7



8

【そろばんの珠読み】

10桁から12桁 8問

No.001

名前 _____

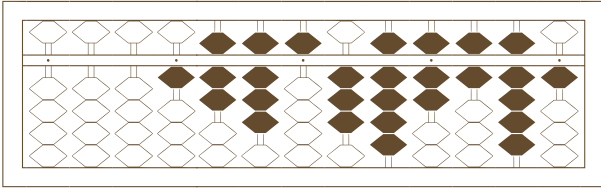
★たま よ すうじ かそろばんの珠を読んで数字で書きましょう。

分 秒

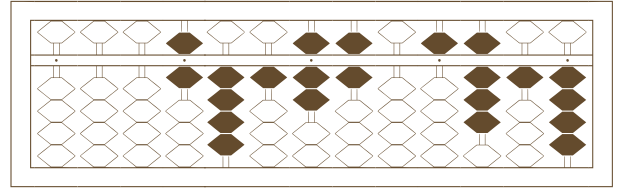
みぎはし けた いち くらい
(※右端の桁を一の位とします)

正解数

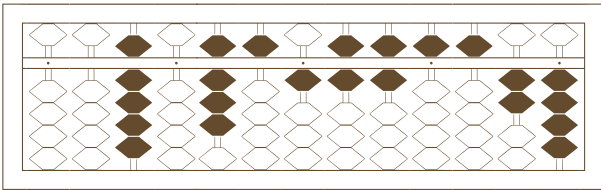
/ 8



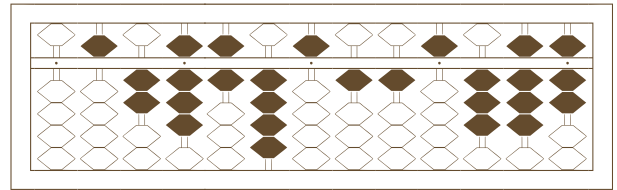
/



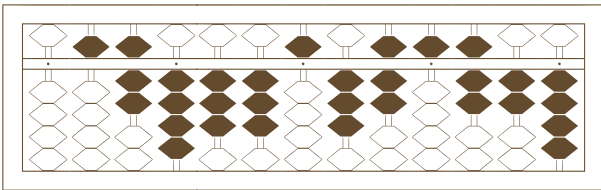
2



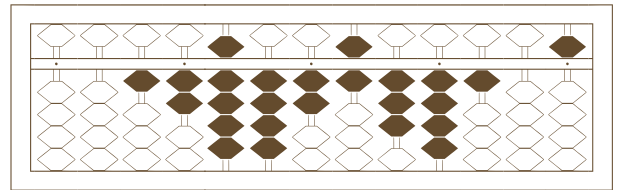
3



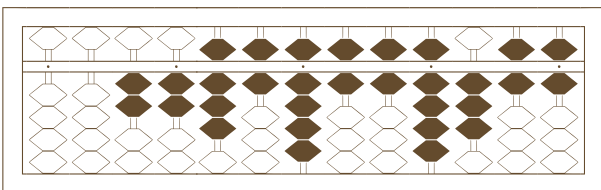
4



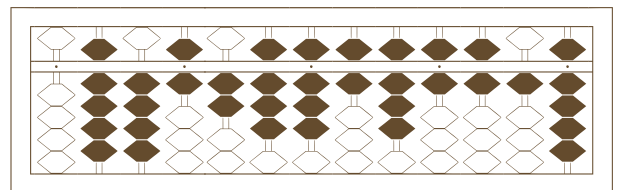
5



6



7



8

【そろばんの珠読み】

10桁から12桁 8問

名前 _____

No.001

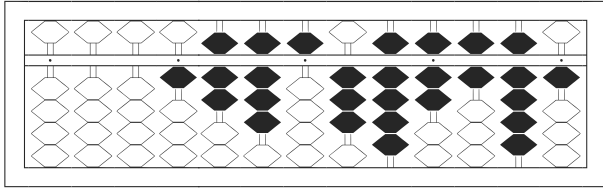
★たま よ すうじ かそろばんの珠を読んで数字で書きましょう。

分 秒

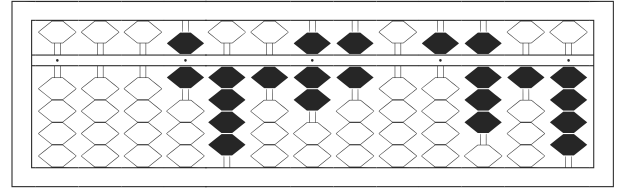
みぎはし けた いち くらい
(※右端の桁を一の位とします)

正解数

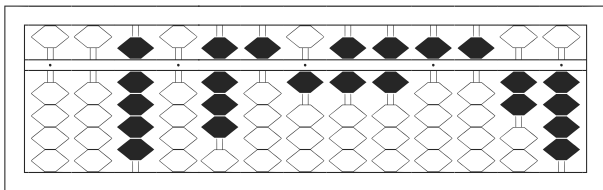
/ 8



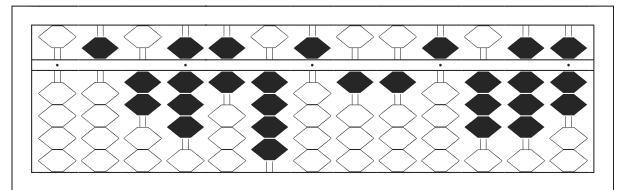
1 / 1,785,397,691



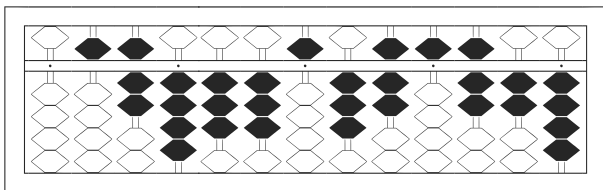
2 / 6,417,605,814



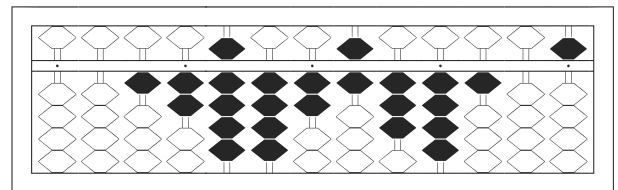
3 / 90,851,665,524



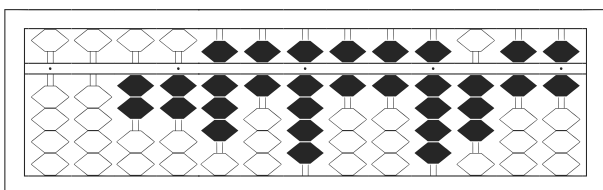
4 / 528,645,115,387



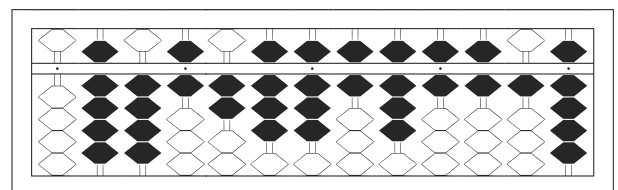
5 / 574,335,375,724



6 / 12,942,634,105



7 / 22,869,669,366



8 / 946,288,686,619