

【そろばんの珠読み】

10桁から12桁 8問

名前 _____

No.001

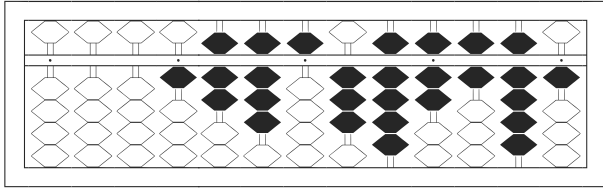
★そろばんの珠を読んで数字で書きましょう。

分 秒

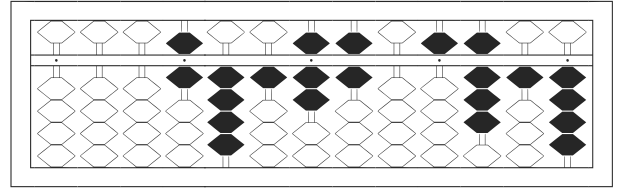
みぎはし けた いち くらい
(※右端の桁を一の位とします)

正解数

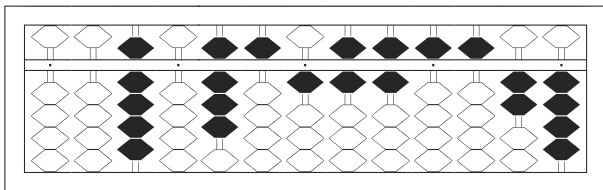
/ 8



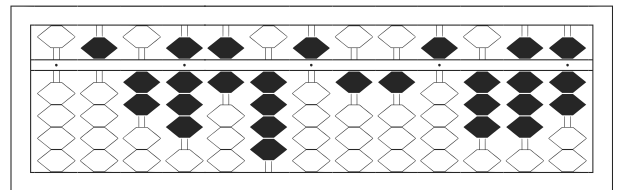
1 / 1,785,397,691



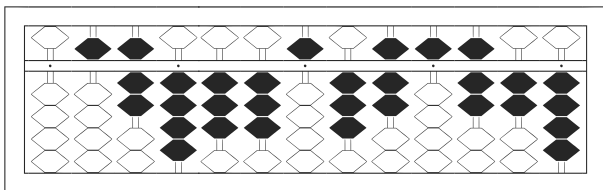
2 / 6,417,605,814



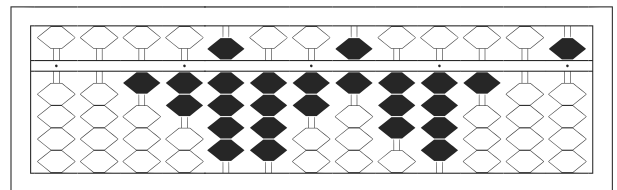
3 / 90,851,665,524



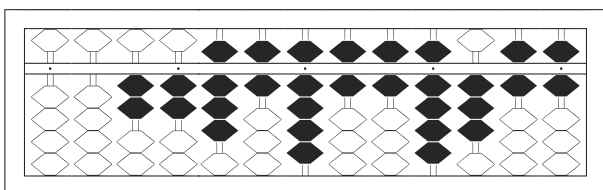
4 / 528,645,115,387



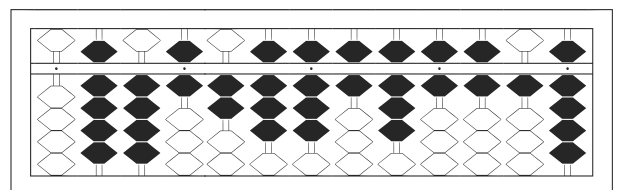
5 / 574,335,375,724



6 / 12,942,634,105



7 / 22,869,669,366



8 / 946,288,686,619

【そろばんの珠読み】

10桁から12桁 8問

名前 _____

No.002

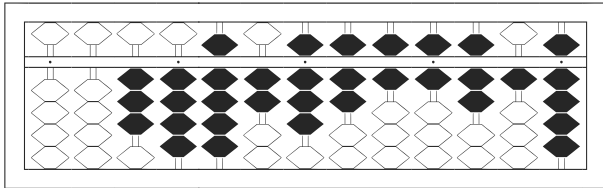
★たま よ すうじ かそろばんの珠を読んで数字で書きましょう。

分 秒

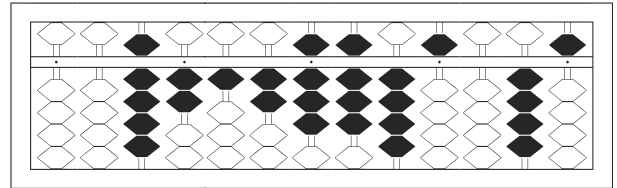
みざはし けた いち くらい
(※右端の桁を一の位とします)

正解数

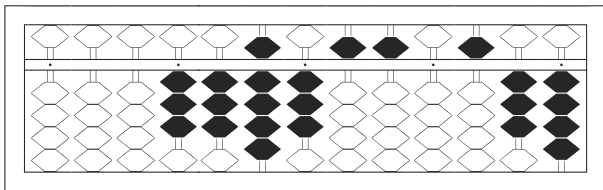
/ 8



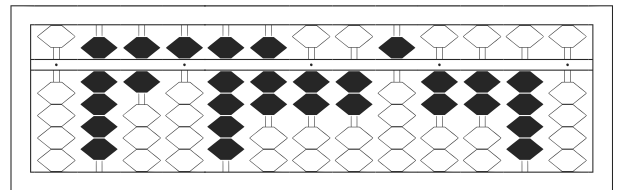
1 / 34,928,766,719



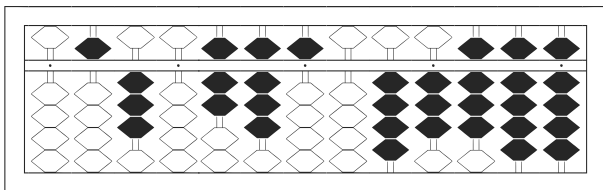
2 / 92,128,845,045



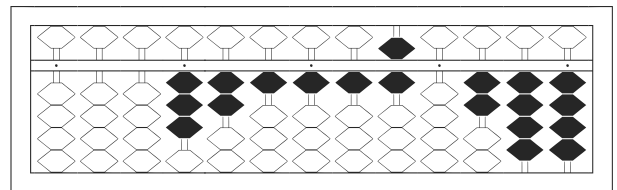
3 / 3,393,550,534



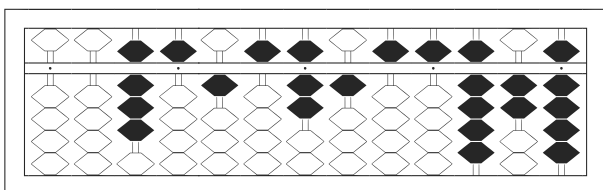
4 / 965,972,252,240



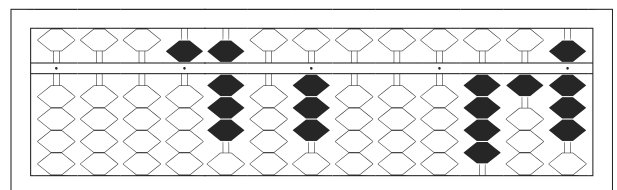
5 / 530,785,043,899



6 / 3,211,160,244



7 / 85,157,155,929



8 / 5,803,000,418

【そろばんの珠読み】

10桁から12桁 8問

名前 _____

No.003

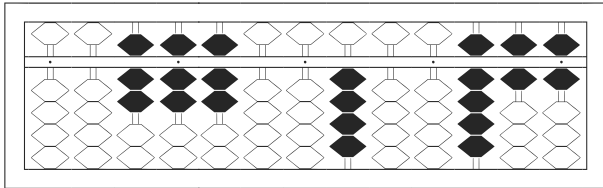
★たま よ すうじ かそろばんの珠を読んで数字で書きましょう。

分 秒

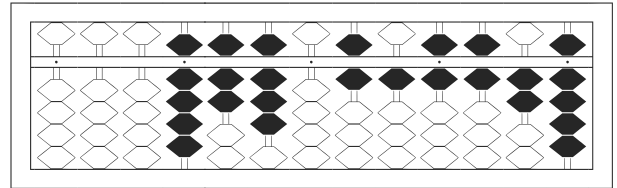
みざはし けた いち くらい
(※右端の桁を一の位とします)

正解数

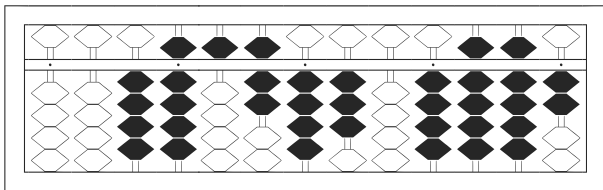
/ 8



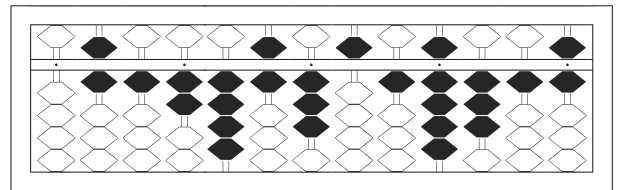
1 / 77,700,400,966



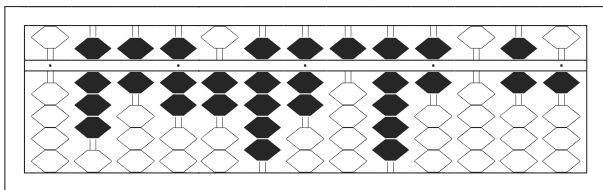
2 / 9,780,616,629



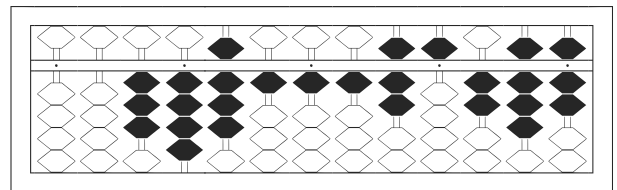
3 / 49,574,304,992



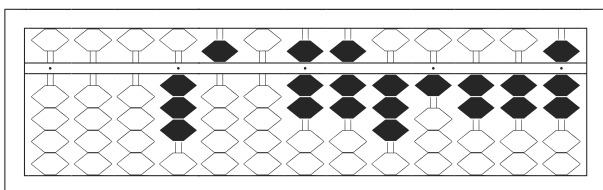
4 / 612,463,519,316



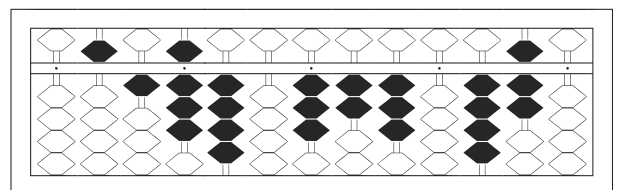
5 / 867,297,596,061



6 / 34,811,175,287



7 / 3,507,731,227



8 / 518,403,230,470

【そろばんの珠読み】

10桁から12桁 8問

No.004

名前 _____

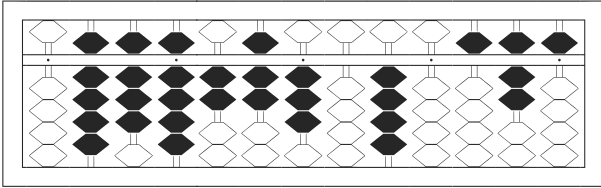
★たま よ すうじ かそろばんの珠をみざはし けた いち くらい読んで数字で書きましょう。

分 秒

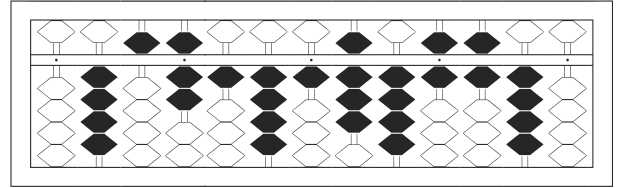
(※右端の桁を一の位とします)

正解数

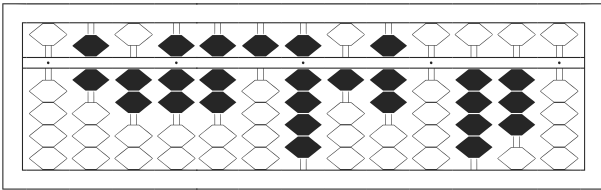
/ 8



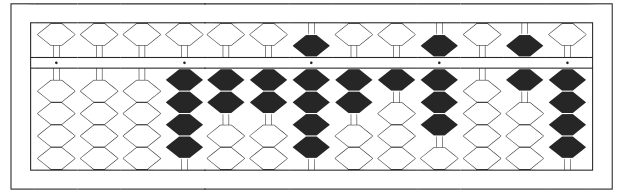
1 989,273,040,575



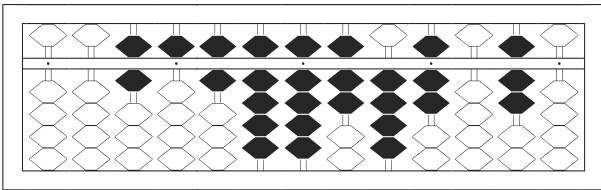
2 457,141,846,640



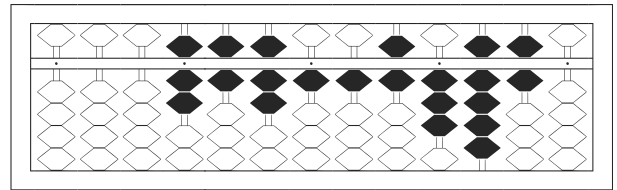
3 627,759,170,430



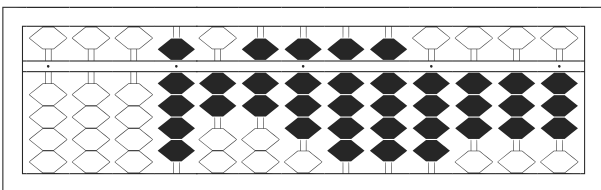
4 4,229,218,064



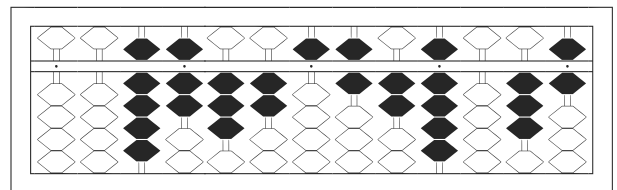
5 65,699,747,070



6 7,671,163,960



7 9,278,994,333



8 97,325,629,036

【そろばんの珠読み】

10桁から12桁 8問

名前 _____

No.005

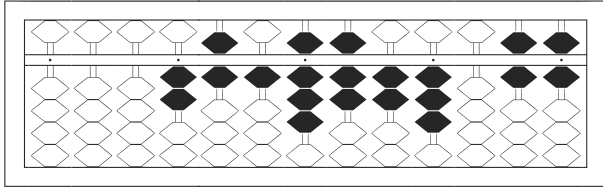
★たま よ すうじ かそろばんの珠を読んで数字で書きましょう。

分 秒

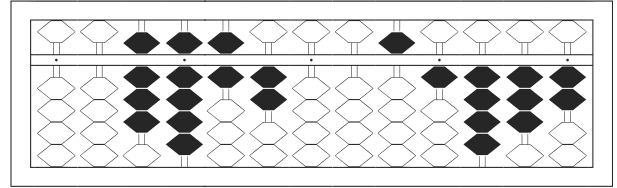
みざはし けた いち くらい
(※右端の桁を一の位とします)

正解数

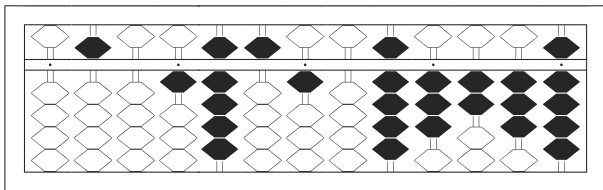
/ 8



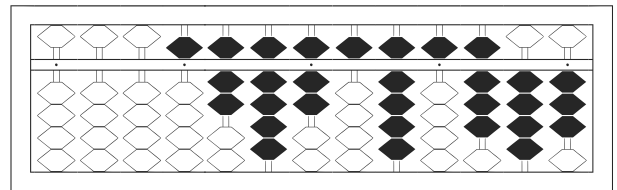
1 / 2,618,723,066



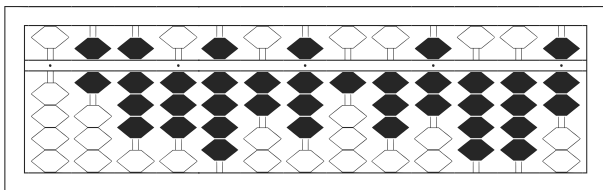
2 / 89,620,051,432



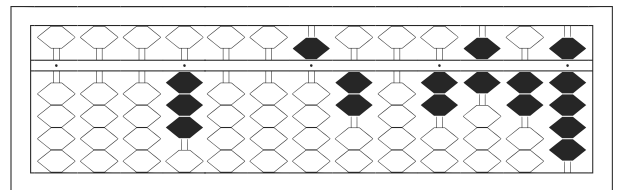
3 / 501,951,093,239



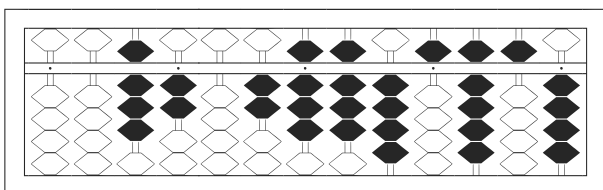
4 / 5,797,595,843



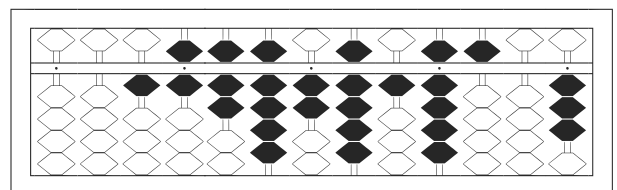
5 / 683,928,137,447



6 / 3,005,202,629



7 / 82,028,845,954



8 / 16,792,919,503

【そろばんの珠読み】

10桁から12桁 8問

No.006

名前 _____

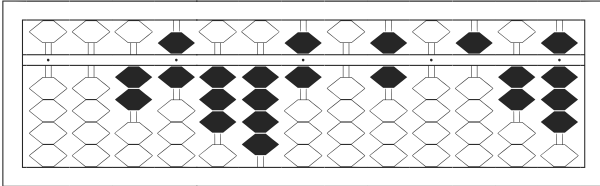
★たま よ すうじ かそろばんの珠を読んで数字で書きましょう。

分 秒

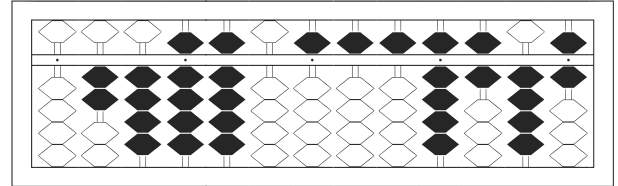
みぎはし けた いち くらい
(※右端の桁を一の位とします)

正解数

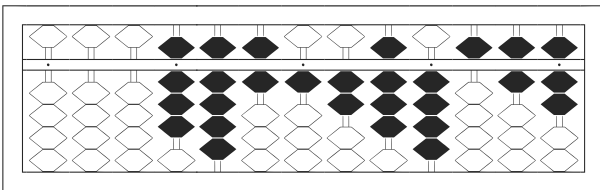
/ 8



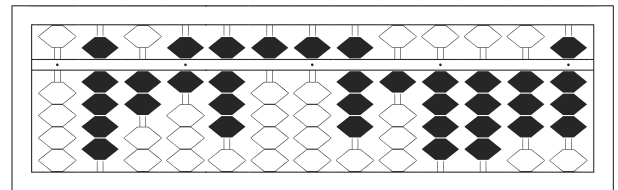
1 / 26,346,060,528



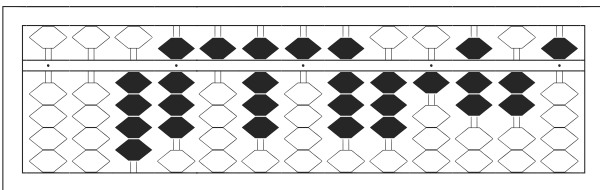
2 / 249,905,559,646



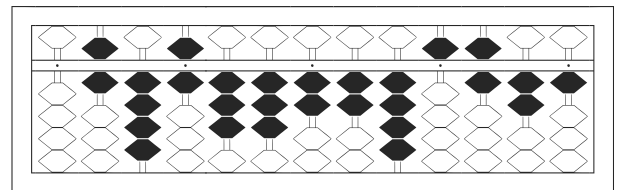
3 / 8,961,284,567



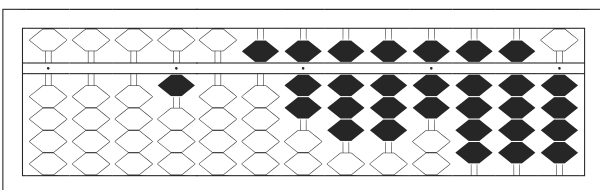
4 / 926,855,814,438



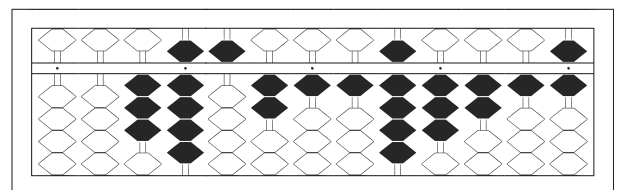
5 / 48,585,831,725



6 / 646,332,245,621



7 / 1,057,887,994



8 / 39,521,193,216

【そろばんの珠読み】

10桁から12桁 8問

No.007

名前 _____

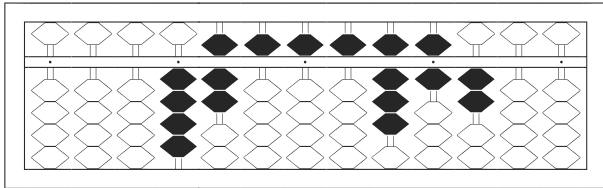
★たま よ すうじ かそろばんの珠を読んで数字で書きましょう。

分 秒

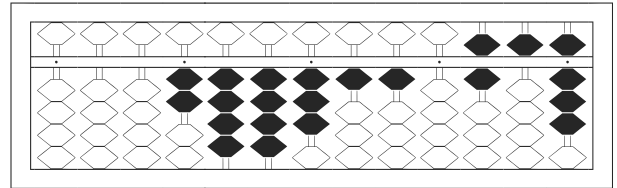
みざはし けた いち くらい
(※右端の桁を一の位とします)

正解数

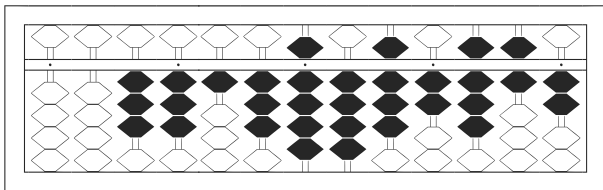
/ 8



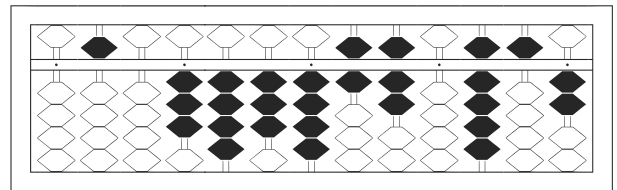
1 / 4,755,586,200



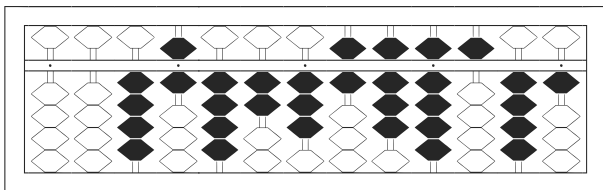
2 / 2,443,110,658



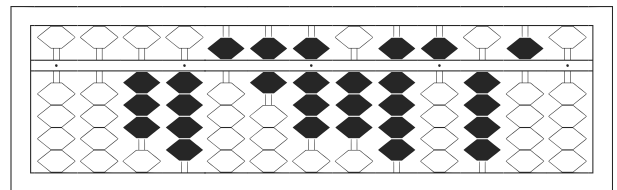
3 / 33,139,482,862



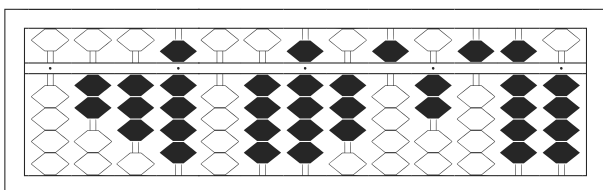
4 / 503,434,670,952



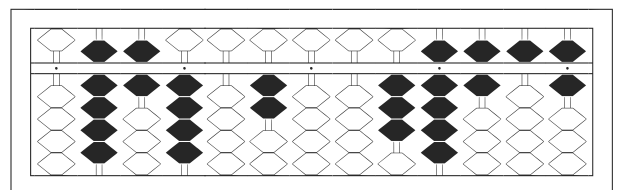
5 / 46,423,689,541



6 / 34,568,395,450



7 / 239,049,352,594



8 / 964,020,039,656

【そろばんの珠読み】

10桁から12桁 8問

No.008

名前 _____

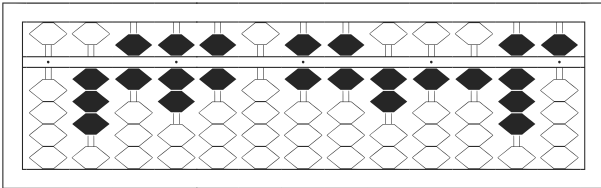
★たま よ すうじ かそろばんの珠を読んで数字で書きましょう。

分 秒

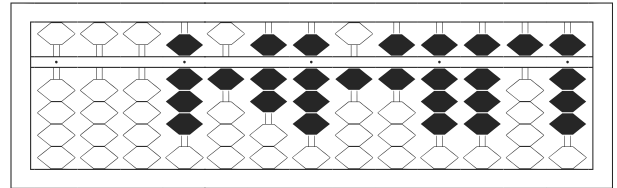
みざはし けた いち くらい
(※右端の桁を一の位とします)

正解数

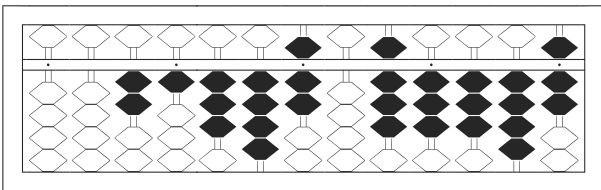
/ 8



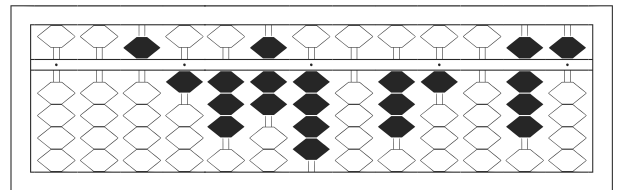
1 / 367,606,621,185



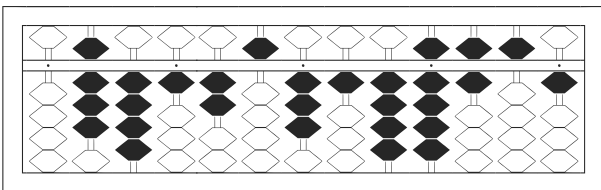
2 / 8,178,168,858



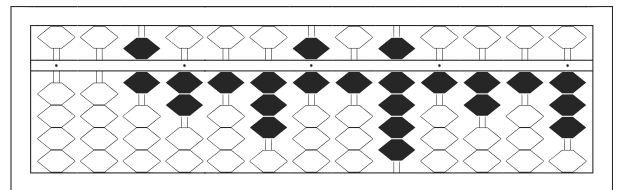
3 / 21,347,083,347



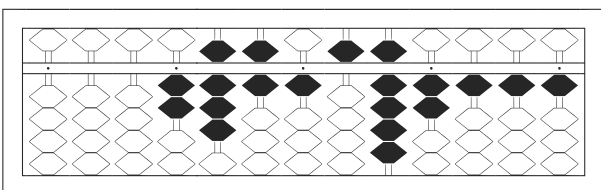
4 / 51,374,031,085



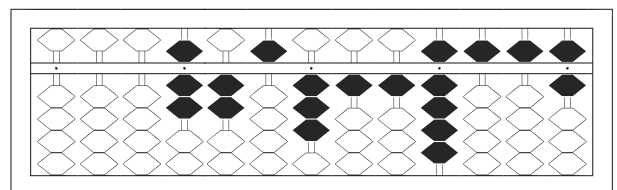
5 / 841,253,149,651



6 / 62,136,191,213



7 / 2,861,592,111



8 / 7,253,119,556

【そろばんの珠読み】

10桁から12桁 8問

No.009

名前 _____

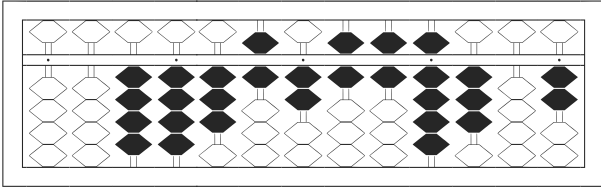
★たま よ すうじ かそろばんの珠を読んで数字で書きましょう。

分 秒

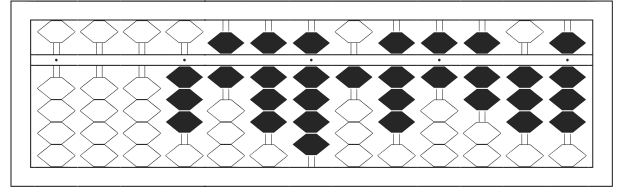
みざはし けた いち くらい
(※右端の桁を一の位とします)

正解数

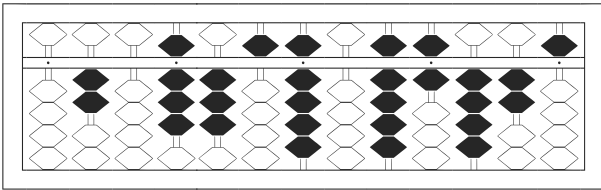
/ 8



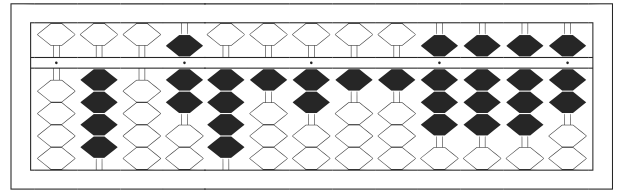
1 / 44,362,669,302



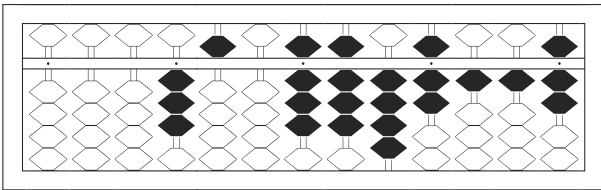
2 / 3,689,186,738



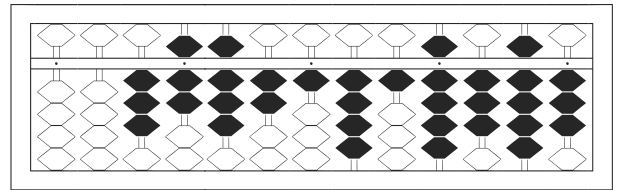
3 / 208,359,096,425



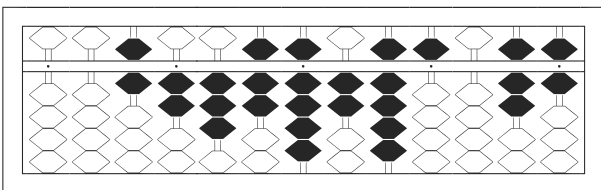
4 / 407,412,118,887



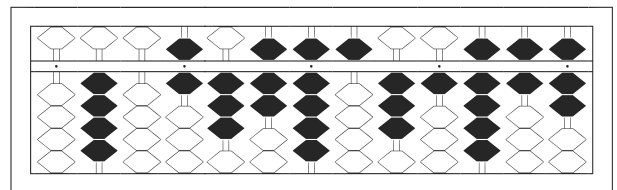
5 / 3,508,847,117



6 / 37,821,419,393



7 / 62,379,295,076



8 / 406,379,531,967

【そろばんの珠読み】

10桁から12桁 8問

No.010

名前 _____

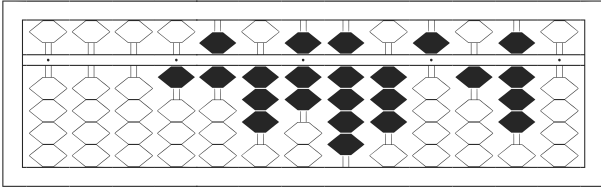
★たま よ すうじ かそろばんの珠を読んで数字で書きましょう。

分 秒

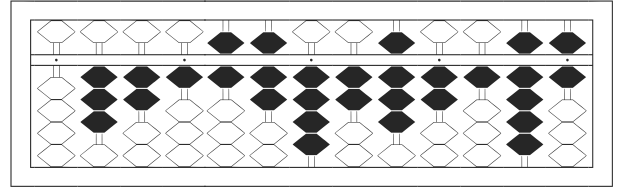
みぎはし けた いち くらい
(※右端の桁を一の位とします)

正解数

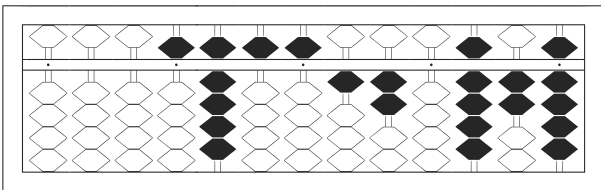
/ 8



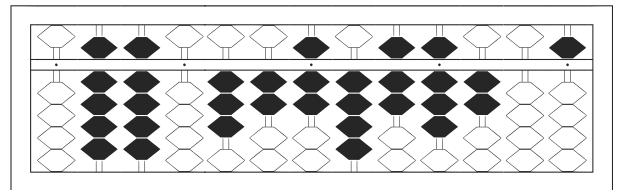
1 / 1,637,935,180



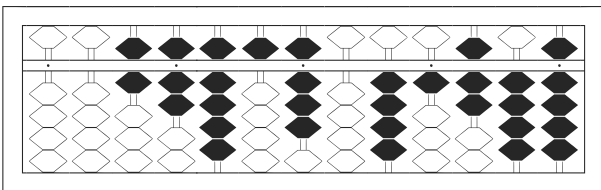
2 / 321,674,282,196



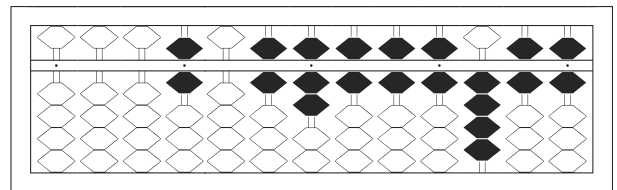
3 / 5,955,120,929



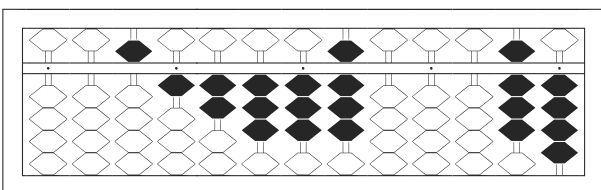
4 / 990,327,478,205



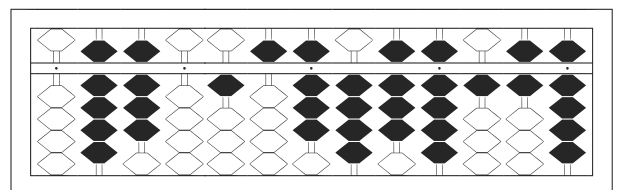
5 / 67,958,041,749



6 / 6,067,666,466



7 / 51,233,800,084



8 / 980,158,489,169