

# 【そろばんの珠読み】

10桁から12桁 8問

No.001

名前 \_\_\_\_\_

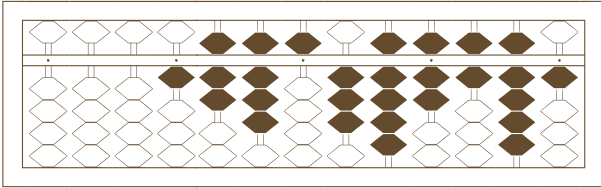
★たま よ すうじ かそろばんの珠を読んで数字で書きましょう。

分 秒

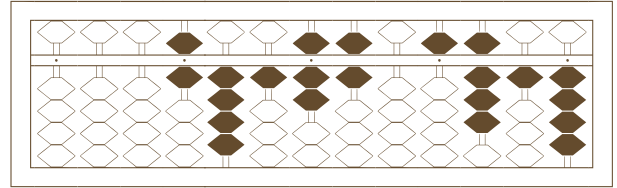
みぎはし けた いち くらい  
(※右端の桁を一の位とします)

正解数

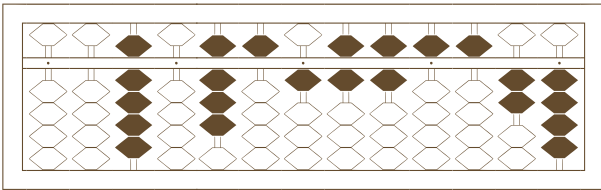
/ 8



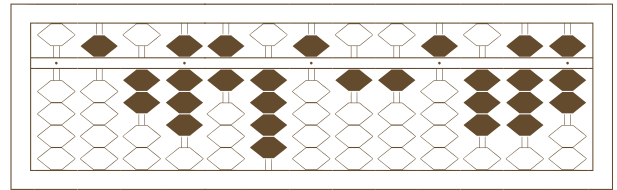
/



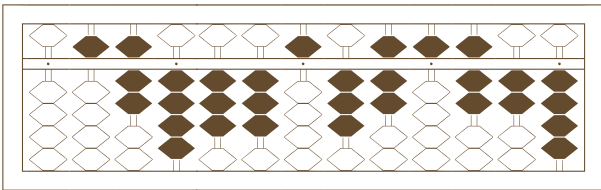
2



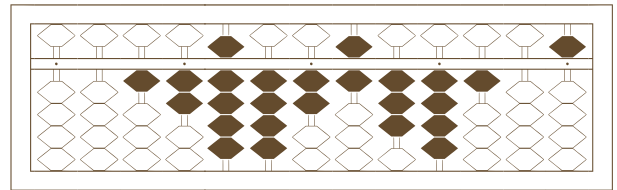
3



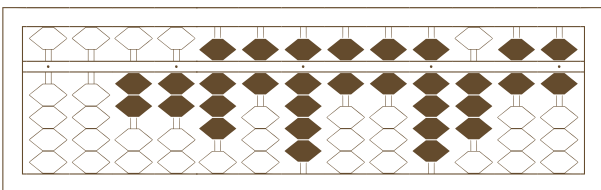
4



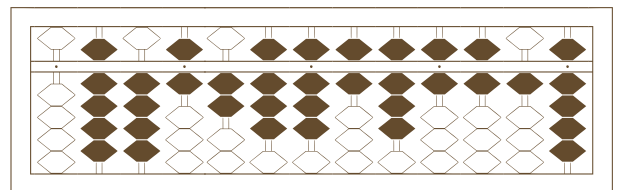
5



6



7



8

# 【そろばんの珠読み】

10桁から12桁 8問

No.002

名前 \_\_\_\_\_

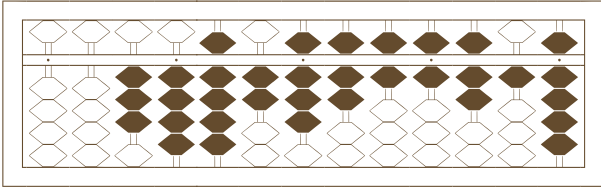
★たま よ すうじ かそろばんの珠を読んで数字で書きましょう。

分 秒

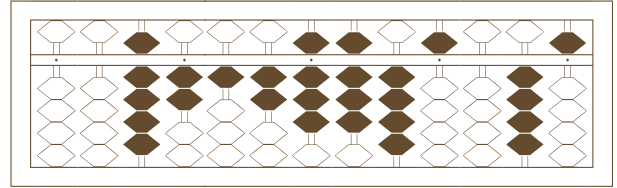
みぎはし けた いち くらい  
(※右端の桁を一の位とします)

正解数

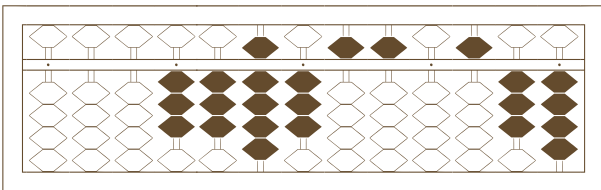
/ 8



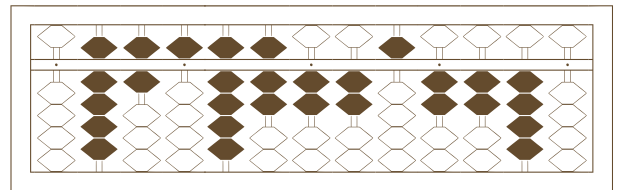
1



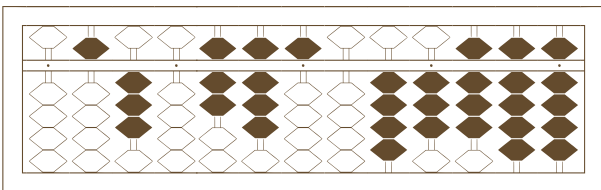
2



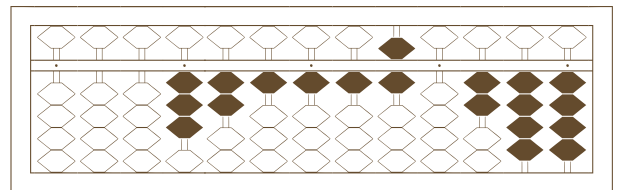
3



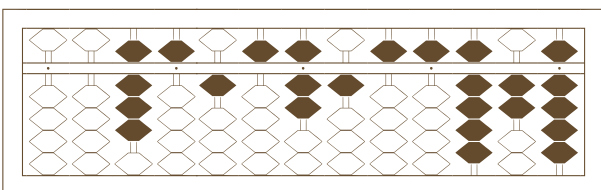
4



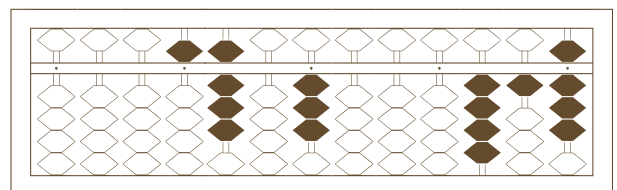
5



6



7



8

# 【そろばんの珠読み】

10桁から12桁 8問

No.003

名前 \_\_\_\_\_

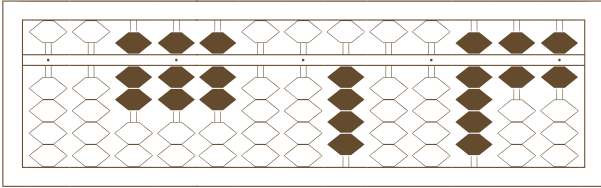
★たま よ すうじ かそろばんの珠を読んで数字で書きましょう。

分 秒

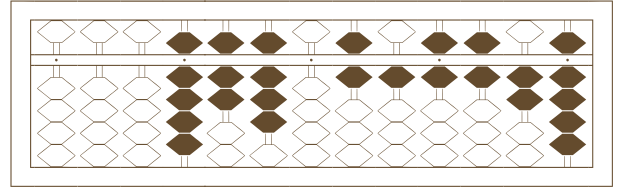
みぎはし けた いち くらい  
(※右端の桁を一の位とします)

正解数

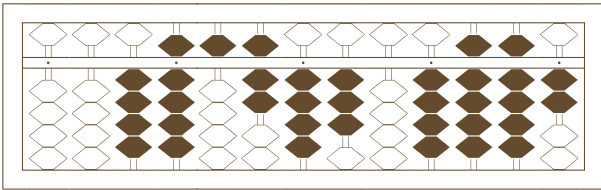
/ 8



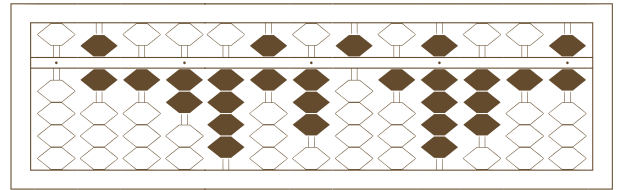
/



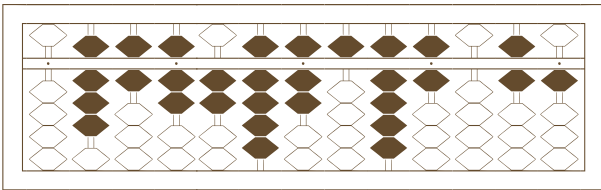
2



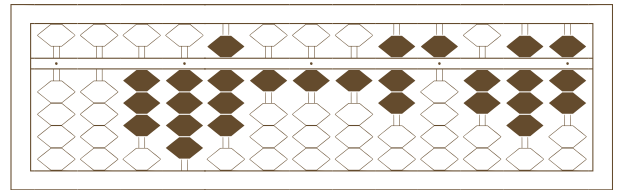
3



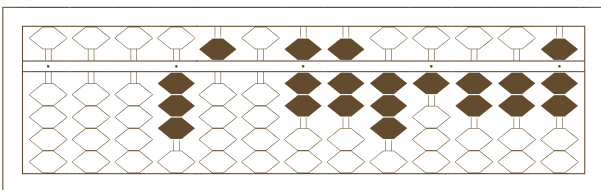
4



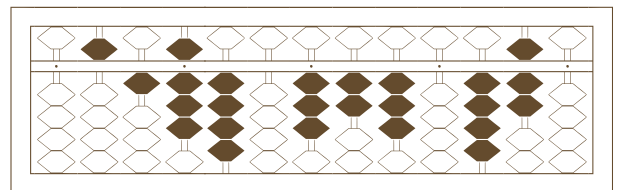
5



6



7



8

# 【そろばんの珠読み】

10桁から12桁 8問

No.004

名前 \_\_\_\_\_

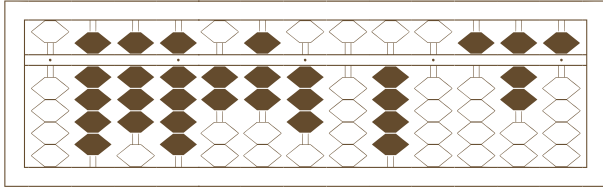
★たま よ すうじ かそろばんの珠を読んで数字で書きましょう。

分 秒

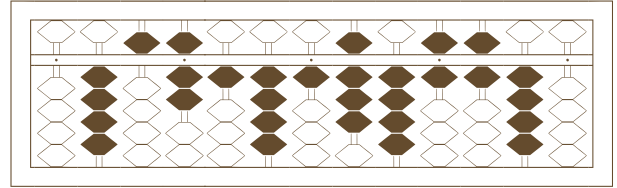
みぎはし けた いち くらい  
(※右端の桁を一の位とします)

正解数

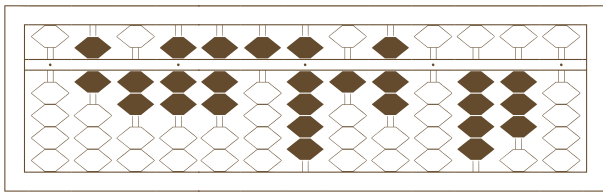
/ 8




1



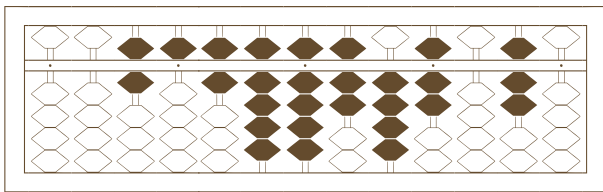
2



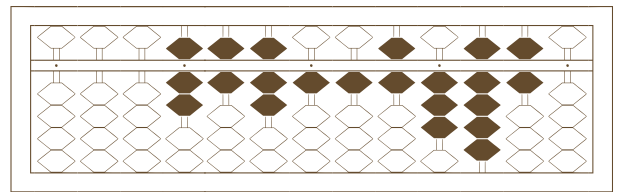
3



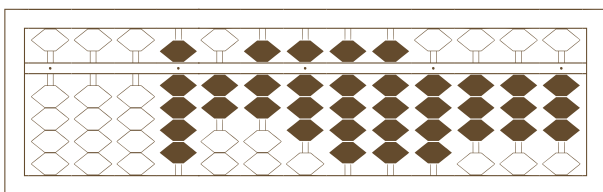
4



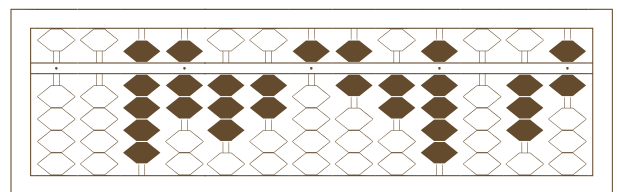
5



6



7



8

# 【そろばんの珠読み】

10桁から12桁 8問

No.005

名前 \_\_\_\_\_

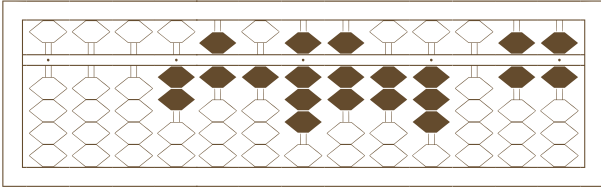
★たま よ すうじ かそろばんの珠を読んで数字で書きましょう。

分 秒

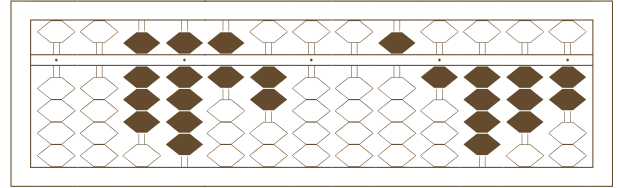
みざはし けた いち くらい  
(※右端の桁を一の位とします)

正解数

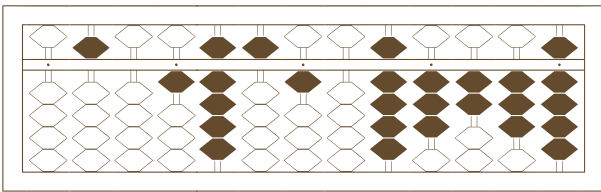
/ 8



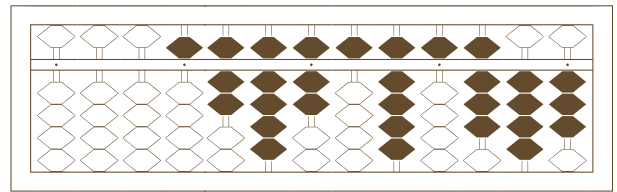
1



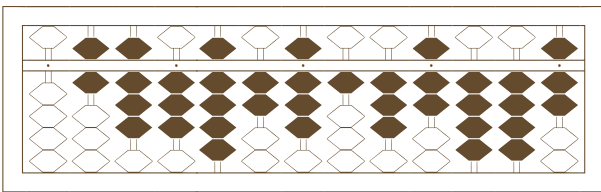
2



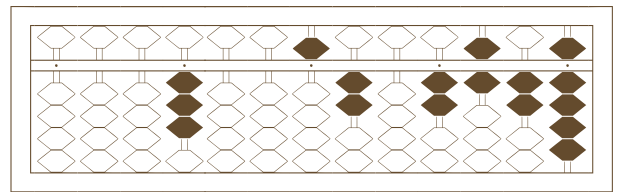
3



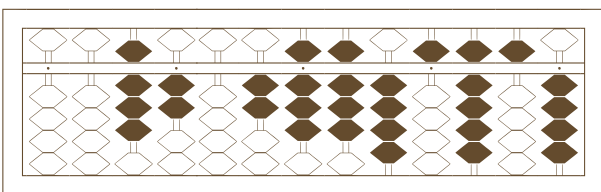
4



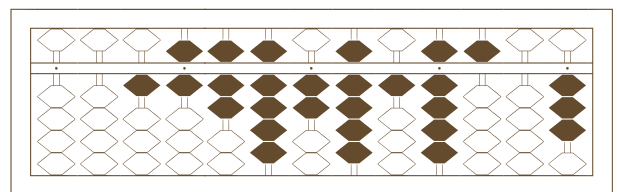
5



6



7



8

# 【そろばんの珠読み】

10桁から12桁 8問

No.006

名前 \_\_\_\_\_

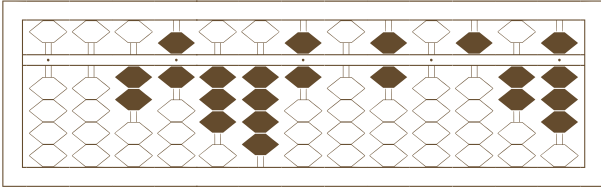
★たま よ すうじ かそろばんの珠を読んで数字で書きましょう。

分 秒

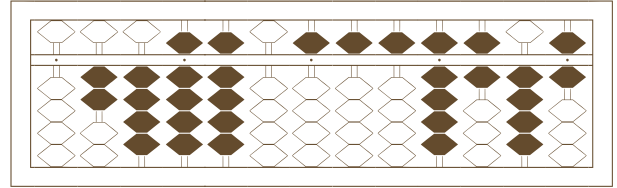
みぎはし けた いち くらい  
(※右端の桁を一の位とします)

正解数

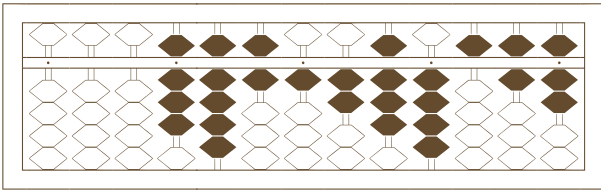
/ 8



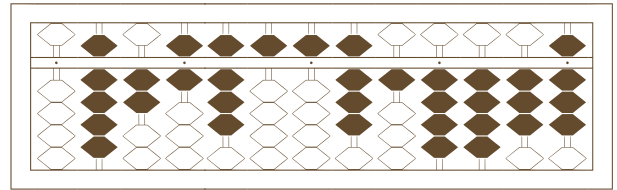
1



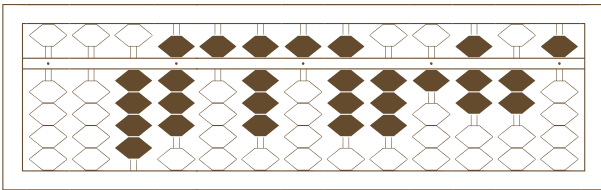
2



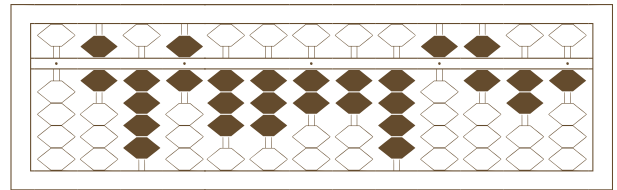
3



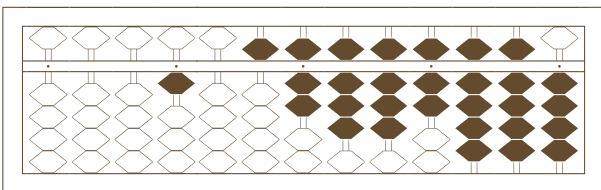
4



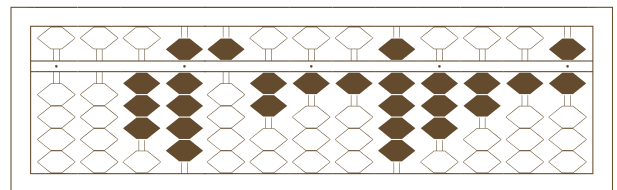
5



6



7



8

# 【そろばんの珠読み】

10桁から12桁 8問

No.007

名前 \_\_\_\_\_

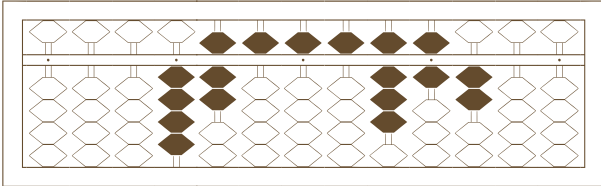
★たま よ すうじ かそろばんの珠を読んで数字で書きましょう。

分 秒

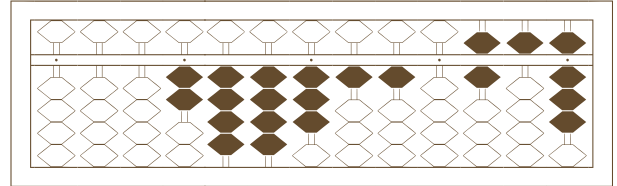
みぎはし けた いち くらい  
(※右端の桁を一の位とします)

正解数

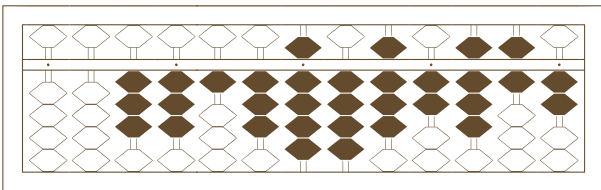
/ 8



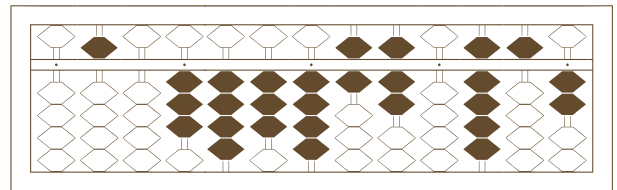
1



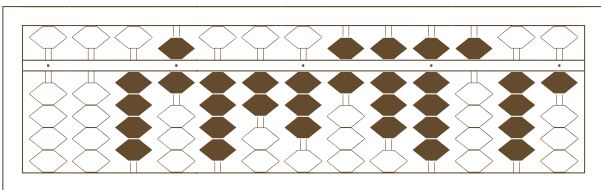
2



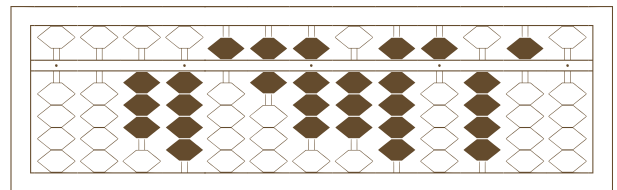
3



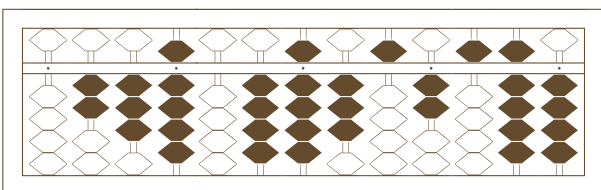
4



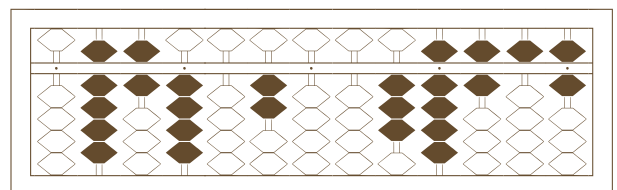
5



6



7



8

# 【そろばんの珠読み】

10桁から12桁 8問

No.008

名前 \_\_\_\_\_

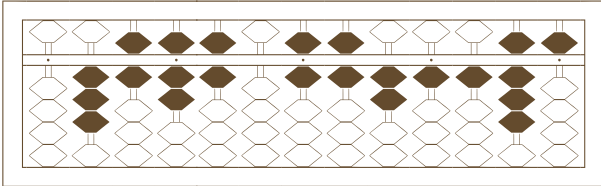
★たま よ すうじ かそろばんの珠を読んで数字で書きましょう。

分 秒

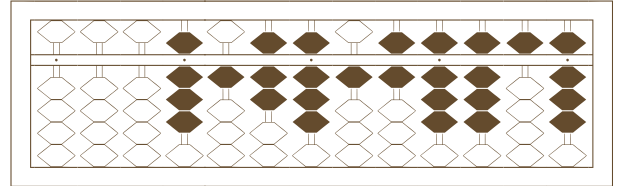
みぎはし けた いち くらい  
(※右端の桁を一の位とします)

正解数

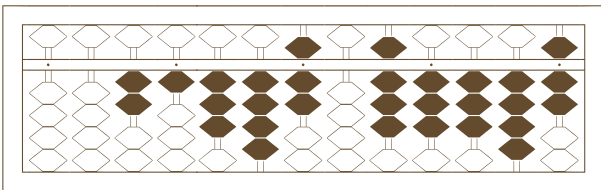
/ 8



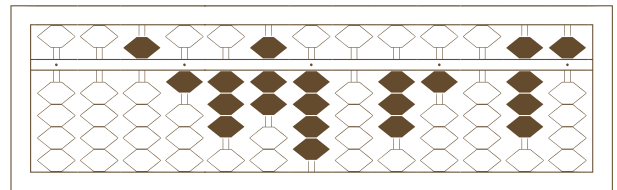
1



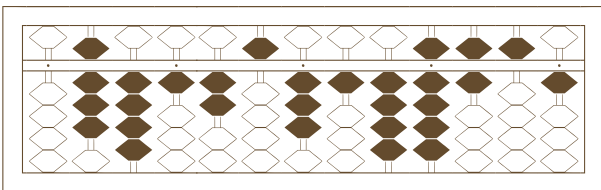
2



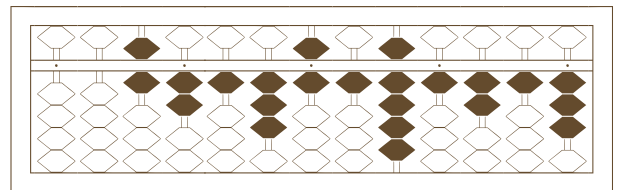
3



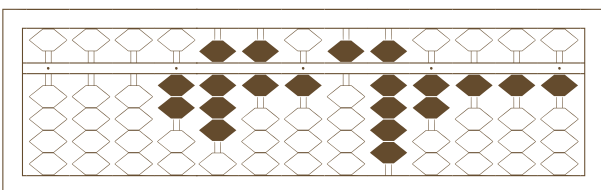
4



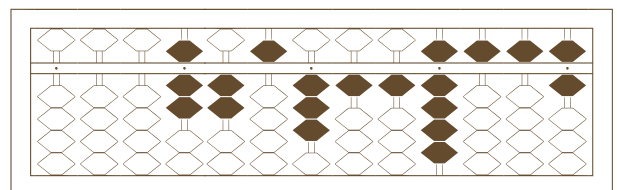
5



6



7



8



# 【そろばんの珠読み】

10桁から12桁 8問

No.009

名前 \_\_\_\_\_

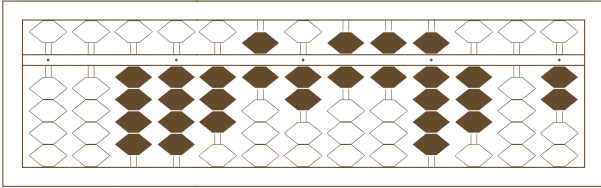
★たま よ すうじ かそろばんの珠を読んで数字で書きましょう。

分 秒

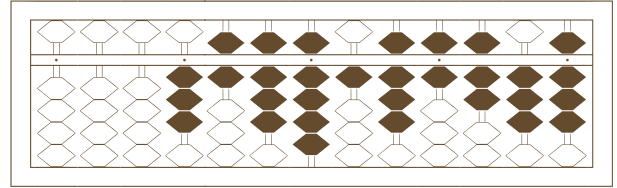
みぎはし けた いち くらい  
(※右端の桁を一の位とします)

正解数

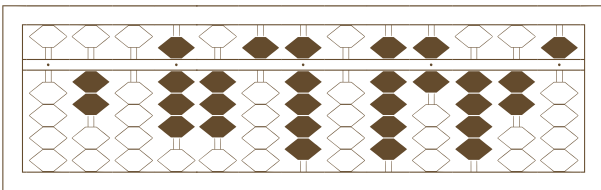
/ 8



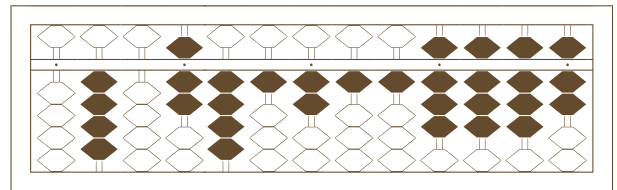
/



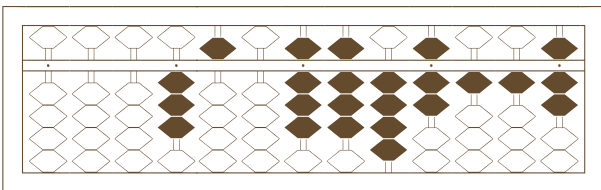
2



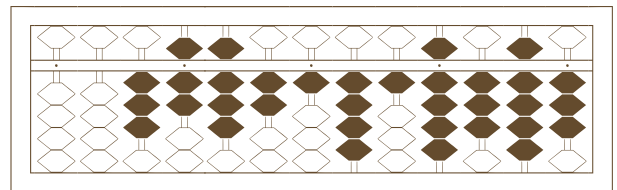
3



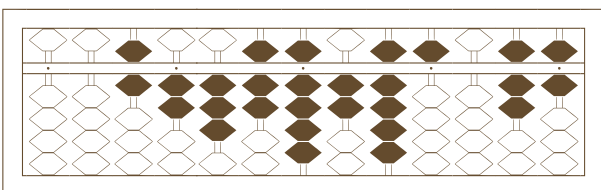
4



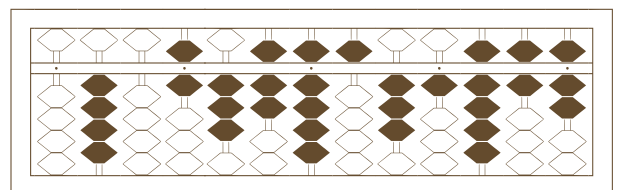
5



6



7



8

# 【そろばんの珠読み】

10桁から12桁 8問

No.010

名前 \_\_\_\_\_

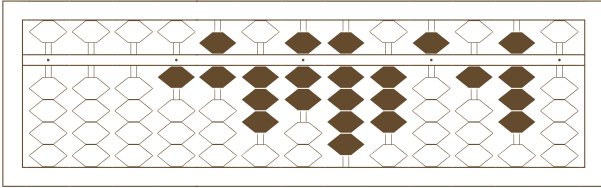
★たま よ すうじ かそろばんの珠を読んで数字で書きましょう。

分 秒

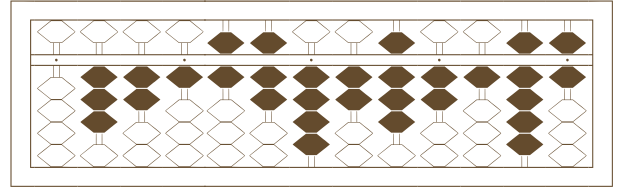
みぎはし けた いち くらい  
(※右端の桁を一の位とします)

正解数

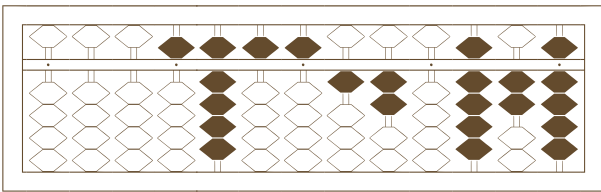
/ 8



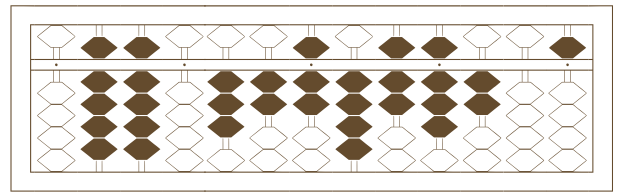
1



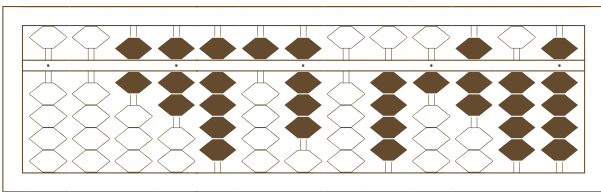
2



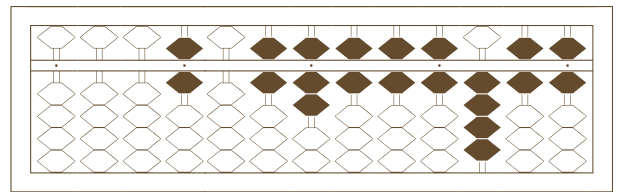
3



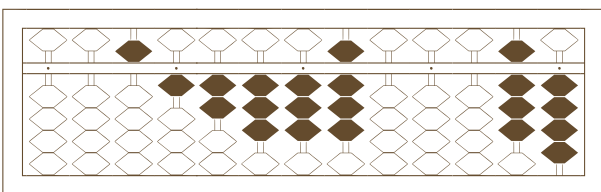
4



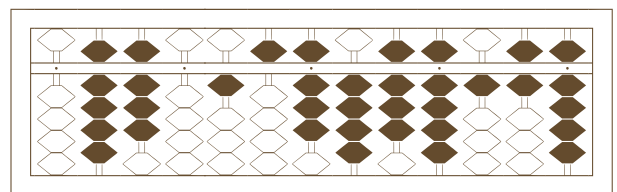
5



6



7



8