

【イラスト計算 たしざん】

2口 20まで

名前 _____










No.001



けいさんしき たいおうひょう かず あ けいさん
 ★計算式のイラストに対応表の数を当てはめて計算しましょう



分 秒



--



点

 = 6	 = 4	 = 1
 = 5	 = 3	 = 2
 = 9	 = 8	 = 7

①  +  =



⑥  +  =



②  +  =



⑦  +  =



③  +  =

⑧  +  =

④  +  =

⑨  +  =

⑤  +  =

⑩  +  =

【イラスト計算 たしざん】

2口 20まで










名前 _____




No.001

★計算式のイラストに対応表の数を当てはめて計算しましょう

分 秒

点

 = 6	 = 4	 = 1
 = 5	 = 3	 = 2
 = 9	 = 8	 = 7

- | | |
|--------------------------------------------------------------------------------------------------------------------------------------------------------------------------------------------------------------------------------------------------------------------------------------------------------------------------------------------------------------------------------------------------------------------------------------------------------------------------------------------------------------------------------------------------------------------------------------------------------------------------------------------------------------------------------------------------------------------------------------------------------------------------------------------------------------------------------------------------------------------------------------------------------------------------------------------------------------------------------------------------------|-------------------------------------------------------------------------------------------------------------------------------------------------------------------------------------------------------------------------------------------------------------------------------------------------------------------------------------------------------------------------------------------------------------------------------------------------------------------------------------------------------------------------------------------------------------------------------------------------------------------------------------------------------------------------------------------------------------------------------------------------------------------------------------------------------------------------------------------------------------------------------------------------------------------------------------------------------------------------------------------------------------------------|
| <p>①  +  = 13
9 + 4</p> <p>②  +  = 4
2 + 2</p> <p>③  +  = 14
5 + 9</p> <p>④  +  = 9
6 + 3</p> <p>⑤  +  = 5
4 + 1</p> | <p>⑥  +  = 14
7 + 7</p> <p>⑦  +  = 12
8 + 4</p> <p>⑧  +  = 10
4 + 6</p> <p>⑨  +  = 8
6 + 2</p> <p>⑩  +  = 14
9 + 5</p> |
|--------------------------------------------------------------------------------------------------------------------------------------------------------------------------------------------------------------------------------------------------------------------------------------------------------------------------------------------------------------------------------------------------------------------------------------------------------------------------------------------------------------------------------------------------------------------------------------------------------------------------------------------------------------------------------------------------------------------------------------------------------------------------------------------------------------------------------------------------------------------------------------------------------------------------------------------------------------------------------------------------------|-------------------------------------------------------------------------------------------------------------------------------------------------------------------------------------------------------------------------------------------------------------------------------------------------------------------------------------------------------------------------------------------------------------------------------------------------------------------------------------------------------------------------------------------------------------------------------------------------------------------------------------------------------------------------------------------------------------------------------------------------------------------------------------------------------------------------------------------------------------------------------------------------------------------------------------------------------------------------------------------------------------------------|