

【イラスト計算 かけざん】

2回 九九のはんい

名前 _____










No.001




★計算式のイラストに対応表の数を当てはめて計算しましょう

分 秒

--

点

 = 6	 = 7	 = 1
 = 5	 = 9	 = 3
 = 2	 = 8	 = 4

- | | |
|---------------------------------------------------------------------------------------------------------------------------------------------------------------------------------------------------------------------------------------------------------------------------------------------------------------------------------------------------------------------------------------------------------------------------------------------------------------------------------------------------------------------------------------------------------------------------------------------------------------------------------------------------------------------------------------------------------------------------------------------------------------------------------------------------------------------------------------------------------------------------------------------------------------------------------------------------------------------------------------------------------|-------------------------------------------------------------------------------------------------------------------------------------------------------------------------------------------------------------------------------------------------------------------------------------------------------------------------------------------------------------------------------------------------------------------------------------------------------------------------------------------------------------------------------------------------------------------------------------------------------------------------------------------------------------------------------------------------------------------------------------------------------------------------------------------------------------------------------------------------------------------------------------------------------------------------------------------------------------------------------------------------------------------------|
| <p>①  ×  = 45
5 × 9</p> <p>②  ×  = 9
3 × 3</p> <p>③  ×  = 3
3 × 1</p> <p>④  ×  = 42
7 × 6</p> <p>⑤  ×  = 40
5 × 8</p> | <p>⑥  ×  = 9
9 × 1</p> <p>⑦  ×  = 24
8 × 3</p> <p>⑧  ×  = 15
3 × 5</p> <p>⑨  ×  = 40
8 × 5</p> <p>⑩  ×  = 24
6 × 4</p> |
|---------------------------------------------------------------------------------------------------------------------------------------------------------------------------------------------------------------------------------------------------------------------------------------------------------------------------------------------------------------------------------------------------------------------------------------------------------------------------------------------------------------------------------------------------------------------------------------------------------------------------------------------------------------------------------------------------------------------------------------------------------------------------------------------------------------------------------------------------------------------------------------------------------------------------------------------------------------------------------------------------------|-------------------------------------------------------------------------------------------------------------------------------------------------------------------------------------------------------------------------------------------------------------------------------------------------------------------------------------------------------------------------------------------------------------------------------------------------------------------------------------------------------------------------------------------------------------------------------------------------------------------------------------------------------------------------------------------------------------------------------------------------------------------------------------------------------------------------------------------------------------------------------------------------------------------------------------------------------------------------------------------------------------------------|

【イラスト計算 かけざん】

2回 九九のはんい

名前 _____










No.002

★計算式のイラストに対応表の数を当てはめて計算しましょう

分 秒

--

点

 = 2	 = 3	 = 5
 = 1	 = 7	 = 6
 = 8	 = 4	 = 9

- | | |
|---------------------------------------------------------------------------------------------------------------------------------------------------------------------------------------------------|------------------------------------------------------------------------------------------------------------------------------------------------------------------------------------------------------|
| <p>①  ×  = 16
8 × 2</p> | <p>⑥  ×  = 18
3 × 6</p> |
| <p>②  ×  = 63
9 × 7</p> | <p>⑦  ×  = 3
3 × 1</p> |
| <p>③  ×  = 5
5 × 1</p> | <p>⑧  ×  = 14
7 × 2</p> |
| <p>④  ×  = 6
3 × 2</p> | <p>⑨  ×  = 28
4 × 7</p> |
| <p>⑤  ×  = 21
7 × 3</p> | <p>⑩  ×  = 4
2 × 2</p> |

【イラスト計算 かけざん】

2口 九九のはんい

名前 _____










No.003


★計算式のイラストに対応表の数を当てはめて計算しましょう

分 秒

--

点

 = 7	 = 1	 = 3
 = 5	 = 4	 = 8
 = 2	 = 6	 = 9

- | | |
|-----------------------------------------------------------------------------------------------------------------------------------------------------------------------------------------------------------------------------------------------------------------------------------------------------------------------------------------------------------------------------------------------------------------------------------------------------------------------------------------------------------------------------------------------------------------------------------------------------------------------------------------------------------------------------------------------------------------------------------------------------------------------------------------------------------------------------------------------------------------------------------------------------------------------------------------------------------------------------------------------------------|------------------------------------------------------------------------------------------------------------------------------------------------------------------------------------------------------------------------------------------------------------------------------------------------------------------------------------------------------------------------------------------------------------------------------------------------------------------------------------------------------------------------------------------------------------------------------------------------------------------------------------------------------------------------------------------------------------------------------------------------------------------------------------------------------------------------------------------------------------------------------------------------------------------------------------------------------------------------------------------------------------------------|
| <p>①  ×  = 72
9 × 8</p> <p>②  ×  = 10
5 × 2</p> <p>③  ×  = 24
4 × 6</p> <p>④  ×  = 30
6 × 5</p> <p>⑤  ×  = 18
3 × 6</p> | <p>⑥  ×  = 7
7 × 1</p> <p>⑦  ×  = 9
3 × 3</p> <p>⑧  ×  = 56
8 × 7</p> <p>⑨  ×  = 20
5 × 4</p> <p>⑩  ×  = 16
8 × 2</p> |
|-----------------------------------------------------------------------------------------------------------------------------------------------------------------------------------------------------------------------------------------------------------------------------------------------------------------------------------------------------------------------------------------------------------------------------------------------------------------------------------------------------------------------------------------------------------------------------------------------------------------------------------------------------------------------------------------------------------------------------------------------------------------------------------------------------------------------------------------------------------------------------------------------------------------------------------------------------------------------------------------------------------|------------------------------------------------------------------------------------------------------------------------------------------------------------------------------------------------------------------------------------------------------------------------------------------------------------------------------------------------------------------------------------------------------------------------------------------------------------------------------------------------------------------------------------------------------------------------------------------------------------------------------------------------------------------------------------------------------------------------------------------------------------------------------------------------------------------------------------------------------------------------------------------------------------------------------------------------------------------------------------------------------------------------|

【イラスト計算 かけざん】

2口 九九のはんい

名前 _____










No.004

★計算式のイラストに対応表の数を当てはめて計算しましょう

分 秒

--

点

 = 3	 = 5	 = 2
 = 6	 = 1	 = 8
 = 4	 = 9	 = 7

- | | |
|---------------------------------------------------------------------------------------------------------------------------------------------------------------------------------------------------|------------------------------------------------------------------------------------------------------------------------------------------------------------------------------------------------------|
| <p>①  ×  = 45
9 × 5</p> | <p>⑥  ×  = 40
8 × 5</p> |
| <p>②  ×  = 49
7 × 7</p> | <p>⑦  ×  = 6
2 × 3</p> |
| <p>③  ×  = 24
6 × 4</p> | <p>⑧  ×  = 42
7 × 6</p> |
| <p>④  ×  = 20
5 × 4</p> | <p>⑨  ×  = 21
3 × 7</p> |
| <p>⑤  ×  = 30
6 × 5</p> | <p>⑩  ×  = 8
1 × 8</p> |

【イラスト計算 かけざん】

2回 九九のはんい

名前 _____










No.005














★計算式のイラストに対応表の数を当てはめて計算しましょう

分 秒

--

点

 = 3	 = 1	 = 8
 = 4	 = 9	 = 2
 = 6	 = 5	 = 7

- | | |
|----------------------------------------------------------------------------------------------------------------------------------------------------------------------------------------------------------------------------------------------------------------------------------------------------------------------------------------------------------------------------------------------------------------------------------------------------------------------------------------------------------------------------------------------------------------------------------------------------------------------------------------------------------------------------------------------------------------------------------------------------------------------------------------------------------------------------------------------------------------------------------------------------------------------------------------------------------------------------------------------------------|-----------------------------------------------------------------------------------------------------------------------------------------------------------------------------------------------------------------------------------------------------------------------------------------------------------------------------------------------------------------------------------------------------------------------------------------------------------------------------------------------------------------------------------------------------------------------------------------------------------------------------------------------------------------------------------------------------------------------------------------------------------------------------------------------------------------------------------------------------------------------------------------------------------------------------------------------------------------------------------------------------------------------|
| <p>①  ×  = 36
4 × 9</p> <p>②  ×  = 18
2 × 9</p> <p>③  ×  = 54
6 × 9</p> <p>④  ×  = 8
2 × 4</p> <p>⑤  ×  = 21
3 × 7</p> | <p>⑥  ×  = 4
4 × 1</p> <p>⑦  ×  = 3
1 × 3</p> <p>⑧  ×  = 18
3 × 6</p> <p>⑨  ×  = 8
4 × 2</p> <p>⑩  ×  = 10
2 × 5</p> |
|----------------------------------------------------------------------------------------------------------------------------------------------------------------------------------------------------------------------------------------------------------------------------------------------------------------------------------------------------------------------------------------------------------------------------------------------------------------------------------------------------------------------------------------------------------------------------------------------------------------------------------------------------------------------------------------------------------------------------------------------------------------------------------------------------------------------------------------------------------------------------------------------------------------------------------------------------------------------------------------------------------|-----------------------------------------------------------------------------------------------------------------------------------------------------------------------------------------------------------------------------------------------------------------------------------------------------------------------------------------------------------------------------------------------------------------------------------------------------------------------------------------------------------------------------------------------------------------------------------------------------------------------------------------------------------------------------------------------------------------------------------------------------------------------------------------------------------------------------------------------------------------------------------------------------------------------------------------------------------------------------------------------------------------------|

【イラスト計算 かけざん】

2回 九九のはんい

名前 _____










No.006


★計算式のイラストに対応表の数を当てはめて計算しましょう

分 秒

--

点

 = 3	 = 6	 = 8
 = 9	 = 1	 = 5
 = 7	 = 4	 = 2

- | | |
|-----------------------------------------------------------------------------------------------------------------------------------------------------------------------------------------------------------------------------------------------------------------------------------------------------------------------------------------------------------------------------------------------------------------------------------------------------------------------------------------------------------------------------------------------------------------------------------------------------------------------------------------------------------------------------------------------------------------------------------------------------------------------------------------------------------------------------------------------------------------------------------------------------------------------------------------------------------------------------------------------------------|------------------------------------------------------------------------------------------------------------------------------------------------------------------------------------------------------------------------------------------------------------------------------------------------------------------------------------------------------------------------------------------------------------------------------------------------------------------------------------------------------------------------------------------------------------------------------------------------------------------------------------------------------------------------------------------------------------------------------------------------------------------------------------------------------------------------------------------------------------------------------------------------------------------------------------------------------------------------------------------------------------------------|
| <p>①  ×  = 20
5 × 4</p> <p>②  ×  = 63
7 × 9</p> <p>③  ×  = 56
8 × 7</p> <p>④  ×  = 16
4 × 4</p> <p>⑤  ×  = 16
8 × 2</p> | <p>⑥  ×  = 21
7 × 3</p> <p>⑦  ×  = 6
3 × 2</p> <p>⑧  ×  = 28
4 × 7</p> <p>⑨  ×  = 4
4 × 1</p> <p>⑩  ×  = 12
3 × 4</p> |
|-----------------------------------------------------------------------------------------------------------------------------------------------------------------------------------------------------------------------------------------------------------------------------------------------------------------------------------------------------------------------------------------------------------------------------------------------------------------------------------------------------------------------------------------------------------------------------------------------------------------------------------------------------------------------------------------------------------------------------------------------------------------------------------------------------------------------------------------------------------------------------------------------------------------------------------------------------------------------------------------------------------|------------------------------------------------------------------------------------------------------------------------------------------------------------------------------------------------------------------------------------------------------------------------------------------------------------------------------------------------------------------------------------------------------------------------------------------------------------------------------------------------------------------------------------------------------------------------------------------------------------------------------------------------------------------------------------------------------------------------------------------------------------------------------------------------------------------------------------------------------------------------------------------------------------------------------------------------------------------------------------------------------------------------|

【イラスト計算 かけざん】

2回 九九のはんい

名前 _____










No.007





















★計算式のイラストに対応表の数を当てはめて計算しましょう

分 秒

--

点

 = 7	 = 4	 = 5
 = 1	 = 2	 = 3
 = 9	 = 6	 = 8

- | | |
|---------------------------------------------------------------------------------------------------------------------------------------------------------------------------------------------------------------------------------------------------------------------------------------------------------------------------------------------------------------------------------------------------------------------------------------------------------------------------------------------------------------------------------------------------------------------------------------------------------------------------------------------------------------------------------------------------------------------------------------------------------------------------------------------------------------------------------------------------------------------------------------------------------------------------------------------------------------------------------------------------------|-------------------------------------------------------------------------------------------------------------------------------------------------------------------------------------------------------------------------------------------------------------------------------------------------------------------------------------------------------------------------------------------------------------------------------------------------------------------------------------------------------------------------------------------------------------------------------------------------------------------------------------------------------------------------------------------------------------------------------------------------------------------------------------------------------------------------------------------------------------------------------------------------------------------------------------------------------------------------------------------------------------------------|
| <p>①  ×  = 42
6 × 7</p> <p>②  ×  = 3
3 × 1</p> <p>③  ×  = 32
4 × 8</p> <p>④  ×  = 45
9 × 5</p> <p>⑤  ×  = 6
2 × 3</p> | <p>⑥  ×  = 6
6 × 1</p> <p>⑦  ×  = 14
7 × 2</p> <p>⑧  ×  = 72
8 × 9</p> <p>⑨  ×  = 18
6 × 3</p> <p>⑩  ×  = 27
3 × 9</p> |
|---------------------------------------------------------------------------------------------------------------------------------------------------------------------------------------------------------------------------------------------------------------------------------------------------------------------------------------------------------------------------------------------------------------------------------------------------------------------------------------------------------------------------------------------------------------------------------------------------------------------------------------------------------------------------------------------------------------------------------------------------------------------------------------------------------------------------------------------------------------------------------------------------------------------------------------------------------------------------------------------------------|-------------------------------------------------------------------------------------------------------------------------------------------------------------------------------------------------------------------------------------------------------------------------------------------------------------------------------------------------------------------------------------------------------------------------------------------------------------------------------------------------------------------------------------------------------------------------------------------------------------------------------------------------------------------------------------------------------------------------------------------------------------------------------------------------------------------------------------------------------------------------------------------------------------------------------------------------------------------------------------------------------------------------|

【イラスト計算 かけざん】

2回 九九のはんい

名前 _____










No.008





















★計算式のイラストに対応表の数を当てはめて計算しましょう

分 秒

--

点

 = 6	 = 2	 = 9
 = 8	 = 4	 = 1
 = 5	 = 3	 = 7

- | | |
|---------------------------------------------------------------------------------------------------------------------------------------------------------------------------------------------------|------------------------------------------------------------------------------------------------------------------------------------------------------------------------------------------------------|
| <p>①  ×  = 21
7 × 3</p> | <p>⑥  ×  = 27
3 × 9</p> |
| <p>②  ×  = 40
5 × 8</p> | <p>⑦  ×  = 7
1 × 7</p> |
| <p>③  ×  = 72
9 × 8</p> | <p>⑧  ×  = 20
5 × 4</p> |
| <p>④  ×  = 24
6 × 4</p> | <p>⑨  ×  = 24
8 × 3</p> |
| <p>⑤  ×  = 2
1 × 2</p> | <p>⑩  ×  = 42
7 × 6</p> |

【イラスト計算 かけざん】

2口 九九のはんい

名前 _____










No.009





















★計算式のイラストに対応表の数を当てはめて計算しましょう

分 秒

--

点

 = 2	 = 9	 = 4
 = 1	 = 3	 = 6
 = 7	 = 5	 = 8

- | | |
|----------------------------------------------------------------------------------------------------------------------------------------------------------------------------------------------------------------------------------------------------------------------------------------------------------------------------------------------------------------------------------------------------------------------------------------------------------------------------------------------------------------------------------------------------------------------------------------------------------------------------------------------------------------------------------------------------------------------------------------------------------------------------------------------------------------------------------------------------------------------------------------------------------------------------------------------------------------------------------------------------------|-------------------------------------------------------------------------------------------------------------------------------------------------------------------------------------------------------------------------------------------------------------------------------------------------------------------------------------------------------------------------------------------------------------------------------------------------------------------------------------------------------------------------------------------------------------------------------------------------------------------------------------------------------------------------------------------------------------------------------------------------------------------------------------------------------------------------------------------------------------------------------------------------------------------------------------------------------------------------------------------------------------------------|
| <p>①  ×  = 8
8 × 1</p> <p>②  ×  = 21
3 × 7</p> <p>③  ×  = 63
7 × 9</p> <p>④  ×  = 18
9 × 2</p> <p>⑤  ×  = 16
4 × 4</p> | <p>⑥  ×  = 8
2 × 4</p> <p>⑦  ×  = 49
7 × 7</p> <p>⑧  ×  = 36
6 × 6</p> <p>⑨  ×  = 36
4 × 9</p> <p>⑩  ×  = 18
2 × 9</p> |
|----------------------------------------------------------------------------------------------------------------------------------------------------------------------------------------------------------------------------------------------------------------------------------------------------------------------------------------------------------------------------------------------------------------------------------------------------------------------------------------------------------------------------------------------------------------------------------------------------------------------------------------------------------------------------------------------------------------------------------------------------------------------------------------------------------------------------------------------------------------------------------------------------------------------------------------------------------------------------------------------------------|-------------------------------------------------------------------------------------------------------------------------------------------------------------------------------------------------------------------------------------------------------------------------------------------------------------------------------------------------------------------------------------------------------------------------------------------------------------------------------------------------------------------------------------------------------------------------------------------------------------------------------------------------------------------------------------------------------------------------------------------------------------------------------------------------------------------------------------------------------------------------------------------------------------------------------------------------------------------------------------------------------------------------|

【イラスト計算 かけざん】

2回 九九のはんい










名前 _____



No.010

★計算式のイラストに対応表の数を当てはめて計算しましょう

分 秒

点

 = 8	 = 9	 = 7
 = 1	 = 2	 = 3
 = 6	 = 5	 = 4

- | | |
|----------------------------------------------------------------------------------------------------------------------------------------------------------------------------------------------------------------------------------------------------------------------------------------------------------------------------------------------------------------------------------------------------------------------------------------------------------------------------------------------------------------------------------------------------------------------------------------------------------------------------------------------------------------------------------------------------------------------------------------------------------------------------------------------------------------------------------------------------------------------------------------------------------------------------------------------------------------------------------------------------------|-----------------------------------------------------------------------------------------------------------------------------------------------------------------------------------------------------------------------------------------------------------------------------------------------------------------------------------------------------------------------------------------------------------------------------------------------------------------------------------------------------------------------------------------------------------------------------------------------------------------------------------------------------------------------------------------------------------------------------------------------------------------------------------------------------------------------------------------------------------------------------------------------------------------------------------------------------------------------------------------------------------------------|
| <p>①  ×  = 21
3 × 7</p> <p>②  ×  = 72
8 × 9</p> <p>③  ×  = 81
9 × 9</p> <p>④  ×  = 6
3 × 2</p> <p>⑤  ×  = 28
7 × 4</p> | <p>⑥  ×  = 8
2 × 4</p> <p>⑦  ×  = 16
8 × 2</p> <p>⑧  ×  = 24
8 × 3</p> <p>⑨  ×  = 9
1 × 9</p> <p>⑩  ×  = 6
1 × 6</p> |
|----------------------------------------------------------------------------------------------------------------------------------------------------------------------------------------------------------------------------------------------------------------------------------------------------------------------------------------------------------------------------------------------------------------------------------------------------------------------------------------------------------------------------------------------------------------------------------------------------------------------------------------------------------------------------------------------------------------------------------------------------------------------------------------------------------------------------------------------------------------------------------------------------------------------------------------------------------------------------------------------------------|-----------------------------------------------------------------------------------------------------------------------------------------------------------------------------------------------------------------------------------------------------------------------------------------------------------------------------------------------------------------------------------------------------------------------------------------------------------------------------------------------------------------------------------------------------------------------------------------------------------------------------------------------------------------------------------------------------------------------------------------------------------------------------------------------------------------------------------------------------------------------------------------------------------------------------------------------------------------------------------------------------------------------|